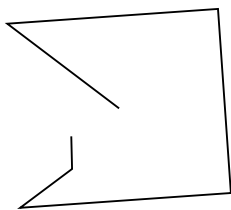





Determina se le figure rappresentate sono "Triangolo", "Quadrato", "Rettangolo", "Esagono" o "Altro".

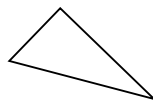
1)



2)



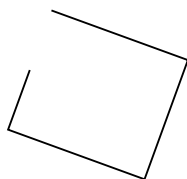
3)



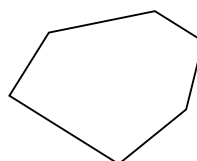
4)



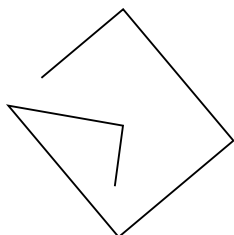
5)



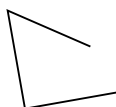
6)



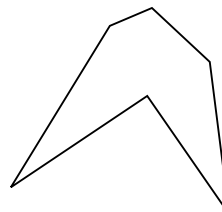
7)



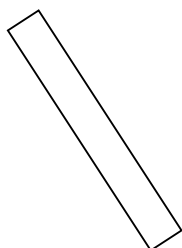
8)



9)



10)



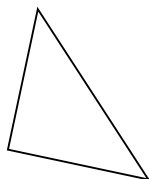
11)



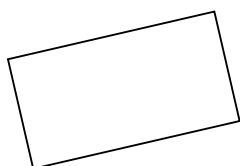
12)



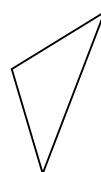
13)



14)



15)



Risposte

1. \_\_\_\_\_

2. \_\_\_\_\_

3. \_\_\_\_\_

4. \_\_\_\_\_

5. \_\_\_\_\_

6. \_\_\_\_\_

7. \_\_\_\_\_

8. \_\_\_\_\_

9. \_\_\_\_\_

10. \_\_\_\_\_

11. \_\_\_\_\_

12. \_\_\_\_\_

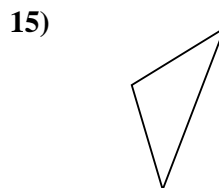

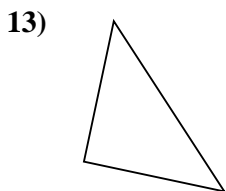
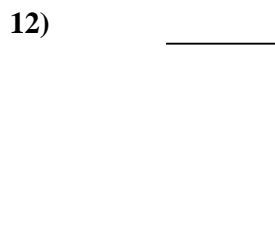
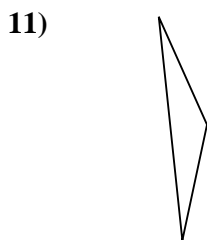
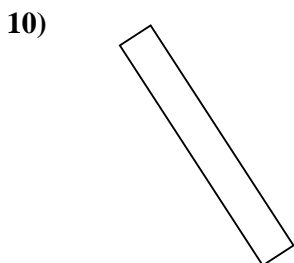
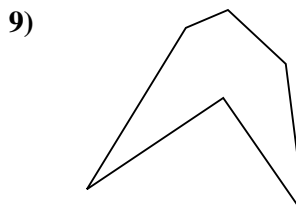
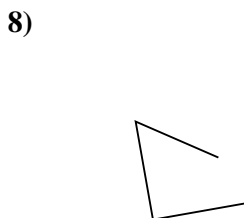
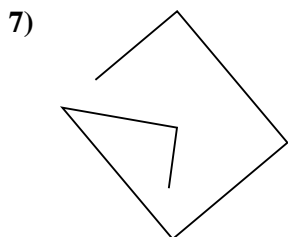
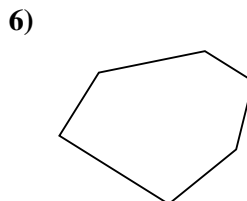
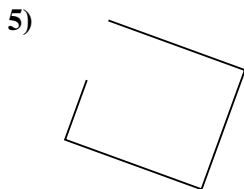
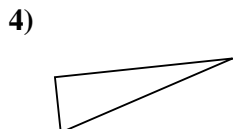
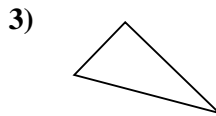
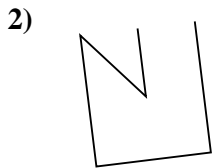
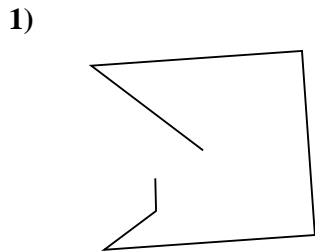
13. \_\_\_\_\_

14. \_\_\_\_\_

15. \_\_\_\_\_



Determina se le figure rappresentate sono "Triangolo", "Quadrato", "Rettangolo", "Esagono" o "Altro".



Risposte

1. Altro

2. Altro

3. Triangolo

4. Triangolo

5. Altro

6. Esagono

7. Altro

8. Altro

9. Esagono

10. Rettangolo

11. Triangolo

12. Altro

13. Triangolo

14. Rettangolo

15. Triangolo