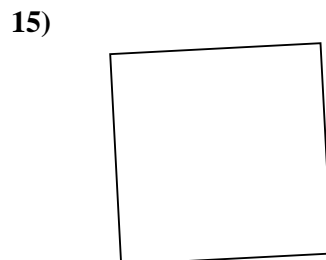
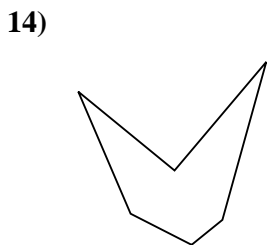
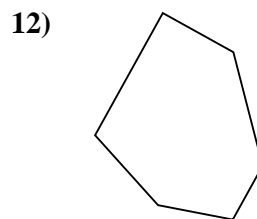
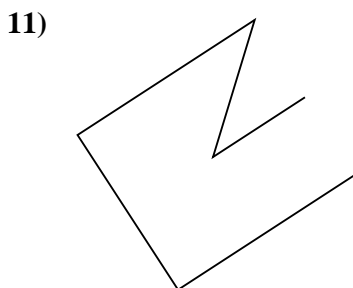
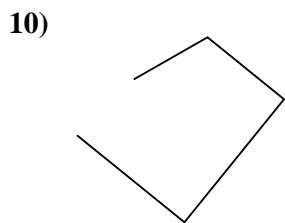
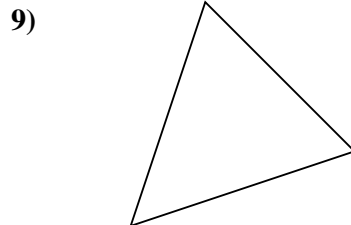

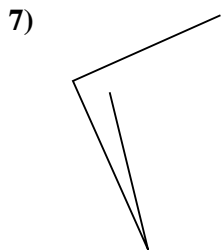
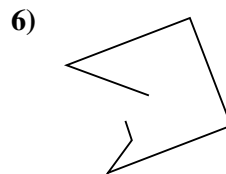
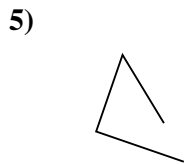
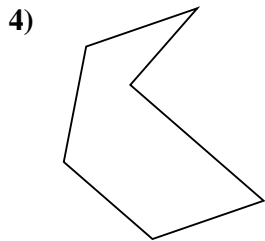
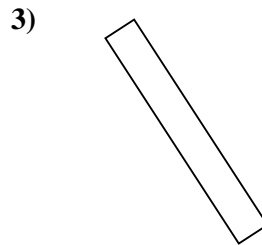
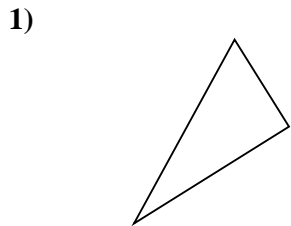




Determina se le figure rappresentate sono "Triangolo", "Quadrato", "Rettangolo", "Esagono" o "Altro".



Risposte

1. _____

2. _____

3. _____

4. _____

5. _____

6. _____

7. _____

8. _____

9. _____

10. _____

11. _____

12. _____

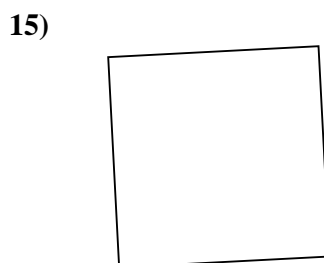
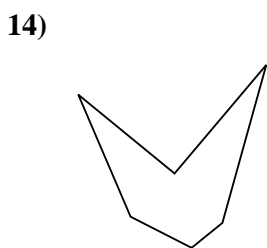
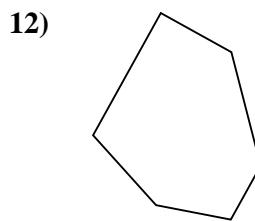
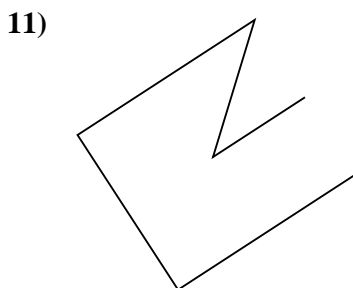
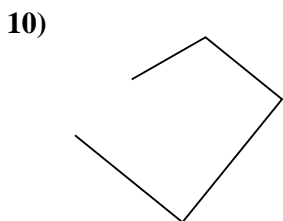
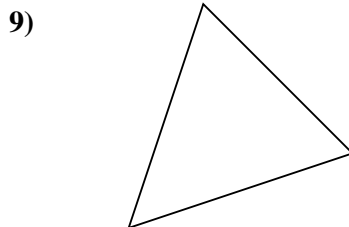

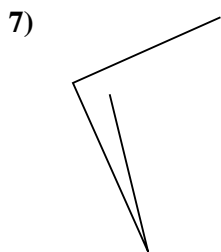
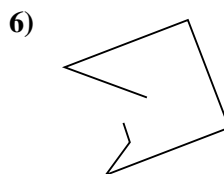
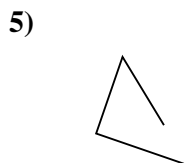
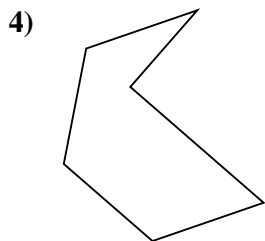
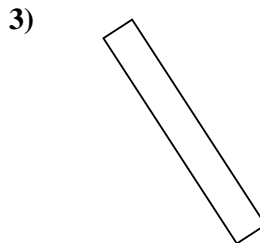
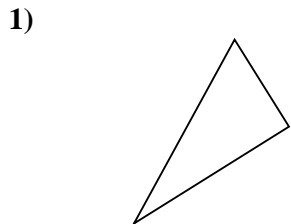
13. _____

14. _____

15. _____



Determina se le figure rappresentate sono "Triangolo", "Quadrato", "Rettangolo", "Esagono" o "Altro".



Risposte

1. Triangolo

2. Altro

3. Rettangolo

4. Esagono

5. Altro

6. Altro

7. Altro

8. Rettangolo

9. Triangolo

10. Altro

11. Altro

12. Esagono

13. Triangolo

14. Esagono

15. Quadrato