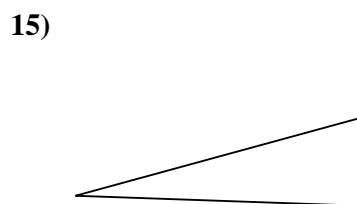
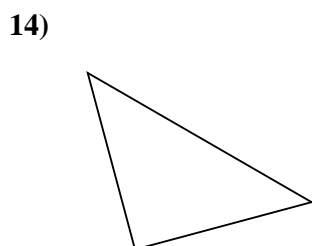
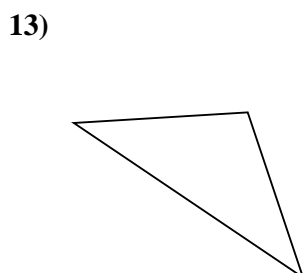
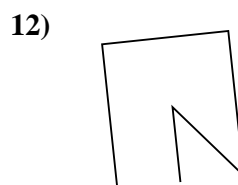
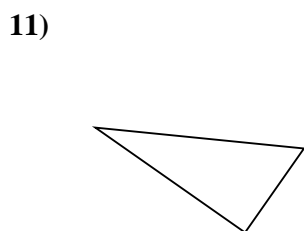
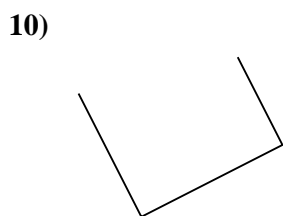
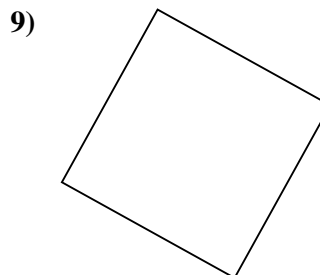
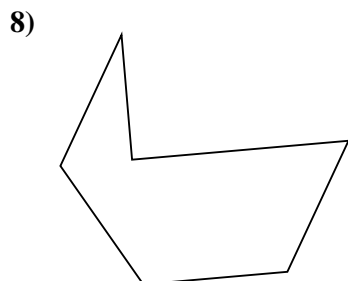
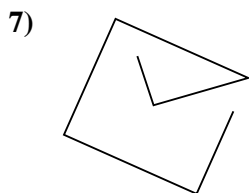
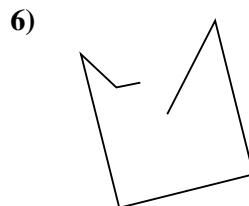
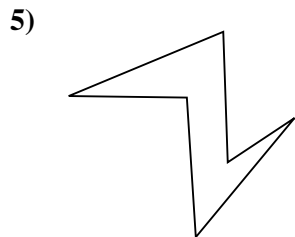
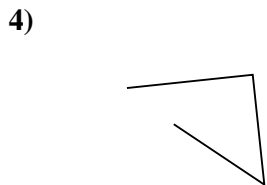
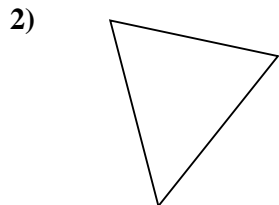
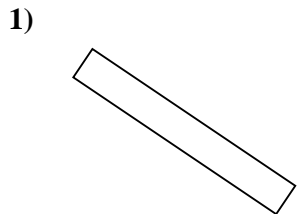




Determina se le figure rappresentate sono "Triangolo", "Quadrato", "Rettangolo", "Esagono" o "Altro".

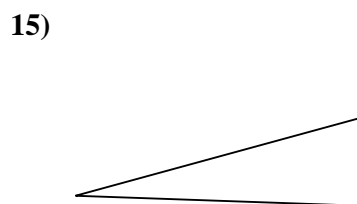
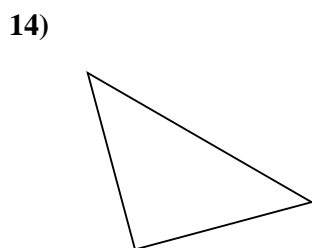
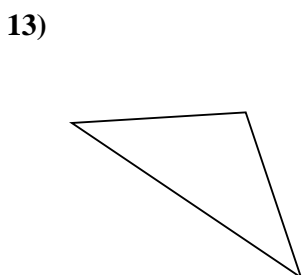
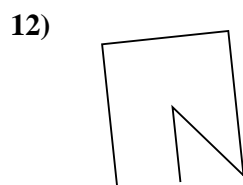
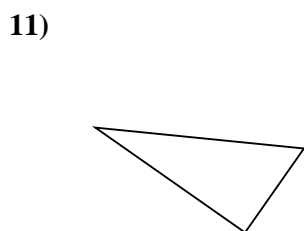
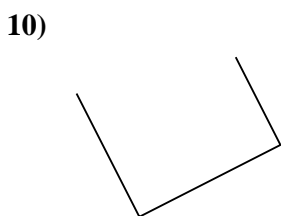
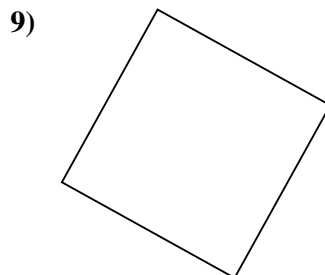
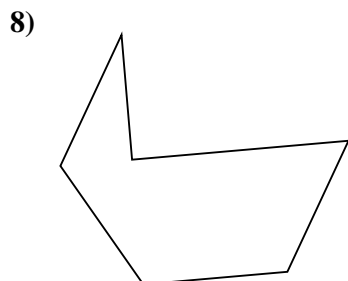
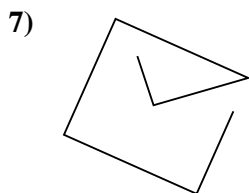
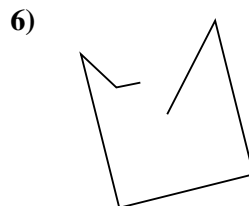
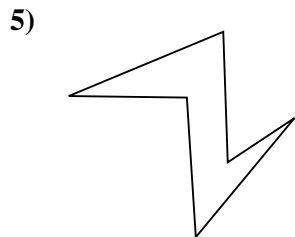
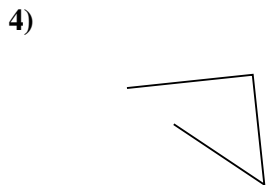
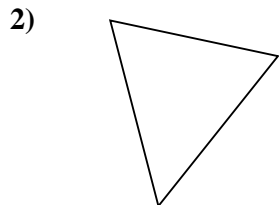
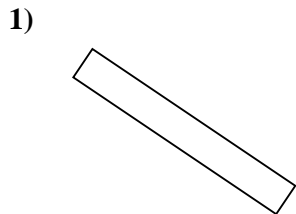


Risposte

- 1. _____
- 2. _____
- 3. _____
- 4. _____
- 5. _____
- 6. _____
- 7. _____
- 8. _____
- 9. _____
- 10. _____
- 11. _____
- 12. _____
- 13. _____
- 14. _____
- 15. _____



Determina se le figure rappresentate sono "Triangolo", "Quadrato", "Rettangolo", "Esagono" o "Altro".



Risposte

1. Rettangolo

2. Triangolo

3. Triangolo

4. Altro

5. Esagono

6. Altro

7. Altro

8. Esagono

9. Quadrato

10. Altro

11. Triangolo

12. Altro

13. Triangolo

14. Triangolo

15. Triangolo