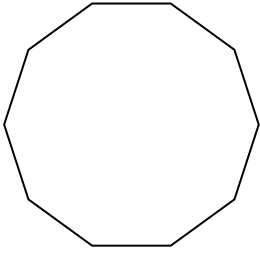


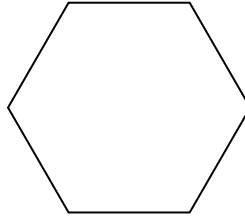


Identifica il tipo di forma rappresentata.

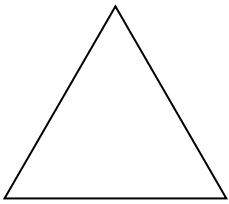
1)




2)



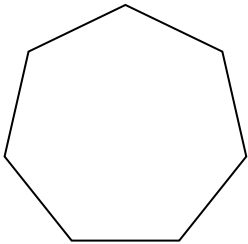
3)



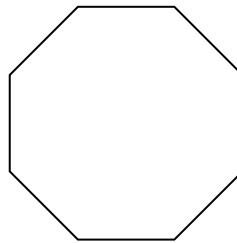
4)



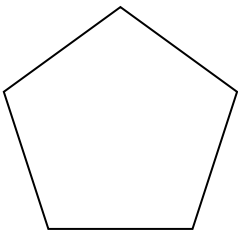
5)



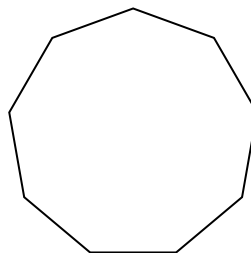
6)



7)



8)



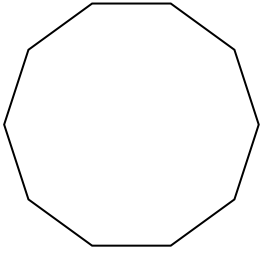
Risposte

- 1. _____
- 2. _____
- 3. _____
- 4. _____
- 5. _____
- 6. _____
- 7. _____
- 8. _____

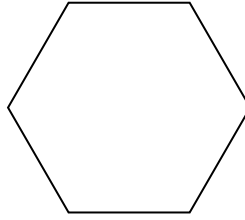


Identifica il tipo di forma rappresentata.

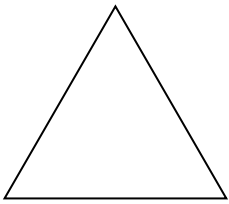
1)




2)



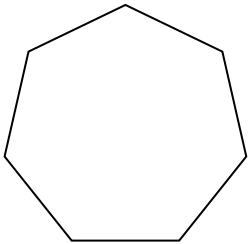
3)



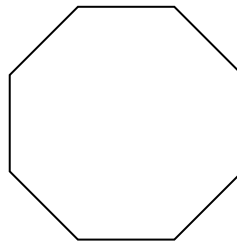
4)



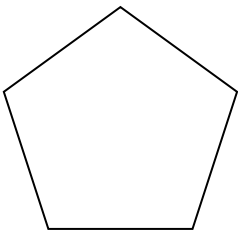
5)



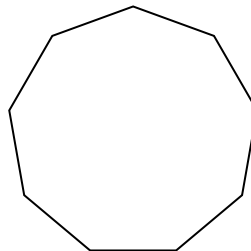
6)



7)



8)



Risposte

1. Decagono

2. Esagono

3. triangle

4. Quadrilatero

5. Ettagono

6. Ottagono

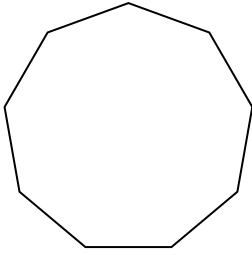
7. Pentagono

8. Ennagono

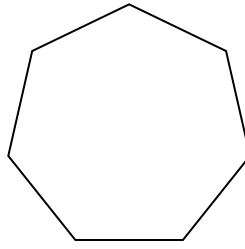


Identifica il tipo di forma rappresentata.


1)



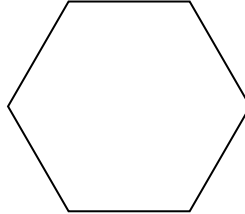
2)



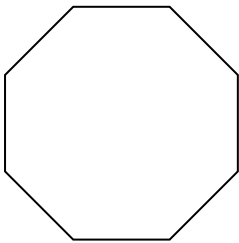
3)



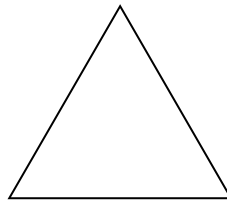
4)



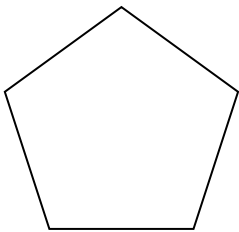
5)



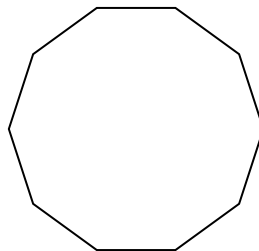
6)



7)



8)



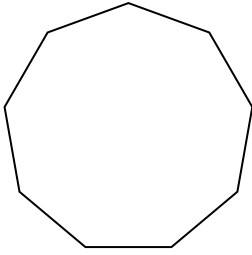
Risposte

- 1. _____
- 2. _____
- 3. _____
- 4. _____
- 5. _____
- 6. _____
- 7. _____
- 8. _____

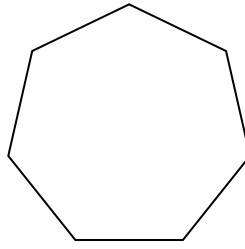


Identifica il tipo di forma rappresentata.


1)



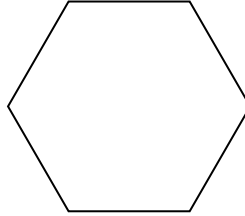
2)



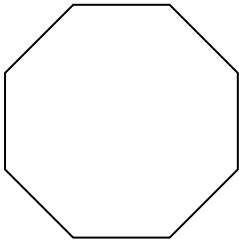
3)



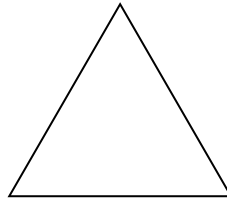
4)



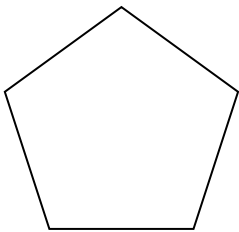
5)



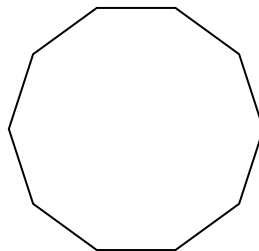
6)



7)



8)



Risposte

1. Ennagono

2. Ettagono

3. Quadrilatero

4. Esagono

5. Ottagono

6. triangle

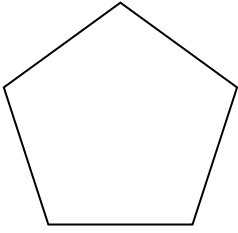
7. Pentagono

8. Decagono

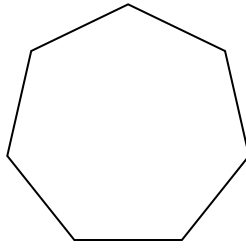


Identifica il tipo di forma rappresentata.

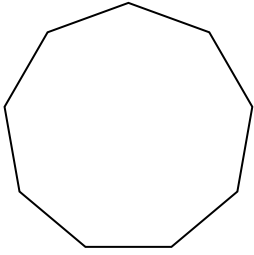
1)



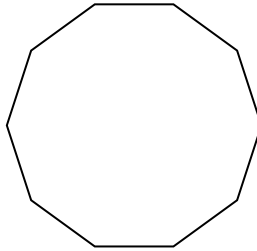
2)



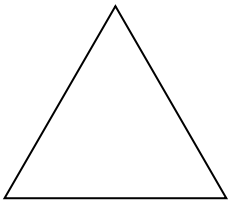
3)



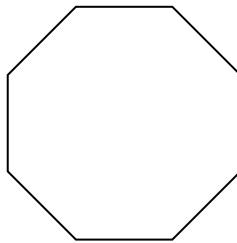
4)




5)



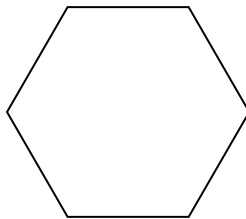
6)



7)



8)



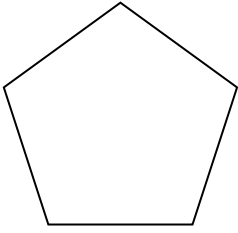
Risposte

- 1. _____
- 2. _____
- 3. _____
- 4. _____
- 5. _____
- 6. _____
- 7. _____
- 8. _____

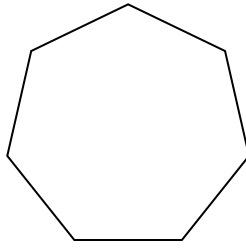


Identifica il tipo di forma rappresentata.

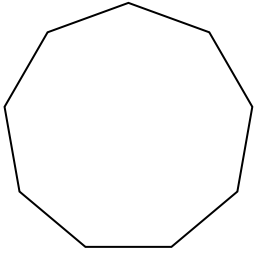
1)



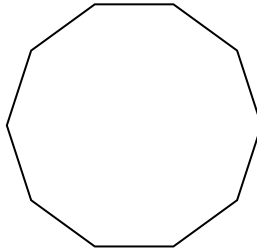
2)



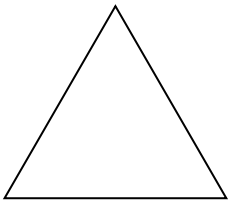
3)



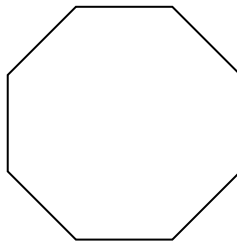
4)




5)



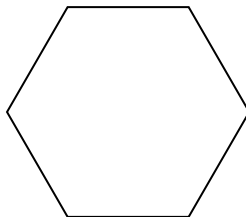
6)



7)



8)


**Risposte**

1. **Pentagono**
2. **Ettagono**
3. **Ennagono**
4. **Decagono**
5. **triangle**
6. **Ottagono**
7. **Quadrilatero**
8. **Esagono**

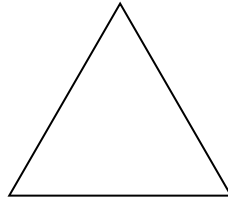


Identifica il tipo di forma rappresentata.

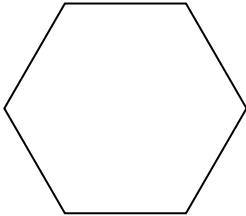
1)



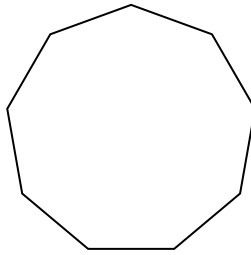
2)



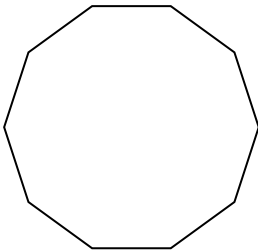
3)



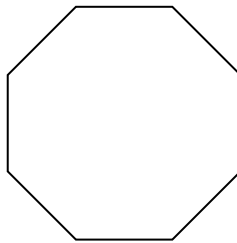
4)



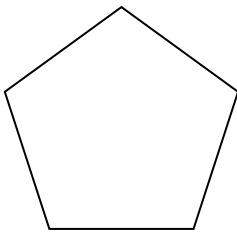
5)



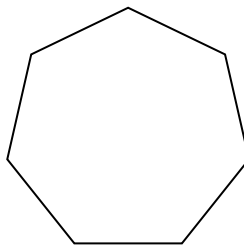
6)



7)



8)



Risposte

1. _____

2. _____

3. _____

4. _____

5. _____

6. _____


7. _____

8. _____

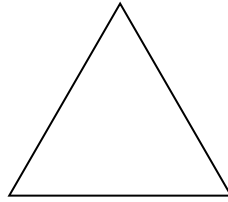


Identifica il tipo di forma rappresentata.

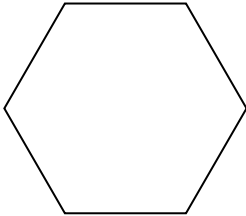
1)



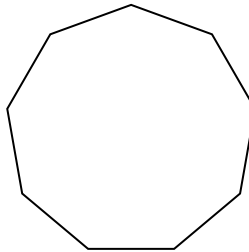
2)



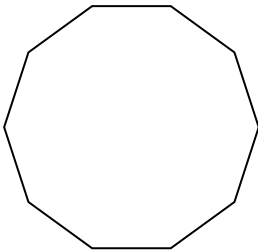
3)



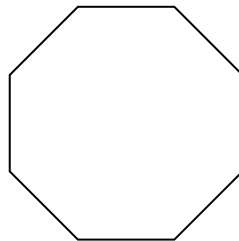
4)



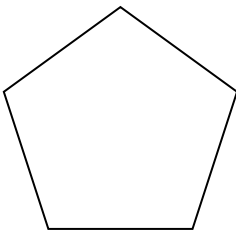
5)



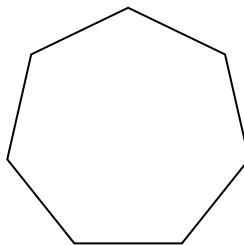
6)



7)



8)



Risposte

1. Quadrilatero

2. triangle

3. Esagono

4. Ennagono

5. Decagono

6. Ottagono

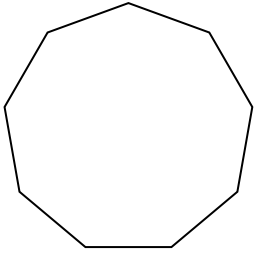
7. Pentagono

8. Ettagono

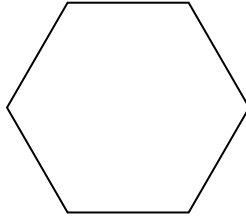


Identifica il tipo di forma rappresentata.

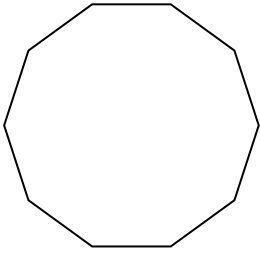
1)




2)



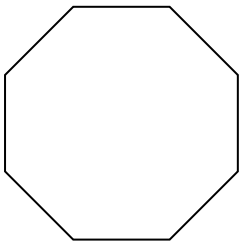
3)



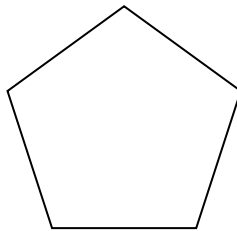
4)



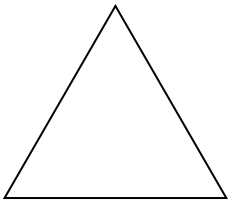
5)



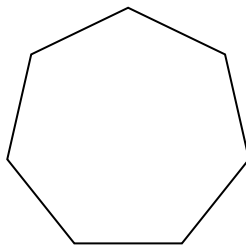
6)



7)



8)



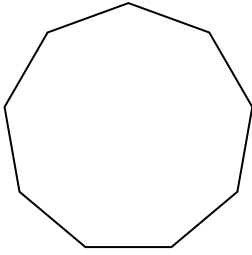
Risposte

- 1. _____
- 2. _____
- 3. _____
- 4. _____
- 5. _____
- 6. _____
- 7. _____
- 8. _____

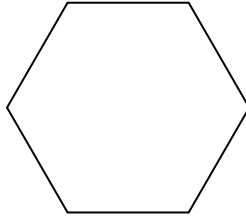


Identifica il tipo di forma rappresentata.

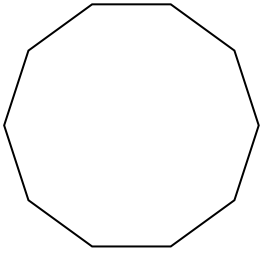
1)




2)



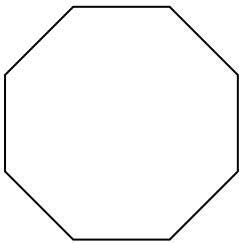
3)



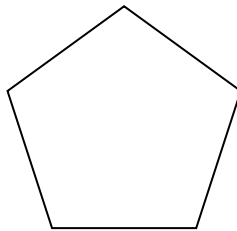
4)



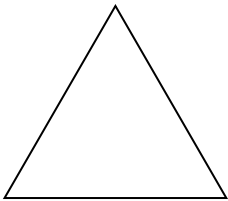
5)



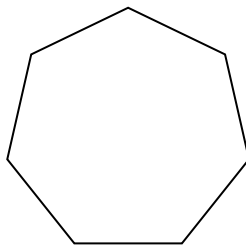
6)



7)



8)



Risposte

1. Ennagono

2. Esagono

3. Decagono

4. Quadrilatero

5. Ottagono

6. Pentagono

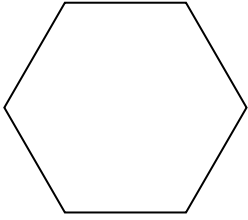
7. triangle

8. Ettagono

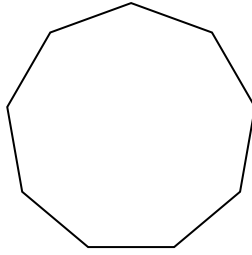


Identifica il tipo di forma rappresentata.

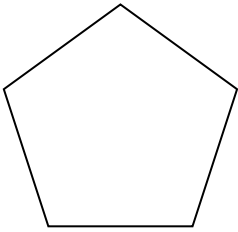
1)




2)



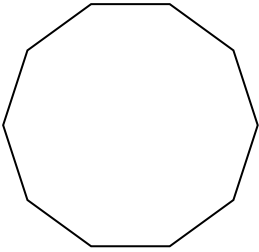
3)



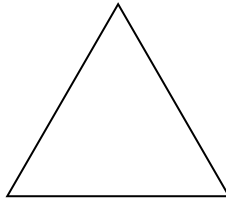
4)



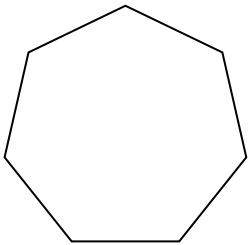
5)



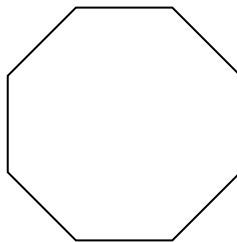
6)



7)



8)



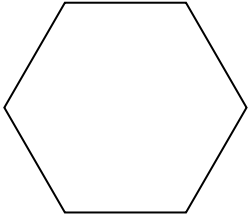
Risposte

- 1. _____
- 2. _____
- 3. _____
- 4. _____
- 5. _____
- 6. _____
- 7. _____
- 8. _____

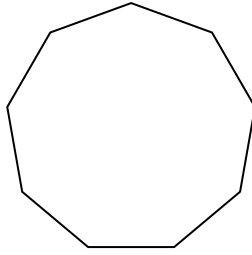


Identifica il tipo di forma rappresentata.

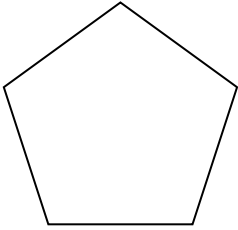
1)




2)



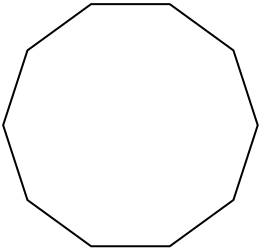
3)



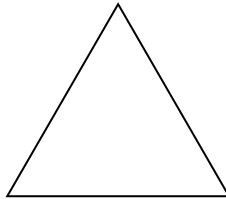
4)



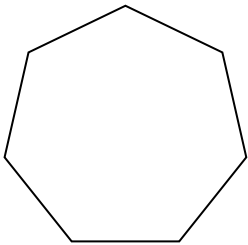
5)



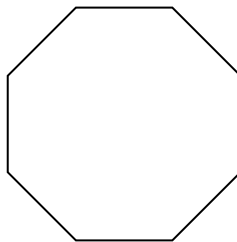
6)



7)



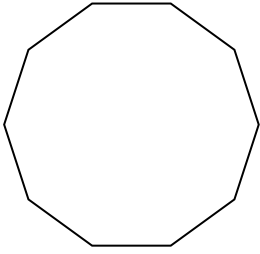
8)

**Risposte**1. **Esagono**2. **Ennagono**3. **Pentagono**4. **Quadrilatero**5. **Decagono**6. **triangle**7. **Ettagono**8. **Ottagono**

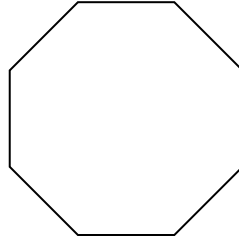


Identifica il tipo di forma rappresentata.

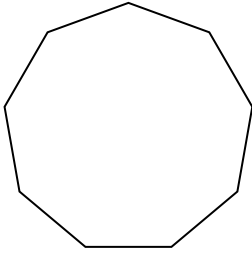
1)



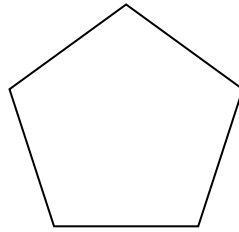
2)



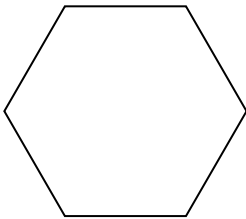
3)




4)



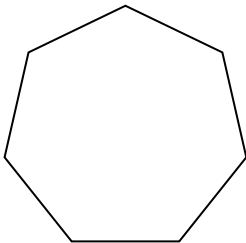
5)



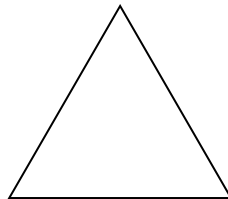
6)



7)



8)



Risposte

1. _____

2. _____

3. _____

4. _____

5. _____

6. _____

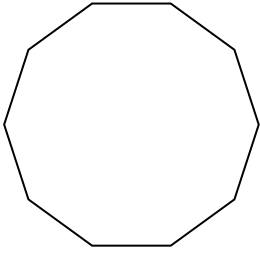
7. _____

8. _____

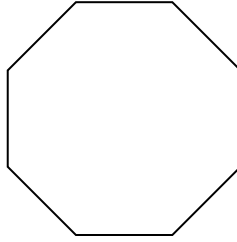


Identifica il tipo di forma rappresentata.

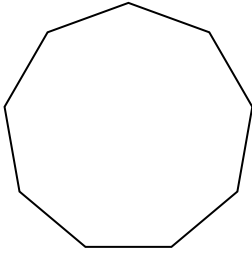
1)



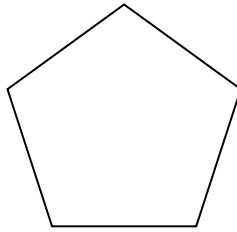
2)



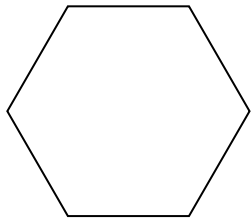
3)




4)



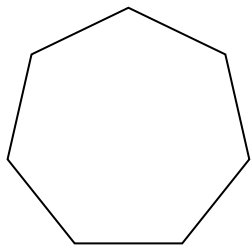
5)



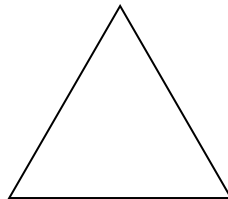
6)



7)



8)

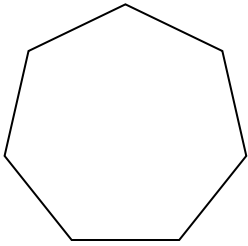
**Risposte**

1. Decagono
2. Ottagono
3. Ennagono
4. Pentagono
5. Esagono
6. Quadrilatero
7. Ettagono
8. triangle

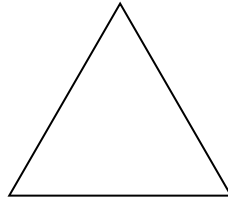


Identifica il tipo di forma rappresentata.

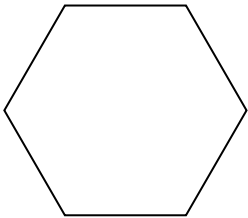
1)



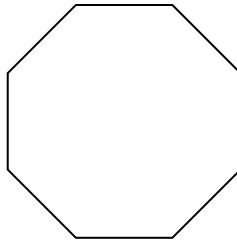
2)




3)



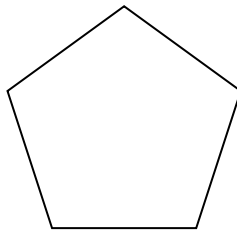
4)



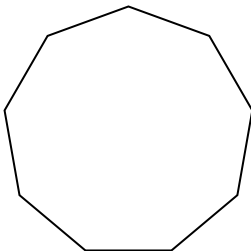
5)



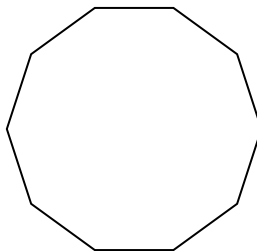
6)



7)



8)



Risposte

1. _____

2. _____

3. _____

4. _____

5. _____

6. _____

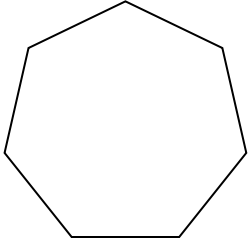
7. _____

8. _____

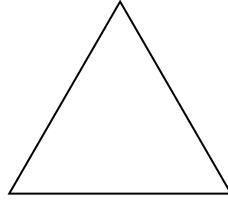


Identifica il tipo di forma rappresentata.

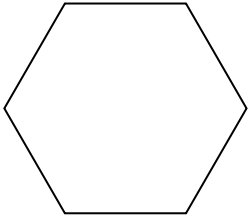
1)



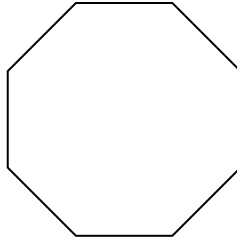
2)




3)



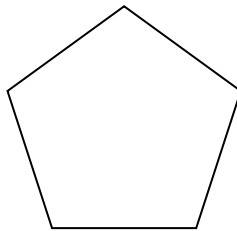
4)



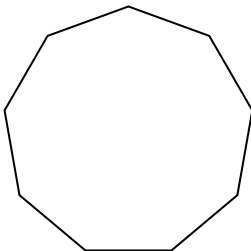
5)



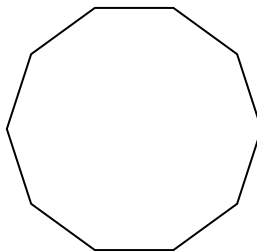
6)



7)



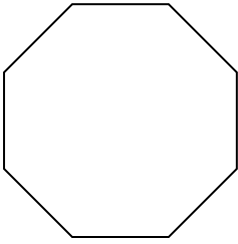
8)

Risposte1. Ettagono2. triangle3. Esagono4. Ottagono5. Quadrilatero6. Pentagono7. Ennagono8. Decagono

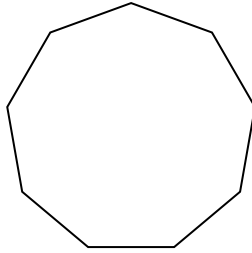


Identifica il tipo di forma rappresentata.

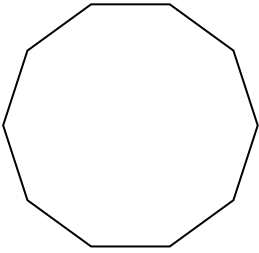
1)




2)



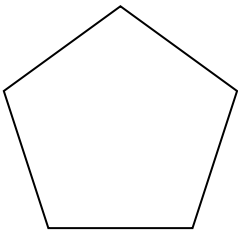
3)



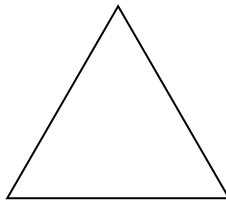
4)



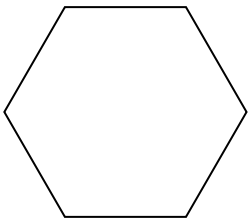
5)



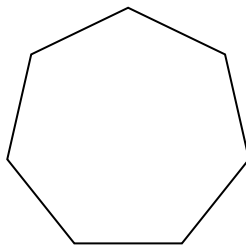
6)



7)



8)



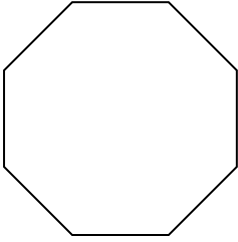
Risposte

- 1. _____
- 2. _____
- 3. _____
- 4. _____
- 5. _____
- 6. _____
- 7. _____
- 8. _____

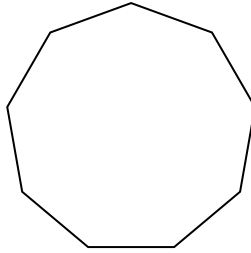


Identifica il tipo di forma rappresentata.

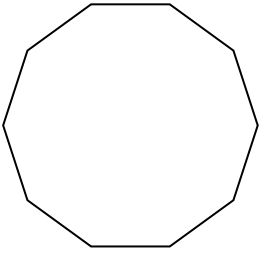
1)




2)



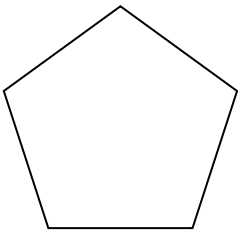
3)



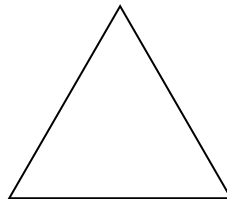
4)



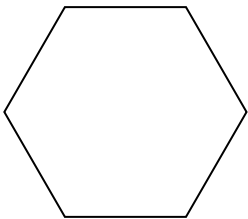
5)



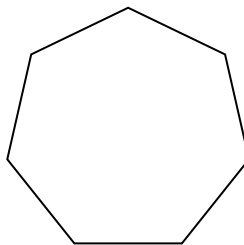
6)



7)



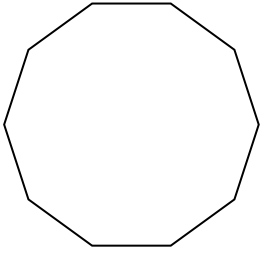
8)

**Risposte**1. Ottagono2. Ennagono3. Decagono4. Quadrilatero5. Pentagono6. triangle7. Esagono8. Ettagono

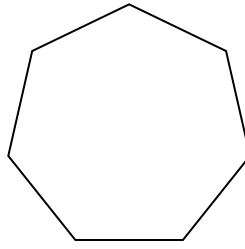


Identifica il tipo di forma rappresentata.


1)



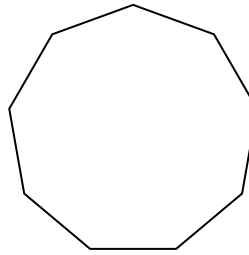
2)



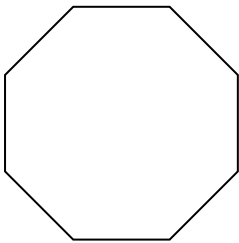
3)



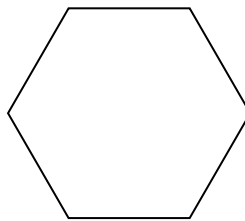
4)



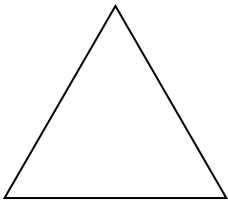
5)



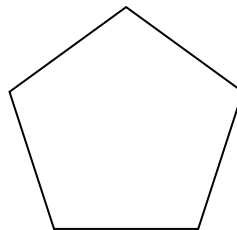
6)



7)



8)



Risposte

1. _____

2. _____

3. _____

4. _____

5. _____

6. _____

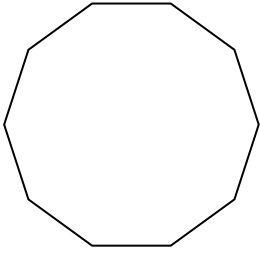
7. _____

8. _____

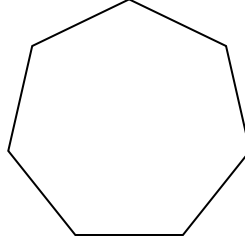


Identifica il tipo di forma rappresentata.


1)



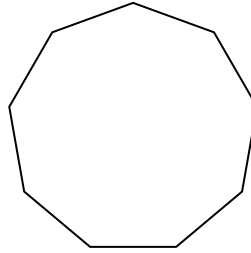
2)



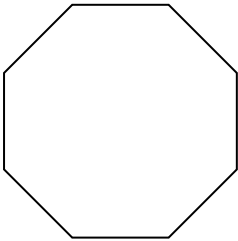
3)



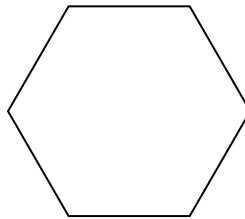
4)



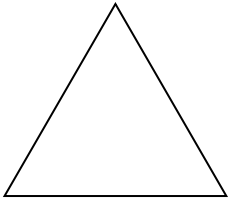
5)



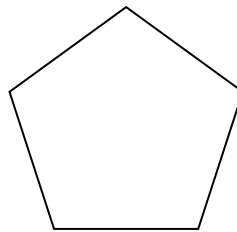
6)



7)



8)

**Risposte**1. **Decagono**2. **Ettagono**3. **Quadrilatero**4. **Ennagono**5. **Ottagono**6. **Esagono**7. **triangle**8. **Pentagono**