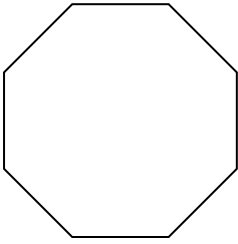


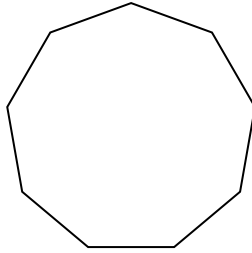


Identifica il tipo di forma rappresentata.

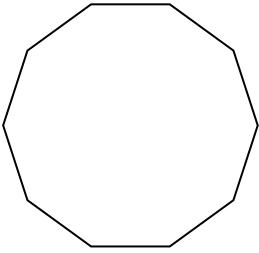
1)




2)



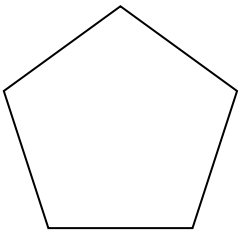
3)



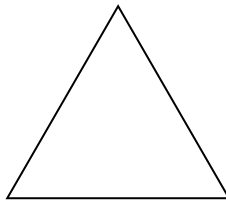
4)



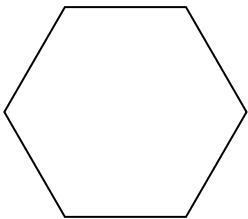
5)



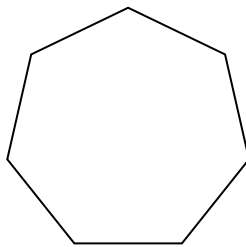
6)



7)



8)



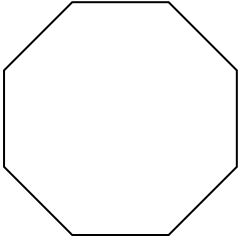
**Risposte**

- 1. \_\_\_\_\_
- 2. \_\_\_\_\_
- 3. \_\_\_\_\_
- 4. \_\_\_\_\_
- 5. \_\_\_\_\_
- 6. \_\_\_\_\_
- 7. \_\_\_\_\_
- 8. \_\_\_\_\_

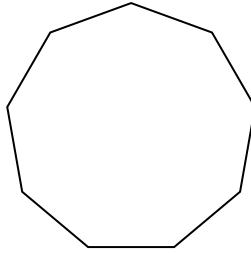


Identifica il tipo di forma rappresentata.

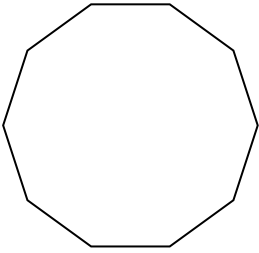
1)




2)



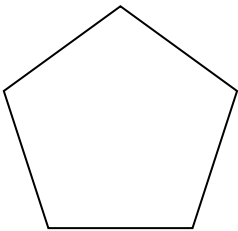
3)



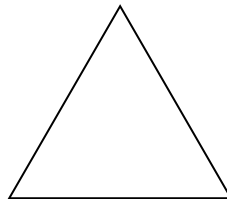
4)



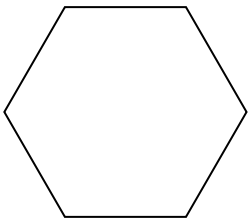
5)



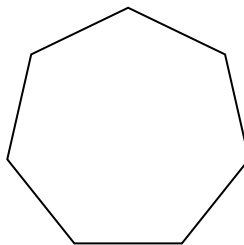
6)



7)



8)

**Risposte**1. Ottagono2. Ennagono3. Decagono4. Quadrilatero5. Pentagono6. triangle7. Esagono8. Ettagono