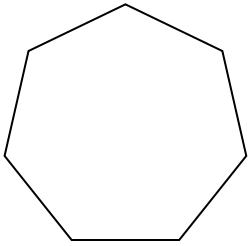


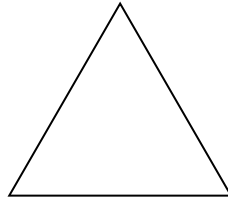


Identifica il tipo di forma rappresentata.

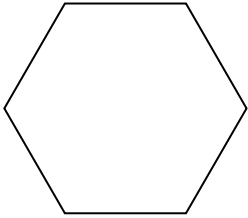
1)



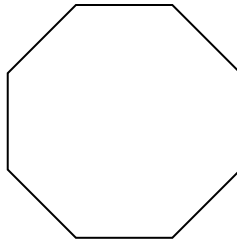
2)




3)



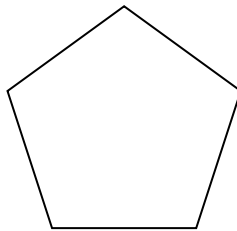
4)



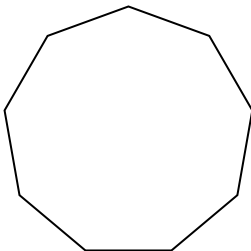
5)



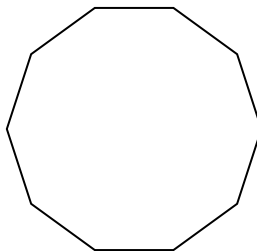
6)



7)



8)



Risposte

1. _____

2. _____

3. _____

4. _____

5. _____

6. _____

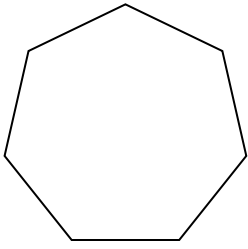
7. _____

8. _____

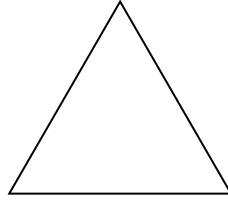


Identifica il tipo di forma rappresentata.

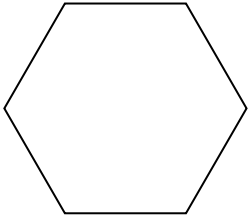
1)



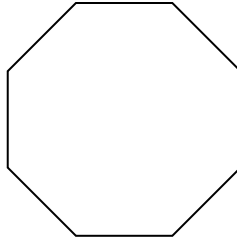
2)




3)



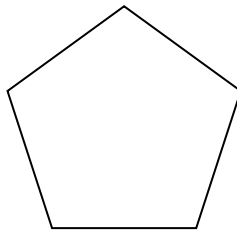
4)



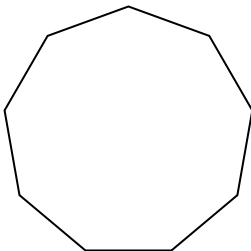
5)



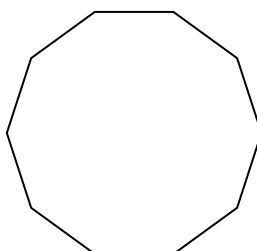
6)



7)



8)

Risposte1. Ettagono2. triangle3. Esagono4. Ottagono5. Quadrilatero6. Pentagono7. Ennagono8. Decagono