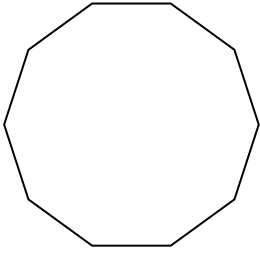


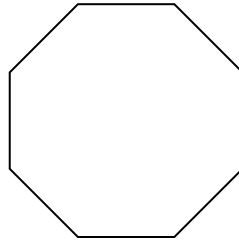


Identifica il tipo di forma rappresentata.

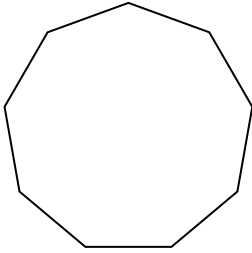
1)



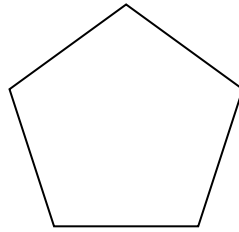
2)



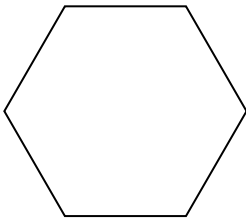
3)




4)



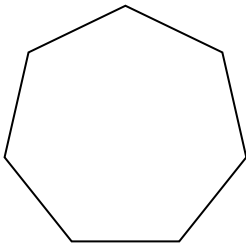
5)



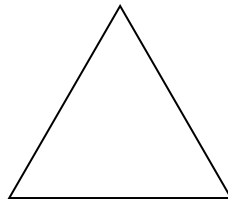
6)



7)



8)



Risposte

1. _____

2. _____

3. _____

4. _____

5. _____

6. _____

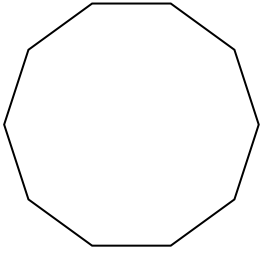
7. _____

8. _____

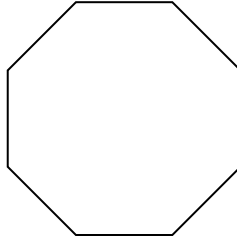


Identifica il tipo di forma rappresentata.

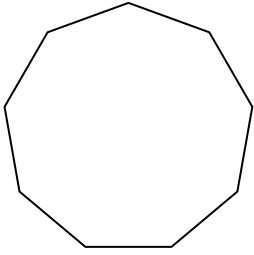
1)



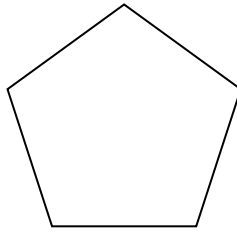
2)



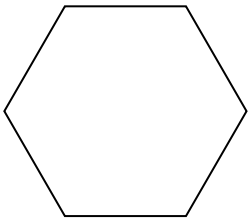
3)




4)



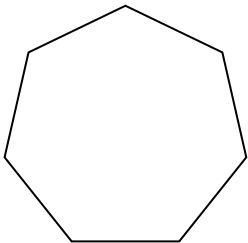
5)



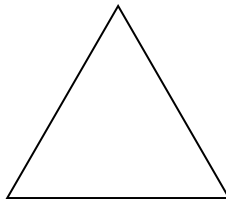
6)



7)



8)



Risposte

- 1. Decagono
- 2. Ottagono
- 3. Ennagono
- 4. Pentagono
- 5. Esagono
- 6. Quadrilatero
- 7. Ettagono
- 8. triangle