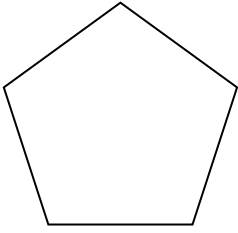


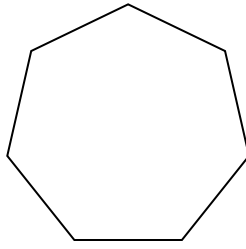


Identifica il tipo di forma rappresentata.

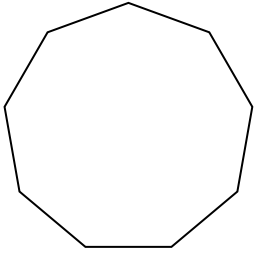
1)



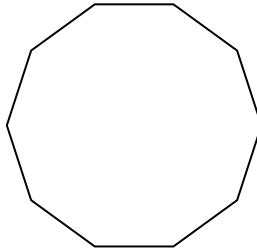
2)



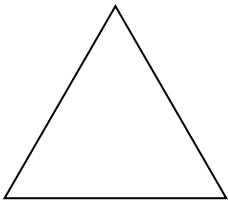
3)



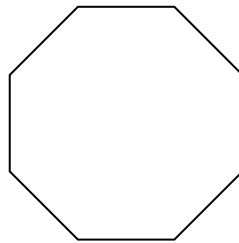
4)




5)



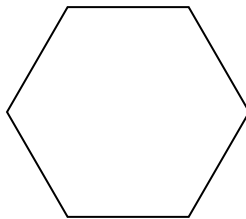
6)



7)



8)



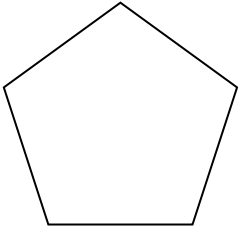
Risposte

- 1. _____
- 2. _____
- 3. _____
- 4. _____
- 5. _____
- 6. _____
- 7. _____
- 8. _____

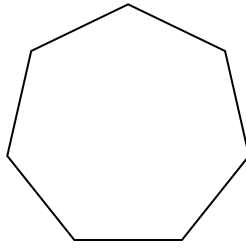


Identifica il tipo di forma rappresentata.

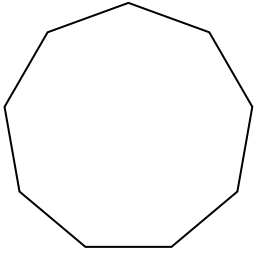
1)



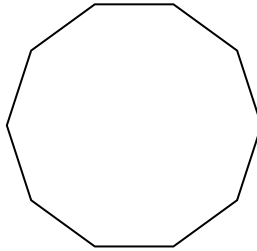
2)



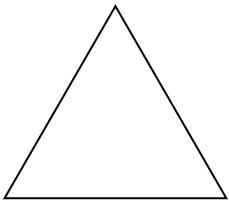
3)



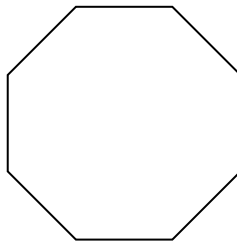
4)




5)



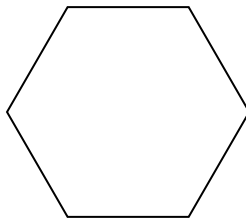
6)



7)



8)

Risposte

1. Pentagono
2. Ettagono
3. Ennagono
4. Decagono
5. triangle
6. Ottagono
7. Quadrilatero
8. Esagono