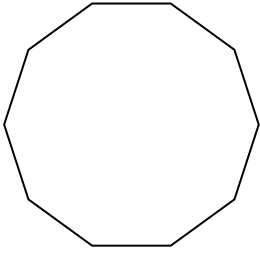


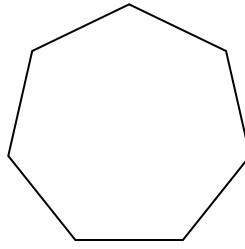


Identifica il tipo di forma rappresentata.


1)



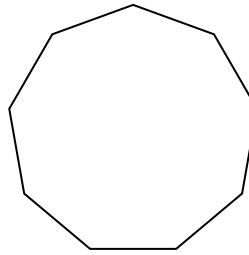
2)



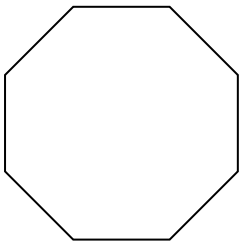
3)



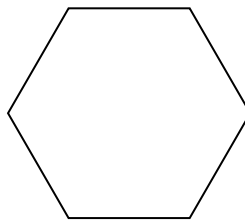
4)



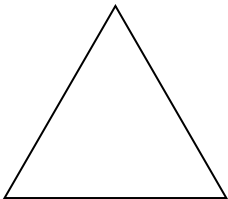
5)



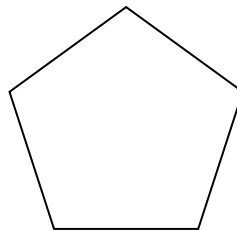
6)



7)



8)



**Risposte**

1. \_\_\_\_\_

2. \_\_\_\_\_

3. \_\_\_\_\_

4. \_\_\_\_\_

5. \_\_\_\_\_

6. \_\_\_\_\_

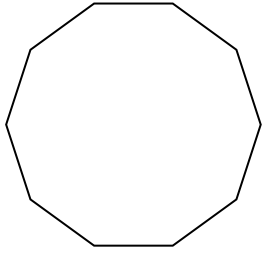
7. \_\_\_\_\_

8. \_\_\_\_\_

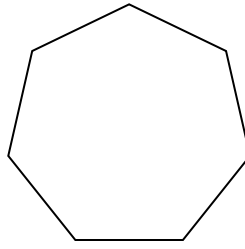


Identifica il tipo di forma rappresentata.


1)



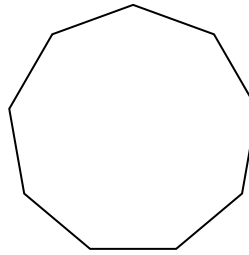
2)



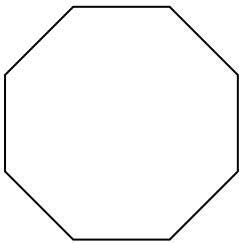
3)



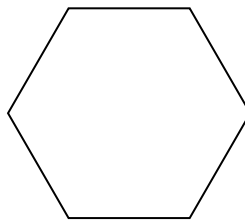
4)



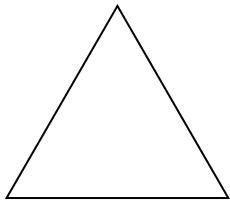
5)



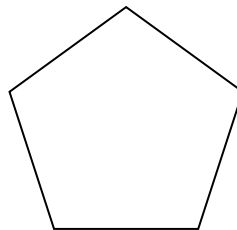
6)



7)



8)



Risposte

1. Decagono

2. Ettagono

3. Quadrilatero

4. Ennagono

5. Ottagono

6. Esagono

7. triangle

8. Pentagono