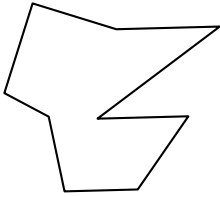




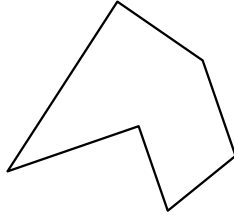
Identifica il tipo di forma rappresentata.

**Risposte**

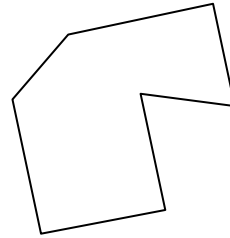
1)



2)



3)



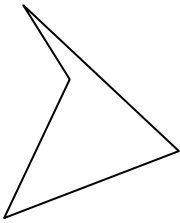
1. \_\_\_\_\_

2. \_\_\_\_\_

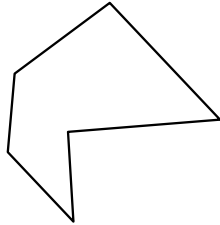
3. \_\_\_\_\_

4. \_\_\_\_\_

4)



5)



6)



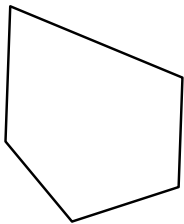
5. \_\_\_\_\_

6. \_\_\_\_\_

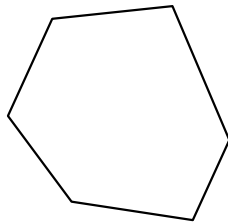
7. \_\_\_\_\_

8. \_\_\_\_\_

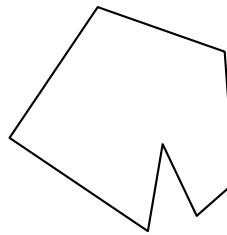
7)



8)



9)



9. \_\_\_\_\_

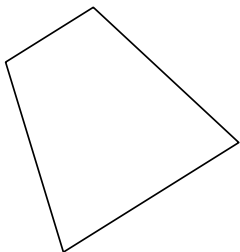
10. \_\_\_\_\_

11. \_\_\_\_\_

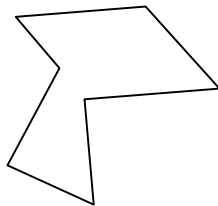
12. \_\_\_\_\_

13. \_\_\_\_\_

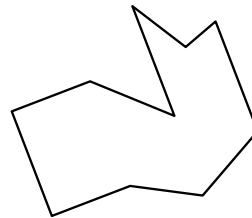
10)



11)



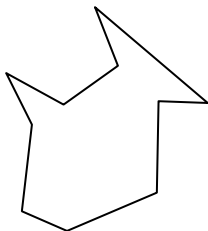
12)



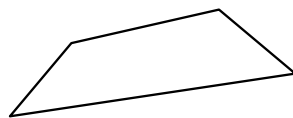
14. \_\_\_\_\_

15. \_\_\_\_\_

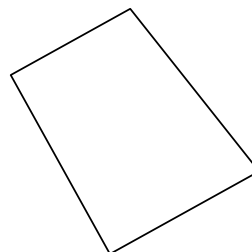
13)



14)



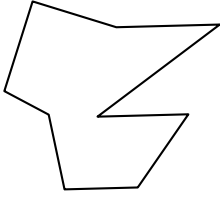
15)



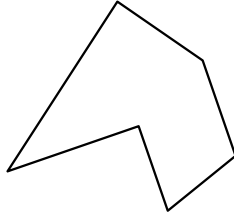


Identifica il tipo di forma rappresentata.

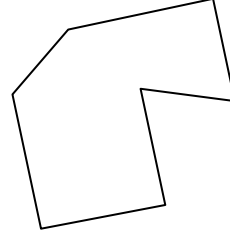
1)



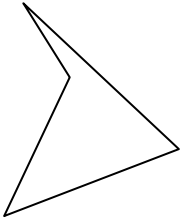
2)



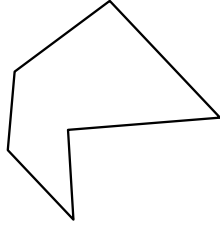
3)



4)



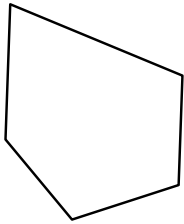
5)



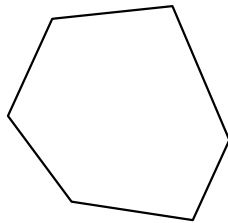
6)



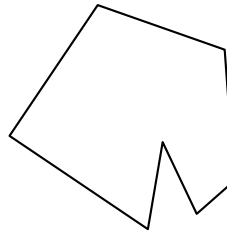
7)



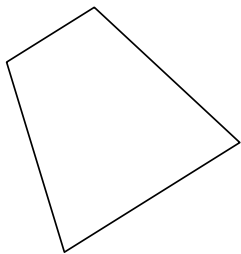
8)



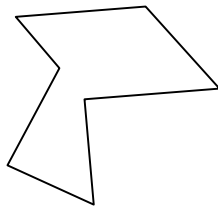
9)



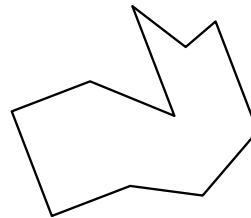
10)



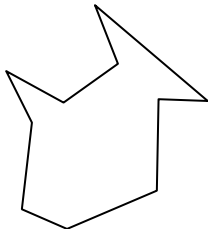
11)



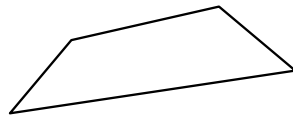
12)



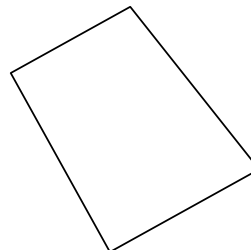
13)



14)



15)



**Risposte**

1. Ennagono

2. Esagono

3. Ettagono

4. Quadrilatero

5. Esagono

6. Quadrilatero

7. Pentagono

8. Esagono

9. Ettagono

10. Quadrilatero

11. Ettagono

12. Decagono

13. Decagono

14. Quadrilatero

15. Quadrilatero