


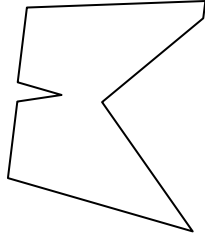


Identifica il tipo di forma rappresentata.

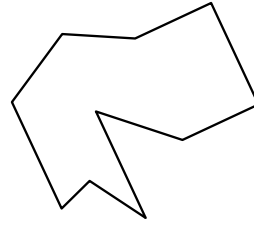
1)



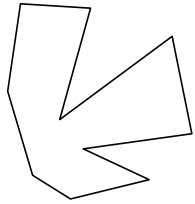
2)



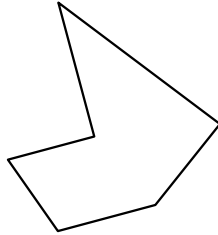
3)



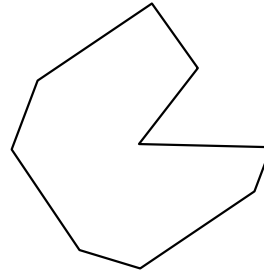
4)



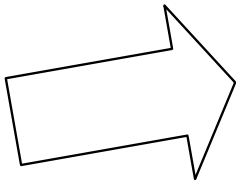
5)



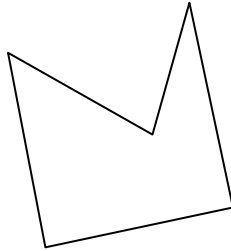
6)



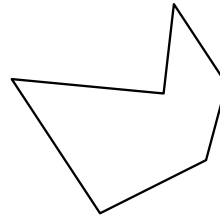
7)




8)



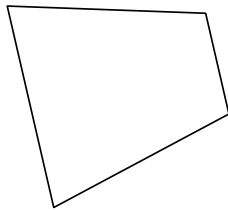
9)



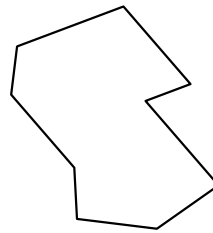
10)



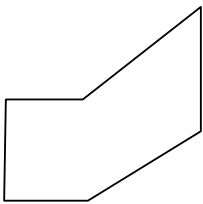
11)



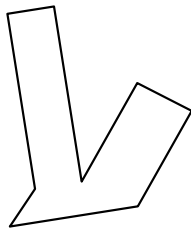
12)



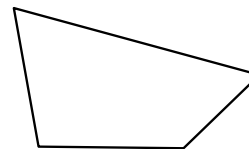
13)



14)



15)



Risposte

1. \_\_\_\_\_

2. \_\_\_\_\_

3. \_\_\_\_\_

4. \_\_\_\_\_

5. \_\_\_\_\_

6. \_\_\_\_\_

7. \_\_\_\_\_

8. \_\_\_\_\_

9. \_\_\_\_\_

10. \_\_\_\_\_

11. \_\_\_\_\_

12. \_\_\_\_\_

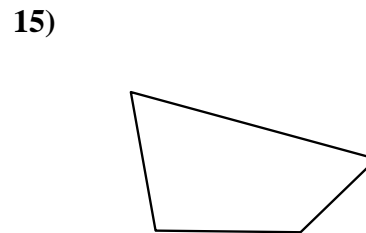
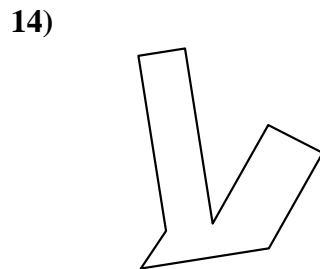
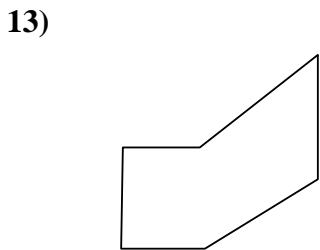
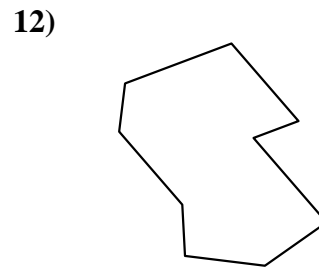
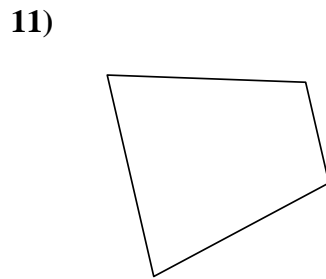
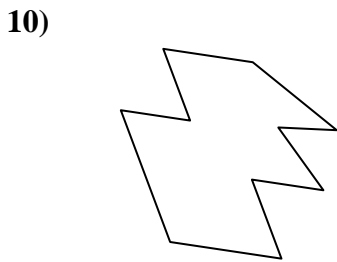
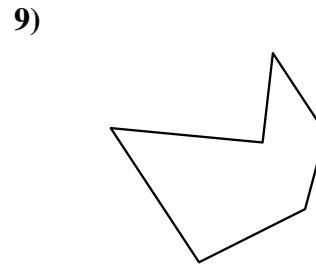
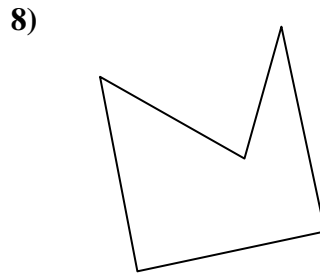
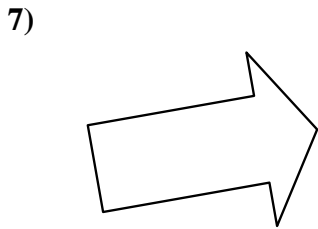
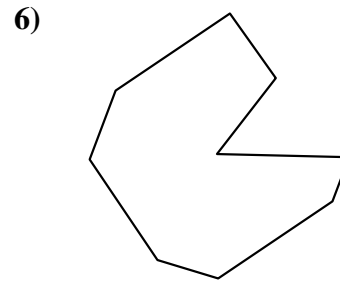
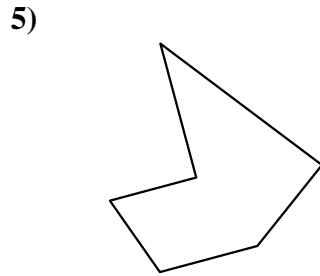
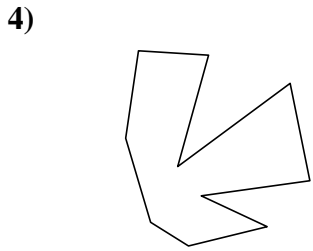
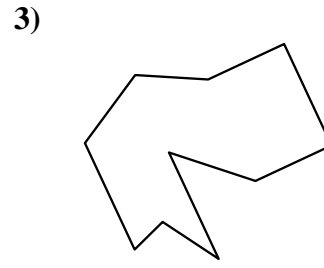
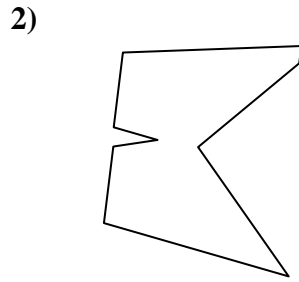
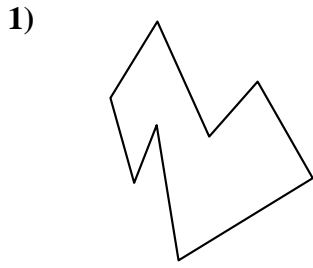
13. \_\_\_\_\_

14. \_\_\_\_\_

15. \_\_\_\_\_



Identifica il tipo di forma rappresentata.



Risposte

1. Ottagono

2. Ennagono

3. Decagono

4. Decagono

5. Esagono

6. Ennagono

7. Ettagono

8. Pentagono

9. Esagono

10. Decagono

11. Quadrilatero

12. Ennagono

13. Esagono


14. Ottagono

15. Quadrilatero

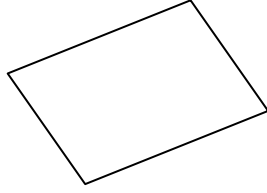


Identifica il tipo di forma rappresentata.

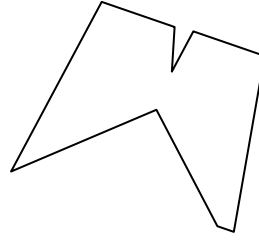
1)



2)



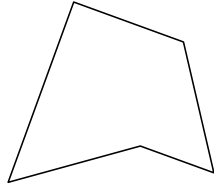
3)



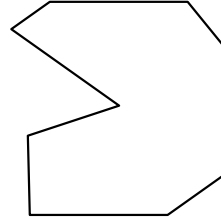
4)




5)



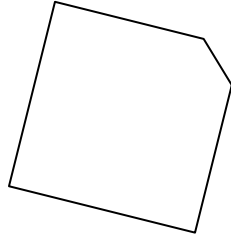
6)



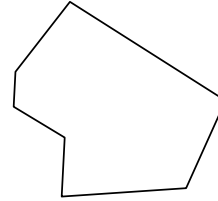
7)



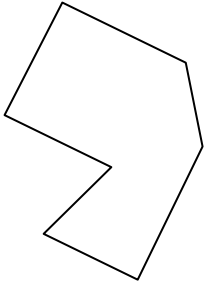
8)



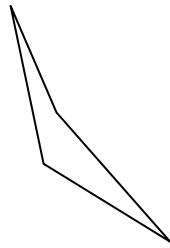
9)



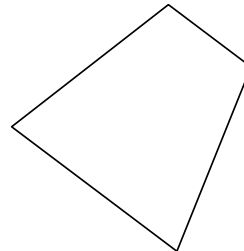
10)



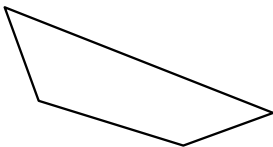
11)




12)



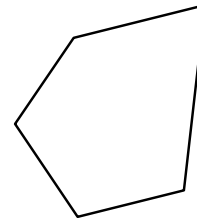
13)



14)



15)



Risposte

1. \_\_\_\_\_

2. \_\_\_\_\_

3. \_\_\_\_\_

4. \_\_\_\_\_

5. \_\_\_\_\_

6. \_\_\_\_\_

7. \_\_\_\_\_

8. \_\_\_\_\_

9. \_\_\_\_\_

10. \_\_\_\_\_

11. \_\_\_\_\_

12. \_\_\_\_\_

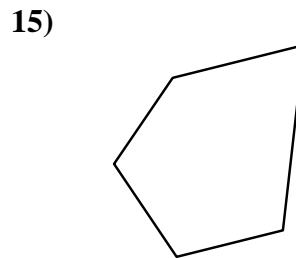
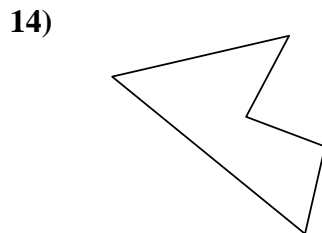
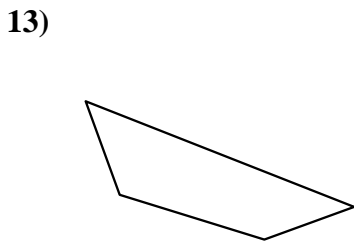
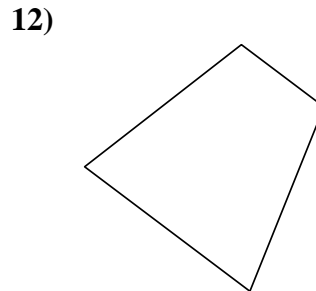
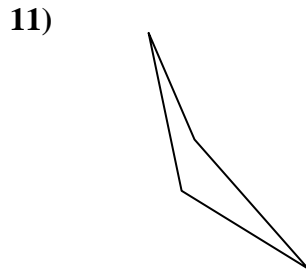
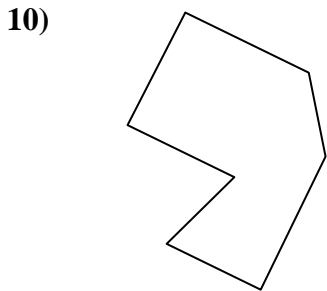
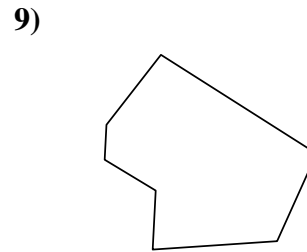
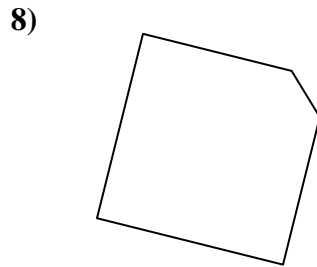
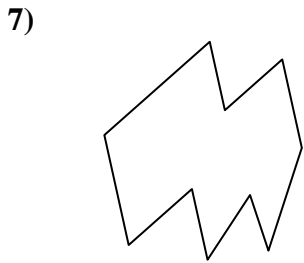
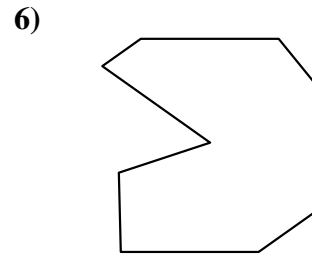
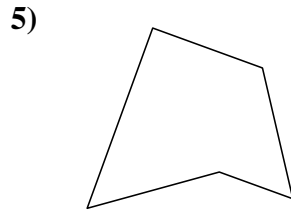
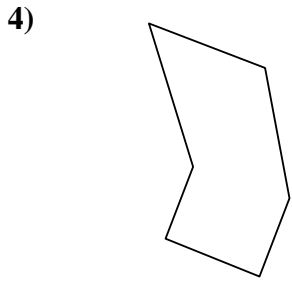
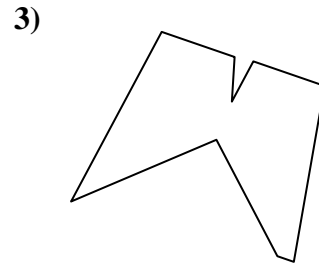
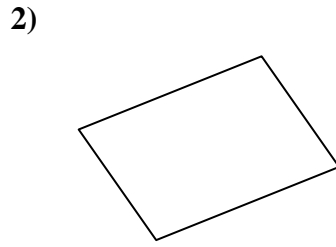
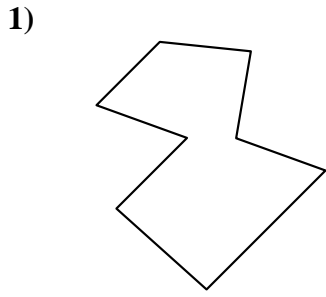
13. \_\_\_\_\_

14. \_\_\_\_\_

15. \_\_\_\_\_



Identifica il tipo di forma rappresentata.



Risposte

1. Ottagono

2. Quadrilatero

3. Ennagono

4. Esagono

5. Pentagono

6. Ennagono

7. Decagono

8. Pentagono

9. Ettagono

10. Ettagono

11. Quadrilatero

12. Quadrilatero

13. Quadrilatero

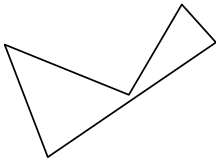
14. Pentagono

15. Pentagono

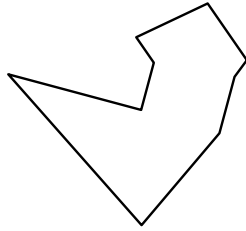


Identifica il tipo di forma rappresentata.


1)



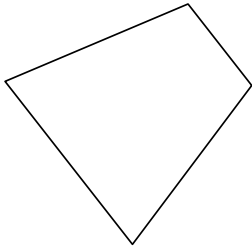
2)



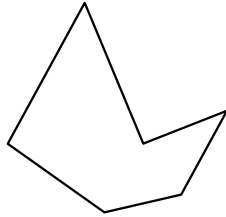
3)



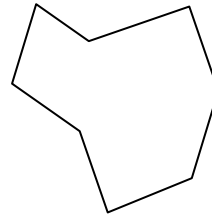
4)



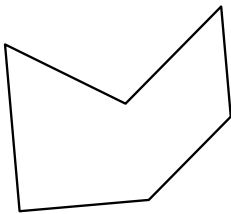
5)



6)



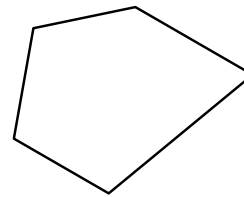
7)




8)



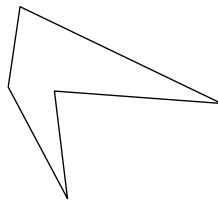
9)



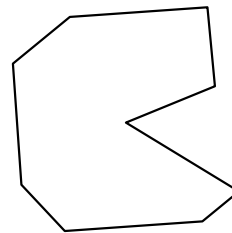
10)




11)



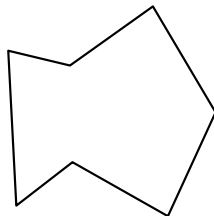
12)



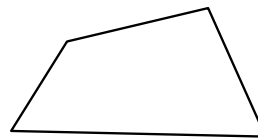
13)



14)



15)



Risposte

1. \_\_\_\_\_

2. \_\_\_\_\_

3. \_\_\_\_\_

4. \_\_\_\_\_

5. \_\_\_\_\_

6. \_\_\_\_\_

7. \_\_\_\_\_

8. \_\_\_\_\_

9. \_\_\_\_\_

10. \_\_\_\_\_

11. \_\_\_\_\_

12. \_\_\_\_\_

13. \_\_\_\_\_

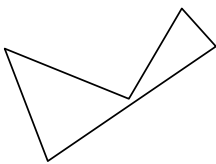
14. \_\_\_\_\_

15. \_\_\_\_\_

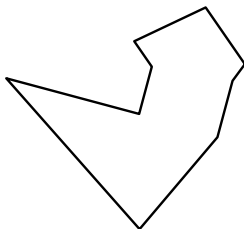


Identifica il tipo di forma rappresentata.


1)



2)



3)



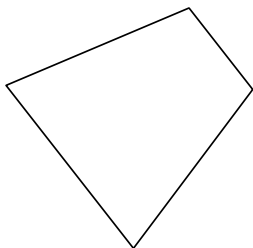
Risposte

1. Pentagono

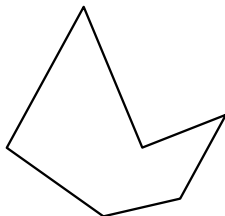
2. Ennagono

3. Esagono

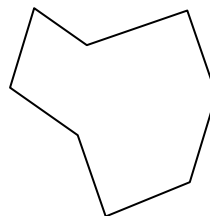
4)



5)



6)

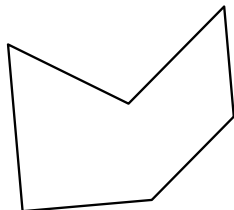


4. Quadrilatero

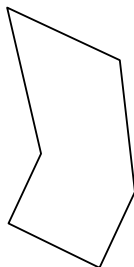
5. Esagono

6. Ottagono

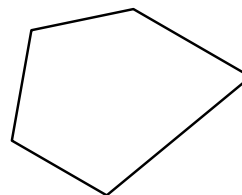
7)



8)



9)




7. Esagono

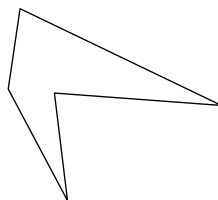
8. Esagono

9. Pentagono

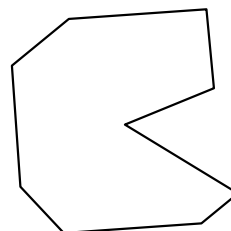
10)



11)



12)



10. Decagono


11. Pentagono

12. Ennagono

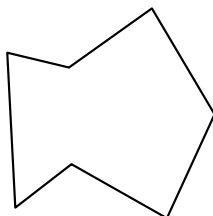
13. Decagono

14. Ettagono

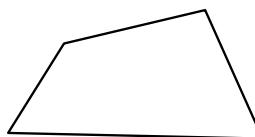
13)



14)



15)




15. Quadrilatero

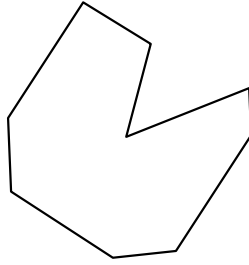


Identifica il tipo di forma rappresentata.

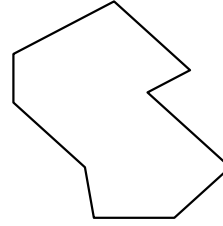
1)



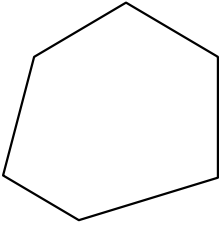
2)



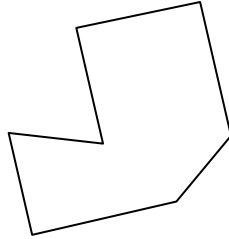
3)




4)



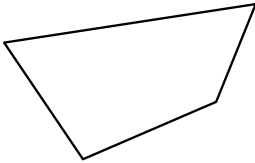
5)



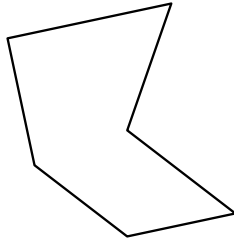
6)




7)



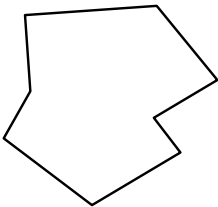
8)



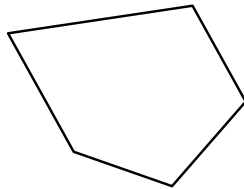
9)



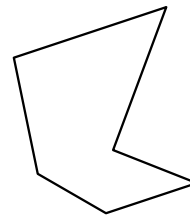
10)



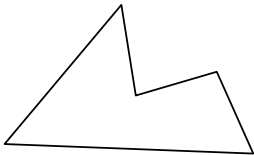
11)



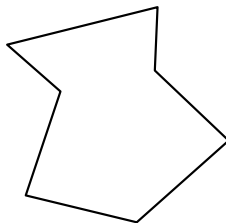
12)



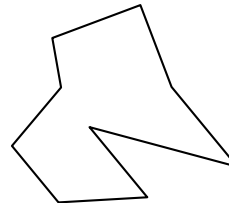
13)



14)



15)



Risposte

1. \_\_\_\_\_

2. \_\_\_\_\_

3. \_\_\_\_\_

4. \_\_\_\_\_

5. \_\_\_\_\_

6. \_\_\_\_\_

7. \_\_\_\_\_

8. \_\_\_\_\_

9. \_\_\_\_\_

10. \_\_\_\_\_

11. \_\_\_\_\_

12. \_\_\_\_\_

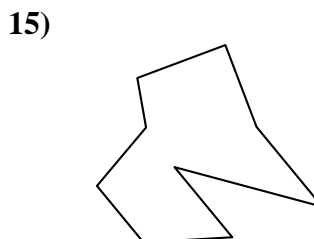
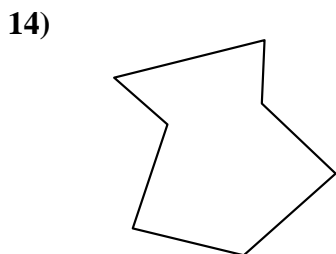
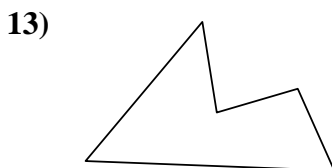
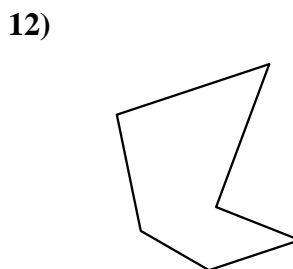
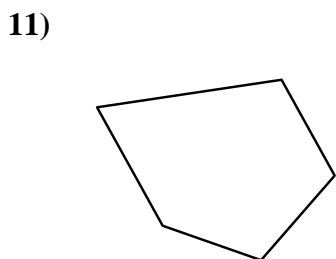
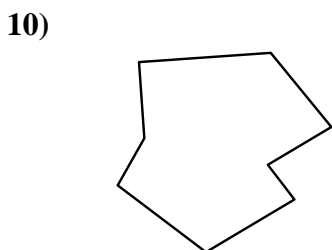
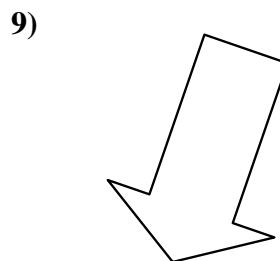
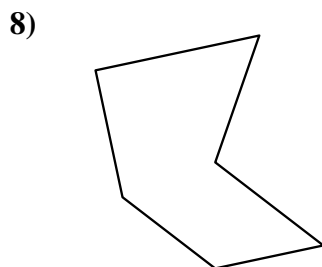

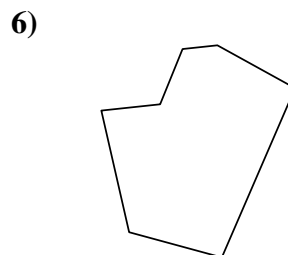
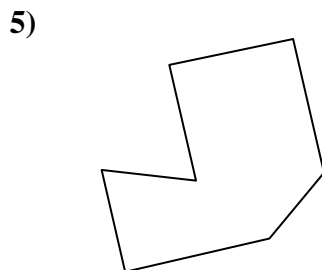
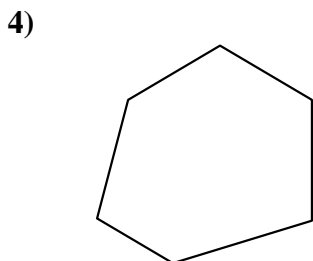
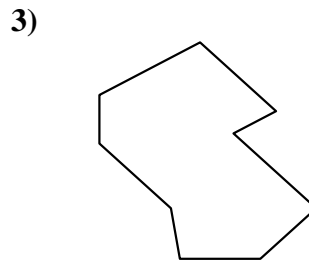
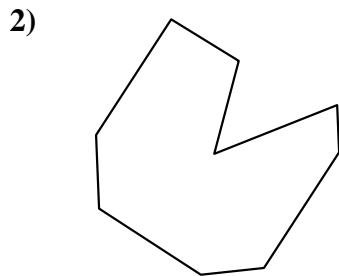
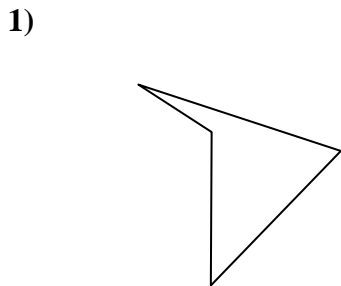
13. \_\_\_\_\_

14. \_\_\_\_\_

15. \_\_\_\_\_



Identifica il tipo di forma rappresentata.



Risposte

1. Quadrilatero

2. Ennagono

3. Ennagono

4. Esagono

5. Ettagono

6. Ettagono

7. Quadrilatero

8. Esagono

9. Ettagono

10. Ottagono

11. Pentagono

12. Esagono

13. Pentagono

14. Ettagono

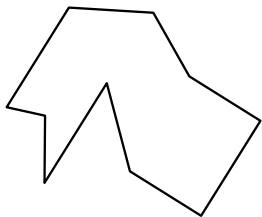
15. Ennagono






Identifica il tipo di forma rappresentata.

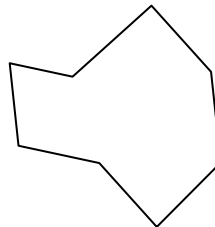
1)



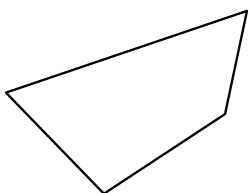
2)



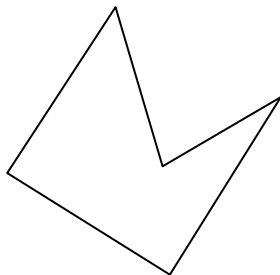
3)




4)




5)



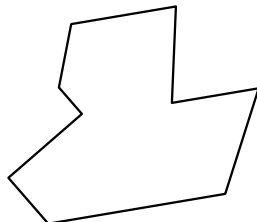
6)



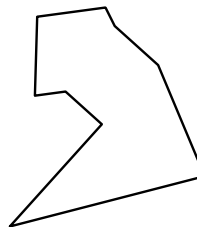
7)



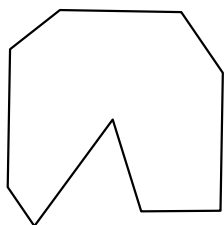
8)



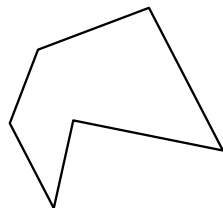
9)



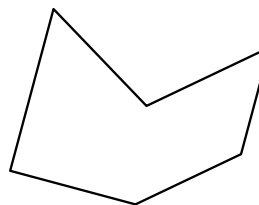
10)




11)



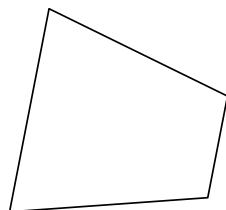
12)



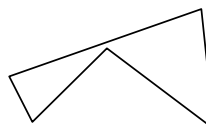
13)



14)



15)



**Risposte**

1. \_\_\_\_\_

2. \_\_\_\_\_

3. \_\_\_\_\_

4. \_\_\_\_\_

5. \_\_\_\_\_

6. \_\_\_\_\_

7. \_\_\_\_\_

8. \_\_\_\_\_

9. \_\_\_\_\_

10. \_\_\_\_\_

11. \_\_\_\_\_

12. \_\_\_\_\_

13. \_\_\_\_\_

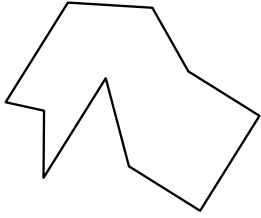
14. \_\_\_\_\_

15. \_\_\_\_\_




Identifica il tipo di forma rappresentata.

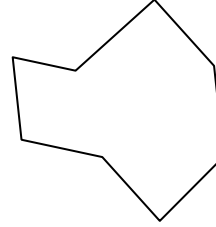
1)



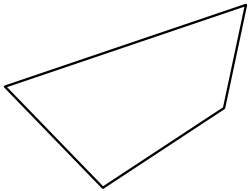
2)




3)



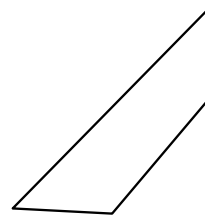
4)




5)



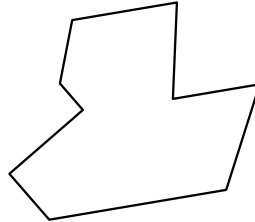
6)



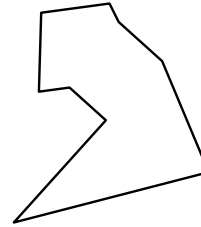
7)



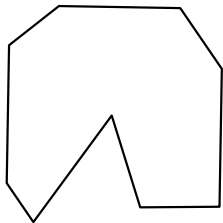
8)



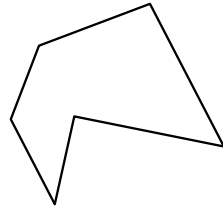
9)



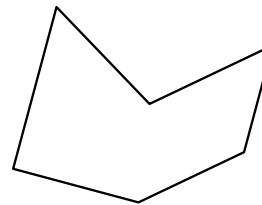
10)




11)



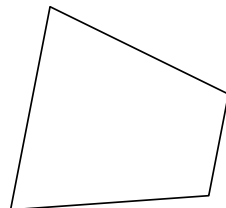
12)



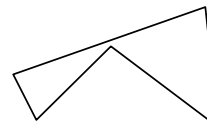
13)



14)



15)



Risposte

1. Decagono

2. Quadrilatero

3. Ottagono

4. Quadrilatero

5. Pentagono

6. Quadrilatero

7. Decagono

8. Ennagono

9. Ennagono

10. Ennagono

11. Esagono

12. Esagono

13. Decagono

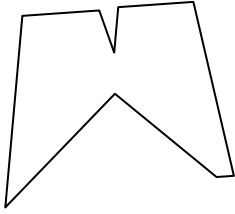
14. Quadrilatero

15. Pentagono




Identifica il tipo di forma rappresentata.

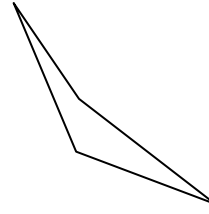
1)



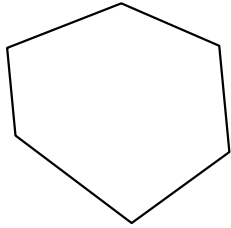
2)



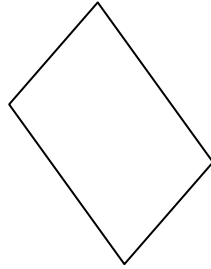
3)



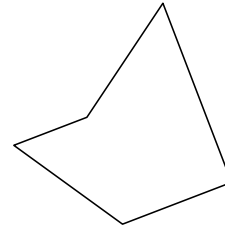
4)



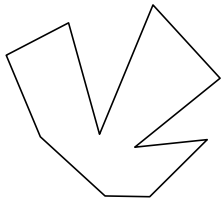
5)



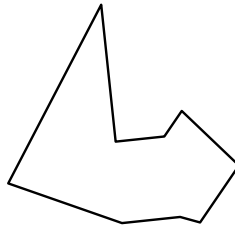
6)



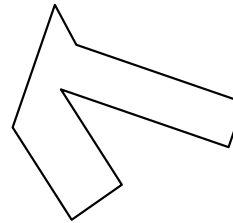
7)



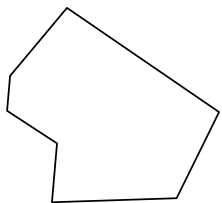
8)




9)



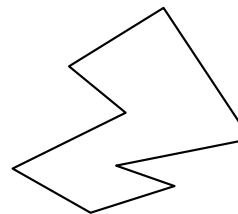
10)



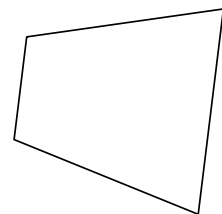
11)



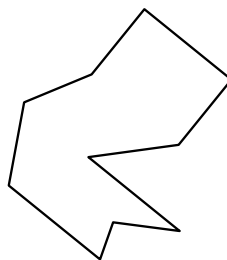
12)



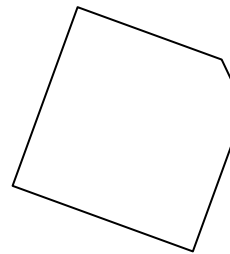
13)



14)



15)



Risposte

1. \_\_\_\_\_

2. \_\_\_\_\_

3. \_\_\_\_\_

4. \_\_\_\_\_

5. \_\_\_\_\_

6. \_\_\_\_\_

7. \_\_\_\_\_

8. \_\_\_\_\_

9. \_\_\_\_\_

10. \_\_\_\_\_

11. \_\_\_\_\_

12. \_\_\_\_\_

13. \_\_\_\_\_

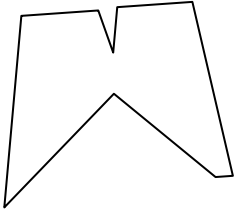
14. \_\_\_\_\_

15. \_\_\_\_\_




Identifica il tipo di forma rappresentata.

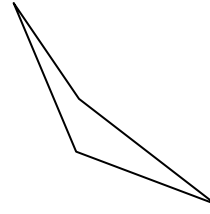
1)



2)



3)



Risposte

1. Ennagono

2. Decagono

3. Quadrilatero

4. Esagono

5. Quadrilatero

6. Pentagono

7. Decagono

8. Ennagono

9. Ottagono

10. Ettagono

11. Quadrilatero

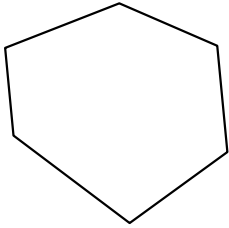
12. Ottagono

13. Quadrilatero

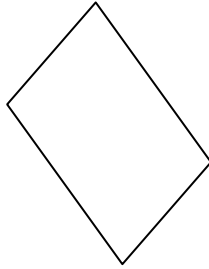
14. Decagono

15. Pentagono

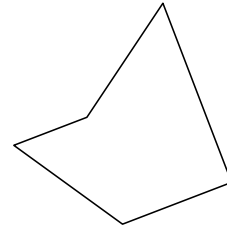
4)



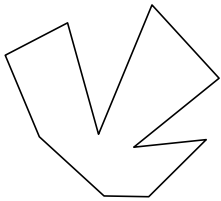
5)



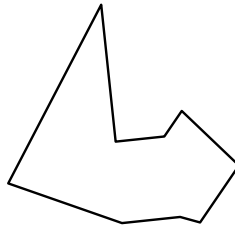
6)



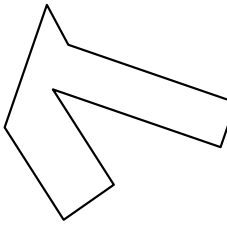
7)



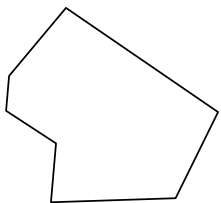
8)




9)



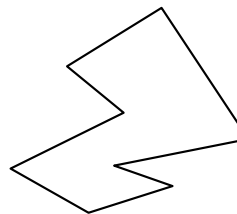
10)



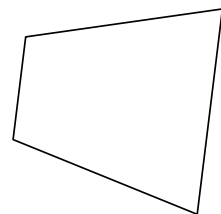
11)



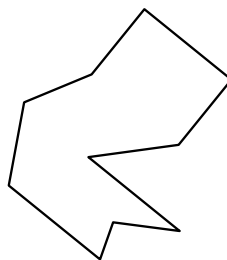
12)



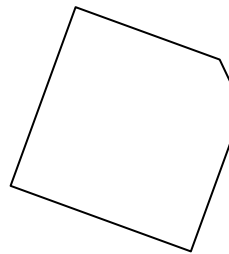
13)



14)

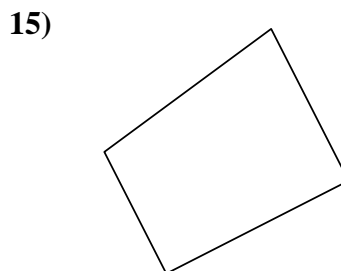
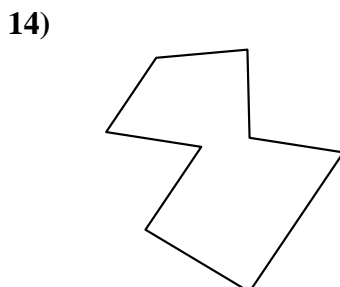
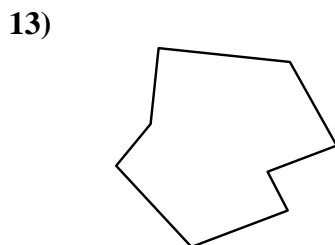
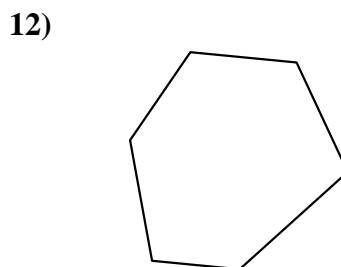
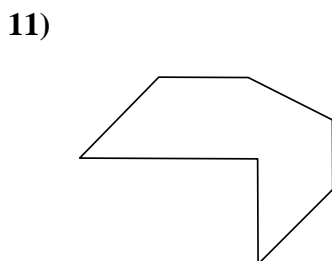
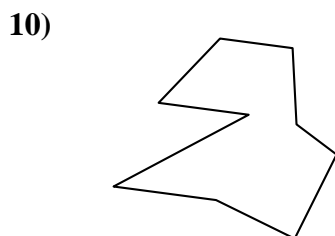
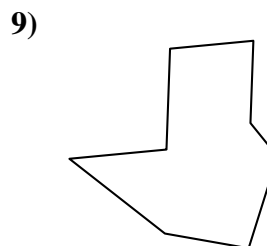
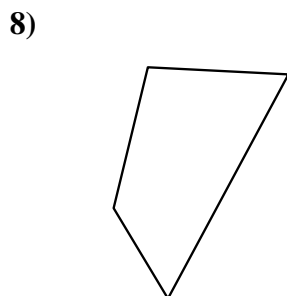

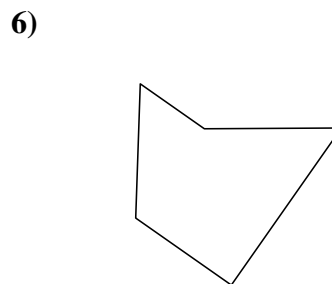
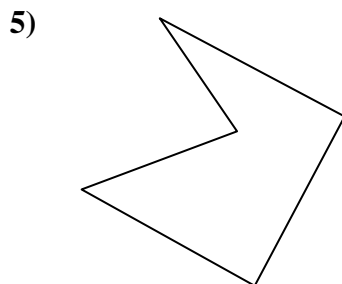
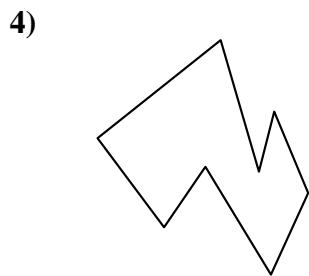
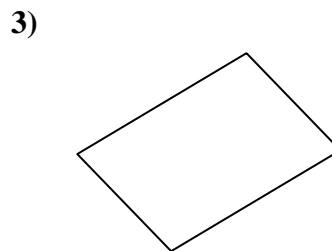
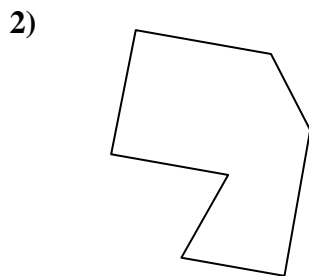
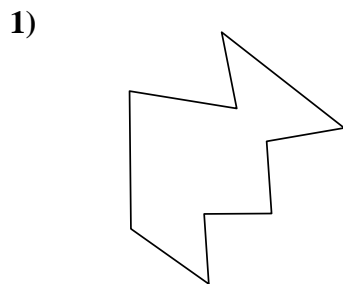


15)





Identifica il tipo di forma rappresentata.



**Risposte**

1. \_\_\_\_\_

2. \_\_\_\_\_

3. \_\_\_\_\_

4. \_\_\_\_\_

5. \_\_\_\_\_

6. \_\_\_\_\_

7. \_\_\_\_\_

8. \_\_\_\_\_

9. \_\_\_\_\_

10. \_\_\_\_\_

11. \_\_\_\_\_

12. \_\_\_\_\_

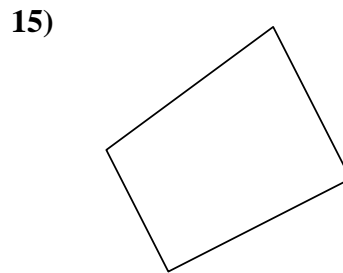
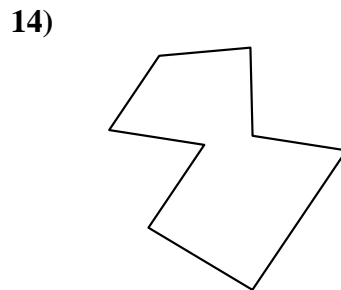
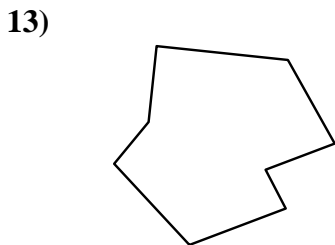
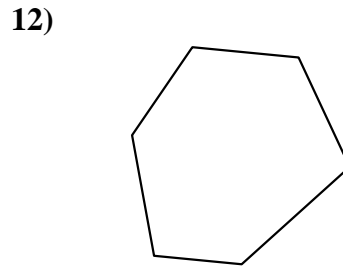
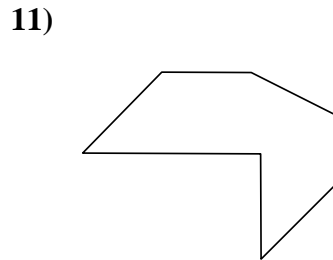
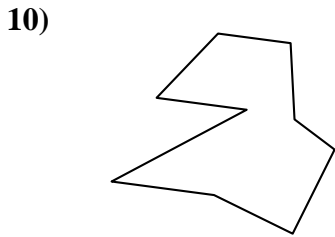
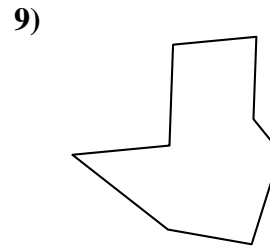
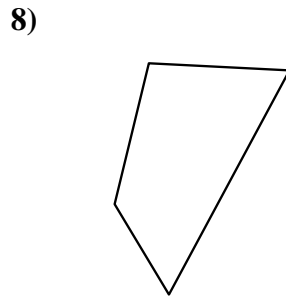

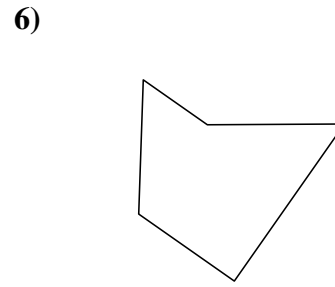
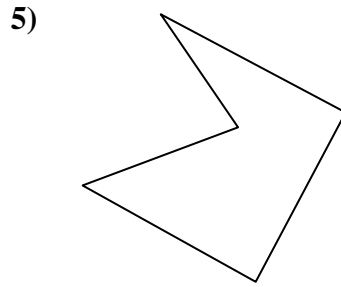
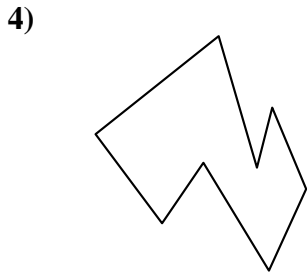
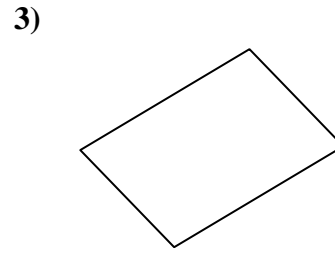
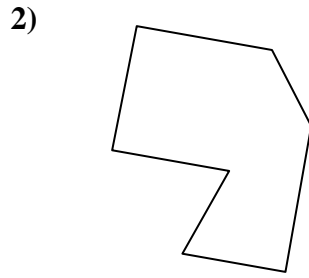
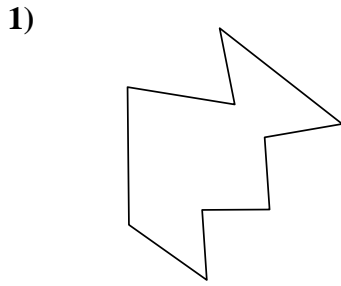
13. \_\_\_\_\_

14. \_\_\_\_\_

15. \_\_\_\_\_



Identifica il tipo di forma rappresentata.



Risposte

1. Decagono

2. Ettagono

3. Quadrilatero

4. Ottagono

5. Pentagono

6. Pentagono

7. Esagono

8. Quadrilatero

9. Ottagono

10. Ennagono

11. Ettagono

12. Esagono

13. Ottagono


14. Ottagono

15. Quadrilatero

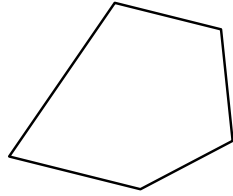


Identifica il tipo di forma rappresentata.

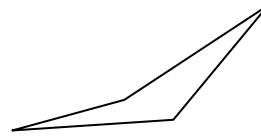
1)



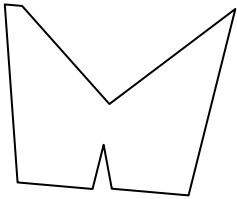
2)



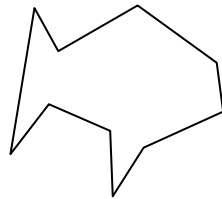
3)



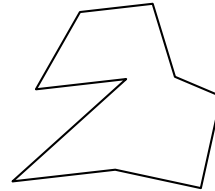
4)



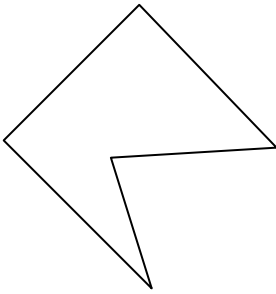
5)



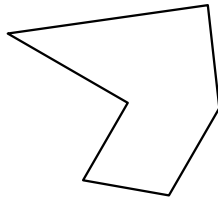
6)



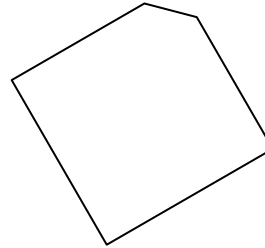
7)



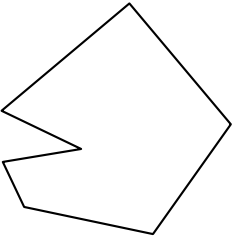
8)



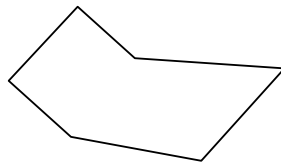
9)



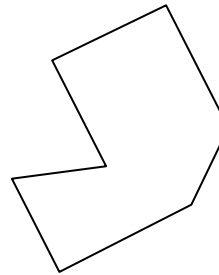
10)



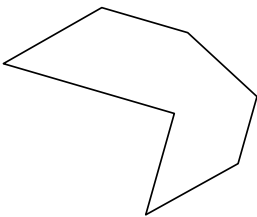
11)



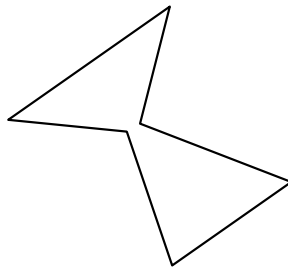
12)



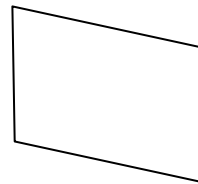
13)



14)



15)



**Risposte**

1. \_\_\_\_\_

2. \_\_\_\_\_

3. \_\_\_\_\_

4. \_\_\_\_\_

5. \_\_\_\_\_

6. \_\_\_\_\_

7. \_\_\_\_\_

8. \_\_\_\_\_

9. \_\_\_\_\_

10. \_\_\_\_\_

11. \_\_\_\_\_

12. \_\_\_\_\_

13. \_\_\_\_\_

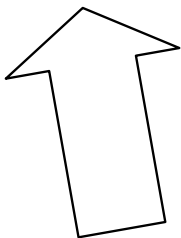
14. \_\_\_\_\_

15. \_\_\_\_\_

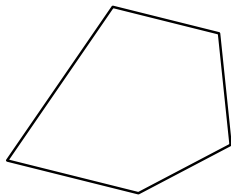


Identifica il tipo di forma rappresentata.

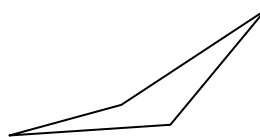
1)



2)



3)



Risposte

1. Ettagono

2. Pentagono

3. Quadrilatero

4. Ennagono

5. Decagono

6. Ennagono

7. Pentagono

8. Esagono

9. Pentagono

10. Ettagono

11. Esagono


12. Ettagono

13. Ettagono

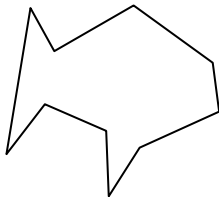
14. Esagono

15. Quadrilatero

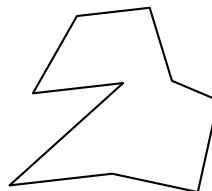
4)



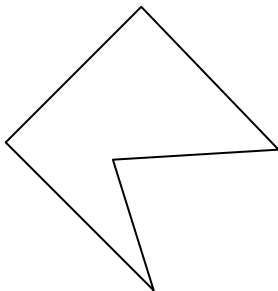
5)



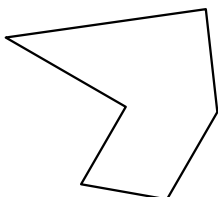
6)



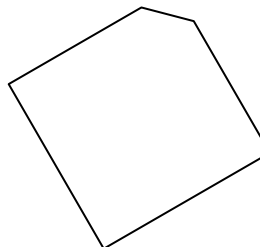
7)



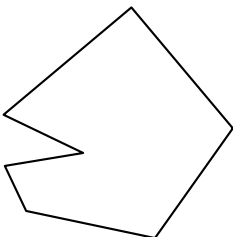
8)



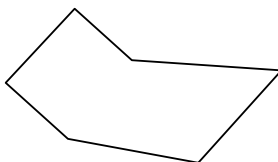
9)



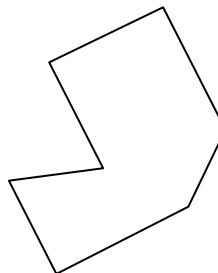
10)



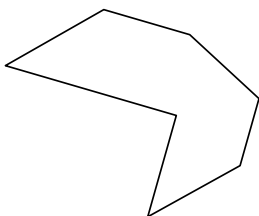
11)



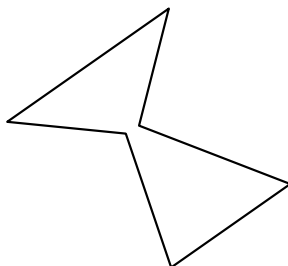
12)



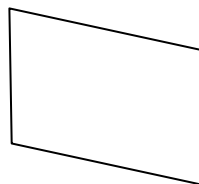
13)



14)



15)









Identifica il tipo di forma rappresentata.

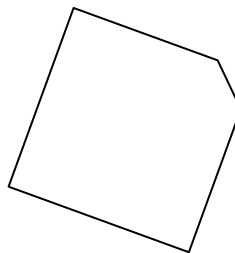
1)



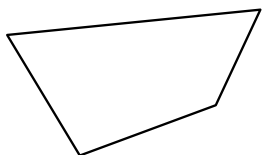
2)



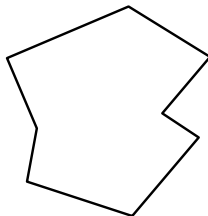
3)



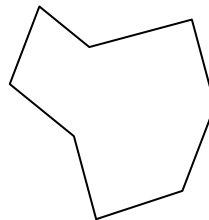
4)



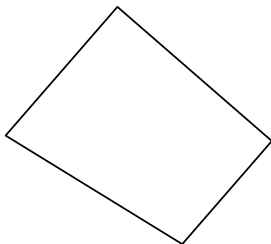
5)




6)



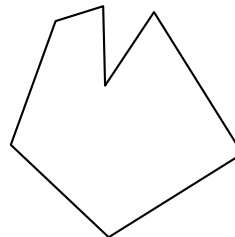
7)




8)



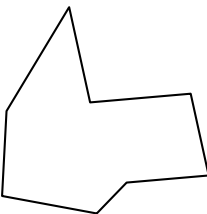
9)



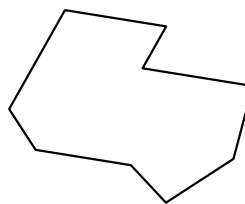
10)



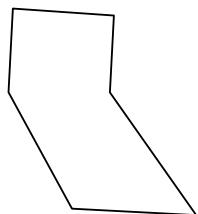
11)



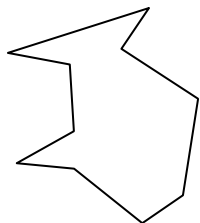
12)



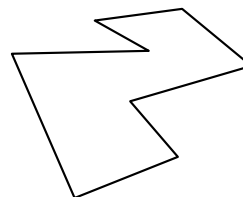
13)



14)



15)



**Risposte**

1. \_\_\_\_\_

2. \_\_\_\_\_

3. \_\_\_\_\_

4. \_\_\_\_\_

5. \_\_\_\_\_

6. \_\_\_\_\_

7. \_\_\_\_\_

8. \_\_\_\_\_

9. \_\_\_\_\_

10. \_\_\_\_\_

11. \_\_\_\_\_

12. \_\_\_\_\_

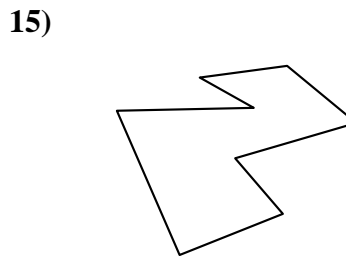
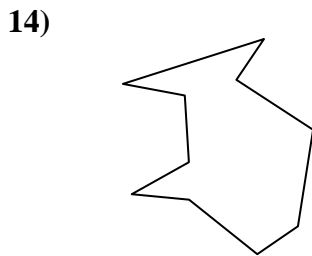
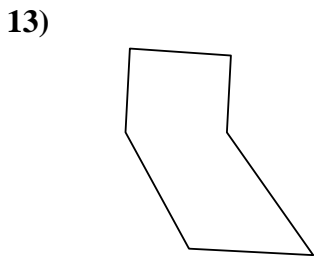
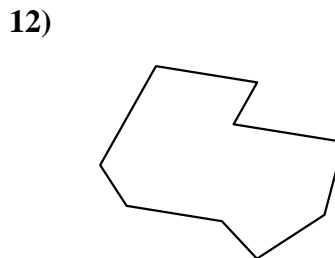
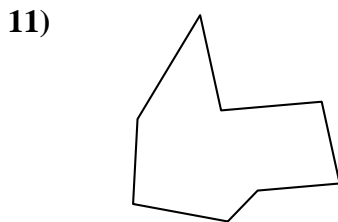
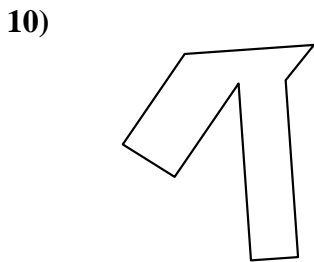
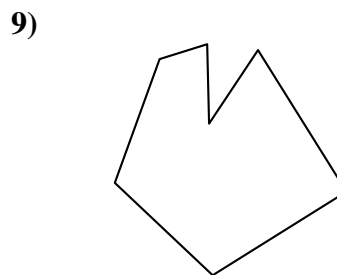
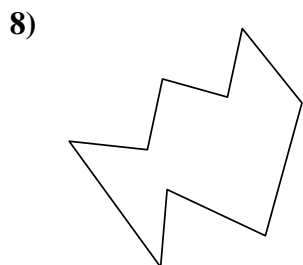
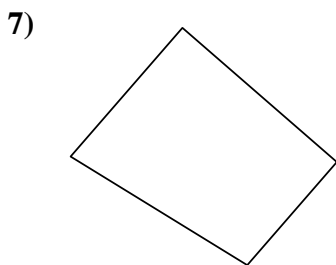
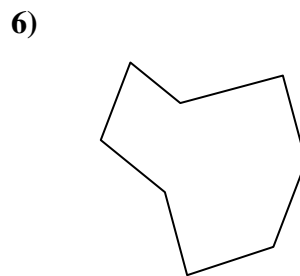
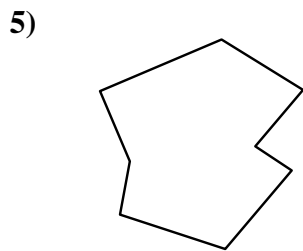

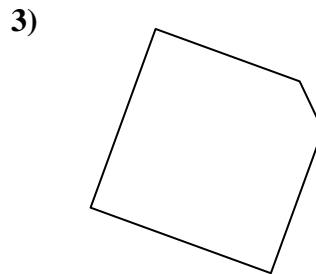
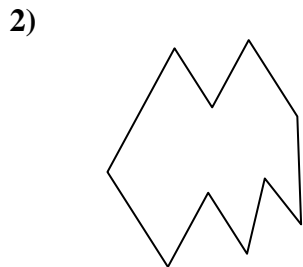

13. \_\_\_\_\_

14. \_\_\_\_\_

15. \_\_\_\_\_



Identifica il tipo di forma rappresentata.



Risposte

1. Ennagono

2. Decagono

3. Pentagono

4. Quadrilatero

5. Ottagono

6. Ottagono

7. Quadrilatero

8. Decagono

9. Ettagono

10. Ottagono

11. Ottagono

12. Ennagono

13. Esagono

14. Decagono

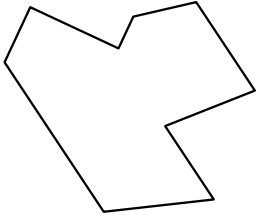
15. Ottagono



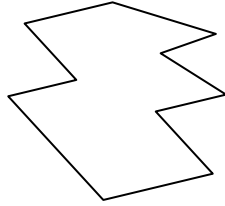
Identifica il tipo di forma rappresentata.

**Risposte**

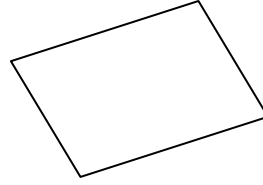
1)



2)



3)

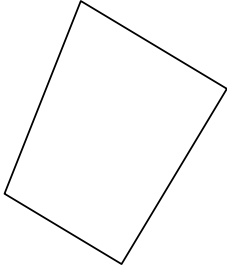


1. \_\_\_\_\_

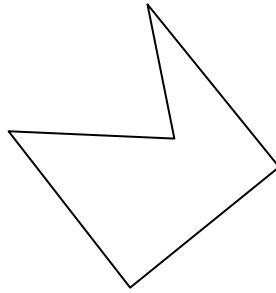
2. \_\_\_\_\_

3. \_\_\_\_\_

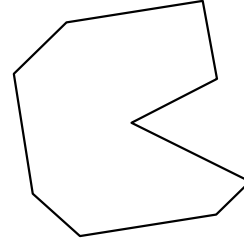
4)



5)



6)



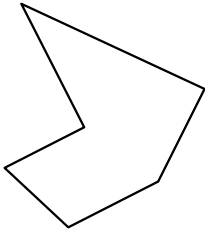
4. \_\_\_\_\_

5. \_\_\_\_\_

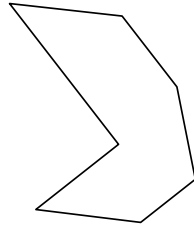
6. \_\_\_\_\_

7. \_\_\_\_\_

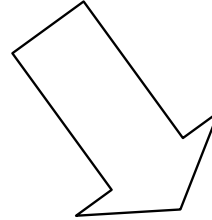
7)



8)



9)



8. \_\_\_\_\_

9. \_\_\_\_\_

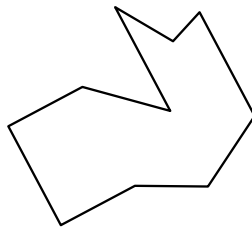
10. \_\_\_\_\_

11. \_\_\_\_\_


10)



11)



12)



12. \_\_\_\_\_

13. \_\_\_\_\_

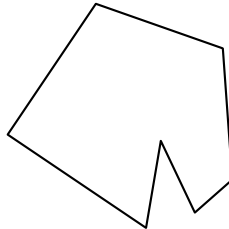
14. \_\_\_\_\_

15. \_\_\_\_\_

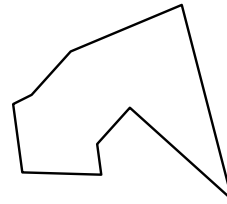
13)



14)



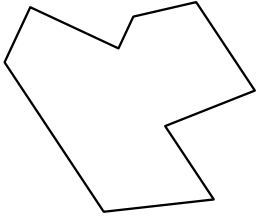
15)



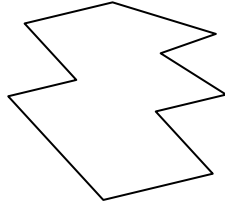


Identifica il tipo di forma rappresentata.

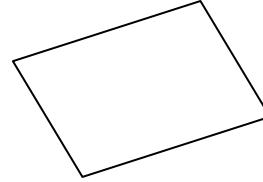
1)



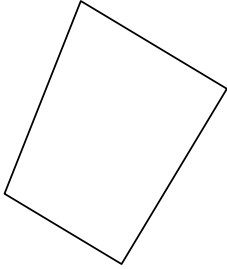
2)



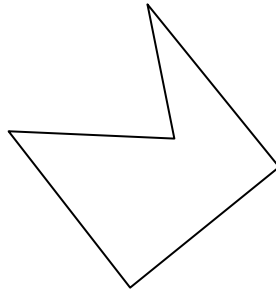
3)



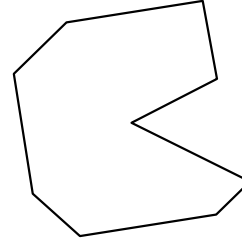
4)



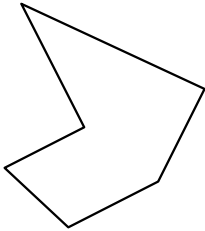
5)



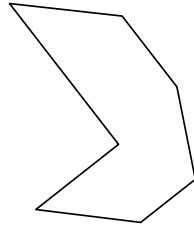
6)



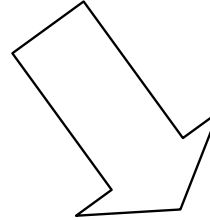
7)



8)



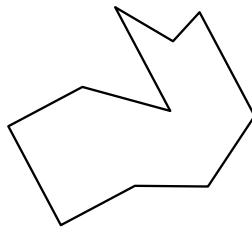
9)



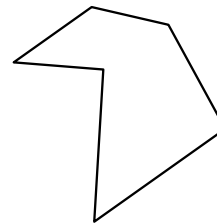
10)



11)



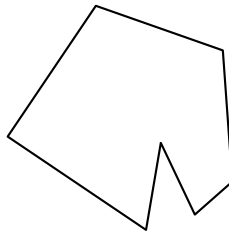
12)



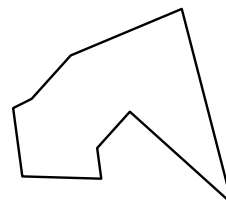
13)



14)



15)



**Risposte**

1. **Ennagono**

2. **Decagono**

3. **Quadrilatero**

4. **Quadrilatero**

5. **Pentagono**

6. **Ennagono**

7. **Esagono**

8. **Ettagono**

9. **Ettagono**

10. **Quadrilatero**

11. **Decagono**

12. **Esagono**

13. **Esagono**

14. **Ettagono**

15. **Ennagono**