


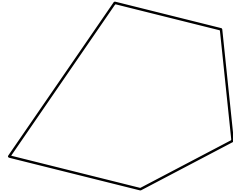


Identifica il tipo di forma rappresentata.

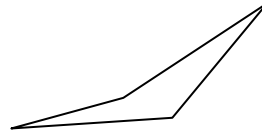
1)



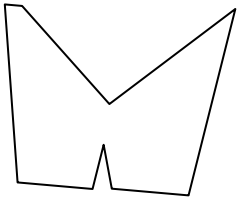
2)



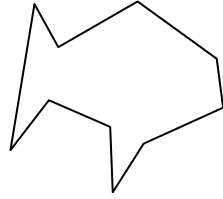
3)



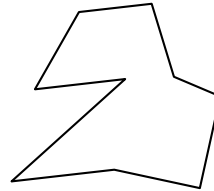
4)



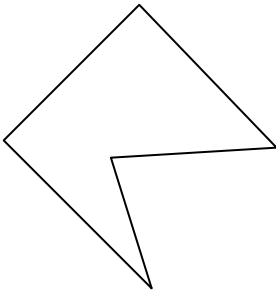
5)



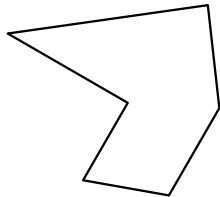
6)



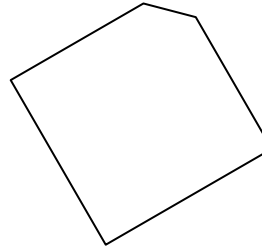
7)



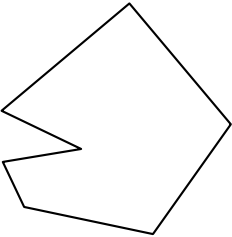
8)



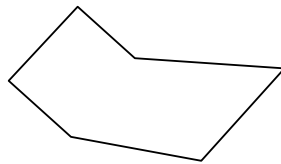
9)



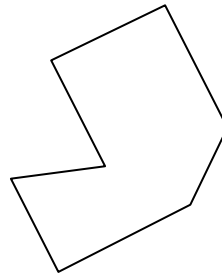
10)



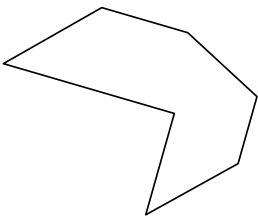
11)



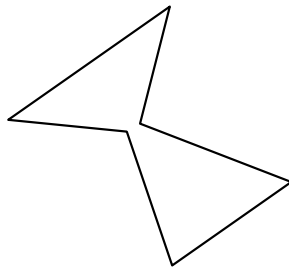
12)



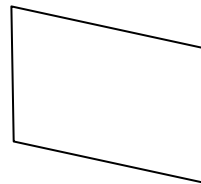
13)



14)



15)



Risposte

1. _____

2. _____

3. _____

4. _____

5. _____

6. _____

7. _____

8. _____

9. _____

10. _____

11. _____

12. _____

13. _____

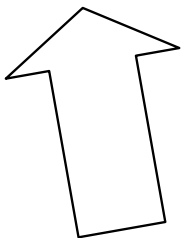
14. _____

15. _____

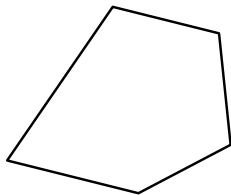


Identifica il tipo di forma rappresentata.

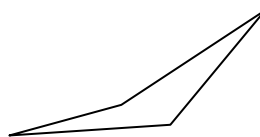
1)



2)



3)




Risposte

1. Ettagono

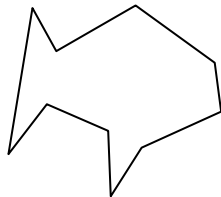
2. Pentagono

3. Quadrilatero

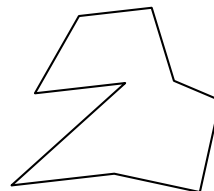
4)



5)



6)



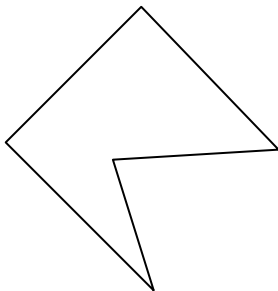
4. Ennagono

5. Decagono

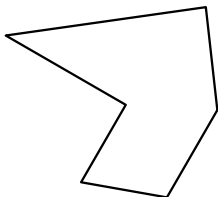
6. Ennagono

7. Pentagono

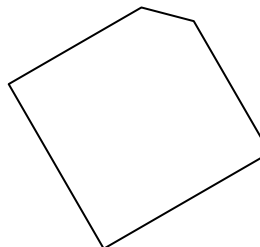
7)



8)



9)

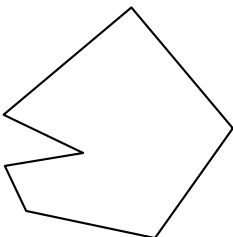


8. Esagono

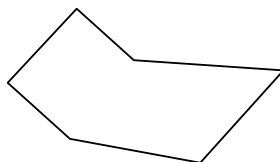
9. Pentagono

10. Ettagono

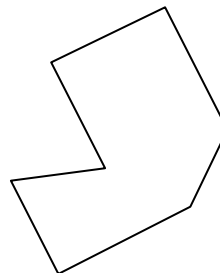
10)



11)



12)



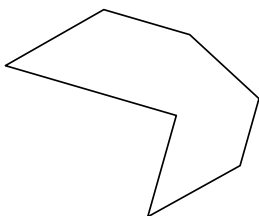
11. Esagono

12. Ettagono

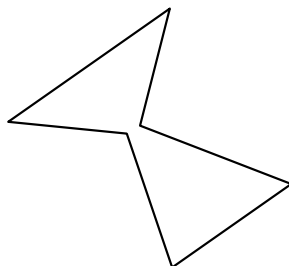
13. Ettagono

14. Esagono

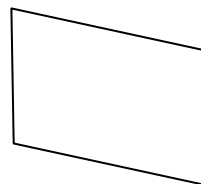
13)



14)



15)



15. Quadrilatero