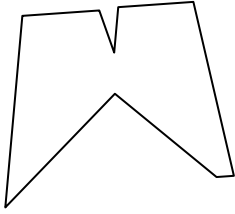





Identifica il tipo di forma rappresentata.

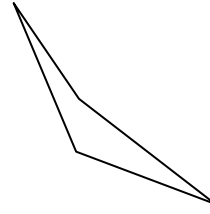
1)



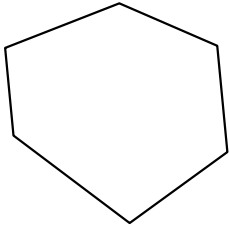
2)



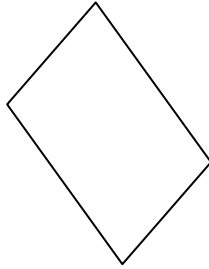
3)



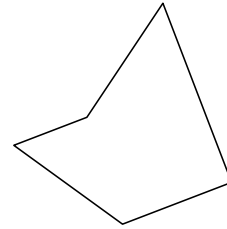
4)



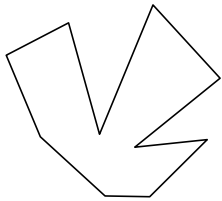
5)



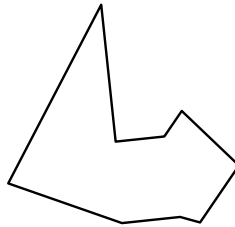
6)



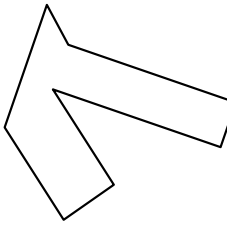
7)



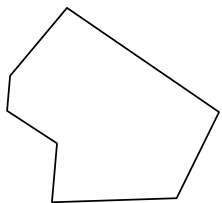
8)




9)



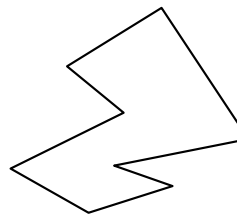
10)



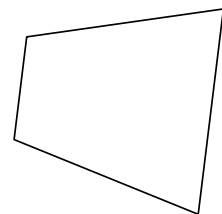
11)



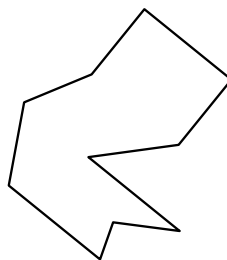
12)



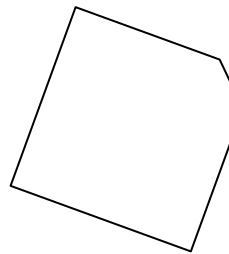
13)



14)



15)



Risposte

1. \_\_\_\_\_

2. \_\_\_\_\_

3. \_\_\_\_\_

4. \_\_\_\_\_

5. \_\_\_\_\_

6. \_\_\_\_\_

7. \_\_\_\_\_

8. \_\_\_\_\_

9. \_\_\_\_\_

10. \_\_\_\_\_

11. \_\_\_\_\_

12. \_\_\_\_\_

13. \_\_\_\_\_

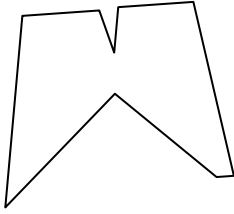
14. \_\_\_\_\_

15. \_\_\_\_\_




Identifica il tipo di forma rappresentata.

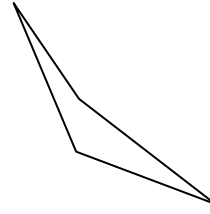
1)



2)



3)



Risposte

1. Ennagono

2. Decagono

3. Quadrilatero

4. Esagono

5. Quadrilatero

6. Pentagono

7. Decagono

8. Ennagono

9. Ottagono

10. Ettagono

11. Quadrilatero

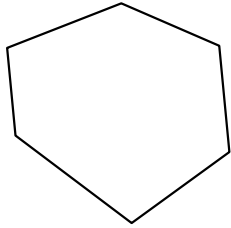
12. Ottagono

13. Quadrilatero

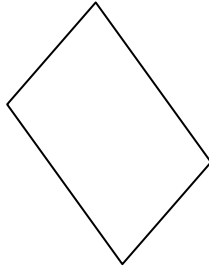
14. Decagono

15. Pentagono

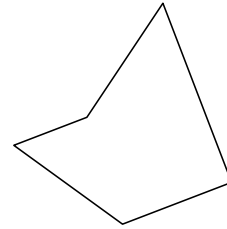
4)



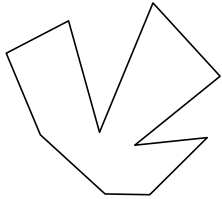
5)



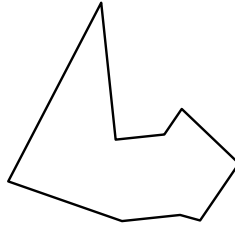
6)



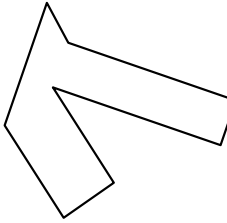
7)



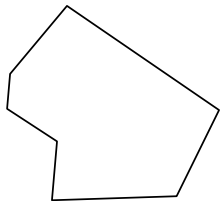
8)




9)



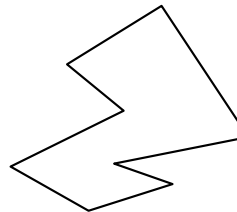
10)



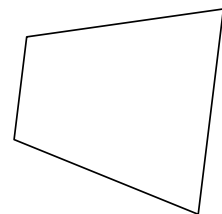
11)



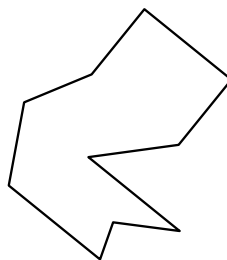
12)



13)



14)



15)

