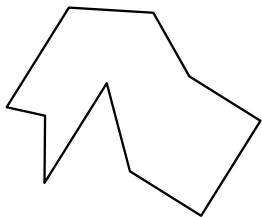





Identifica il tipo di forma rappresentata.

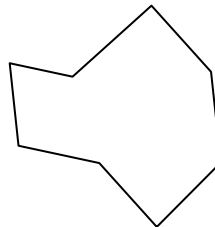
1)



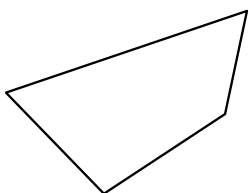
2)



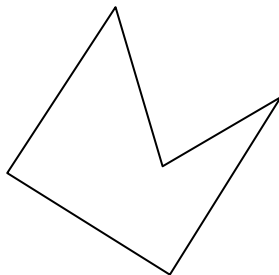
3)




4)




5)



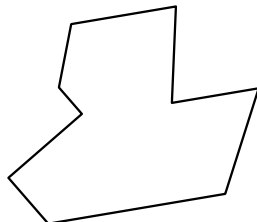
6)



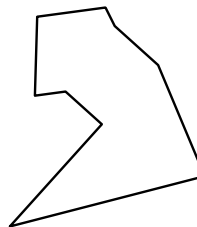
7)



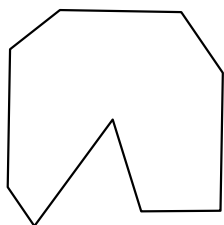
8)



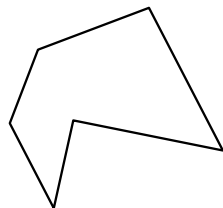
9)



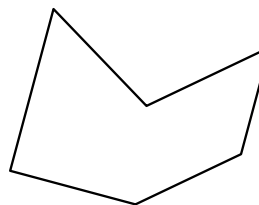
10)




11)



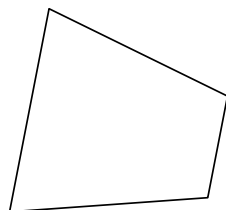
12)



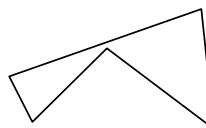
13)



14)



15)



**Risposte**

1. \_\_\_\_\_

2. \_\_\_\_\_

3. \_\_\_\_\_

4. \_\_\_\_\_

5. \_\_\_\_\_

6. \_\_\_\_\_

7. \_\_\_\_\_

8. \_\_\_\_\_

9. \_\_\_\_\_

10. \_\_\_\_\_

11. \_\_\_\_\_

12. \_\_\_\_\_

13. \_\_\_\_\_

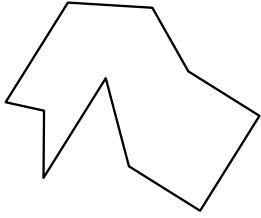
14. \_\_\_\_\_

15. \_\_\_\_\_




Identifica il tipo di forma rappresentata.

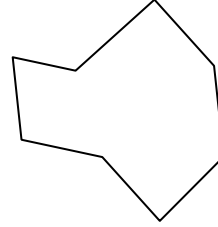
1)



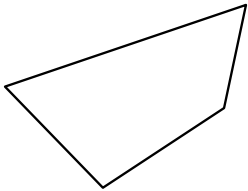
2)




3)



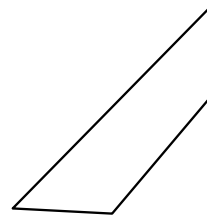
4)




5)



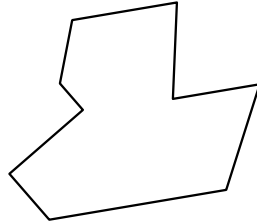
6)



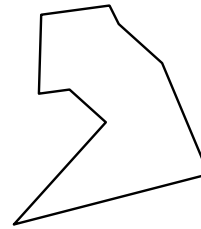
7)



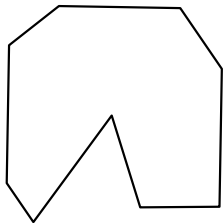
8)



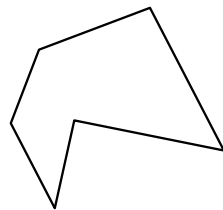
9)



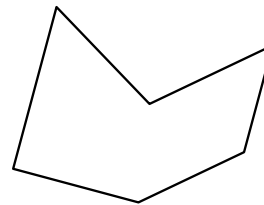
10)




11)



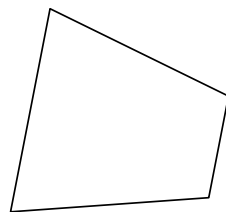
12)



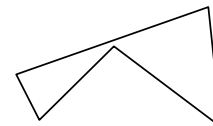
13)



14)



15)



Risposte

1. Decagono

2. Quadrilatero

3. Ottagono

4. Quadrilatero

5. Pentagono

6. Quadrilatero

7. Decagono

8. Ennagono

9. Ennagono

10. Ennagono

11. Esagono

12. Esagono

13. Decagono

14. Quadrilatero

15. Pentagono