


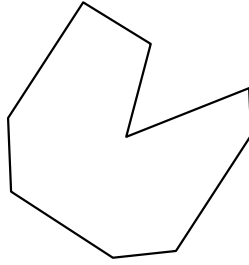


Identifica il tipo di forma rappresentata.

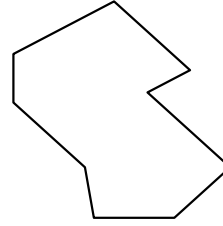
1)



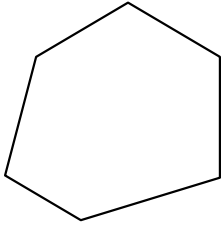
2)



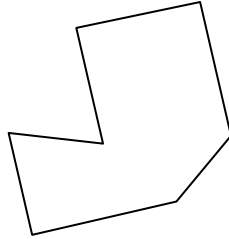
3)




4)



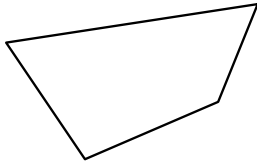
5)



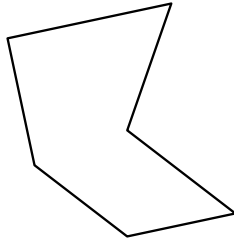
6)




7)



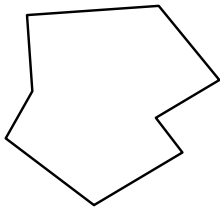
8)



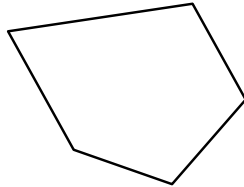
9)



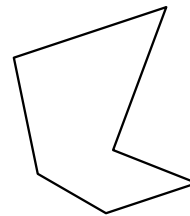
10)



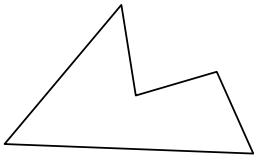
11)



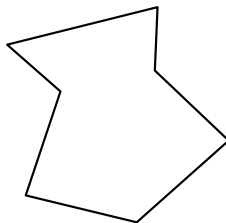
12)



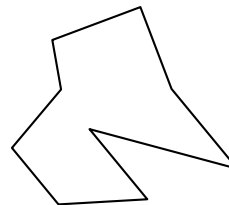
13)



14)



15)



Risposte

1. \_\_\_\_\_

2. \_\_\_\_\_

3. \_\_\_\_\_

4. \_\_\_\_\_

5. \_\_\_\_\_

6. \_\_\_\_\_

7. \_\_\_\_\_

8. \_\_\_\_\_

9. \_\_\_\_\_

10. \_\_\_\_\_

11. \_\_\_\_\_

12. \_\_\_\_\_

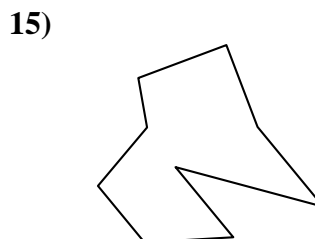
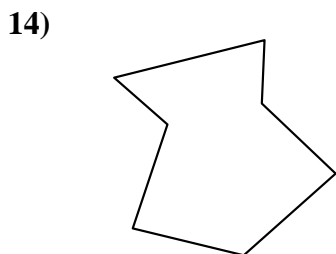
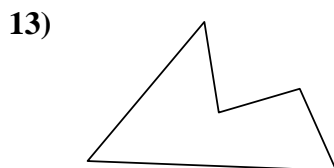
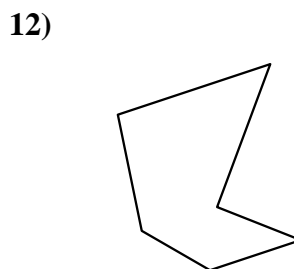
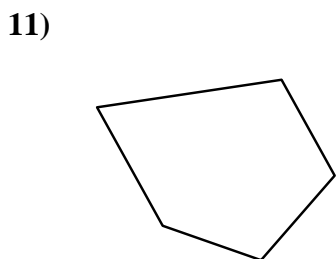
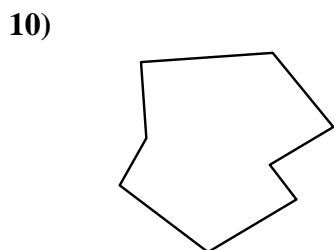
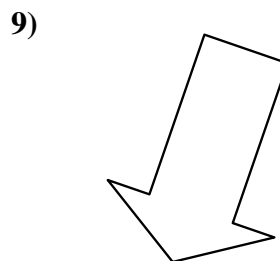
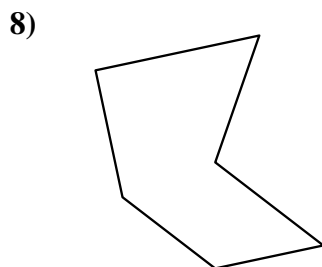
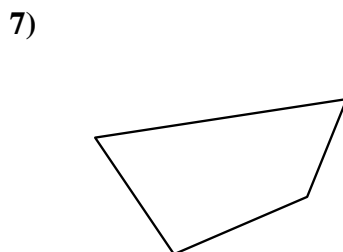
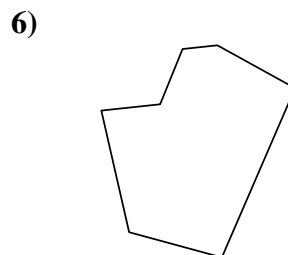
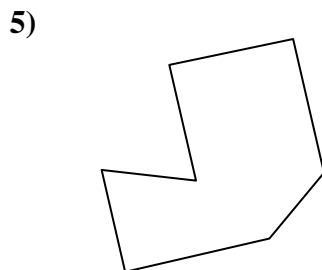
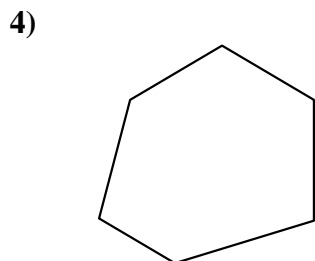
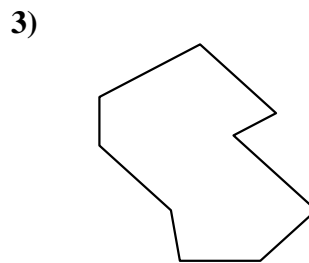
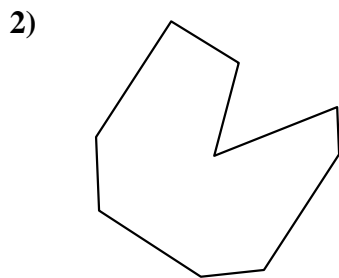
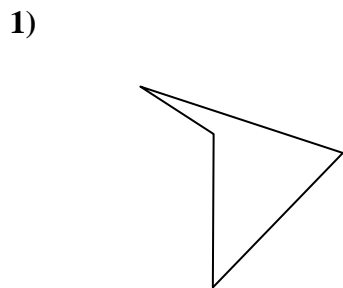
13. \_\_\_\_\_

14. \_\_\_\_\_

15. \_\_\_\_\_



Identifica il tipo di forma rappresentata.



Risposte

1. Quadrilatero

2. Ennagono

3. Ennagono

4. Esagono

5. Ettagono

6. Ettagono

7. Quadrilatero

8. Esagono

9. Ettagono

10. Ottagono

11. Pentagono

12. Esagono

13. Pentagono

14. Ettagono

15. Ennagono