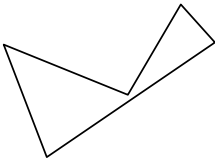


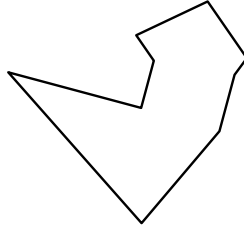


Identifica il tipo di forma rappresentata.


1)



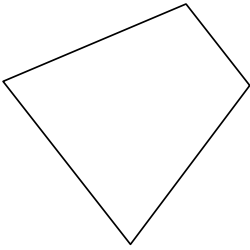
2)



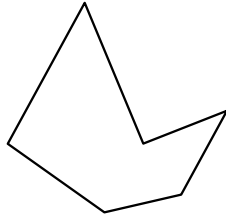
3)



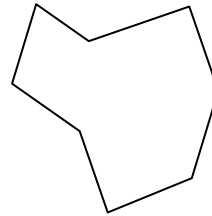
4)



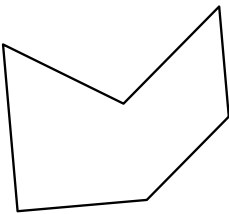
5)



6)



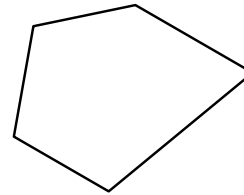
7)




8)



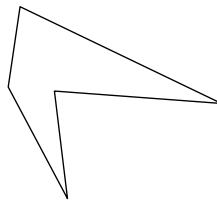
9)



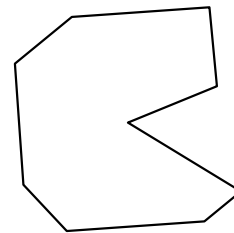
10)




11)



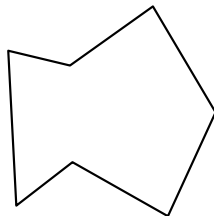
12)



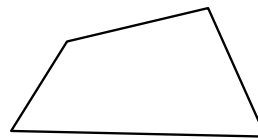
13)



14)



15)



Risposte

1. _____

2. _____

3. _____

4. _____

5. _____

6. _____

7. _____

8. _____

9. _____

10. _____

11. _____

12. _____

13. _____

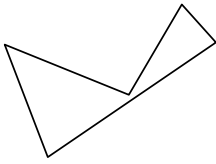
14. _____

15. _____

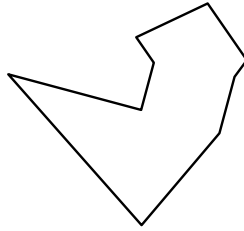


Identifica il tipo di forma rappresentata.


1)



2)



3)



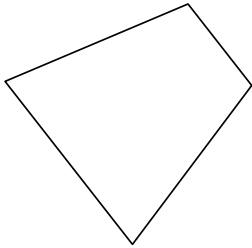
Risposte

1. Pentagono

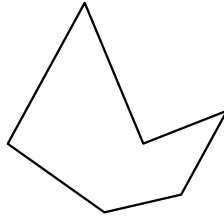
2. Ennagono

3. Esagono

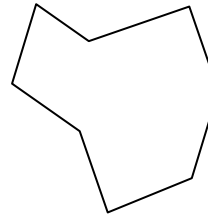
4)



5)



6)

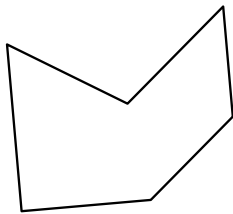


4. Quadrilatero

5. Esagono

6. Ottagono

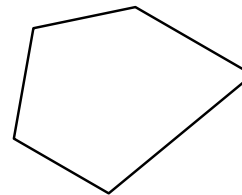
7)



8)



9)




7. Esagono

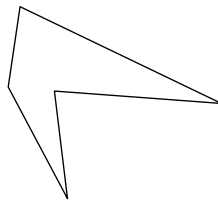
8. Esagono

9. Pentagono

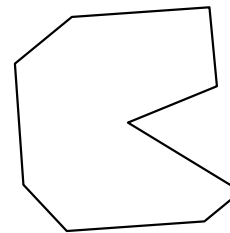
10)



11)



12)



10. Decagono


11. Pentagono

12. Ennagono

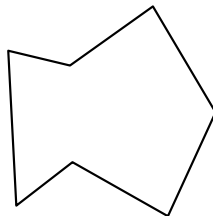
13. Decagono

14. Ettagono

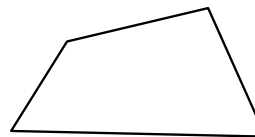
13)



14)



15)



15. Quadrilatero