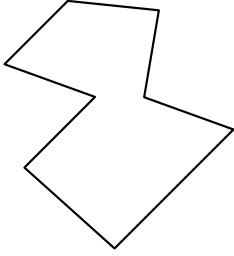


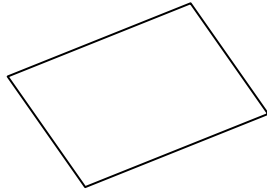


Identifica il tipo di forma rappresentata.

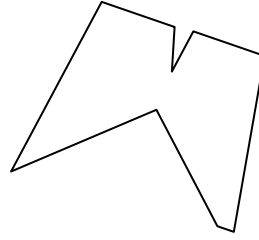
1)



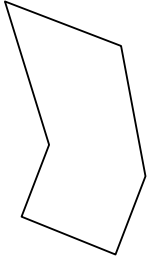
2)



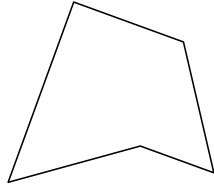
3)



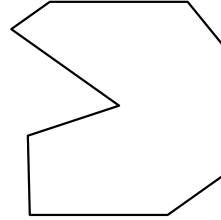
4)




5)



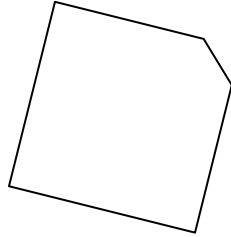
6)



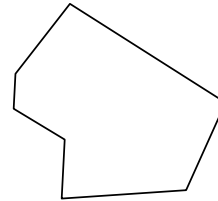
7)



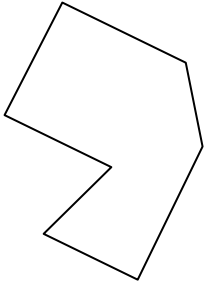
8)



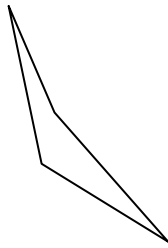
9)



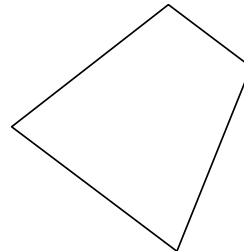
10)



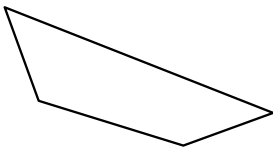
11)




12)



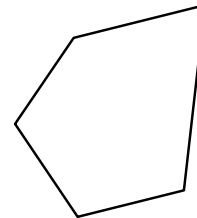
13)



14)



15)



Risposte

1. _____

2. _____

3. _____

4. _____

5. _____

6. _____

7. _____

8. _____

9. _____

10. _____

11. _____

12. _____

13. _____

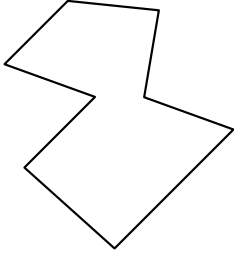
14. _____

15. _____

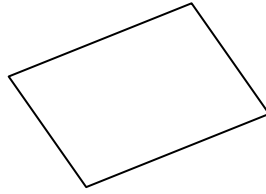


Identifica il tipo di forma rappresentata.

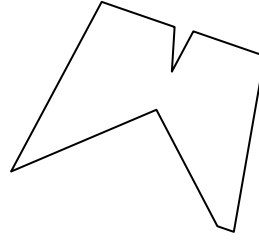
1)



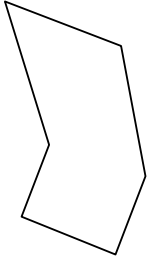
2)



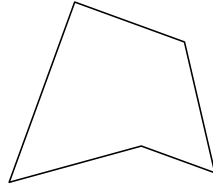
3)



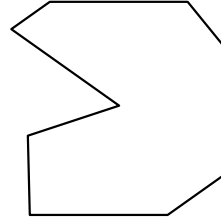
4)




5)



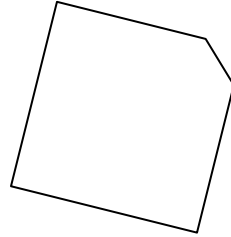
6)



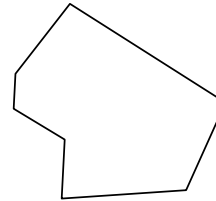
7)



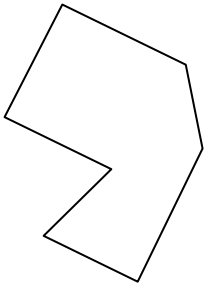
8)



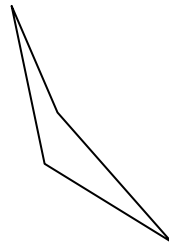
9)



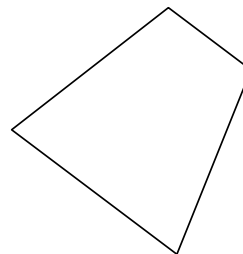
10)



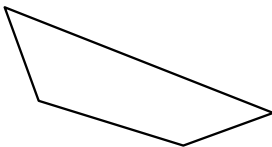
11)




12)



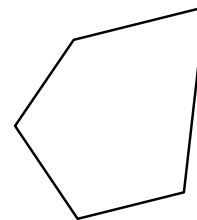
13)



14)



15)



Risposte

1. Ottagono

2. Quadrilatero

3. Ennagono

4. Esagono

5. Pentagono

6. Ennagono

7. Decagono

8. Pentagono

9. Ettagono

10. Ettagono

11. Quadrilatero

12. Quadrilatero

13. Quadrilatero

14. Pentagono

15. Pentagono