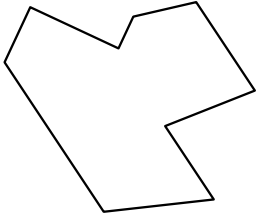




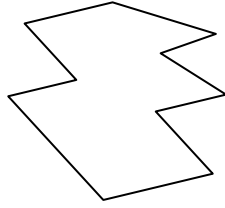
Identifica il tipo di forma rappresentata.

**Risposte**

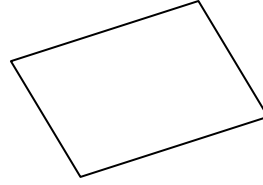
1)



2)



3)

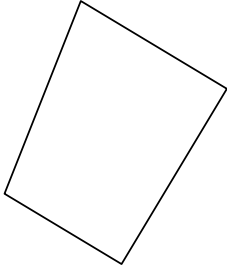


1. \_\_\_\_\_

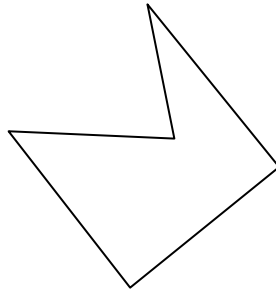
2. \_\_\_\_\_

3. \_\_\_\_\_

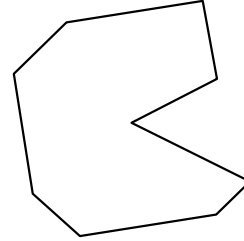
4)



5)



6)



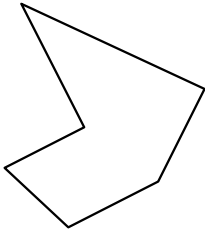
4. \_\_\_\_\_

5. \_\_\_\_\_

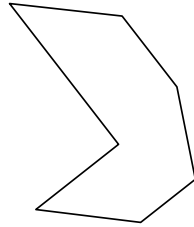
6. \_\_\_\_\_

7. \_\_\_\_\_

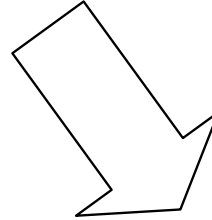
7)



8)



9)



8. \_\_\_\_\_

9. \_\_\_\_\_

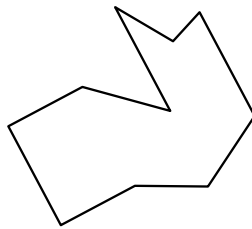
10. \_\_\_\_\_

11. \_\_\_\_\_


10)



11)



12)



12. \_\_\_\_\_

13. \_\_\_\_\_

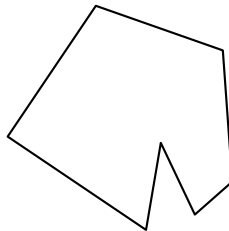
14. \_\_\_\_\_

15. \_\_\_\_\_

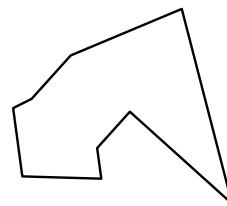
13)



14)



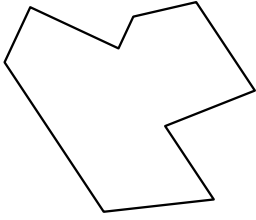
15)



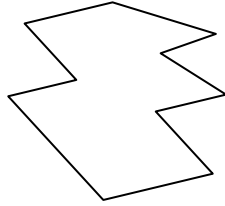


Identifica il tipo di forma rappresentata.

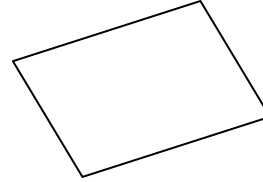
1)



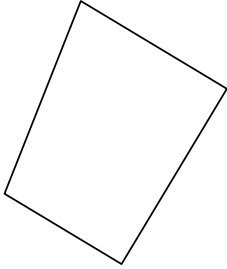
2)



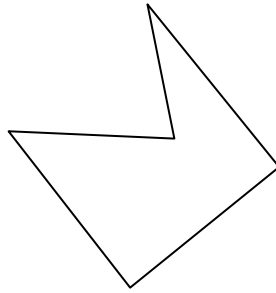
3)



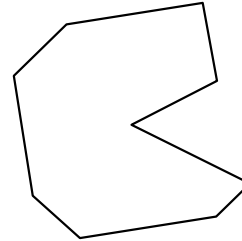
4)



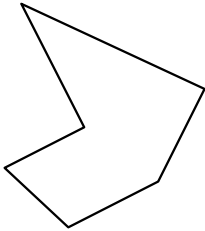
5)



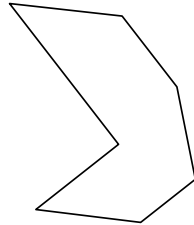
6)



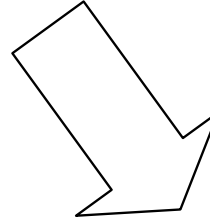
7)



8)



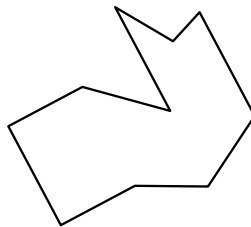
9)



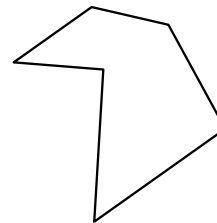
10)



11)



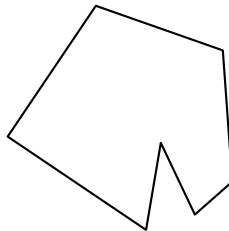
12)



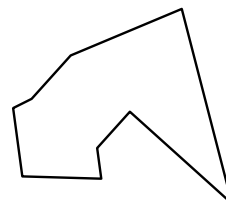
13)



14)



15)



**Risposte**

1. Ennagono

2. Decagono

3. Quadrilatero

4. Quadrilatero

5. Pentagono

6. Ennagono

7. Esagono

8. Ettagono

9. Ettagono

10. Quadrilatero

11. Decagono

12. Esagono

13. Esagono

14. Ettagono

15. Ennagono