



Determina se i triangoli mostrati sono rettangoli oppure no.

Risposte

1)



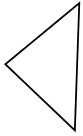
2)



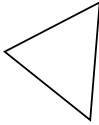
3)



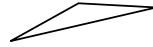
4)



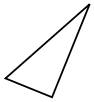
5)



6)



7)



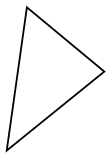
8)



9)



10)



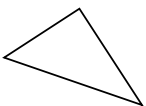
11)



12)



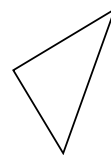
13)



14)



15)



1. _____

2. _____

3. _____

4. _____

5. _____

6. _____

7. _____

8. _____

9. _____

10. _____

11. _____

12. _____

13. _____

14. _____

15. _____



Determina se i triangoli mostrati sono rettangoli oppure no.

1)



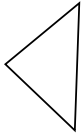
2)




3)



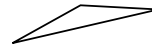
4)



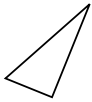
5)



6)



7)



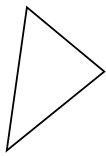
8)



9)



10)



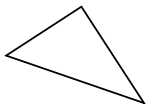
11)



12)



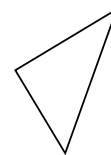
13)



14)



15)



Risposte

1. si

2. no

3. no

4. no

5. no

6. no

7. si

8. no

9. si

10. no

11. si

12. si

13. si

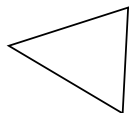
14. no

15. si



Determina se i triangoli mostrati sono rettangoli oppure no.

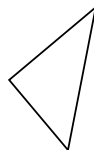
1)



2)



3)



4)



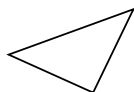
5)



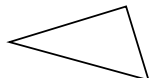
6)



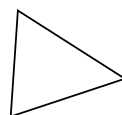
7)



8)



9)



10)



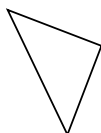
11)



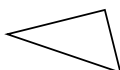
12)



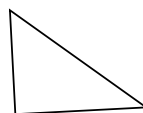
13)



14)



15)



Risposte

1. _____

2. _____

3. _____

4. _____

5. _____

6. _____

7. _____

8. _____

9. _____

10. _____

11. _____

12. _____

13. _____

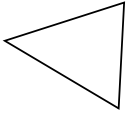
14. _____

15. _____



Determina se i triangoli mostrati sono rettangoli oppure no.

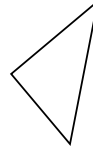
1)



2)



3)



4)



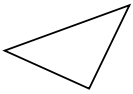
5)



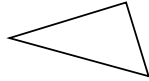
6)



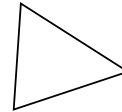
7)



8)



9)



10)



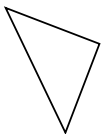
11)



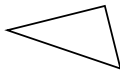
12)



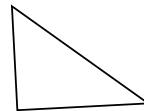
13)



14)



15)



Risposte

1. no

2. no

3. si

4. no

5. no

6. no

7. si

8. si

9. no

10. si

11. no

12. si

13. si

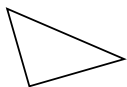
14. si

15. si

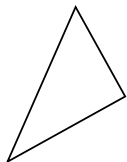


Determina se i triangoli mostrati sono rettangoli oppure no.


1)



2)



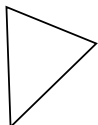
3)



4)



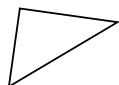
5)



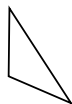
6)



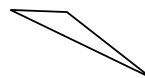
7)



8)



9)



10)



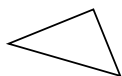
11)



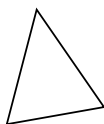
12)



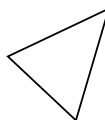
13)



14)



15)



Risposte

1. _____

2. _____

3. _____

4. _____

5. _____

6. _____

7. _____

8. _____

9. _____

10. _____

11. _____

12. _____

13. _____

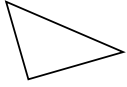
14. _____

15. _____

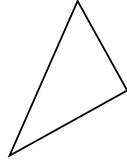


Determina se i triangoli mostrati sono rettangoli oppure no.

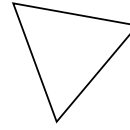
1)



2)



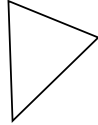
3)



4)



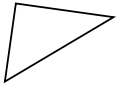
5)



6)



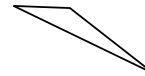
7)



8)



9)



10)



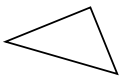
11)



12)



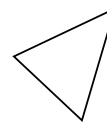
13)



14)



15)



Risposte

1. si

2. si

3. no

4. no

5. no

6. no

7. si

8. no

9. no

10. si

11. si

12. no

13. si


14. no

15. no

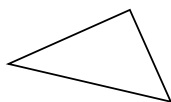


Determina se i triangoli mostrati sono rettangoli oppure no.

1)



2)



3)



4)



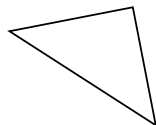
5)



6)



7)



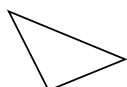
8)



9)



10)



11)




12)



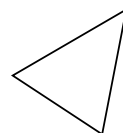
13)



14)



15)



Risposte

1. _____

2. _____

3. _____

4. _____

5. _____

6. _____

7. _____

8. _____

9. _____

10. _____

11. _____

12. _____

13. _____


14. _____

15. _____

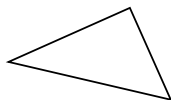


Determina se i triangoli mostrati sono rettangoli oppure no.

1)



2)



3)



4)



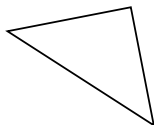
5)



6)



7)



8)



9)



10)



11)




12)



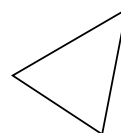
13)



14)



15)



Risposte

1. no

2. si

3. no

4. no

5. no

6. si

7. si

8. no

9. si

10. no

11. si

12. si

13. si

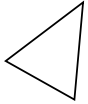
14. no

15. no

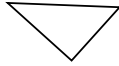


Determina se i triangoli mostrati sono rettangoli oppure no.

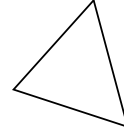
1)




2)



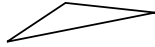
3)



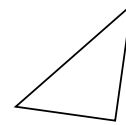
4)



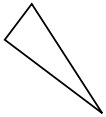
5)



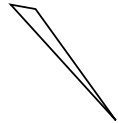
6)



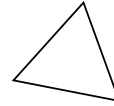
7)



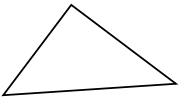
8)



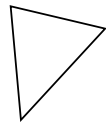
9)



10)



11)



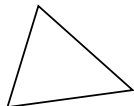
12)




13)



14)



15)



Risposte

1. _____

2. _____

3. _____

4. _____

5. _____

6. _____

7. _____

8. _____

9. _____

10. _____

11. _____

12. _____

13. _____

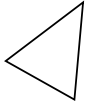
14. _____

15. _____

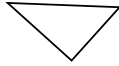


Determina se i triangoli mostrati sono rettangoli oppure no.

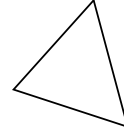
1)




2)



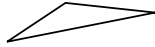
3)



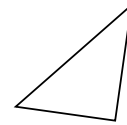
4)



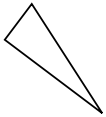
5)



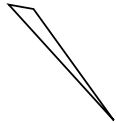
6)



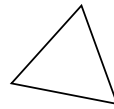
7)



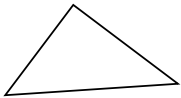
8)



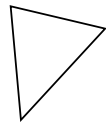
9)



10)



11)



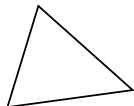
12)




13)



14)



15)



Risposte

1. no

2. si

3. no

4. no

5. no

6. si

7. si

8. no

9. no

10. si

11. no

12. no

13. si

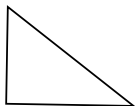
14. no

15. no

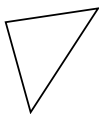


Determina se i triangoli mostrati sono rettangoli oppure no.

1)




2)



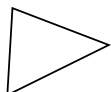
3)



4)



5)



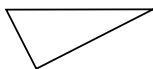
6)



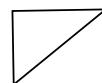
7)



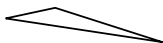
8)



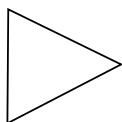
9)



10)



11)



12)



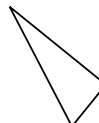
13)



14)



15)



Risposte

1. _____

2. _____

3. _____

4. _____

5. _____

6. _____

7. _____

8. _____

9. _____

10. _____

11. _____

12. _____

13. _____

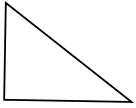
14. _____

15. _____




Determina se i triangoli mostrati sono rettangoli oppure no.

1)




2)



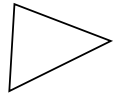
3)



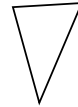
4)



5)



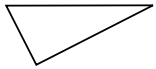
6)



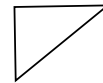
7)



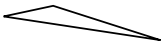
8)



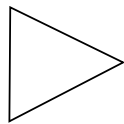
9)



10)



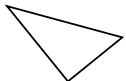
11)



12)



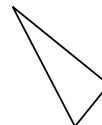
13)



14)



15)



Risposte

1. si

2. no

3. no

4. no

5. no

6. no

7. no

8. si

9. si

10. no

11. no

12. no

13. si

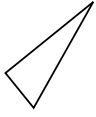
14. si

15. si



Determina se i triangoli mostrati sono rettangoli oppure no.

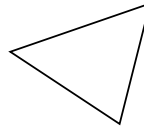
1)



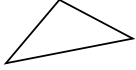
2)



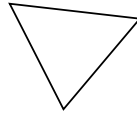
3)



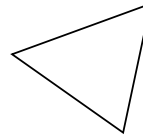
4)



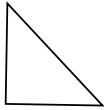
5)



6)



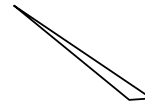
7)



8)



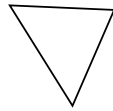
9)




10)



11)



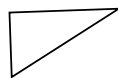
12)



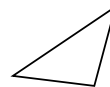
13)



14)



15)



Risposte

1. _____

2. _____

3. _____

4. _____

5. _____

6. _____

7. _____

8. _____

9. _____

10. _____

11. _____

12. _____

13. _____

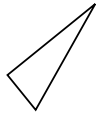
14. _____

15. _____



Determina se i triangoli mostrati sono rettangoli oppure no.

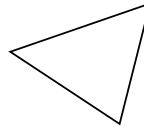
1)



2)



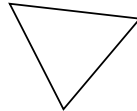
3)



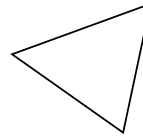
4)



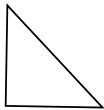
5)



6)



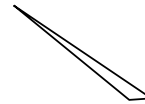
7)



8)



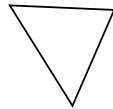
9)




10)



11)



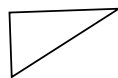
12)



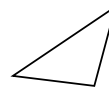
13)



14)



15)



Risposte

1. si

2. si

3. no

4. no

5. no

6. no

7. si

8. si

9. no

10. no

11. no

12. no

13. no

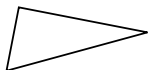
14. si

15. no

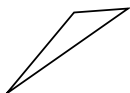


Determina se i triangoli mostrati sono rettangoli oppure no.

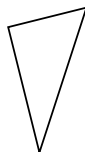
1)



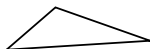
2)



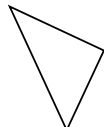
3)



4)



5)



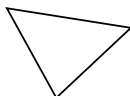
6)




7)



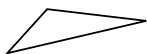
8)



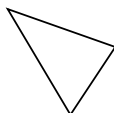
9)



10)



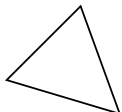
11)



12)



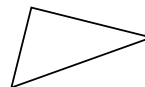
13)



14)



15)



Risposte

1. _____

2. _____

3. _____

4. _____

5. _____

6. _____

7. _____

8. _____

9. _____

10. _____

11. _____

12. _____

13. _____

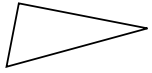
14. _____

15. _____

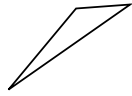


Determina se i triangoli mostrati sono rettangoli oppure no.

1)



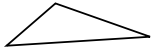
2)



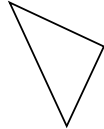
3)



4)



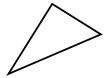
5)



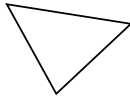
6)



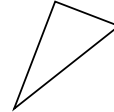
7)



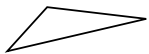
8)



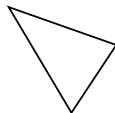
9)



10)



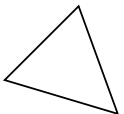
11)



12)



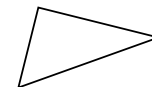
13)



14)



15)



Risposte

1. si

2. no

3. si

4. no

5. si

6. no

7. si

8. no

9. si

10. no

11. no

12. no

13. no

14. si

15. si



Determina se i triangoli mostrati sono rettangoli oppure no.


1)



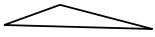
2)



3)



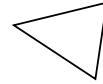
4)



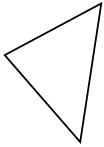
5)



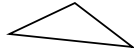
6)



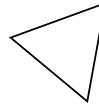
7)



8)




9)



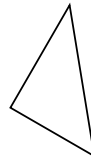
10)



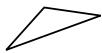
11)



12)



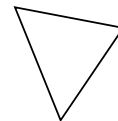
13)



14)



15)



Risposte

1. _____

2. _____

3. _____

4. _____

5. _____

6. _____

7. _____

8. _____

9. _____

10. _____

11. _____

12. _____

13. _____

14. _____

15. _____



Determina se i triangoli mostrati sono rettangoli oppure no.


1)




2)



3)



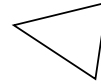
4)



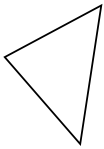
5)



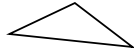
6)



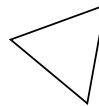
7)



8)




9)



10)



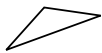
11)



12)



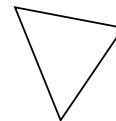
13)



14)



15)



Risposte

1. si

2. si

3. si

4. no

5. si

6. no

7. no

8. no

9. no

10. no

11. no

12. si

13. no

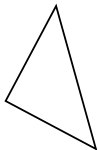
14. si

15. no

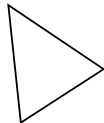


Determina se i triangoli mostrati sono rettangoli oppure no.

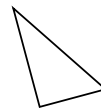
1)



2)



3)



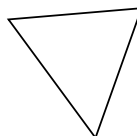
4)



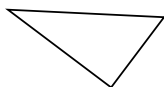
5)



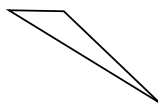
6)




7)



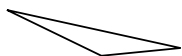
8)



9)



10)



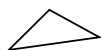
11)



12)



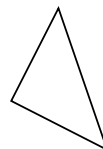
13)



14)



15)



Risposte

1. _____

2. _____

3. _____

4. _____

5. _____

6. _____

7. _____

8. _____

9. _____

10. _____

11. _____

12. _____

13. _____

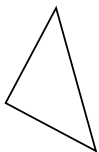
14. _____

15. _____

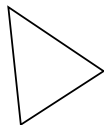


Determina se i triangoli mostrati sono rettangoli oppure no.

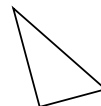
1)



2)



3)



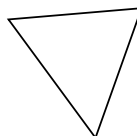
4)



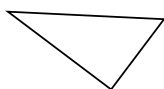
5)



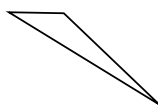
6)




7)



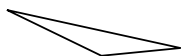
8)



9)



10)



11)



12)



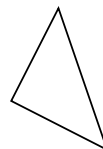
13)



14)



15)



Risposte

1. si

2. no

3. si

4. no

5. no

6. no

7. si

8. no

9. no

10. no

11. si

12. no

13. no

14. si

15. si