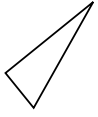




Determina se i triangoli mostrati sono rettangoli oppure no.

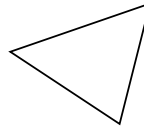
1)



2)



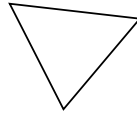
3)



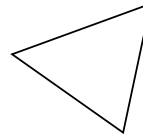
4)



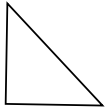
5)



6)



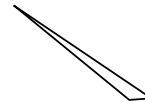
7)



8)



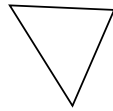
9)




10)



11)



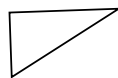
12)



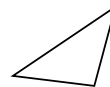
13)



14)



15)



**Risposte**

1. \_\_\_\_\_

2. \_\_\_\_\_

3. \_\_\_\_\_

4. \_\_\_\_\_

5. \_\_\_\_\_

6. \_\_\_\_\_

7. \_\_\_\_\_

8. \_\_\_\_\_

9. \_\_\_\_\_

10. \_\_\_\_\_

11. \_\_\_\_\_

12. \_\_\_\_\_

13. \_\_\_\_\_

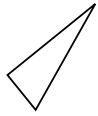
14. \_\_\_\_\_

15. \_\_\_\_\_



Determina se i triangoli mostrati sono rettangoli oppure no.


1)



2)



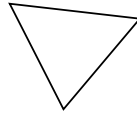
3)




4)



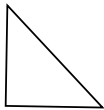
5)



6)



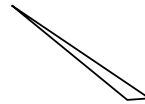
7)



8)



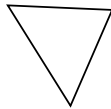
9)



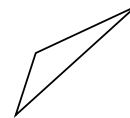
10)



11)



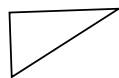
12)



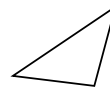
13)



14)



15)



Risposte

1. si

2. si

3. no

4. no

5. no

6. no

7. si

8. si

9. no

10. no

11. no

12. no

13. no

14. si

15. no