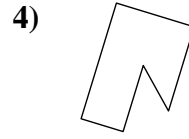
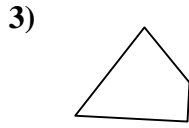
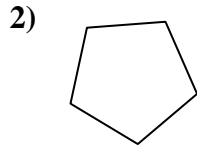
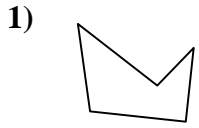




Determina se le forme mostrate sono quadrilateri (si) oppure no (no).

**Risposte**

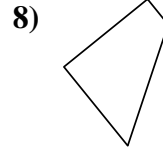
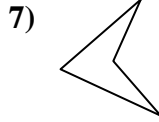
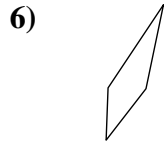



1. \_\_\_\_\_

2. \_\_\_\_\_

3. \_\_\_\_\_

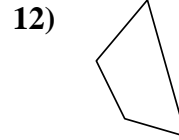
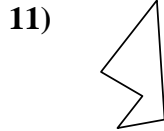
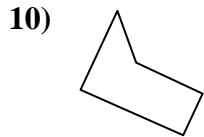

4. \_\_\_\_\_



5. \_\_\_\_\_

6. \_\_\_\_\_

7. \_\_\_\_\_

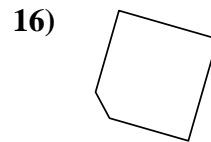
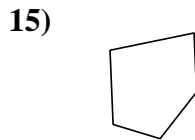
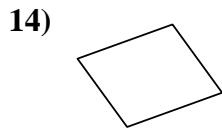
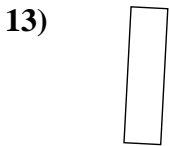


8. \_\_\_\_\_

9. \_\_\_\_\_

10. \_\_\_\_\_

11. \_\_\_\_\_

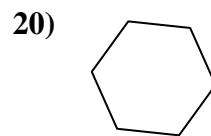
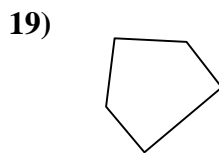
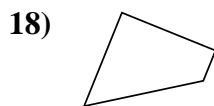
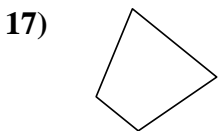


12. \_\_\_\_\_

13. \_\_\_\_\_

14. \_\_\_\_\_

15. \_\_\_\_\_



16. \_\_\_\_\_

17. \_\_\_\_\_

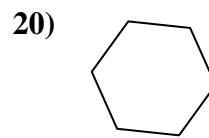
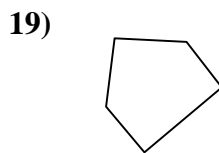
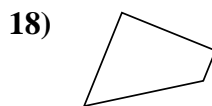
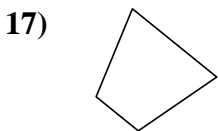
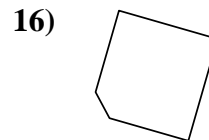
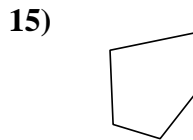
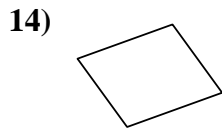
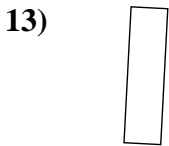
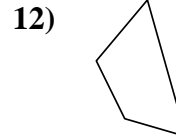
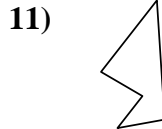
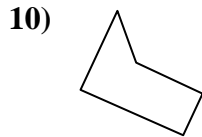
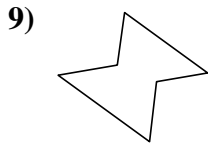
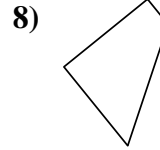
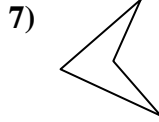
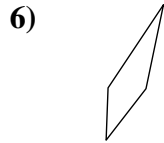

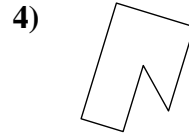
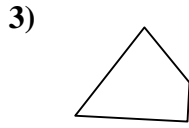
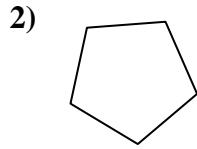
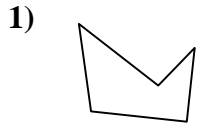
18. \_\_\_\_\_

19. \_\_\_\_\_

20. \_\_\_\_\_



Determina se le forme mostrate sono quadrilateri (si) oppure no (no).



**Risposte**

1. no

2. no

3. si

4. no

5. si

6. si

7. si

8. si

9. no

10. no

11. no

12. si

13. si

14. si

15. no

16. no

17. si

18. si

19. no

20. no