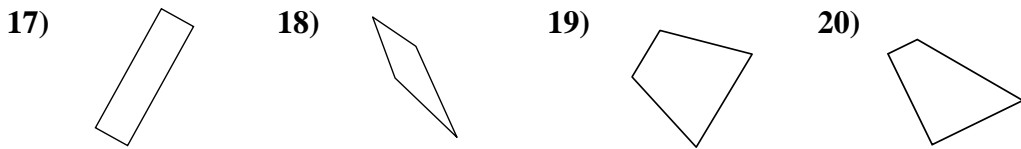
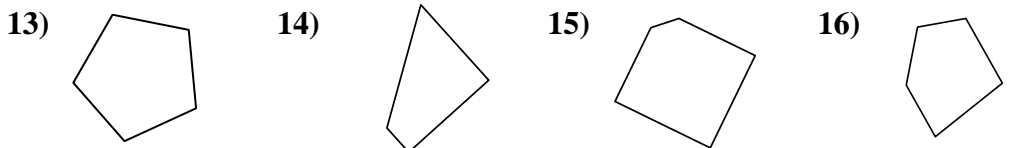
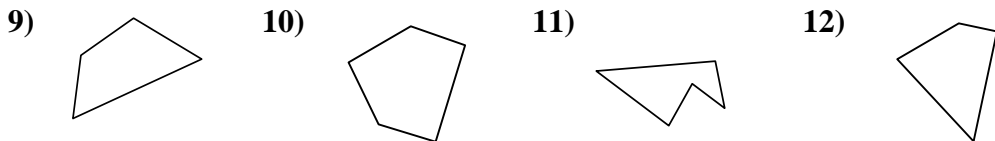
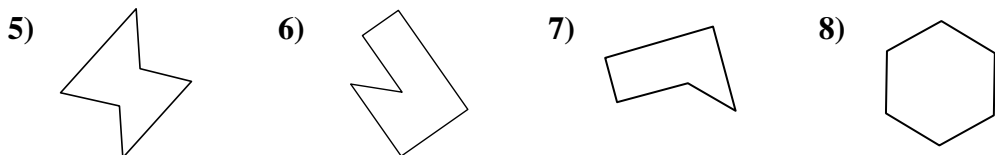
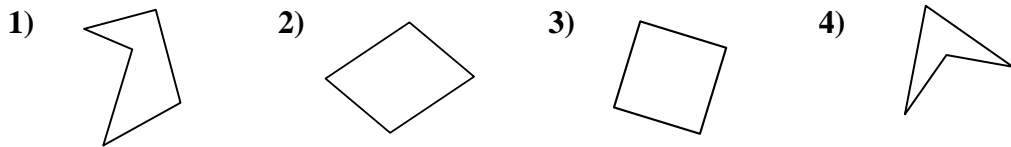




Determina se le forme mostrate sono quadrilateri (si) oppure no (no).

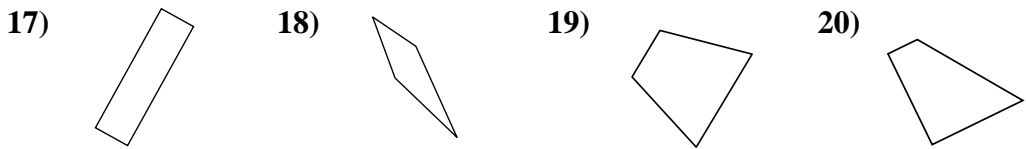
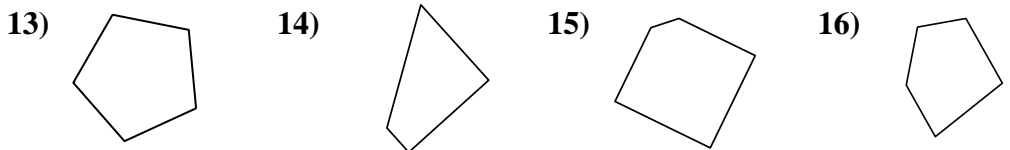
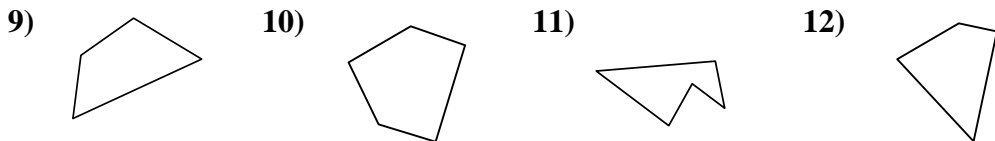
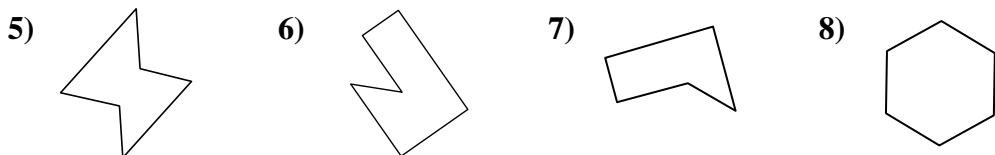
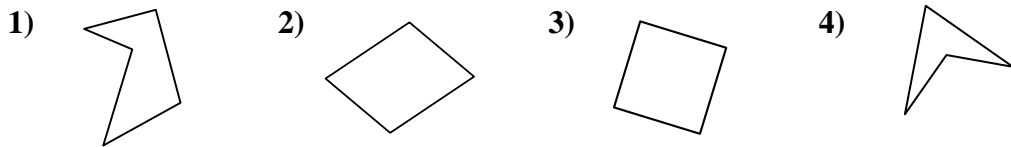


Risposte

1. \_\_\_\_\_
2. \_\_\_\_\_
3. \_\_\_\_\_
4. \_\_\_\_\_
5. \_\_\_\_\_
6. \_\_\_\_\_
7. \_\_\_\_\_
8. \_\_\_\_\_
9. \_\_\_\_\_
10. \_\_\_\_\_
11. \_\_\_\_\_
12. \_\_\_\_\_
13. \_\_\_\_\_
14. \_\_\_\_\_
15. \_\_\_\_\_
16. \_\_\_\_\_
17. \_\_\_\_\_
18. \_\_\_\_\_
19. \_\_\_\_\_
20. \_\_\_\_\_



Determina se le forme mostrate sono quadrilateri (si) oppure no (no).



Risposte

1. no

2. si

3. si

4. si

5. no

6. no

7. no

8. no

9. si

10. no

11. no

12. si

13. no

14. si

15. no

16. no

17. si

18. si

19. si

20. si