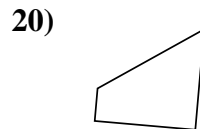
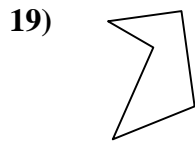
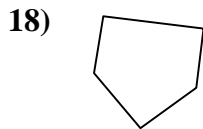
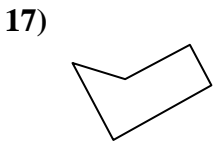
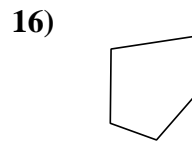
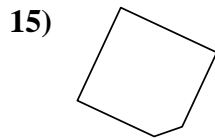
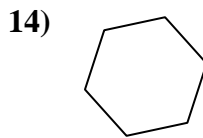
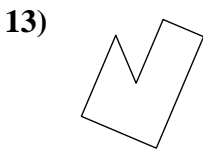
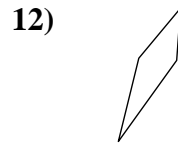
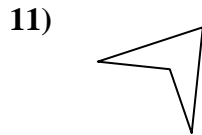
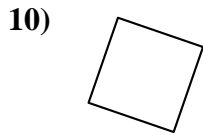
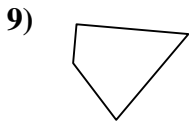
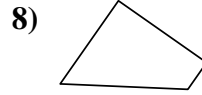
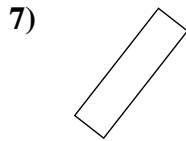
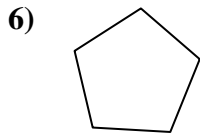
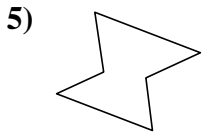
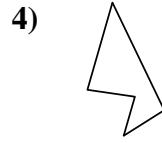
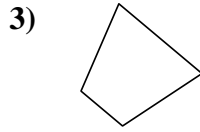
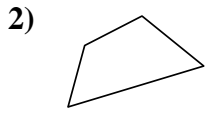
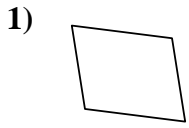




Determina se le forme mostrate sono quadrilateri (si) oppure no (no).



Risposte

1. _____

2. _____

3. _____

4. _____

5. _____

6. _____

7. _____

8. _____

9. _____

10. _____

11. _____

12. _____

13. _____

14. _____

15. _____

16. _____

17. _____

18. _____

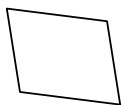
19. _____

20. _____

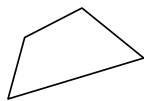


Determina se le forme mostrate sono quadrilateri (si) oppure no (no).

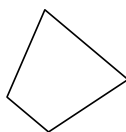
1)



2)



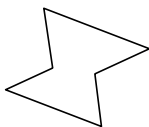
3)



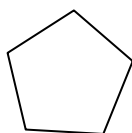
4)



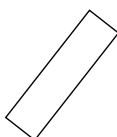
5)



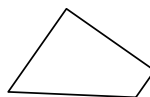
6)



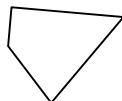
7)



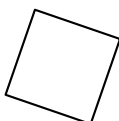
8)



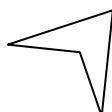
9)



10)



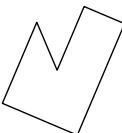
11)



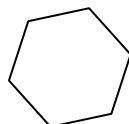
12)



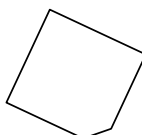
13)



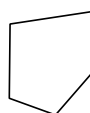
14)



15)



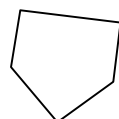
16)



17)



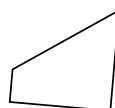
18)



19)



20)



Risposte

1. si

2. si

3. si

4. no

5. no

6. no

7. si

8. si

9. si

10. si

11. si

12. si

13. no

14. no

15. no

16. no

17. no

18. no

19. no

20. si