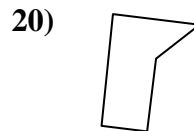
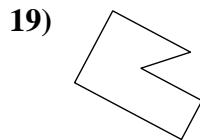
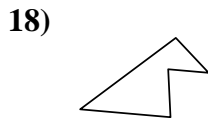
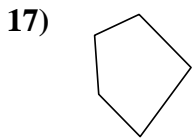
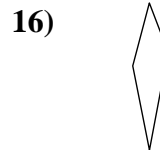
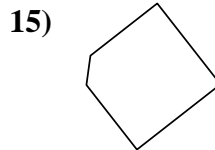
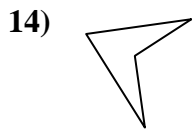
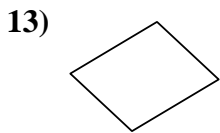
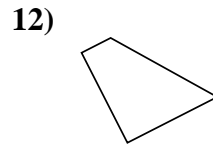
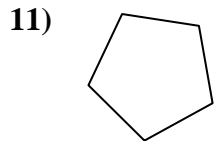
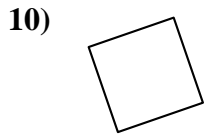
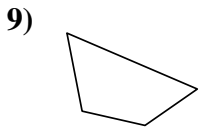
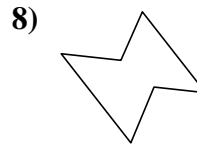
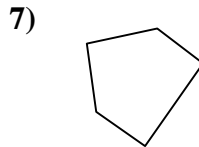
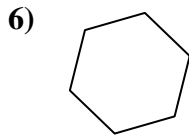
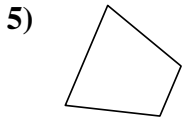
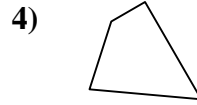
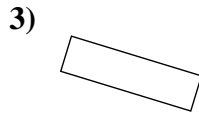
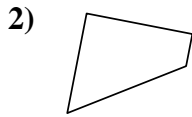
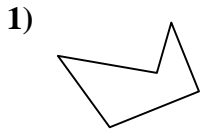




Determina se le forme mostrate sono quadrilateri (si) oppure no (no).



Risposte

1. \_\_\_\_\_

2. \_\_\_\_\_

3. \_\_\_\_\_

4. \_\_\_\_\_

5. \_\_\_\_\_

6. \_\_\_\_\_

7. \_\_\_\_\_

8. \_\_\_\_\_

9. \_\_\_\_\_

10. \_\_\_\_\_

11. \_\_\_\_\_

12. \_\_\_\_\_

13. \_\_\_\_\_

14. \_\_\_\_\_

15. \_\_\_\_\_

16. \_\_\_\_\_

17. \_\_\_\_\_

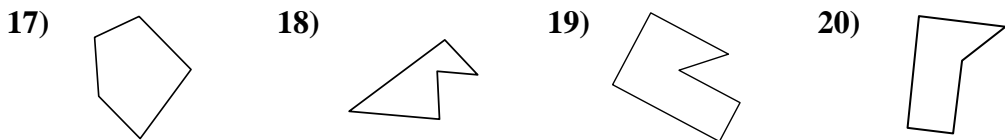
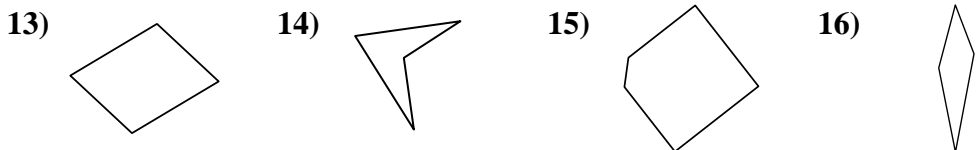
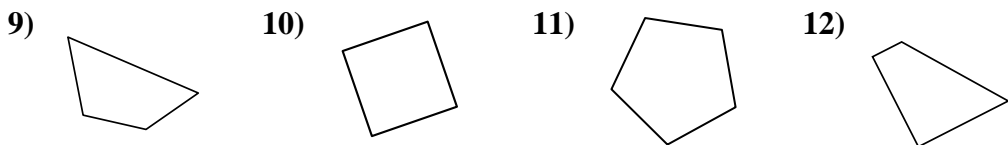
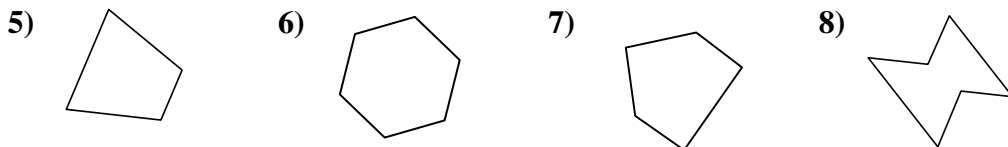
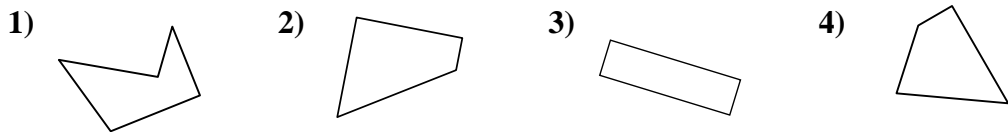
18. \_\_\_\_\_

19. \_\_\_\_\_

20. \_\_\_\_\_



Determina se le forme mostrate sono quadrilateri (si) oppure no (no).



**Risposte**

1. no

2. si

3. si

4. si

5. si

6. no

7. no

8. no

9. si

10. si

11. no

12. si

13. si

14. si

15. no

16. si

17. no

18. no

19. no

20. no