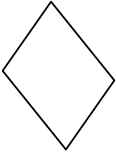
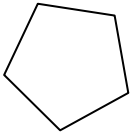

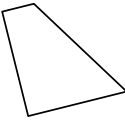
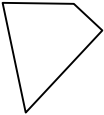
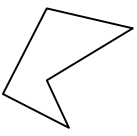

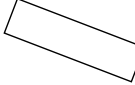
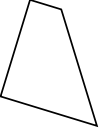
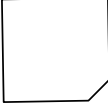
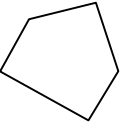

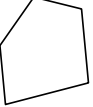
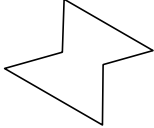


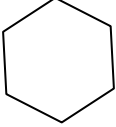
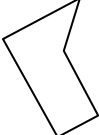
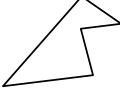
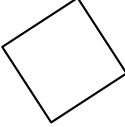




Determina se le forme mostrate sono quadrilateri (si) oppure no (no).

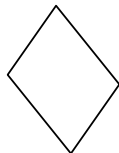
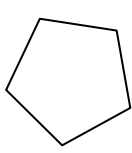

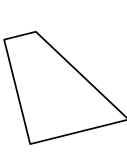
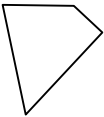
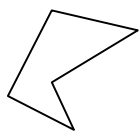

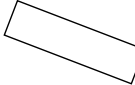
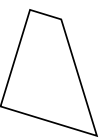
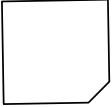
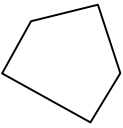

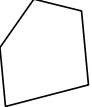
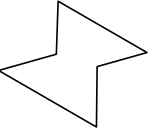


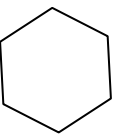
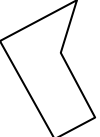
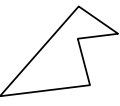
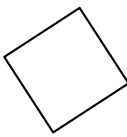
- 1) 
- 2) 
- 3) 
- 4) 
- 5) 
- 6) 
- 7) 
- 8) 
- 9) 
- 10) 
- 11) 
- 12) 
- 13) 
- 14) 
- 15) 
- 16) 
- 17) 
- 18) 
- 19) 
- 20) 

Risposte

- 1. _____
- 2. _____
- 3. _____
- 4. _____
- 5. _____
- 6. _____
- 7. _____
- 8. _____
- 9. _____
- 10. _____
- 11. _____
- 12. _____
- 13. _____
- 14. _____
- 15. _____
- 16. _____
- 17. _____
- 18. _____
- 19. _____
- 20. _____



Determina se le forme mostrate sono quadrilateri (si) oppure no (no).

- 1) 
- 2) 
- 3) 
- 4) 
- 5) 
- 6) 
- 7) 
- 8) 
- 9) 
- 10) 
- 11) 
- 12) 
- 13) 
- 14) 
- 15) 
- 16) 
- 17) 
- 18) 
- 19) 
- 20) 

Risposte

- 1. si
- 2. no
- 3. si
- 4. si
- 5. si
- 6. no
- 7. no
- 8. si
- 9. si
- 10. no
- 11. no
- 12. si
- 13. no
- 14. no
- 15. si
- 16. si
- 17. no
- 18. no
- 19. no
- 20. si