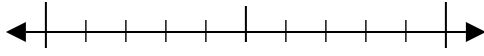




Usa la linea numerata per arrotondare alla decina più vicina.

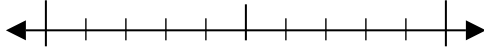
Es) 91



Risposte

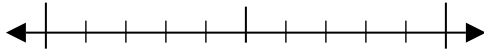
Es. 90

1) 17



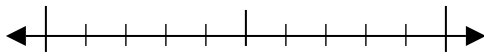
1. _____

2) 66



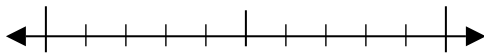
2. _____

3) 39



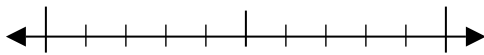
3. _____

4) 879



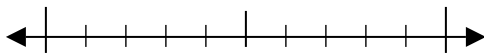
4. _____

5) 729



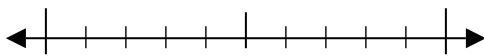
5. _____

6) 260



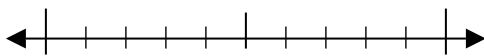
6. _____

7) 195



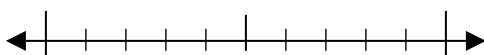
7. _____

8) 3.188



8. _____

9) 2.046

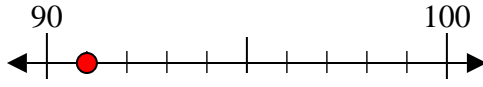


9. _____

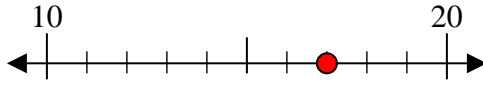


Usa la linea numerata per arrotondare alla decina più vicina.

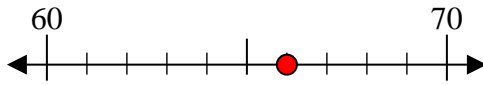
Es) 91



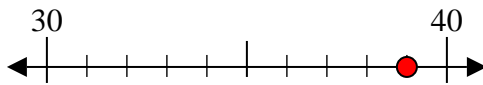
1) 17



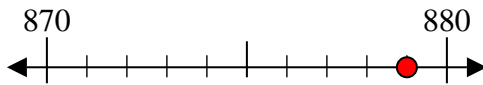
2) 66



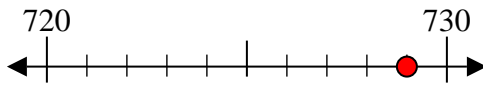
3) 39



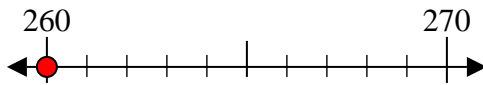
4) 879



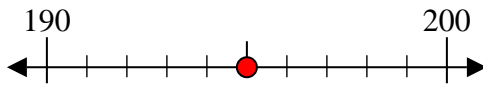
5) 729



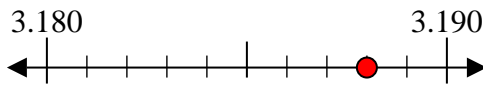
6) 260



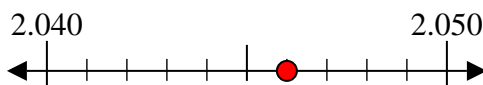
7) 195



8) 3.188



9) 2.046



Risposte

Es. 90

1. 20

2. 70

3. 40

4. 880

5. 730

6. 260

7. 200

8. 3.190

9. 2.050