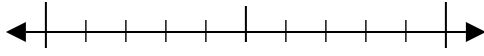


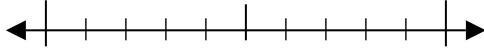


Usa la linea numerata per arrotondare alla decina più vicina.

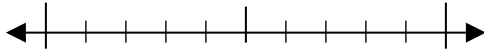
Es) 98



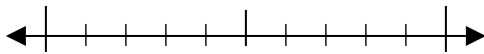
1) 37



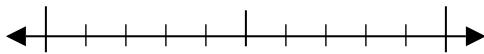
2) 77



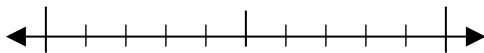
3) 69



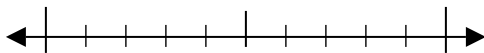
4) 627



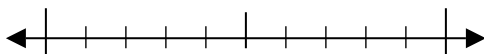
5) 190



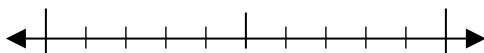
6) 799



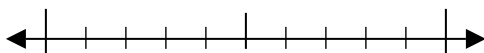
7) 848



8) 8.851



9) 2.665



Risposte

Es. 100

1. _____

2. _____

3. _____

4. _____

5. _____

6. _____

7. _____

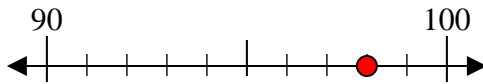
8. _____

9. _____

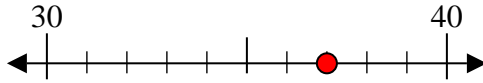


Usa la linea numerata per arrotondare alla decina più vicina.

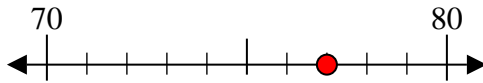
Es) 98



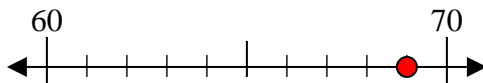
1) 37



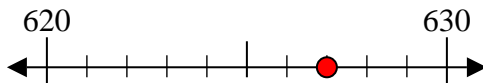
2) 77



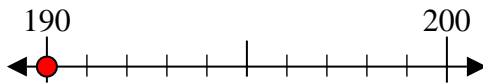
3) 69



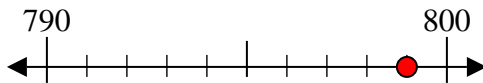
4) 627



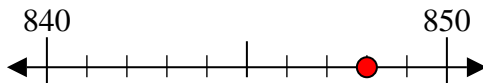
5) 190



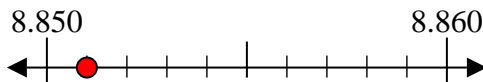
6) 799



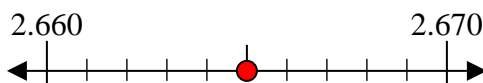
7) 848



8) 8.851



9) 2.665



Risposte

Es. 100

1. 40

2. 80

3. 70

4. 630

5. 190

6. 800

7. 850

8. 8.850

9. 2.670