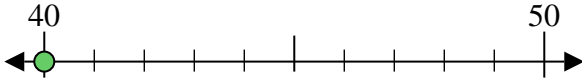


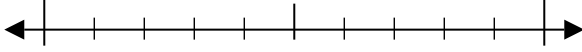


Usa la linea numerata per arrotondare alla decina più vicina.

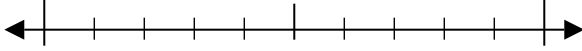
Es) 40



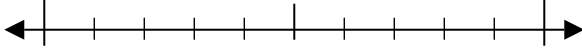
1) 67



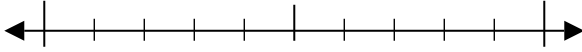
2) 70



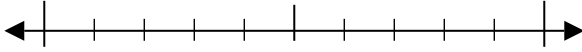
3) 52



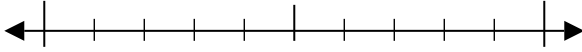
4) 78



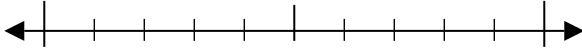
5) 572



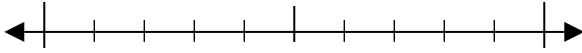
6) 422



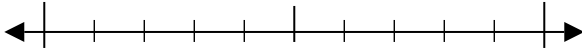
7) 876



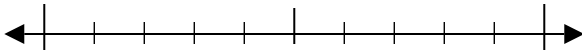
8) 652



9) 9.128



10) 5.434



Risposte

Es. 40

1. _____

2. _____

3. _____

4. _____

5. _____

6. _____

7. _____

8. _____

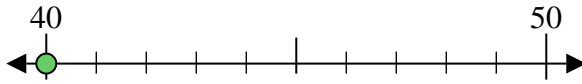
9. _____

10. _____

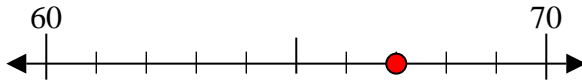


Usa la linea numerata per arrotondare alla decina più vicina.

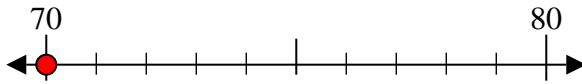
Es) 40



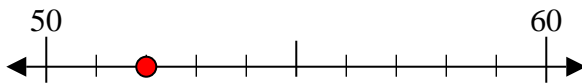
1) 67



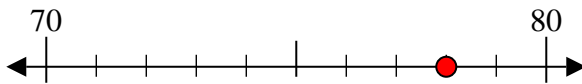
2) 70



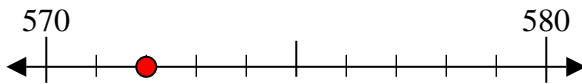
3) 52



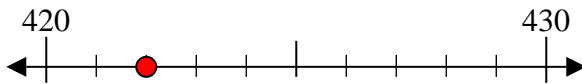
4) 78



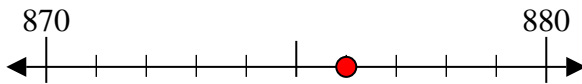
5) 572



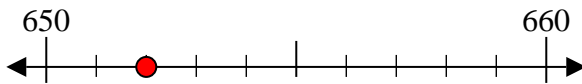
6) 422



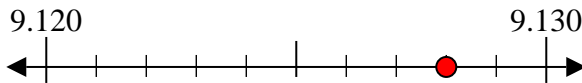
7) 876



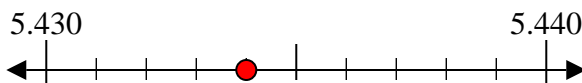
8) 652



9) 9.128



10) 5.434



Risposte

Es. 40

1. 70

2. 70

3. 50

4. 80

5. 570

6. 420

7. 880

8. 650

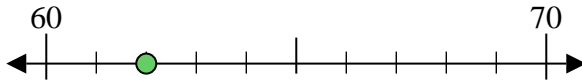
9. 9.130

10. 5.430

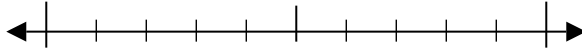


Usa la linea numerata per arrotondare alla decina più vicina.

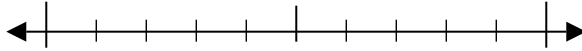
Es) 62



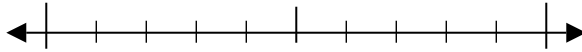
1) 52



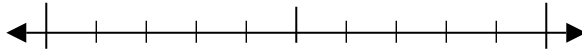
2) 74



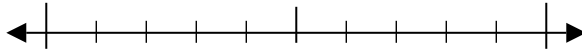
3) 65



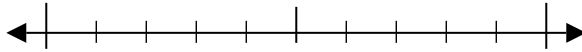
4) 45



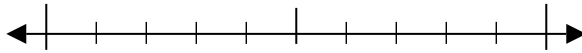
5) 271



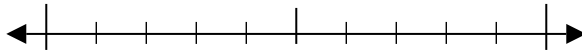
6) 461



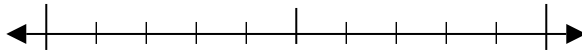
7) 808



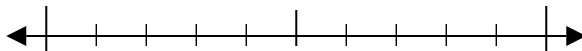
8) 396



9) 9.792



10) 4.573



Risposte

Es. 60

1. _____

2. _____

3. _____

4. _____

5. _____

6. _____

7. _____

8. _____

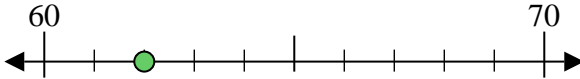
9. _____

10. _____

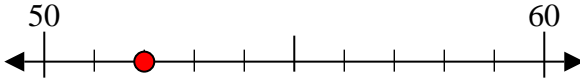


Usa la linea numerata per arrotondare alla decina più vicina.

Es) 62



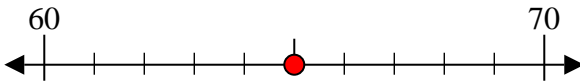
1) 52



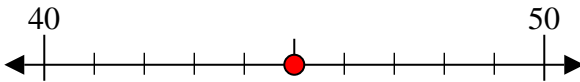
2) 74



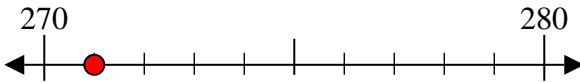
3) 65



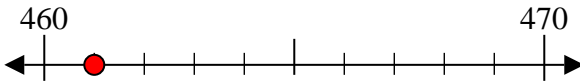
4) 45



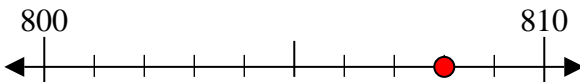
5) 271



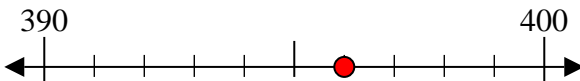
6) 461



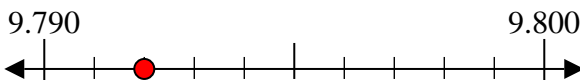
7) 808



8) 396



9) 9.792



10) 4.573



Risposte

Es. 60

1. 50

2. 70

3. 70

4. 50

5. 270

6. 460

7. 810

8. 400

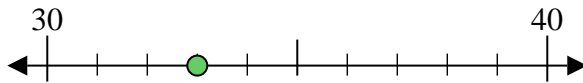
9. 9.790

10. 4.570



Usa la linea numerata per arrotondare alla decina più vicina.

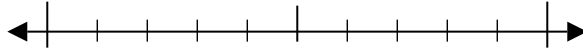
Es) 33



Risposte

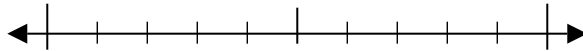
Es. 30

1) 27



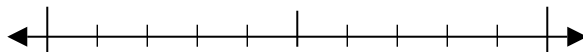
1. _____

2) 45



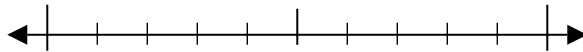
2. _____

3) 41



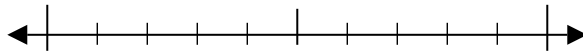
3. _____

4) 62



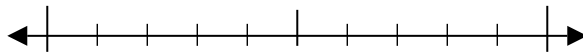
4. _____

5) 816



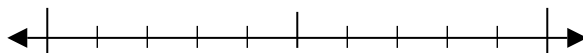
5. _____

6) 991



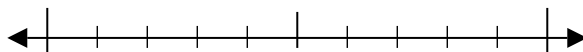
6. _____

7) 849



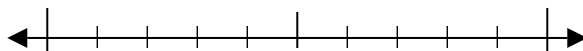
7. _____

8) 513



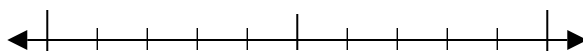
8. _____

9) 3.034



9. _____

10) 5.114

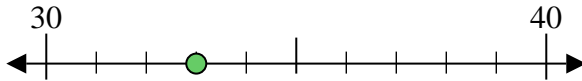


10. _____

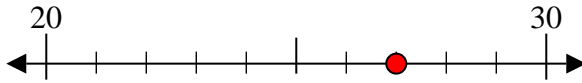


Usa la linea numerata per arrotondare alla decina più vicina.

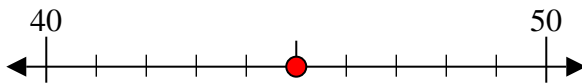
Es) 33



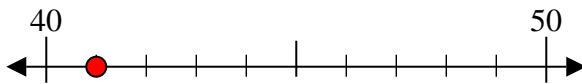
1) 27



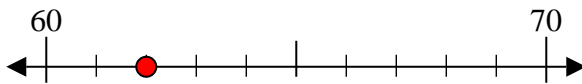
2) 45



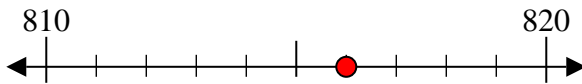
3) 41



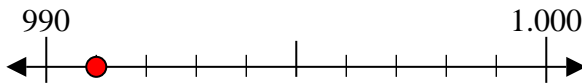
4) 62



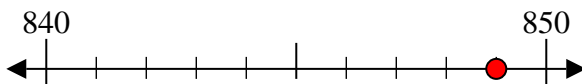
5) 816



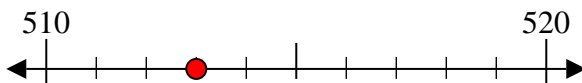
6) 991



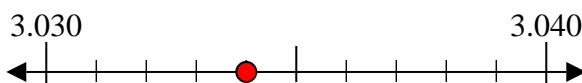
7) 849



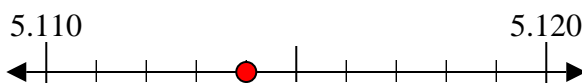
8) 513



9) 3.034



10) 5.114



Risposte

Es. 30

1. 30

2. 50

3. 40

4. 60

5. 820

6. 990

7. 850

8. 510

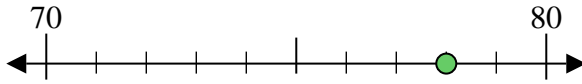
9. 3.030

10. 5.110



Usa la linea numerata per arrotondare alla decina più vicina.

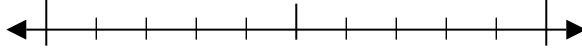
Es) 78



Risposte

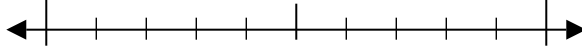
Es. 80

1) 19



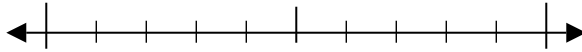
1. _____

2) 55



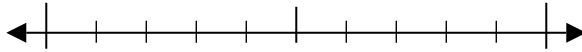
2. _____

3) 34



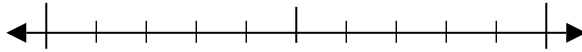
3. _____

4) 79



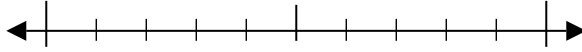
4. _____

5) 722



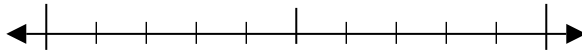
5. _____

6) 667



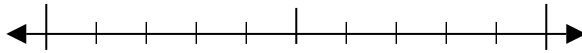
6. _____

7) 917



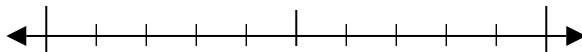
7. _____

8) 611



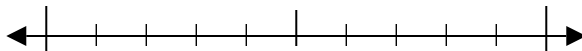
8. _____

9) 2.107



9. _____

10) 3.717

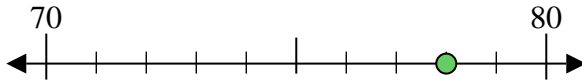


10. _____

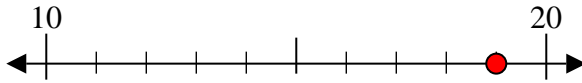


Usa la linea numerata per arrotondare alla decina più vicina.

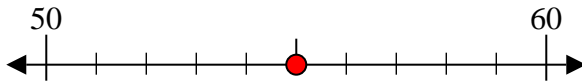
Es) 78



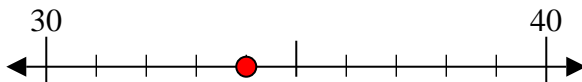
1) 19



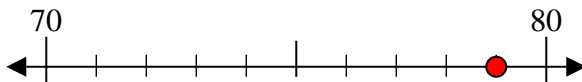
2) 55



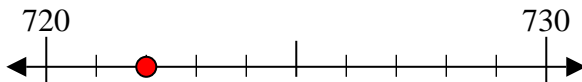
3) 34



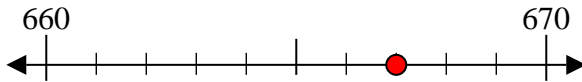
4) 79



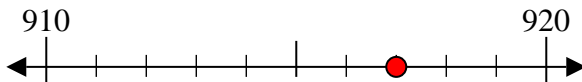
5) 722



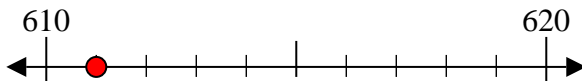
6) 667



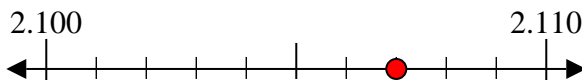
7) 917



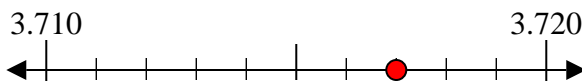
8) 611



9) 2.107



10) 3.717



Risposte

Es. 80

1. 20

2. 60

3. 30

4. 80

5. 720

6. 670

7. 920

8. 610

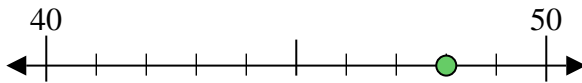
9. 2.110

10. 3.720

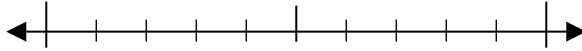


Usa la linea numerata per arrotondare alla decina più vicina.

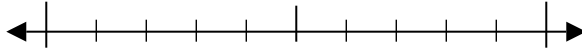
Es) 48



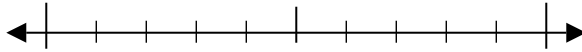
1) 17



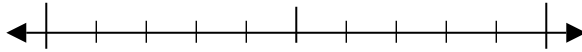
2) 58



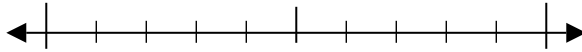
3) 36



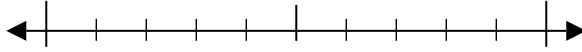
4) 87



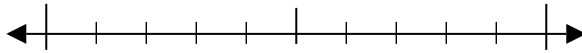
5) 497



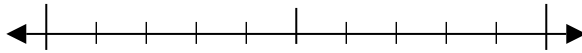
6) 813



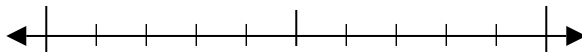
7) 679



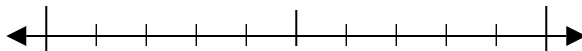
8) 723



9) 4.235



10) 5.761



Risposte

Es. 50

1. _____

2. _____

3. _____

4. _____

5. _____

6. _____

7. _____

8. _____

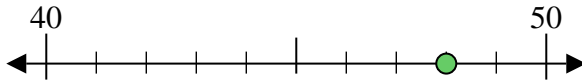
9. _____

10. _____

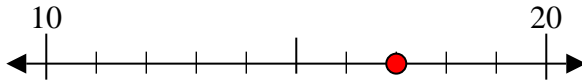


Usa la linea numerata per arrotondare alla decina più vicina.

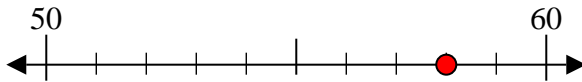
Es) 48



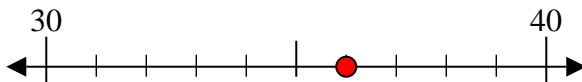
1) 17



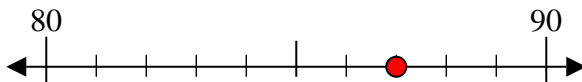
2) 58



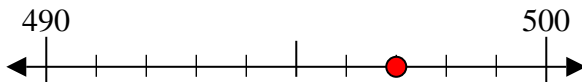
3) 36



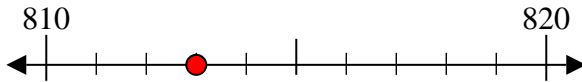
4) 87



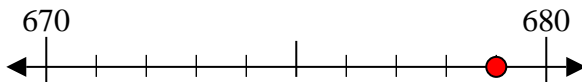
5) 497



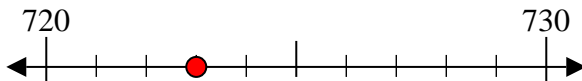
6) 813



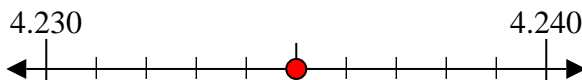
7) 679



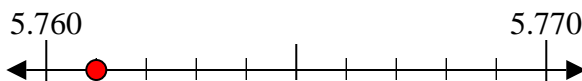
8) 723



9) 4.235



10) 5.761



Risposte

Es. 50

1. 20

2. 60

3. 40

4. 90

5. 500

6. 810

7. 680

8. 720

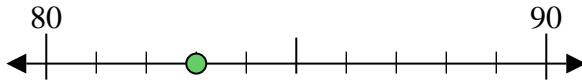
9. 4.240

10. 5.760



Usa la linea numerata per arrotondare alla decina più vicina.

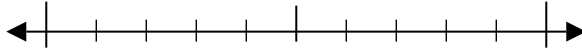
Es) 83



Risposte

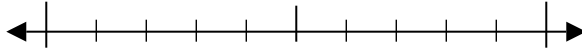
Es. 80

1) 90



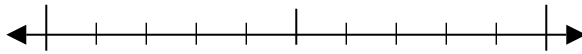
1. _____

2) 96



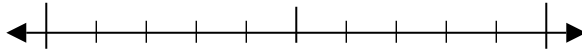
2. _____

3) 95



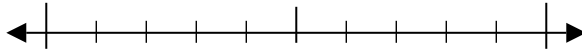
3. _____

4) 53



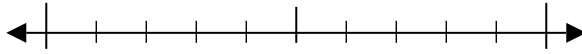
4. _____

5) 173



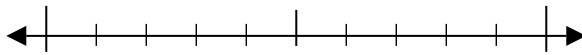
5. _____

6) 253



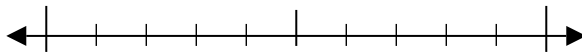
6. _____

7) 672



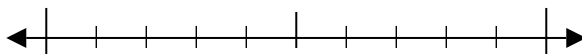
7. _____

8) 628



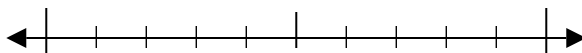
8. _____

9) 1.858



9. _____

10) 9.594

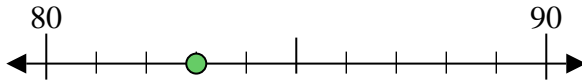


10. _____

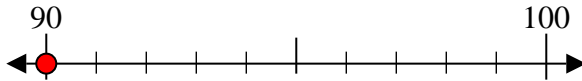


Usa la linea numerata per arrotondare alla decina più vicina.

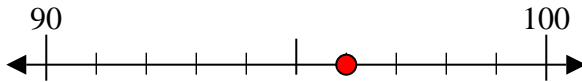
Es) 83



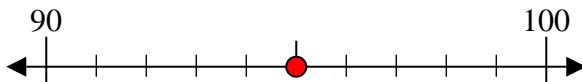
1) 90



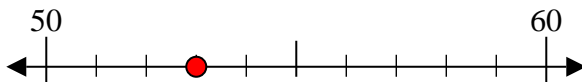
2) 96



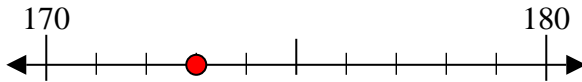
3) 95



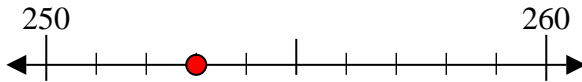
4) 53



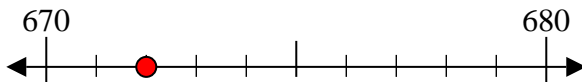
5) 173



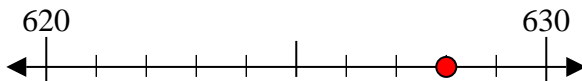
6) 253



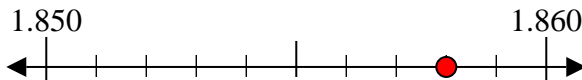
7) 672



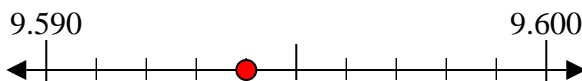
8) 628



9) 1.858



10) 9.594



Risposte

Es. 80

1. 90

2. 100

3. 100

4. 50

5. 170

6. 250

7. 670

8. 630

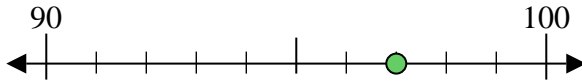
9. 1.860

10. 9.590



Usa la linea numerata per arrotondare alla decina più vicina.

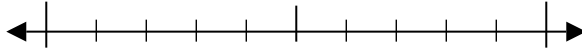
Es) 97



Risposte

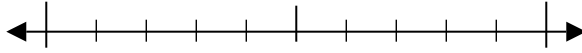
Es. 100

1) 41



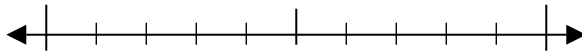
1. _____

2) 53



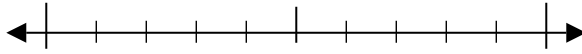
2. _____

3) 62



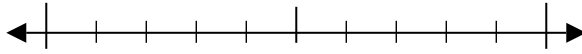
3. _____

4) 31



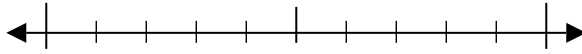
4. _____

5) 429



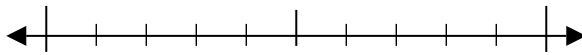
5. _____

6) 929



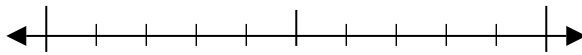
6. _____

7) 732



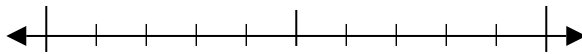
7. _____

8) 974



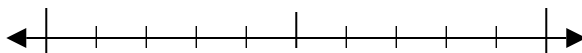
8. _____

9) 2.887



9. _____

10) 8.781

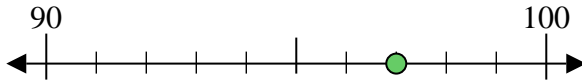


10. _____

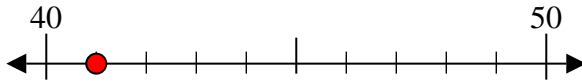


Usa la linea numerata per arrotondare alla decina più vicina.

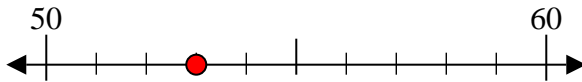
Es) 97



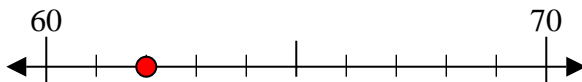
1) 41



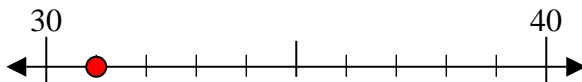
2) 53



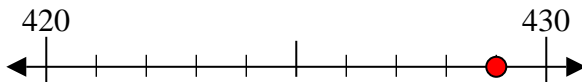
3) 62



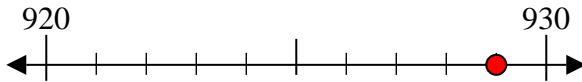
4) 31



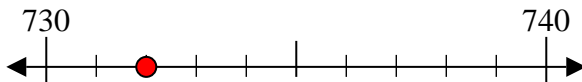
5) 429



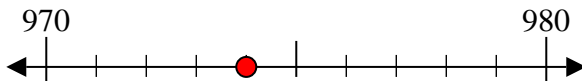
6) 929



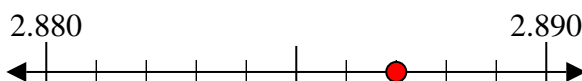
7) 732



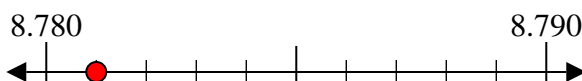
8) 974



9) 2.887



10) 8.781



Risposte

Es. 100

1. 40

2. 50

3. 60

4. 30

5. 430

6. 930

7. 730

8. 970

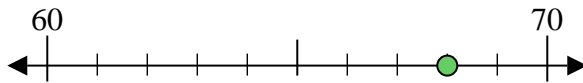
9. 2.890

10. 8.780



Usa la linea numerata per arrotondare alla decina più vicina.

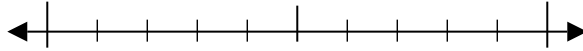
Es) 68



Risposte

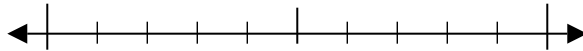
Es. 70

1) 66



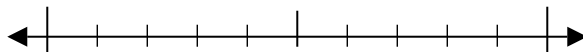
1. _____

2) 32



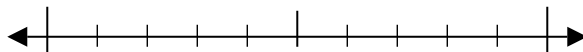
2. _____

3) 70



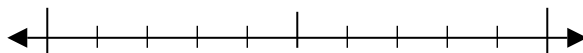
3. _____

4) 95



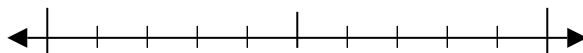
4. _____

5) 115



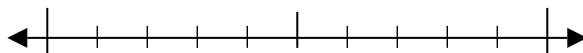
5. _____

6) 933



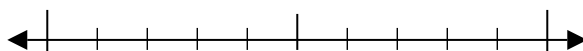
6. _____

7) 215



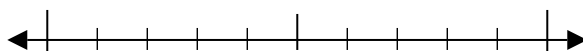
7. _____

8) 811



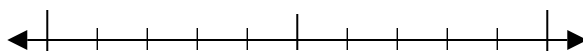
8. _____

9) 5.950



9. _____

10) 3.359

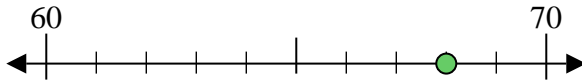


10. _____

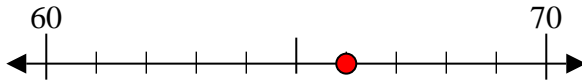


Usa la linea numerata per arrotondare alla decina più vicina.

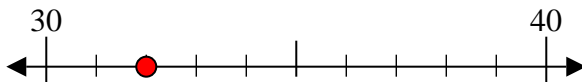
Es) 68



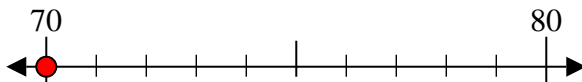
1) 66



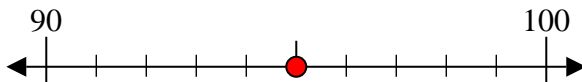
2) 32



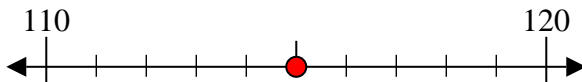
3) 70



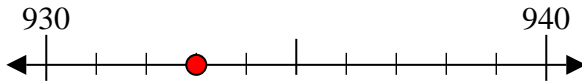
4) 95



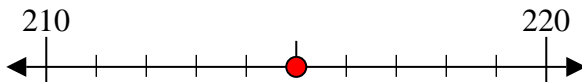
5) 115



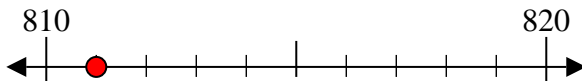
6) 933



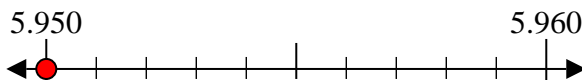
7) 215



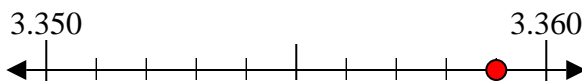
8) 811



9) 5.950



10) 3.359



Risposte

Es. 70

1. 70

2. 30

3. 70

4. 100

5. 120

6. 930

7. 220

8. 810

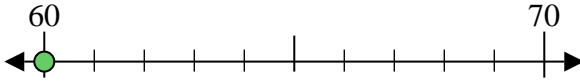
9. 5.950

10. 3.360



Usa la linea numerata per arrotondare alla decina più vicina.

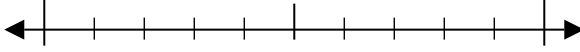
Es) 60



Risposte

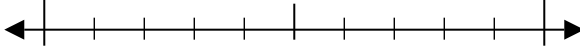
Es. 60

1) 54



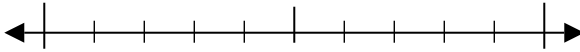
1. _____

2) 22



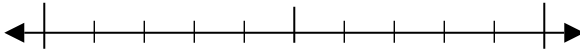
2. _____

3) 10



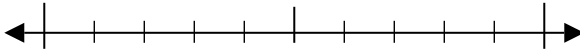
3. _____

4) 90



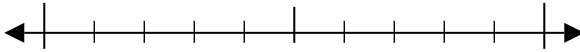
4. _____

5) 978



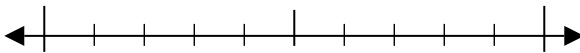
5. _____

6) 129



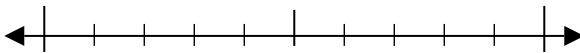
6. _____

7) 924



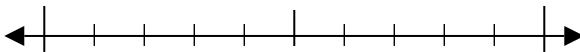
7. _____

8) 507



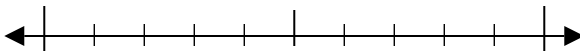
8. _____

9) 2.646



9. _____

10) 2.081

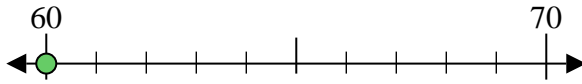


10. _____



Usa la linea numerata per arrotondare alla decina più vicina.

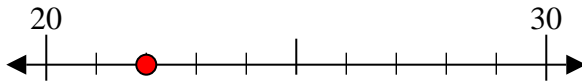
Es) 60



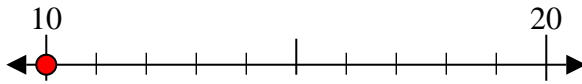
1) 54



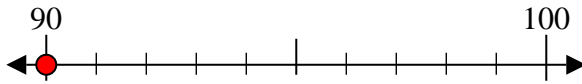
2) 22



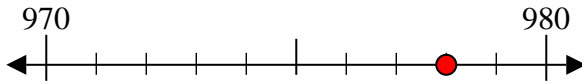
3) 10



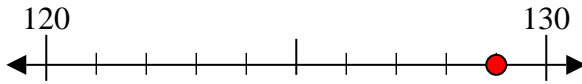
4) 90



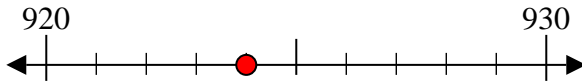
5) 978



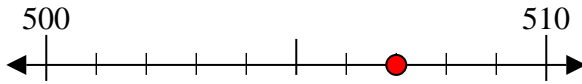
6) 129



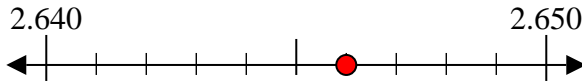
7) 924



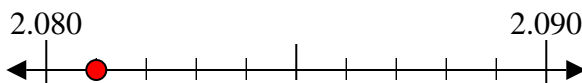
8) 507



9) 2.646



10) 2.081



Risposte

Es. 60

1. 50

2. 20

3. 10

4. 90

5. 980

6. 130

7. 920

8. 510

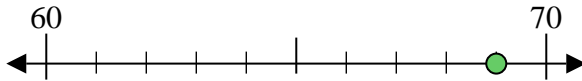
9. 2.650

10. 2.080



Usa la linea numerata per arrotondare alla decina più vicina.

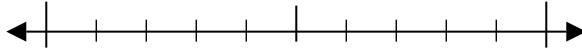
Es) 69



Risposte

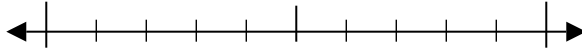
Es. 70

1) 62



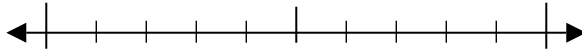
1. _____

2) 11



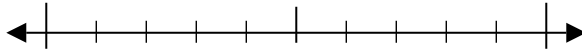
2. _____

3) 98



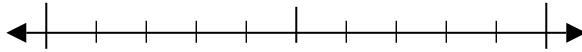
3. _____

4) 16



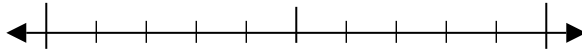
4. _____

5) 688



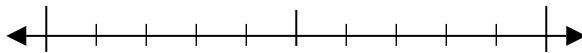
5. _____

6) 375



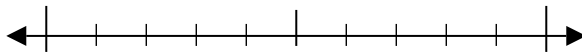
6. _____

7) 136



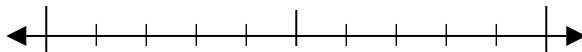
7. _____

8) 177



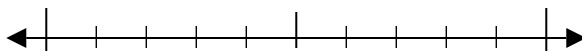
8. _____

9) 6.791



9. _____

10) 6.669

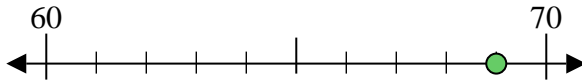


10. _____

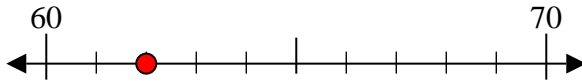


Usa la linea numerata per arrotondare alla decina più vicina.

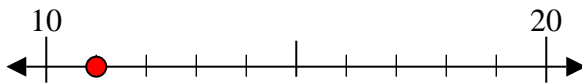
Es) 69



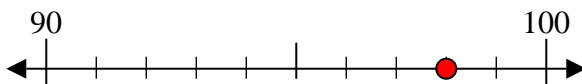
1) 62



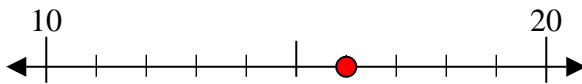
2) 11



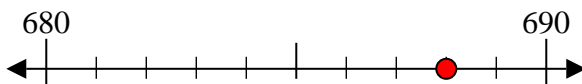
3) 98



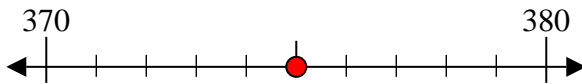
4) 16



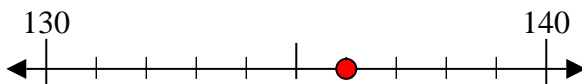
5) 688



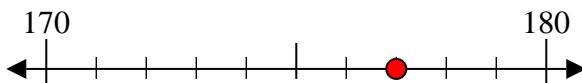
6) 375



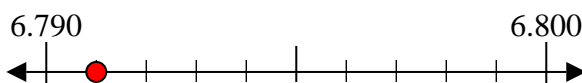
7) 136



8) 177



9) 6.791



10) 6.669



Risposte

Es. 70

1. 60

2. 10

3. 100

4. 20

5. 690

6. 380

7. 140

8. 180

9. 6.790

10. 6.670

