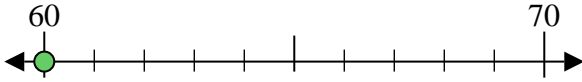




Usa la linea numerata per arrotondare alla decina più vicina.

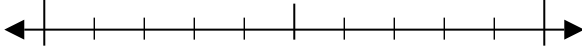
Es) 60



**Risposte**

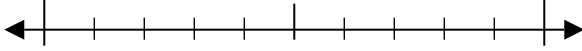
Es. 60

1) 54



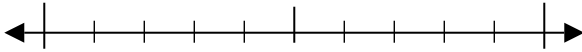
1. \_\_\_\_\_

2) 22



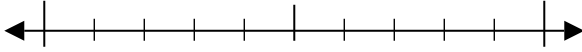
2. \_\_\_\_\_

3) 10



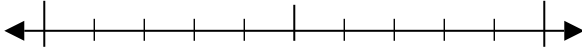
3. \_\_\_\_\_

4) 90



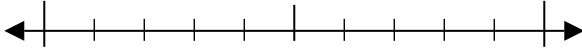
4. \_\_\_\_\_

5) 978



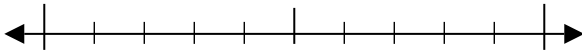
5. \_\_\_\_\_

6) 129



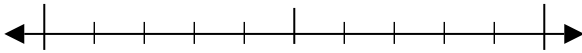
6. \_\_\_\_\_

7) 924



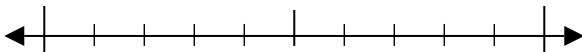
7. \_\_\_\_\_

8) 507



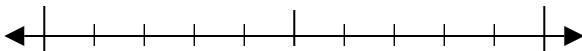
8. \_\_\_\_\_

9) 2.646



9. \_\_\_\_\_

10) 2.081

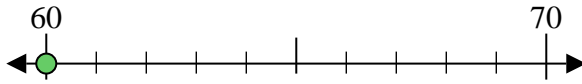


10. \_\_\_\_\_



Usa la linea numerata per arrotondare alla decina più vicina.

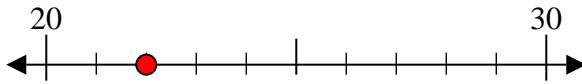
Es) 60



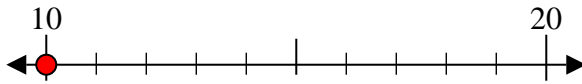
1) 54



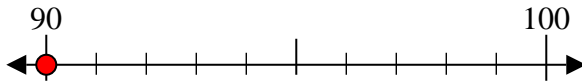
2) 22



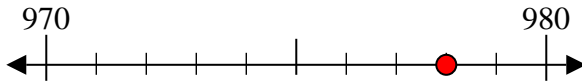
3) 10



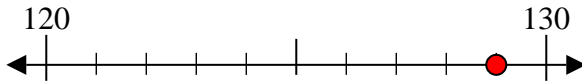
4) 90



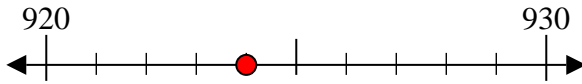
5) 978



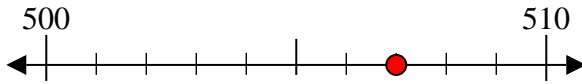
6) 129



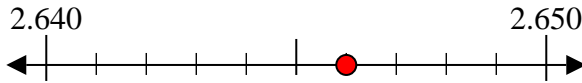
7) 924



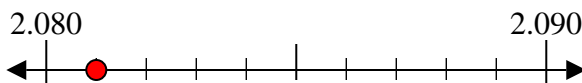
8) 507



9) 2.646



10) 2.081



**Risposte**

Es. 60

1. 50

2. 20

3. 10

4. 90

5. 980

6. 130

7. 920

8. 510

9. 2.650

10. 2.080