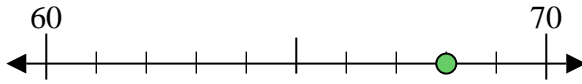




Usa la linea numerata per arrotondare alla decina più vicina.

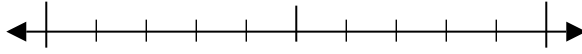
Es) 68



Risposte

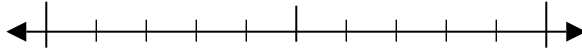
Es. 70

1) 66



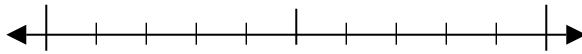
1. _____

2) 32



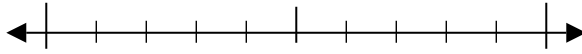
2. _____

3) 70



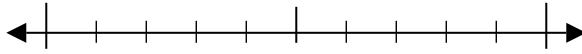
3. _____

4) 95



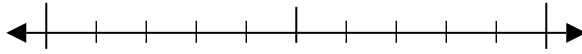
4. _____

5) 115



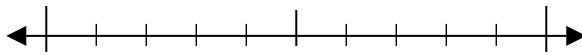
5. _____

6) 933



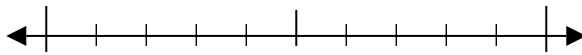
6. _____

7) 215



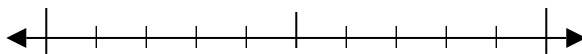
7. _____

8) 811



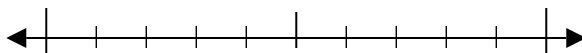
8. _____

9) 5.950



9. _____

10) 3.359

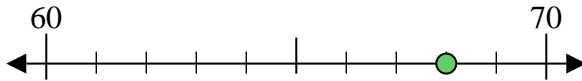


10. _____

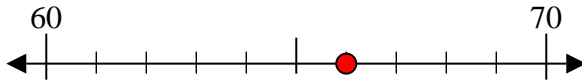


Usa la linea numerata per arrotondare alla decina più vicina.

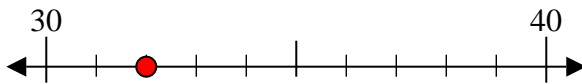
Es) 68



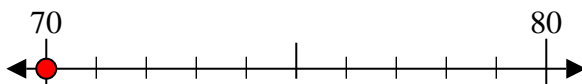
1) 66



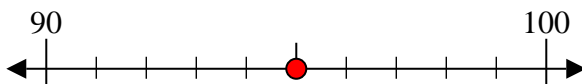
2) 32



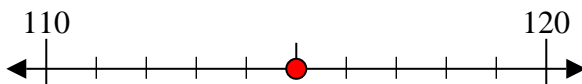
3) 70



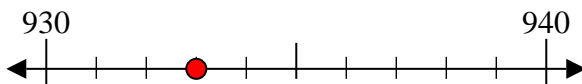
4) 95



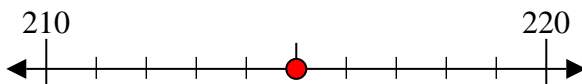
5) 115



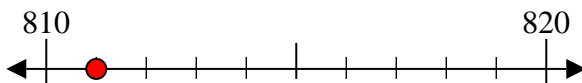
6) 933



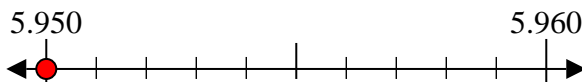
7) 215



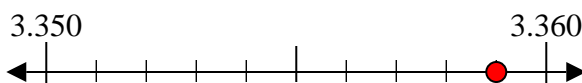
8) 811



9) 5.950



10) 3.359



Risposte

Es. 70

1. 70

2. 30

3. 70

4. 100

5. 120

6. 930

7. 220

8. 810

9. 5.950

10. 3.360