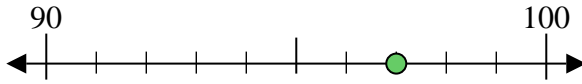




Usa la linea numerata per arrotondare alla decina più vicina.

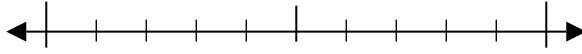
Es) 97



Risposte

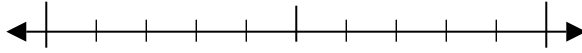
Es. 100

1) 41



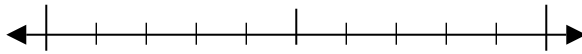
1. _____

2) 53



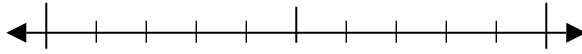
2. _____

3) 62



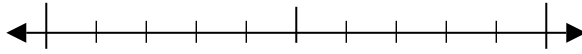
3. _____

4) 31



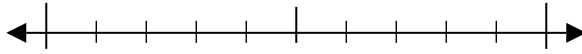
4. _____

5) 429



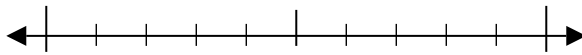
5. _____

6) 929



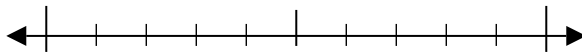
6. _____

7) 732



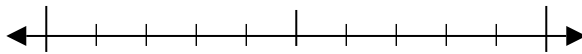
7. _____

8) 974



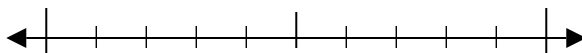
8. _____

9) 2.887



9. _____

10) 8.781

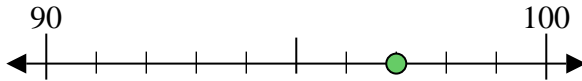


10. _____

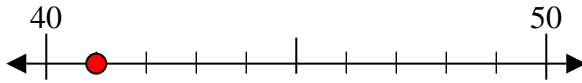


Usa la linea numerata per arrotondare alla decina più vicina.

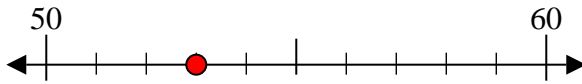
Es) 97



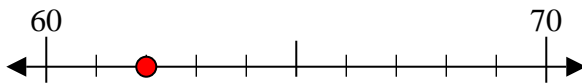
1) 41



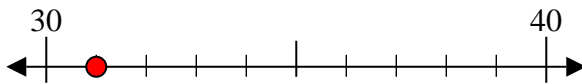
2) 53



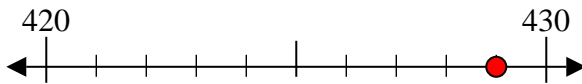
3) 62



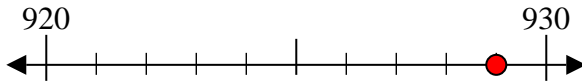
4) 31



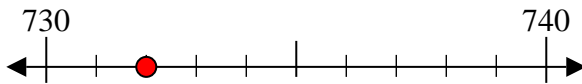
5) 429



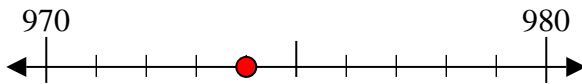
6) 929



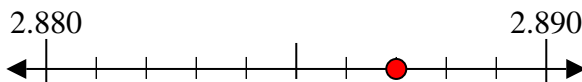
7) 732



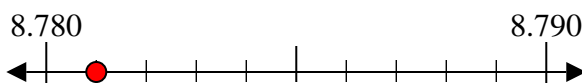
8) 974



9) 2.887



10) 8.781



Risposte

Es. 100

1. 40

2. 50

3. 60

4. 30

5. 430

6. 930

7. 730

8. 970

9. 2.890

10. 8.780