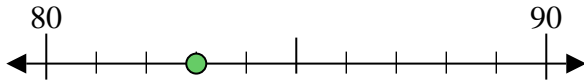




Usa la linea numerata per arrotondare alla decina più vicina.

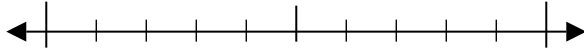
Es) 83



**Risposte**

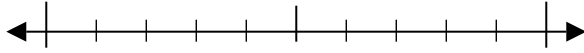
Es. 80

1) 90



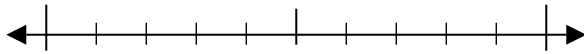
1. \_\_\_\_\_

2) 96



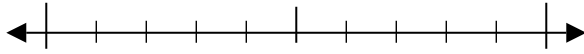
2. \_\_\_\_\_

3) 95



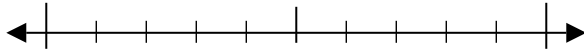
3. \_\_\_\_\_

4) 53



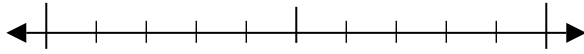
4. \_\_\_\_\_

5) 173



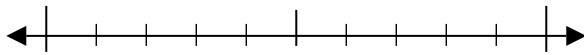
5. \_\_\_\_\_

6) 253



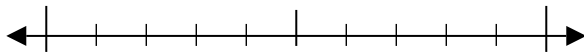
6. \_\_\_\_\_

7) 672



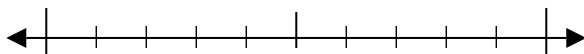
7. \_\_\_\_\_

8) 628



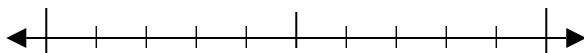
8. \_\_\_\_\_

9) 1.858



9. \_\_\_\_\_

10) 9.594

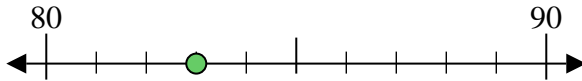


10. \_\_\_\_\_

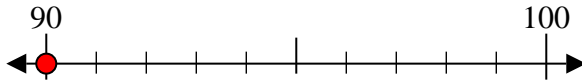


Usa la linea numerata per arrotondare alla decina più vicina.

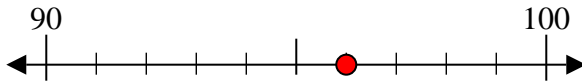
Es) 83



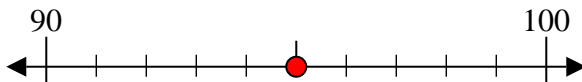
1) 90



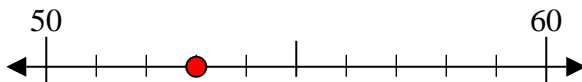
2) 96



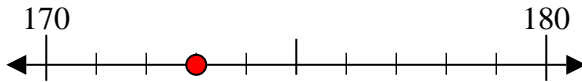
3) 95



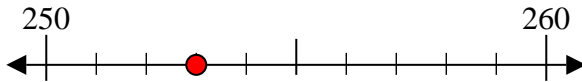
4) 53



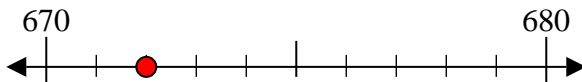
5) 173



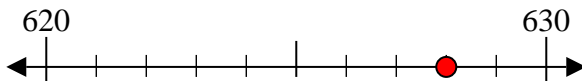
6) 253



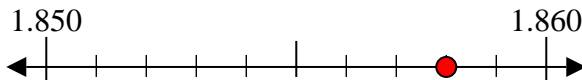
7) 672



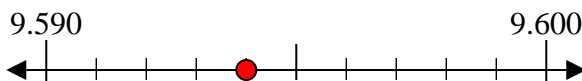
8) 628



9) 1.858



10) 9.594



**Risposte**

Es. 80

1. 90

2. 100

3. 100

4. 50

5. 170

6. 250

7. 670

8. 630

9. 1.860

10. 9.590