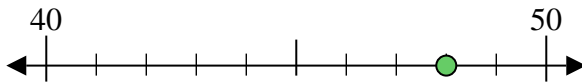




Usa la linea numerata per arrotondare alla decina più vicina.

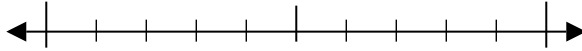
Es) 48



**Risposte**

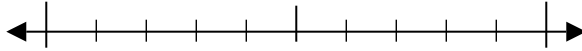
Es. 50

1) 17



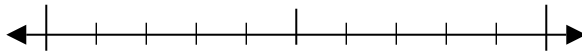
1. \_\_\_\_\_

2) 58



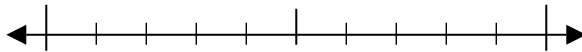
2. \_\_\_\_\_

3) 36



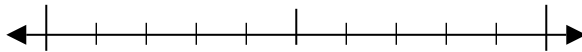
3. \_\_\_\_\_

4) 87



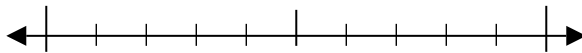
4. \_\_\_\_\_

5) 497



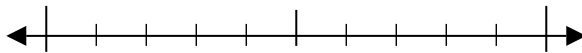
6. \_\_\_\_\_

6) 813



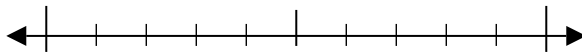
8. \_\_\_\_\_

7) 679

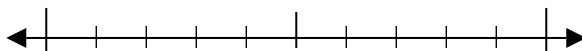


10. \_\_\_\_\_

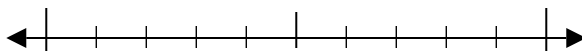
8) 723



9) 4.235



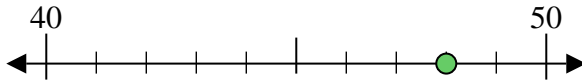
10) 5.761



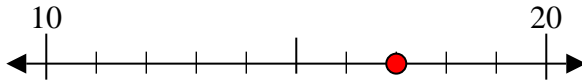


Usa la linea numerata per arrotondare alla decina più vicina.

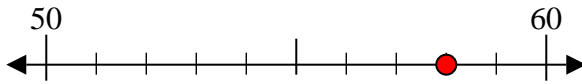
Es) 48



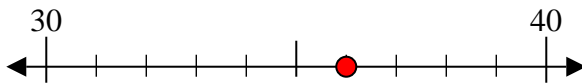
1) 17



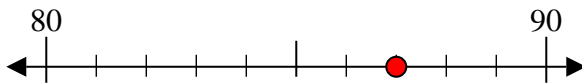
2) 58



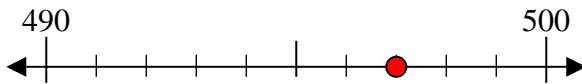
3) 36



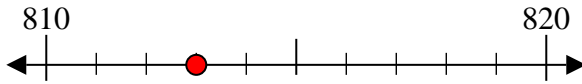
4) 87



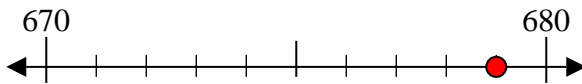
5) 497



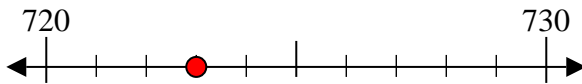
6) 813



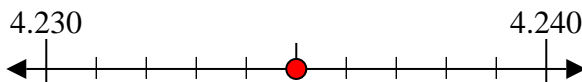
7) 679



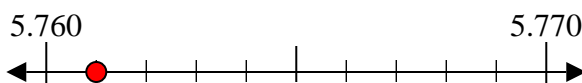
8) 723



9) 4.235



10) 5.761



**Risposte**

Es. 50

1. 20

2. 60

3. 40

4. 90

5. 500

6. 810

7. 680

8. 720

9. 4.240

10. 5.760