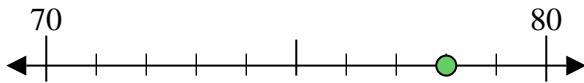




Usa la linea numerata per arrotondare alla decina più vicina.

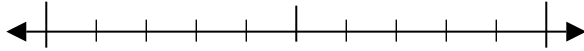
Es) 78



**Risposte**

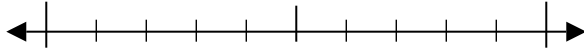
Es. 80

1) 19



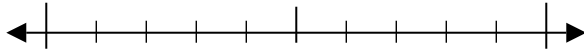
1. \_\_\_\_\_

2) 55



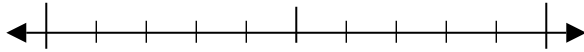
2. \_\_\_\_\_

3) 34



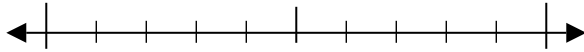
3. \_\_\_\_\_

4) 79



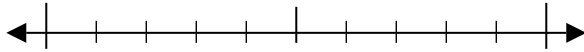
4. \_\_\_\_\_

5) 722



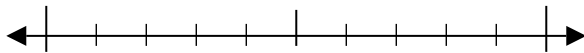
5. \_\_\_\_\_

6) 667



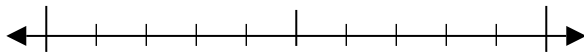
6. \_\_\_\_\_

7) 917



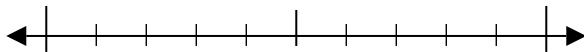
7. \_\_\_\_\_

8) 611



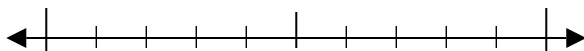
8. \_\_\_\_\_

9) 2.107



9. \_\_\_\_\_

10) 3.717

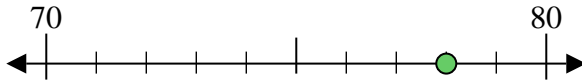


10. \_\_\_\_\_

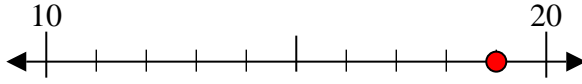


Usa la linea numerata per arrotondare alla decina più vicina.

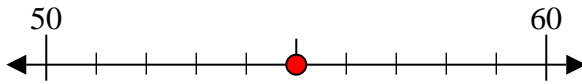
Es) 78



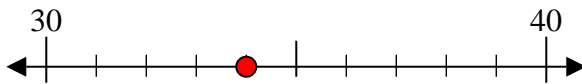
1) 19



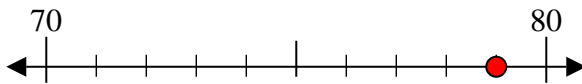
2) 55



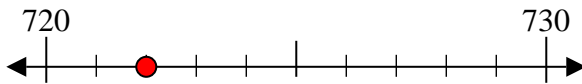
3) 34



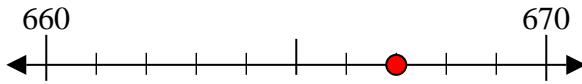
4) 79



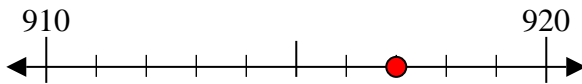
5) 722



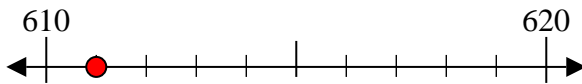
6) 667



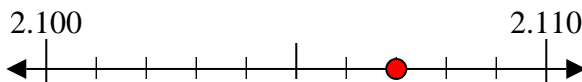
7) 917



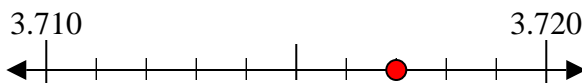
8) 611



9) 2.107



10) 3.717



**Risposte**

Es. 80

1. 20

2. 60

3. 30

4. 80

5. 720

6. 670

7. 920

8. 610

9. 2.110

10. 3.720