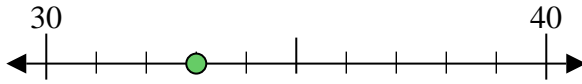




Usa la linea numerata per arrotondare alla decina più vicina.

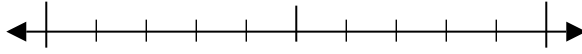
Es) 33



Risposte

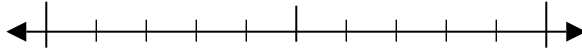
Es. 30

1) 27



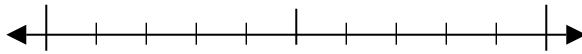
1. _____

2) 45



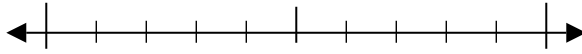
2. _____

3) 41



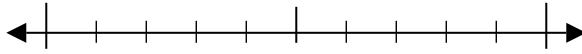
3. _____

4) 62



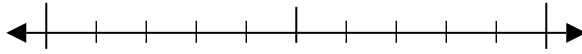
4. _____

5) 816



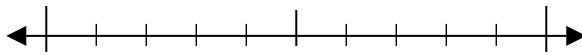
5. _____

6) 991



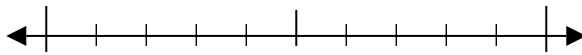
6. _____

7) 849



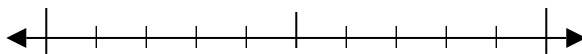
7. _____

8) 513



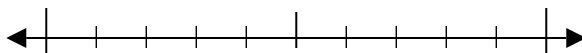
8. _____

9) 3.034



9. _____

10) 5.114

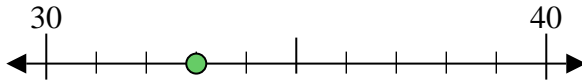


10. _____

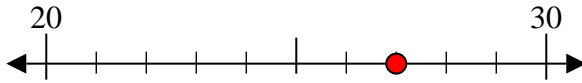


Usa la linea numerata per arrotondare alla decina più vicina.

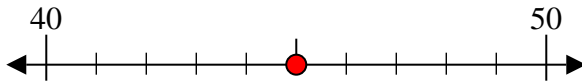
Es) 33



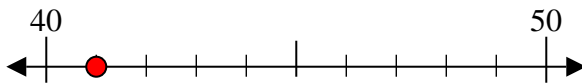
1) 27



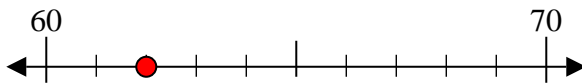
2) 45



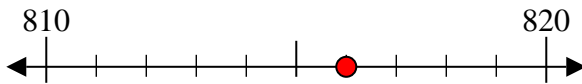
3) 41



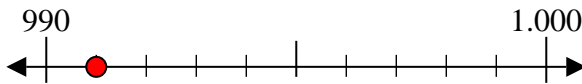
4) 62



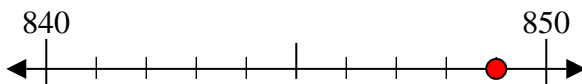
5) 816



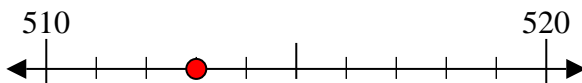
6) 991



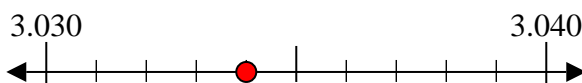
7) 849



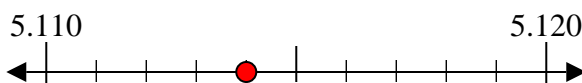
8) 513



9) 3.034



10) 5.114



Risposte

Es. 30

1. 30

2. 50

3. 40

4. 60

5. 820

6. 990

7. 850

8. 510

9. 3.030

10. 5.110