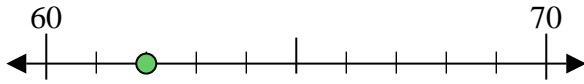




Usa la linea numerata per arrotondare alla decina più vicina.

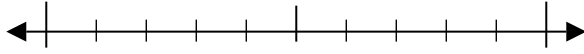
Es) 62



Risposte

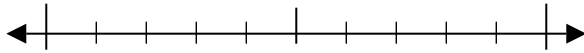
Es. 60

1) 52



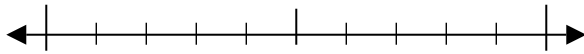
1. _____

2) 74



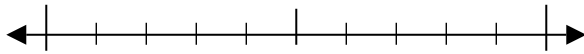
2. _____

3) 65



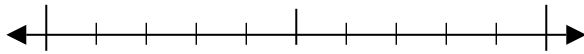
3. _____

4) 45



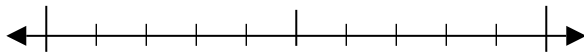
4. _____

5) 271



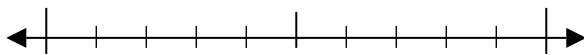
5. _____

6) 461



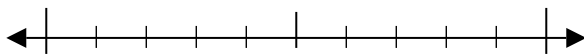
6. _____

7) 808



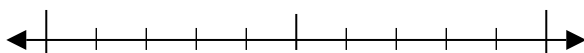
7. _____

8) 396



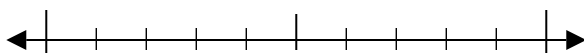
8. _____

9) 9.792



9. _____

10) 4.573

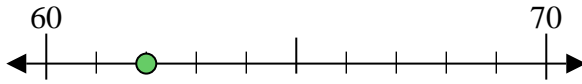


10. _____

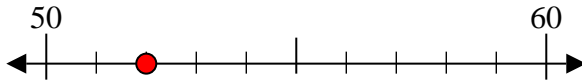


Usa la linea numerata per arrotondare alla decina più vicina.

Es) 62



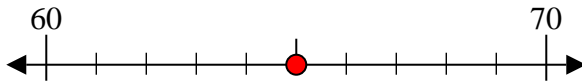
1) 52



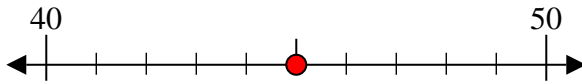
2) 74



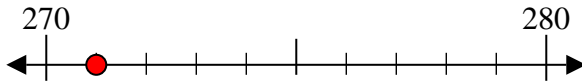
3) 65



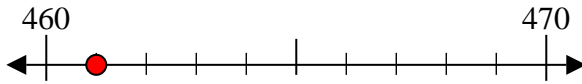
4) 45



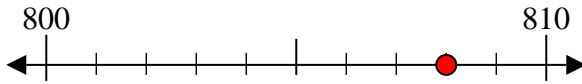
5) 271



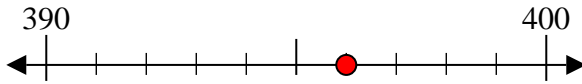
6) 461



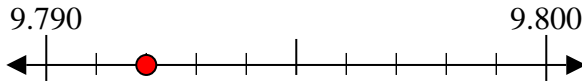
7) 808



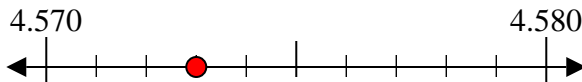
8) 396



9) 9.792



10) 4.573



Risposte

Es. 60

1. 50

2. 70

3. 70

4. 50

5. 270

6. 460

7. 810

8. 400

9. 9.790

10. 4.570