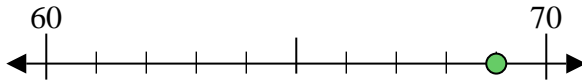




Usa la linea numerata per arrotondare alla decina più vicina.

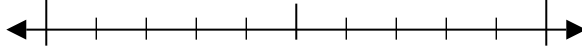
Es) 69



Risposte

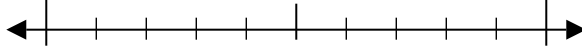
Es. 70

1) 62



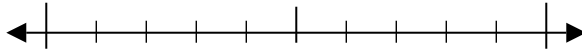
1. _____

2) 11



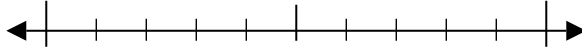
2. _____

3) 98



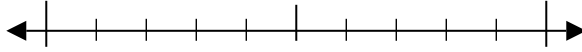
3. _____

4) 16



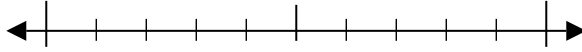
4. _____

5) 688



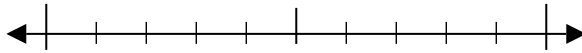
6. _____

6) 375



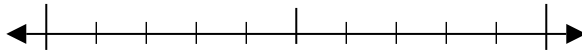
7. _____

7) 136



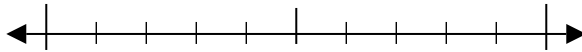
8. _____

8) 177



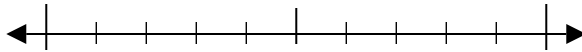
9. _____

9) 6.791



10. _____

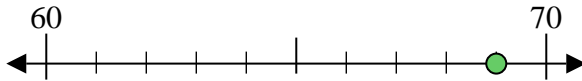
10) 6.669



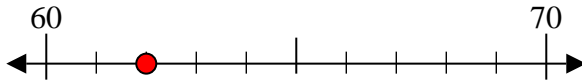


Usa la linea numerata per arrotondare alla decina più vicina.

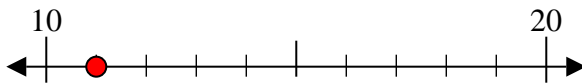
Es) 69



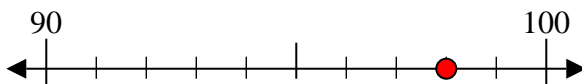
1) 62



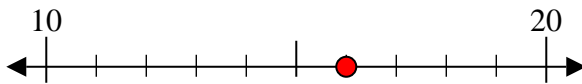
2) 11



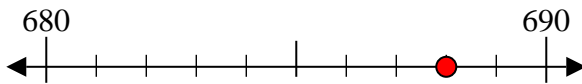
3) 98



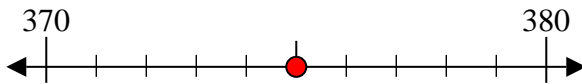
4) 16



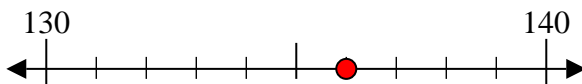
5) 688



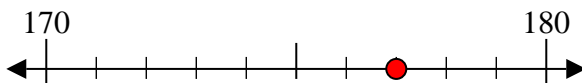
6) 375



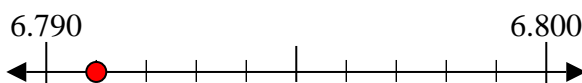
7) 136



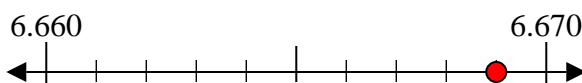
8) 177



9) 6.791



10) 6.669



Risposte

Es. 70

1. 60

2. 10

3. 100

4. 20

5. 690

6. 380

7. 140

8. 180

9. 6.790

10. 6.670