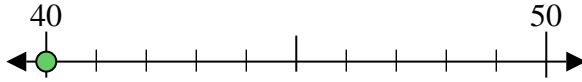




Usa la linea numerata per arrotondare alla decina più vicina.

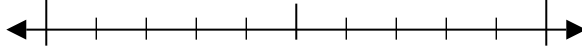
Es) 40



Risposte

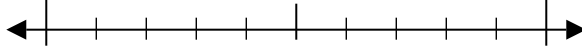
Es. 40

1) 67



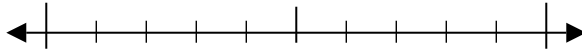
1. _____

2) 70



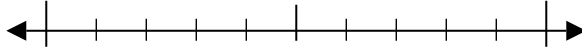
2. _____

3) 52



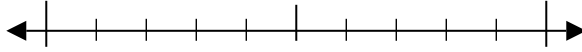
3. _____

4) 78



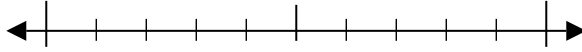
4. _____

5) 572



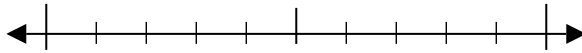
5. _____

6) 422



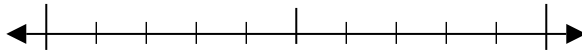
6. _____

7) 876



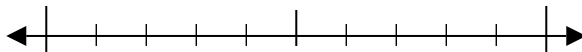
7. _____

8) 652



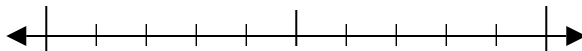
8. _____

9) 9.128



9. _____

10) 5.434

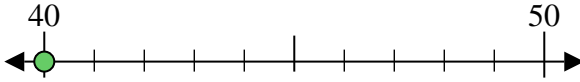


10. _____

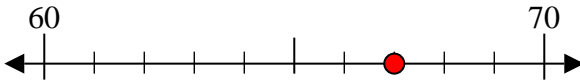


Usa la linea numerata per arrotondare alla decina più vicina.

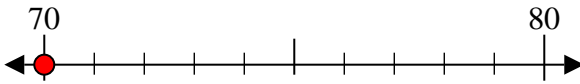
Es) 40



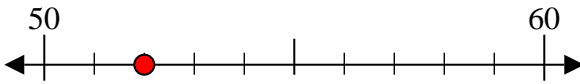
1) 67



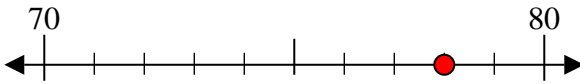
2) 70



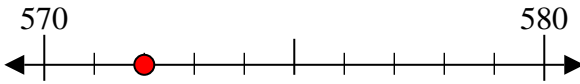
3) 52



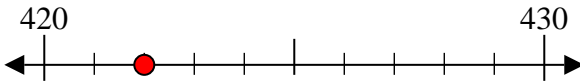
4) 78



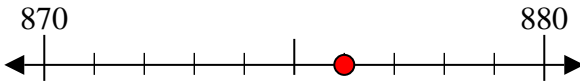
5) 572



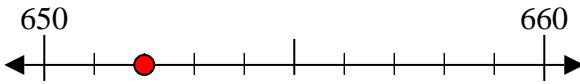
6) 422



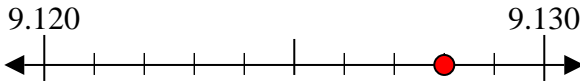
7) 876



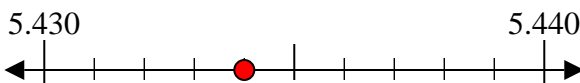
8) 652



9) 9.128



10) 5.434



Risposte

Es. 40

1. 70

2. 70

3. 50

4. 80

5. 570

6. 420

7. 880

8. 650

9. 9.130

10. 5.430