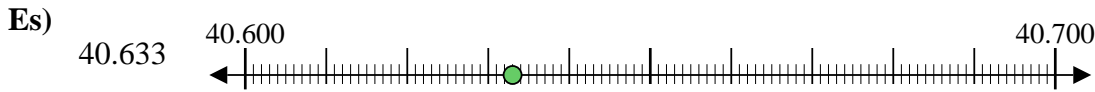




Usa la linea numerata per arrotondare ogni numero al centinaio più vicino.



**Risposte**

Es. 40.600



1. \_\_\_\_\_



2. \_\_\_\_\_



3. \_\_\_\_\_



4. \_\_\_\_\_



5. \_\_\_\_\_



6. \_\_\_\_\_



7. \_\_\_\_\_



8. \_\_\_\_\_



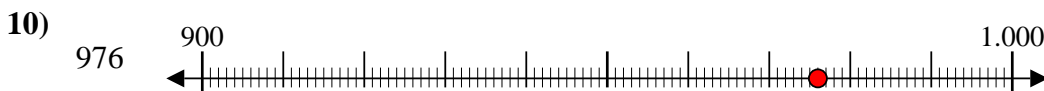
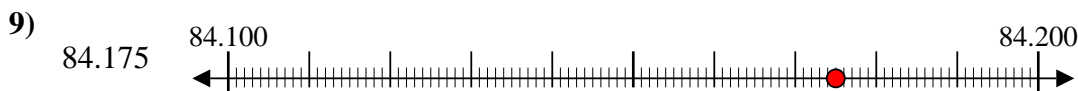
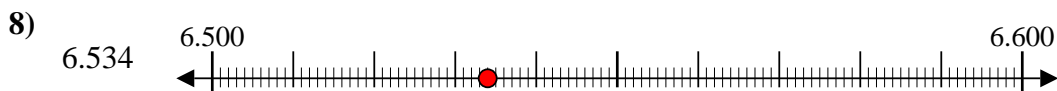
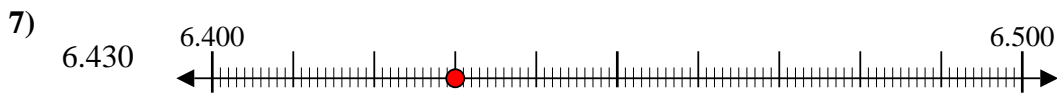
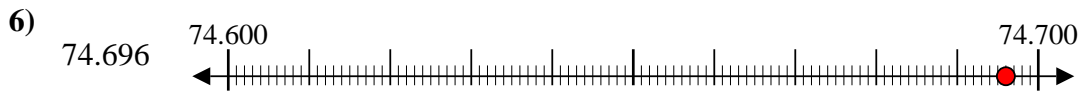
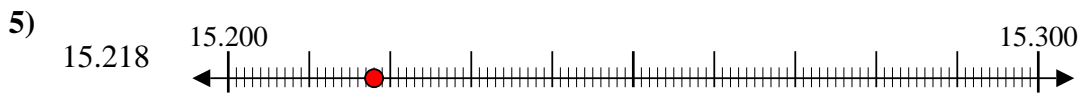
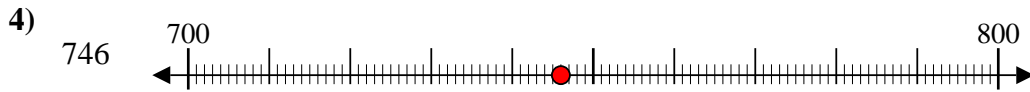
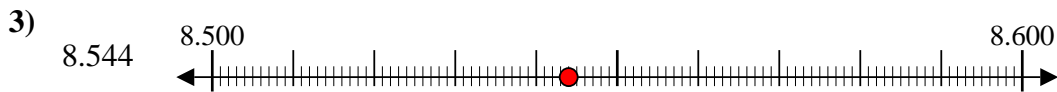
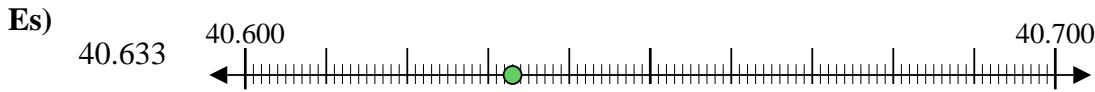
9. \_\_\_\_\_



10. \_\_\_\_\_



Usa la linea numerata per arrotondare ogni numero al centinaio più vicino.



**Risposte**

Es. 40.600

1. 8.300

2. 300

3. 8.500

4. 700

5. 15.200

6. 74.700

7. 6.400

8. 6.500

9. 84.200

10. 1.000