



Usa la linea numerata per arrotondare ogni numero al centinaio più vicino.

Es) 110



Risposte

Es. 100

1) 485



1. _____

2) 994



2. _____

3) 535



3. _____

4) 490



4. _____

5) 7.897



5. _____

6) 5.664



6. _____

7) 1.546



7. _____

8) 4.226



8. _____

9) 74.819



9. _____

10) 59.345



10. _____



Usa la linea numerata per arrotondare ogni numero al centinaio più vicino.

Es) 110



1) 485



2) 994



3) 535



4) 490



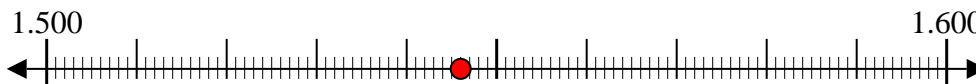
5) 7.897



6) 5.664



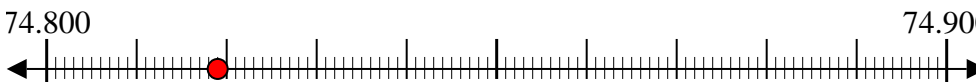
7) 1.546



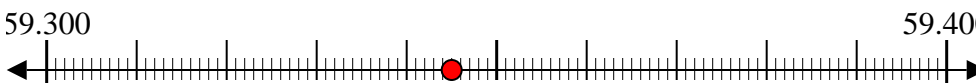
8) 4.226



9) 74.819



10) 59.345



Risposte

Es. 100

1. 500

2. 1.000

3. 500

4. 500

5. 7.900

6. 5.700

7. 1.500

8. 4.200

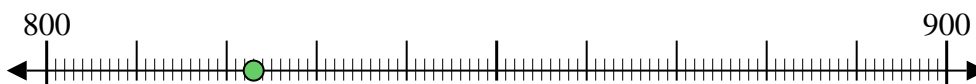
9. 74.800

10. 59.300



Usa la linea numerata per arrotondare ogni numero al centinaio più vicino.

Es) 823



1) 621



2) 473



3) 990



4) 272



5) 1.888



6) 5.003



7) 6.690



8) 9.163



9) 19.827



10) 47.990



Risposte

Es. 800

1. _____

2. _____

3. _____

4. _____

5. _____

6. _____

7. _____

8. _____

9. _____

10. _____



Usa la linea numerata per arrotondare ogni numero al centinaio più vicino.

Es) 823



1) 621



2) 473



3) 990



4) 272



5) 1.888



6) 5.003



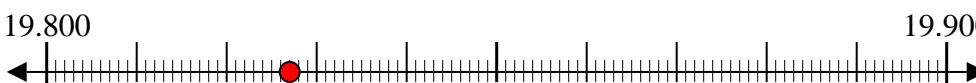
7) 6.690



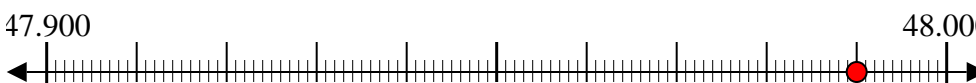
8) 9.163



9) 19.827



10) 47.990



Risposte

Es. 800

1. 600

2. 500

3. 1.000

4. 300

5. 1.900

6. 5.000

7. 6.700

8. 9.200

9. 19.800

10. 48.000



Usa la linea numerata per arrotondare ogni numero al centinaio più vicino.

Es) 405



Risposte

Es. 400

1) 134



1. _____

2) 702



2. _____

3) 635



3. _____

4) 294



4. _____

5) 3.029



5. _____

6) 5.832



6. _____

7) 4.008



7. _____

8) 9.052



8. _____

9) 40.552



9. _____

10) 44.502



10. _____



Usa la linea numerata per arrotondare ogni numero al centinaio più vicino.

Es) 405



1) 134



2) 702



3) 635



4) 294



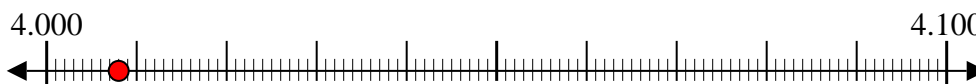
5) 3.029



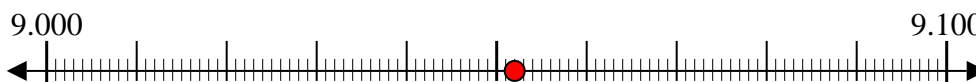
6) 5.832



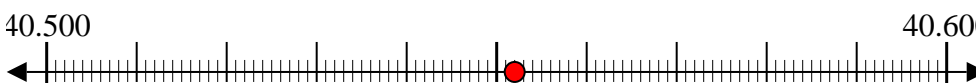
7) 4.008



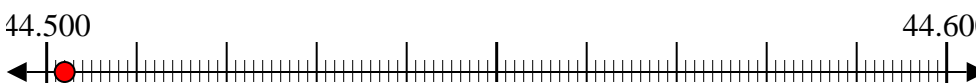
8) 9.052



9) 40.552



10) 44.502



Risposte

Es. 400

1. 100

2. 700

3. 600

4. 300

5. 3.000

6. 5.800

7. 4.000

8. 9.100

9. 40.600

10. 44.500



Usa la linea numerata per arrotondare ogni numero al centinaio più vicino.

Es) 139



Risposte

Es. 100

1) 294



1. _____

2) 518



2. _____

3) 431



3. _____

4) 771



4. _____

5) 2.495



5. _____

6) 8.608



6. _____

7) 5.487



7. _____

8) 2.661



8. _____

9) 15.004



9. _____

10) 19.700



10. _____



Usa la linea numerata per arrotondare ogni numero al centinaio più vicino.

Es) 139



1) 294



2) 518



3) 431



4) 771



5) 2.495



6) 8.608



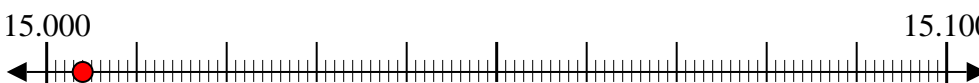
7) 5.487



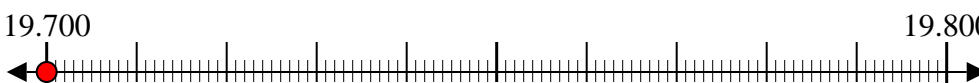
8) 2.661



9) 15.004



10) 19.700



Risposte

Es. 100

1. 300

2. 500

3. 400

4. 800

5. 2.500

6. 8.600

7. 5.500

8. 2.700

9. 15.000

10. 19.700



Usa la linea numerata per arrotondare ogni numero al centinaio più vicino.

Es) 943



Risposte

Es. 900

1) 316



1. _____

2) 866



2. _____

3) 860



3. _____

4) 202



4. _____

5) 8.057



5. _____

6) 1.131



6. _____

7) 8.210



7. _____

8) 7.603



8. _____

9) 77.126



9. _____

10) 87.843



10. _____



Usa la linea numerata per arrotondare ogni numero al centinaio più vicino.

Es) 943



1) 316



2) 866



3) 860



4) 202



5) 8.057



6) 1.131



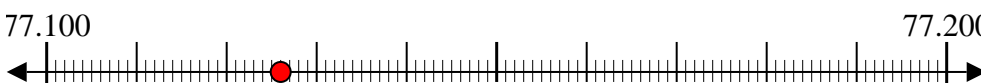
7) 8.210



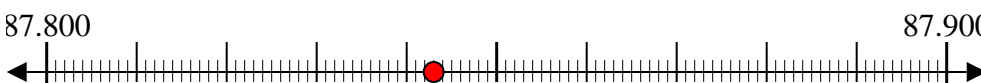
8) 7.603



9) 77.126



10) 87.843



Risposte

Es. 900

1. 300

2. 900

3. 900

4. 200

5. 8.100

6. 1.100

7. 8.200

8. 7.600

9. 77.100

10. 87.800



Usa la linea numerata per arrotondare ogni numero al centinaio più vicino.

Es) 895



Risposte

Es. 900

1) 288



1. _____

2) 526



2. _____

3) 349



3. _____

4) 995



4. _____

5) 1.327



5. _____

6) 5.796



6. _____

7) 5.602



7. _____

8) 8.586



8. _____

9) 99.302



9. _____

10) 79.125



10. _____



Usa la linea numerata per arrotondare ogni numero al centinaio più vicino.

Es) 895



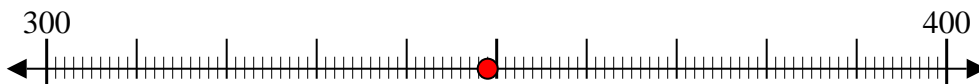
1) 288



2) 526



3) 349



4) 995



5) 1.327



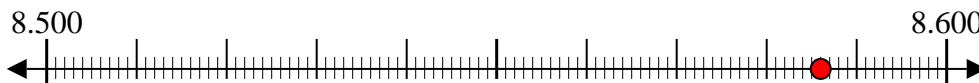
6) 5.796



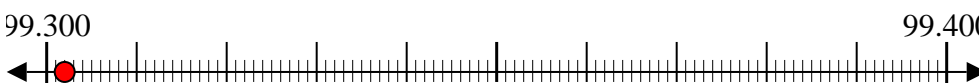
7) 5.602



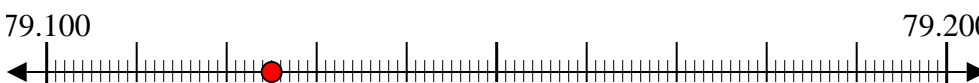
8) 8.586



9) 99.302



10) 79.125



Risposte

Es. 900

1. 300

2. 500

3. 300

4. 1.000

5. 1.300

6. 5.800

7. 5.600

8. 8.600

9. 99.300

10. 79.100



Usa la linea numerata per arrotondare ogni numero al centinaio più vicino.

Es) 855



Risposte

Es. 900

1) 496



1. _____

2) 838



2. _____

3) 900



3. _____

4) 692



4. _____

5) 3.013



5. _____

6) 9.842



6. _____

7) 7.684



7. _____

8) 4.660



8. _____

9) 74.852



9. _____

10) 12.180

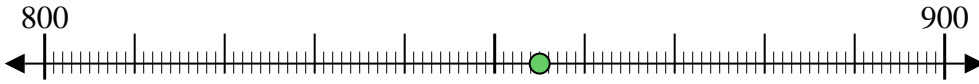


10. _____



Usa la linea numerata per arrotondare ogni numero al centinaio più vicino.

Es) 855



1) 496



2) 838



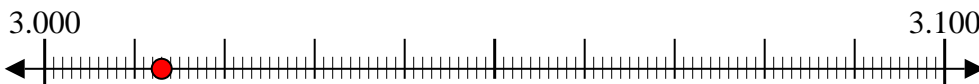
3) 900



4) 692



5) 3.013



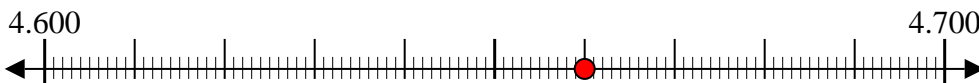
6) 9.842



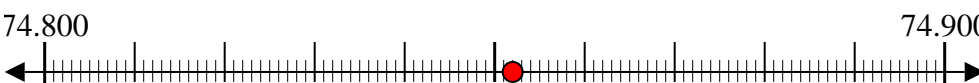
7) 7.684



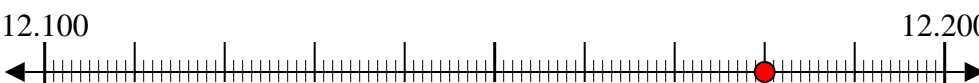
8) 4.660



9) 74.852



10) 12.180



Risposte

Es. 900

1. 500

2. 800

3. 900

4. 700

5. 3.000

6. 9.800

7. 7.700

8. 4.700

9. 74.900

10. 12.200



Usa la linea numerata per arrotondare ogni numero al centinaio più vicino.

Es) 194



Risposte

Es. 200

1) 745



1. _____

2) 525



2. _____

3) 209



3. _____

4) 295



4. _____

5) 3.165



5. _____

6) 3.600



6. _____

7) 7.317



7. _____

8) 2.469



8. _____

9) 50.534



9. _____

10) 26.578



10. _____

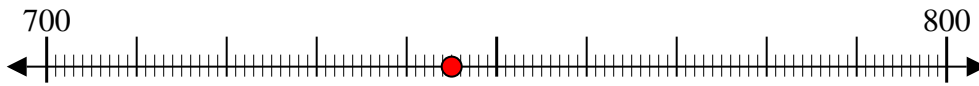


Usa la linea numerata per arrotondare ogni numero al centinaio più vicino.

Es) 194



1) 745



2) 525



3) 209



4) 295



5) 3.165



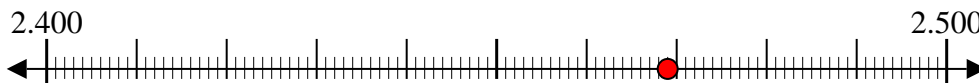
6) 3.600



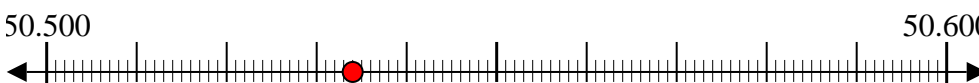
7) 7.317



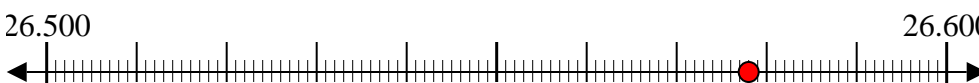
8) 2.469



9) 50.534



10) 26.578



Risposte

Es. 200

1. 700

2. 500

3. 200

4. 300

5. 3.200

6. 3.600

7. 7.300

8. 2.500

9. 50.500

10. 26.600



Usa la linea numerata per arrotondare ogni numero al centinaio più vicino.

Es) 617



Risposte

Es. 600

1) 589



1. _____

2) 421



2. _____

3) 896



3. _____

4) 891



4. _____

5) 8.428



5. _____

6) 9.746



6. _____

7) 9.460



7. _____

8) 9.503



8. _____

9) 59.042



9. _____

10) 45.326



10. _____



Usa la linea numerata per arrotondare ogni numero al centinaio più vicino.

Es) 617



1) 589



2) 421



3) 896



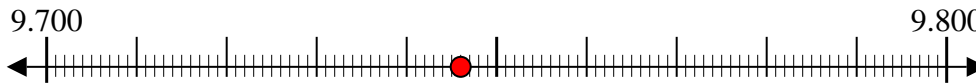
4) 891



5) 8.428



6) 9.746



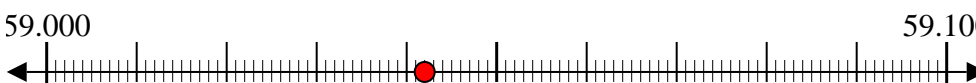
7) 9.460



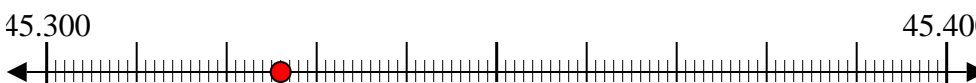
8) 9.503



9) 59.042



10) 45.326



Risposte

Es. 600

1. 600

2. 400

3. 900

4. 900

5. 8.400

6. 9.700

7. 9.500

8. 9.500

9. 59.000

10. 45.300



Usa la linea numerata per arrotondare ogni numero al centinaio più vicino.

Es) 988



Risposte

Es. 1.000

1) 455



1. _____

2) 994



2. _____

3) 827



3. _____

4) 276



4. _____

5) 8.291



5. _____

6) 4.550



6. _____

7) 6.413



7. _____

8) 9.344



8. _____

9) 51.511



9. _____

10) 67.370



10. _____



Usa la linea numerata per arrotondare ogni numero al centinaio più vicino.

Es) 988



1) 455



2) 994



3) 827



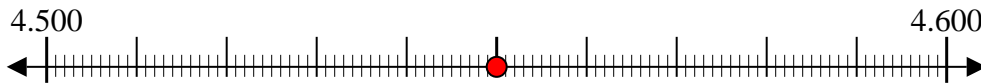
4) 276



5) 8.291



6) 4.550



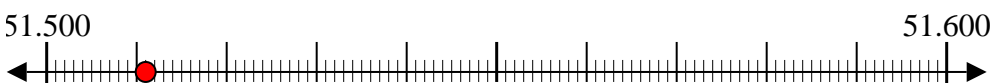
7) 6.413



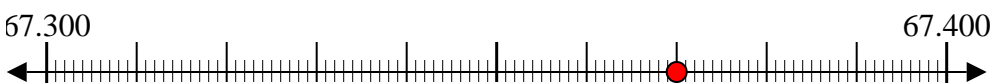
8) 9.344



9) 51.511



10) 67.370



Risposte

Es. 1.000

1. 500

2. 1.000

3. 800

4. 300

5. 8.300

6. 4.600

7. 6.400

8. 9.300

9. 51.500

10. 67.400

