



Determina quale regola viene usata nelle seguenti funzioni.

Es)

15

 27
 Aggiungi 12

1)

19

 29
 Aggiungi 10

2)

26

 20
 Sottrai 6

3)

41

 20
 Sottrai 21

4)

38

 30
 Sottrai 8

5)

13

 27
 Aggiungi 14

6)

37

 28
 Sottrai 9

7)

25

 36
 Aggiungi 11

8)

17

 10
 Sottrai 7

9)

20

 36
 Aggiungi 16

10)

21

 10
 Sottrai 11

11)

21

 10
 Sottrai 11

Risposte

Es. **Aggiungi 12**

1. **Aggiungi 10**

2. **Sottrai 6**

3. **Sottrai 21**

4. **Sottrai 8**

5. **Aggiungi 14**

6. **Sottrai 9**

7. **Aggiungi 11**

8. **Sottrai 7**

9. **Aggiungi 16**

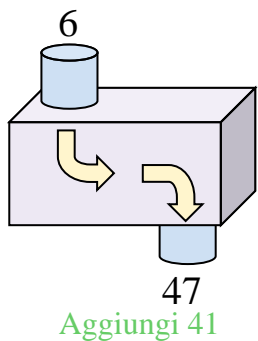
10. **Sottrai 11**

11. **Sottrai 11**

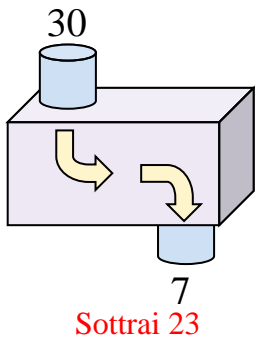


Determina quale regola viene usata nelle seguenti funzioni.

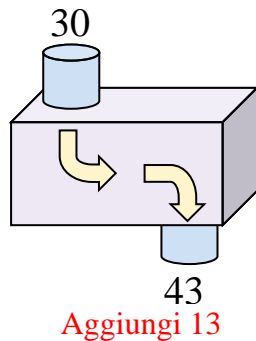
Es)



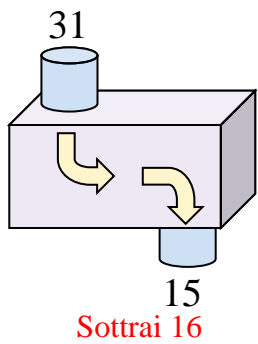
1)



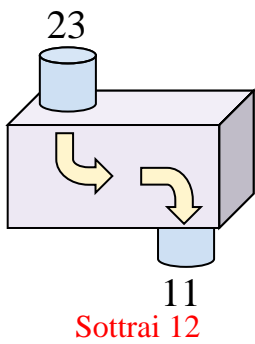
2)



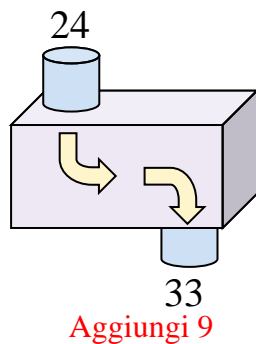
3)



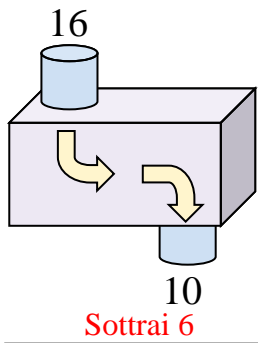
4)



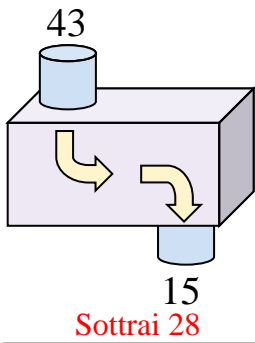
5)



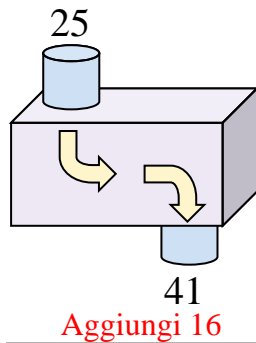
6)



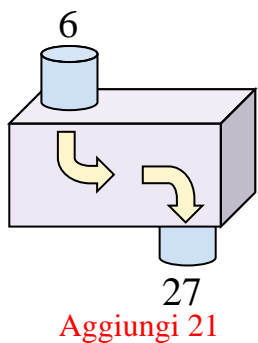
7)



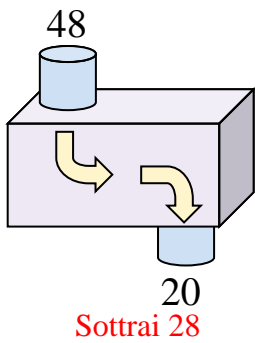
8)



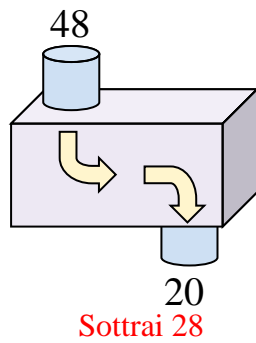
9)



10)



11)



Risposte

Es. **Aggiungi 41**

1. **Sottrai 23**

2. **Aggiungi 13**

3. **Sottrai 16**

4. **Sottrai 12**

5. **Aggiungi 9**

6. **Sottrai 6**

7. **Sottrai 28**

8. **Aggiungi 16**

9. **Aggiungi 21**

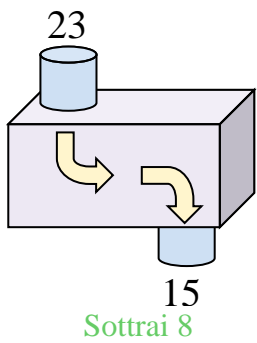
10. **Sottrai 28**

11. **Sottrai 28**

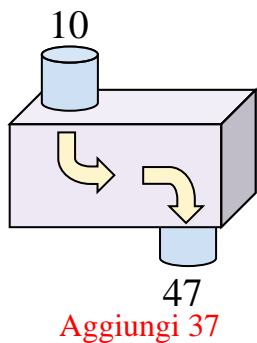


Determina quale regola viene usata nelle seguenti funzioni.

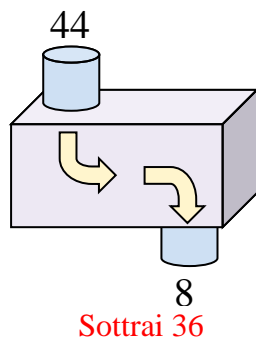
Es)



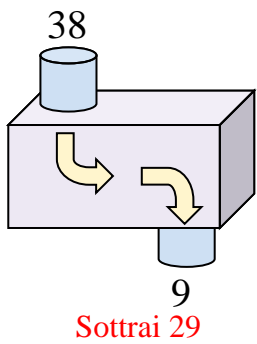
1)



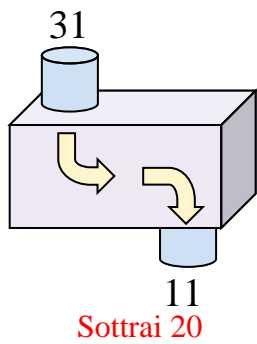
2)



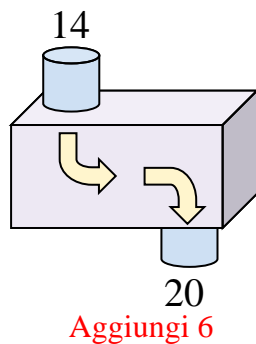
3)



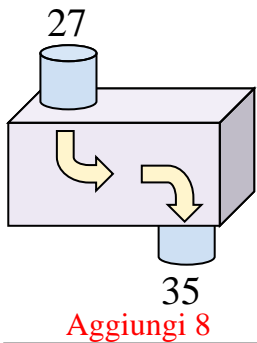
4)



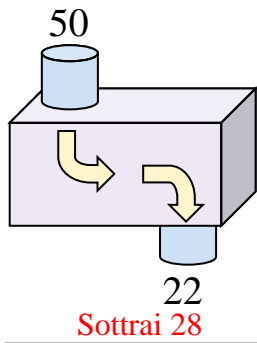
5)



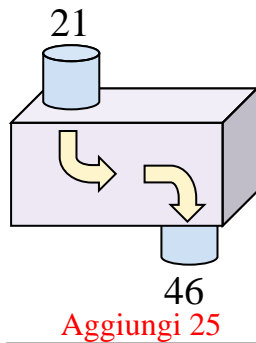
6)



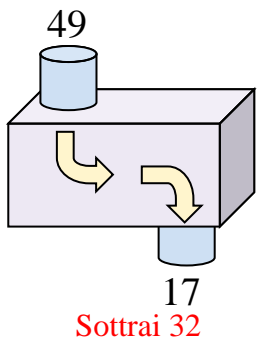
7)



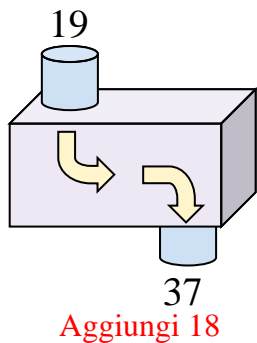
8)



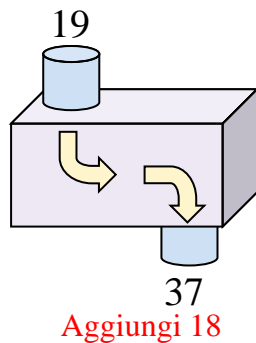
9)



10)



11)



Risposte

Es. **Sottrai 8**

1. **Aggiungi 37**

2. **Sottrai 36**

3. **Sottrai 29**

4. **Sottrai 20**

5. **Aggiungi 6**

6. **Aggiungi 8**

7. **Sottrai 28**

8. **Aggiungi 25**

9. **Sottrai 32**

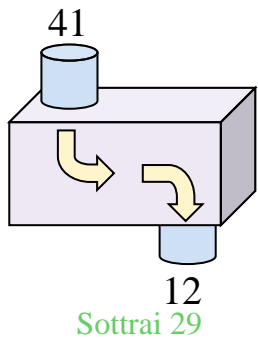
10. **Aggiungi 18**

11. **Aggiungi 18**

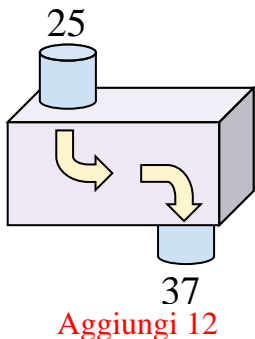


Determina quale regola viene usata nelle seguenti funzioni.

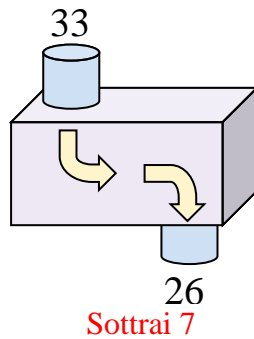
Es)



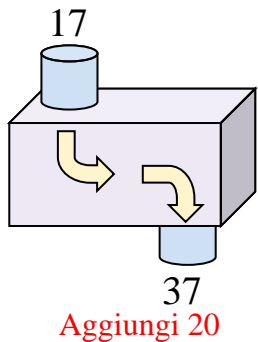
1)



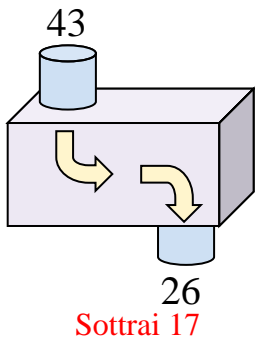
2)



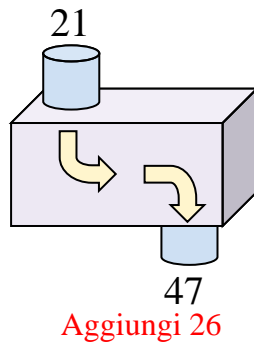
3)



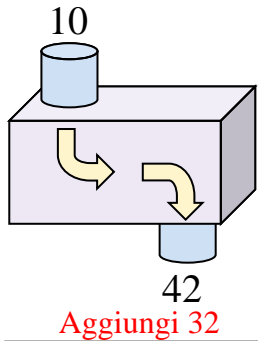
4)



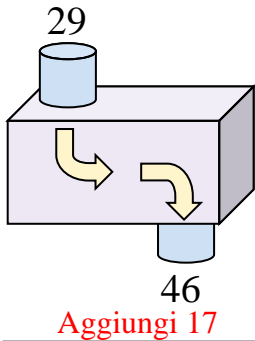
5)



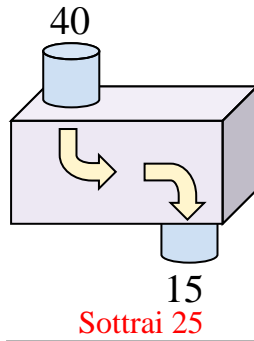
6)



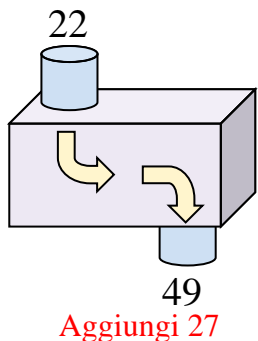
7)



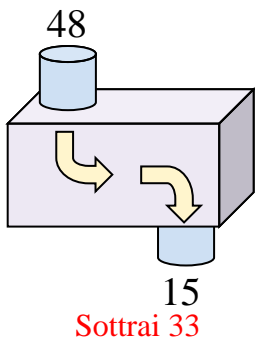
8)



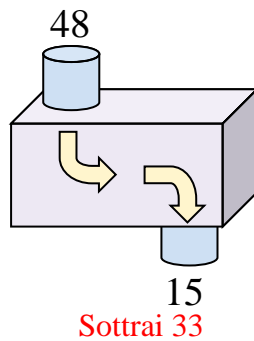
9)



10)



11)



Risposte

Es. **Sottrai 29**

1. **Aggiungi 12**

2. **Sottrai 7**

3. **Aggiungi 20**

4. **Sottrai 17**

5. **Aggiungi 26**

6. **Aggiungi 32**

7. **Aggiungi 17**

8. **Sottrai 25**

9. **Aggiungi 27**

10. **Sottrai 33**

11. **Sottrai 33**

