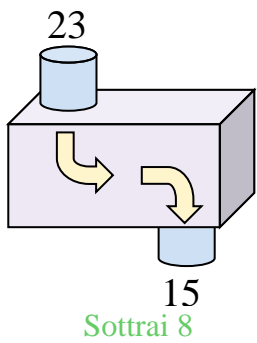




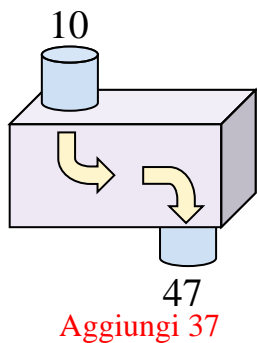


Determina quale regola viene usata nelle seguenti funzioni.

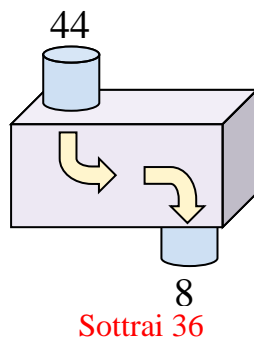
Es)



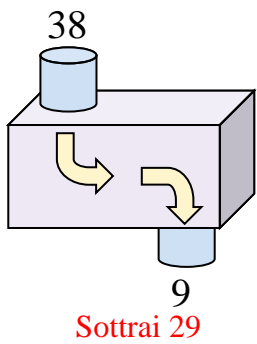
1)



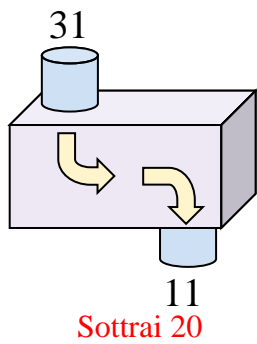
2)



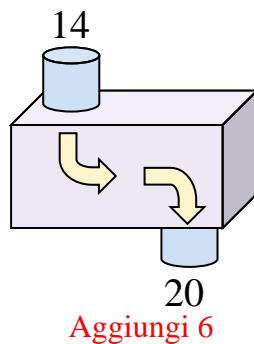
3)



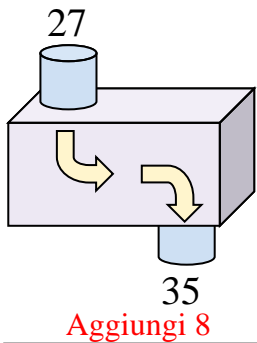
4)



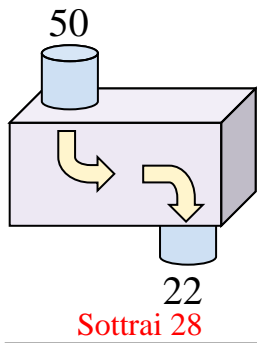
5)



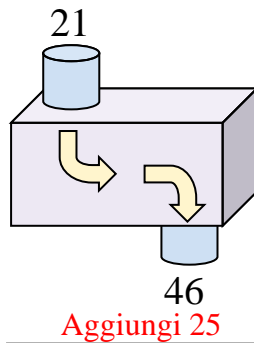
6)



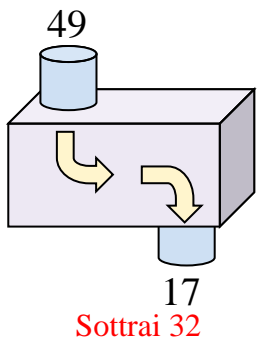
7)



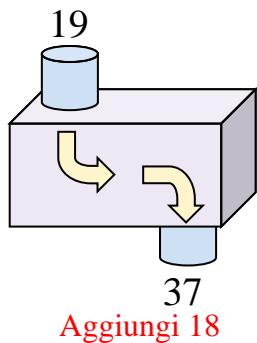
8)



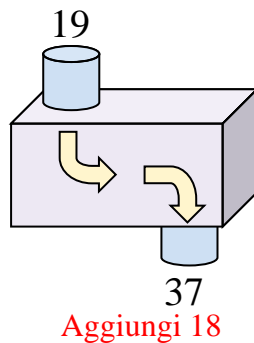
9)



10)



11)



**Risposte**

Es. **Sottrai 8**

1. **Aggiungi 37**

2. **Sottrai 36**

3. **Sottrai 29**

4. **Sottrai 20**

5. **Aggiungi 6**

6. **Aggiungi 8**

7. **Sottrai 28**

8. **Aggiungi 25**

9. **Sottrai 32**

10. **Aggiungi 18**

11. **Aggiungi 18**