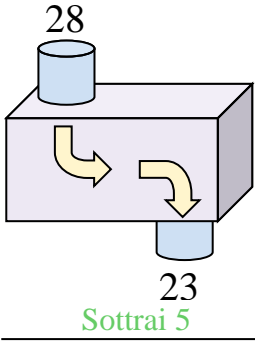


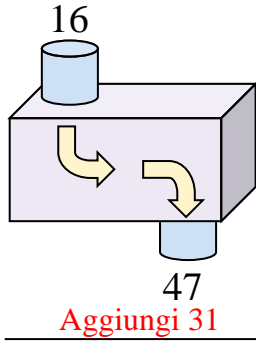


Determina quale regola viene usata nelle seguenti funzioni.

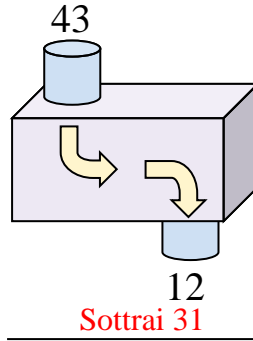
Es)



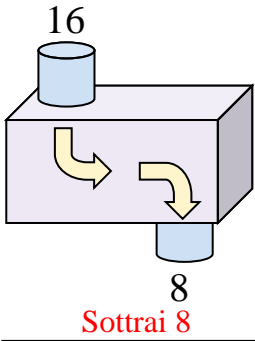
1)



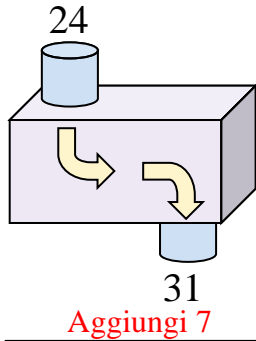
2)



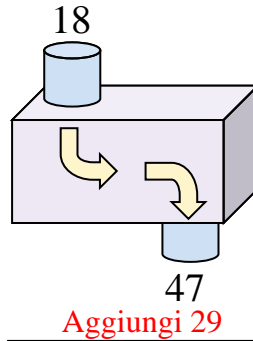
3)



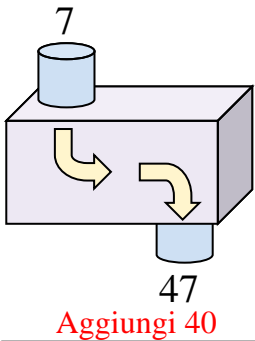
4)



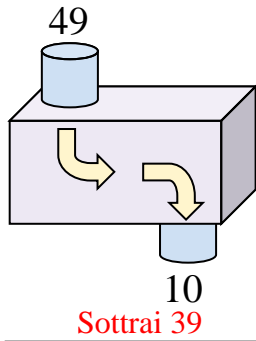
5)



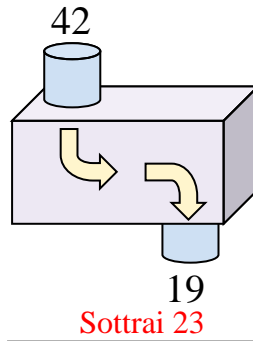
6)



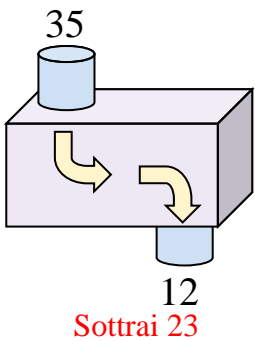
7)



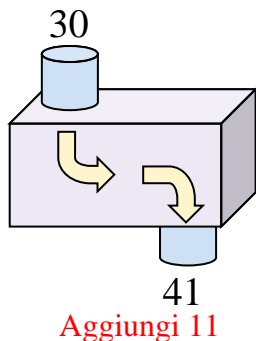
8)



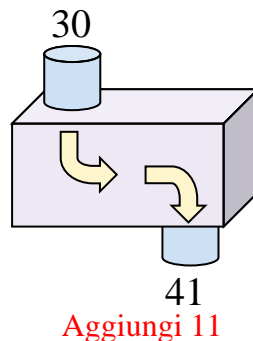
9)



10)



11)



Risposte

Es. **Sottrai 5**

1. **Aggiungi 31**

2. **Sottrai 31**

3. **Sottrai 8**

4. **Aggiungi 7**

5. **Aggiungi 29**

6. **Aggiungi 40**

7. **Sottrai 39**

8. **Sottrai 23**

9. **Sottrai 23**

10. **Aggiungi 11**

11. **Aggiungi 11**