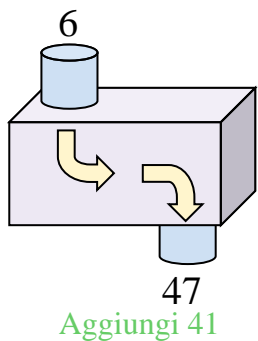




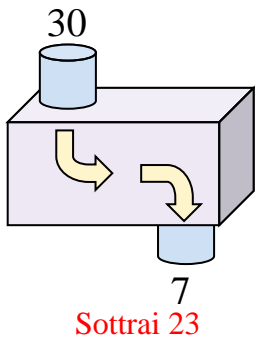


Determina quale regola viene usata nelle seguenti funzioni.

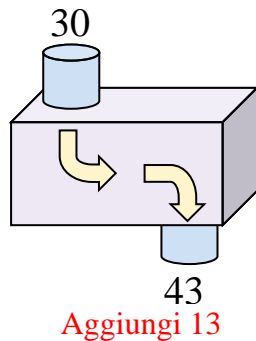
Es)



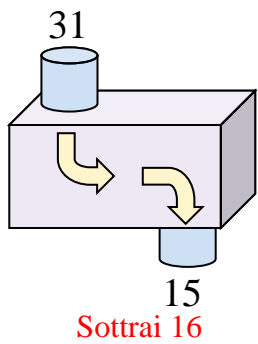
1)



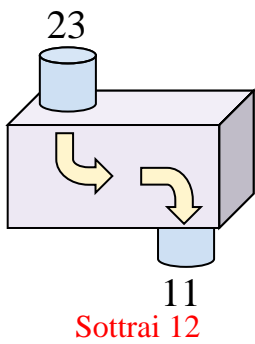
2)



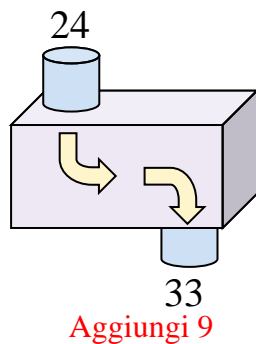
3)



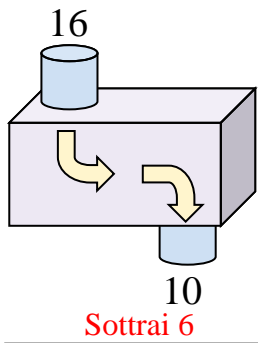
4)



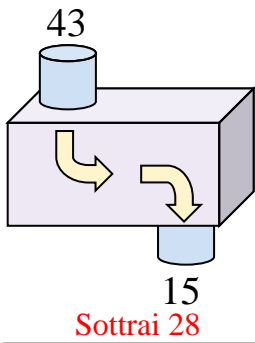
5)



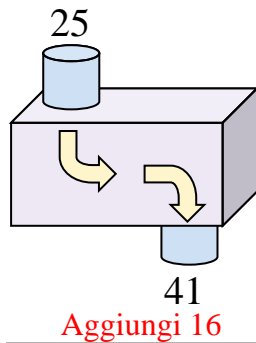
6)



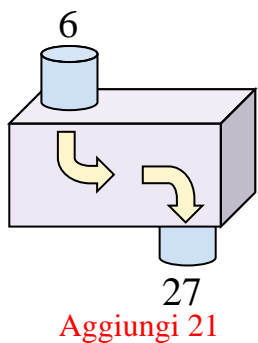
7)



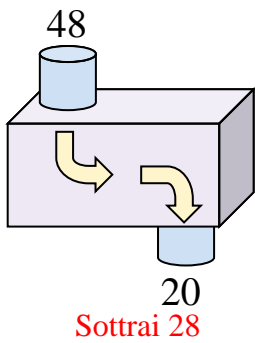
8)



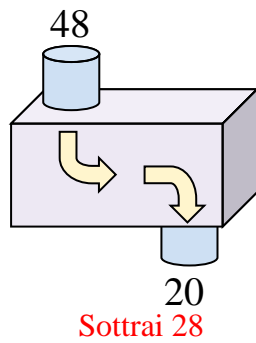
9)



10)



11)



**Risposte**

Es. **Aggiungi 41**

1. **Sottrai 23**

2. **Aggiungi 13**

3. **Sottrai 16**

4. **Sottrai 12**

5. **Aggiungi 9**

6. **Sottrai 6**

7. **Sottrai 28**

8. **Aggiungi 16**

9. **Aggiungi 21**

10. **Sottrai 28**

11. **Sottrai 28**