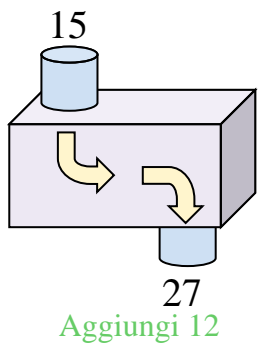


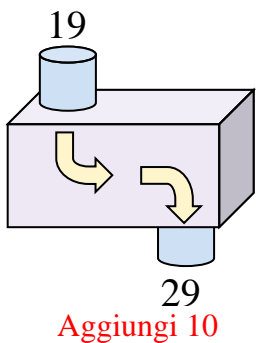


Determina quale regola viene usata nelle seguenti funzioni.

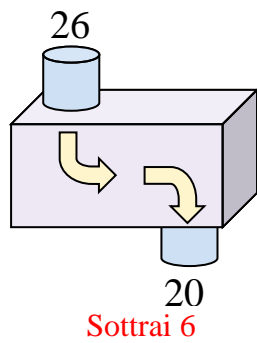
Es)



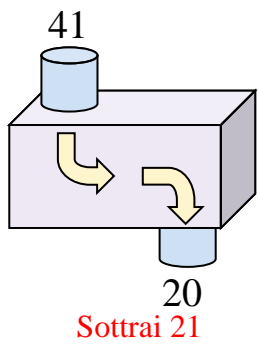
1)



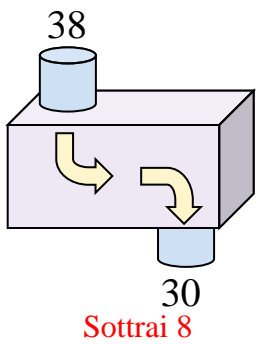
2)



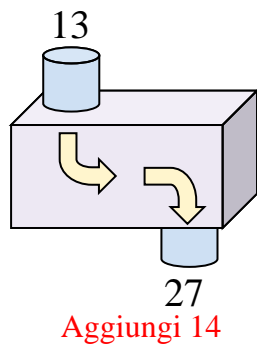
3)



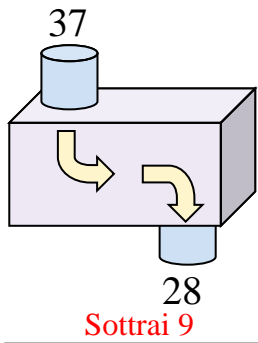
4)



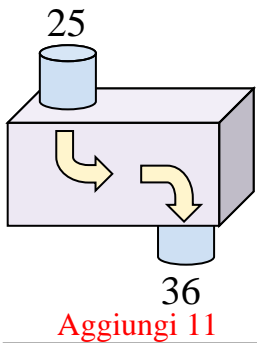
5)



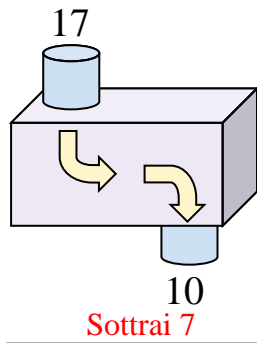
6)



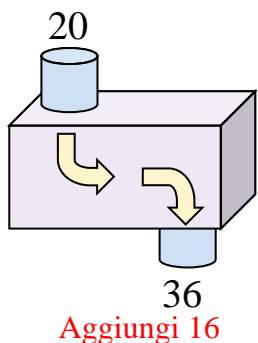
7)



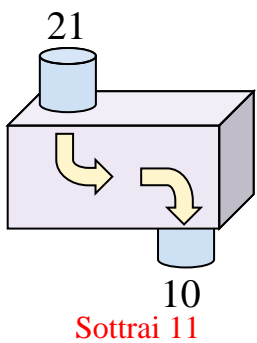
8)



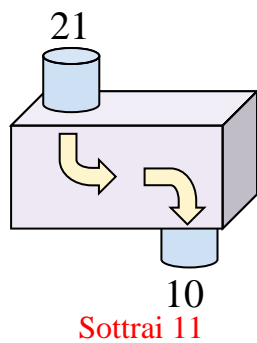
9)



10)



11)



Risposte

Es. **Aggiungi 12**

1. **Aggiungi 10**

2. **Sottrai 6**

3. **Sottrai 21**

4. **Sottrai 8**

5. **Aggiungi 14**

6. **Sottrai 9**

7. **Aggiungi 11**

8. **Sottrai 7**

9. **Aggiungi 16**

10. **Sottrai 11**

11. **Sottrai 11**