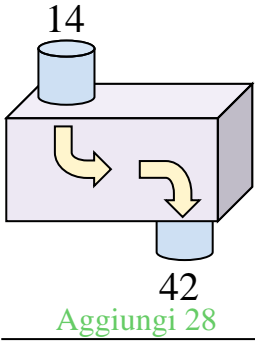




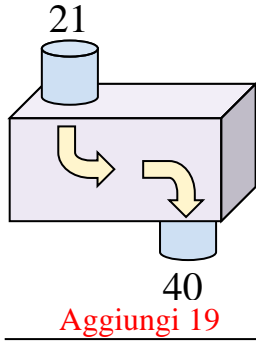


Determina quale regola viene usata nelle seguenti funzioni.

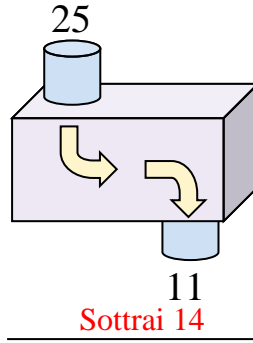
Es)



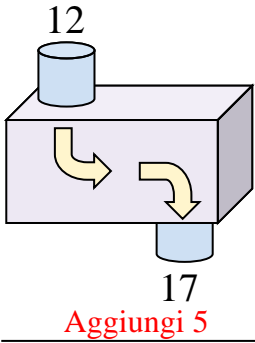
1)



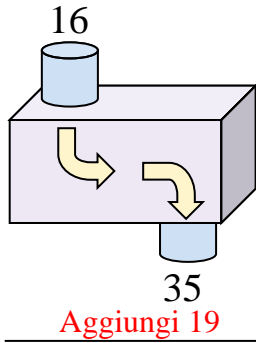
2)



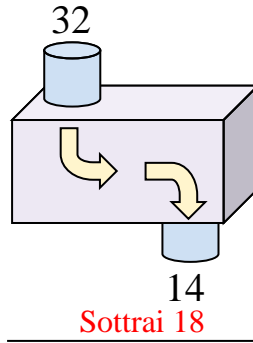
3)



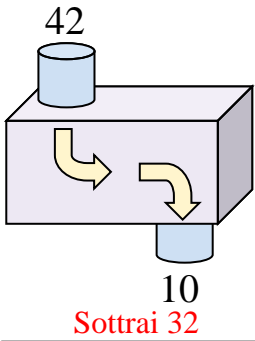
4)



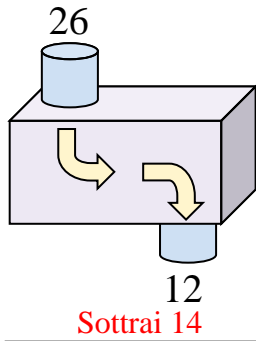
5)



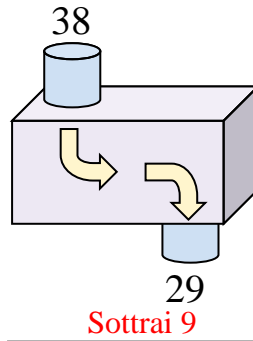
6)



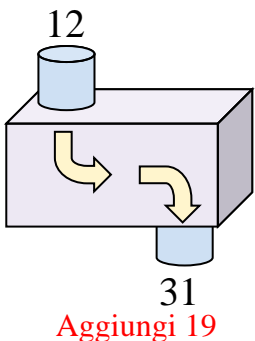
7)



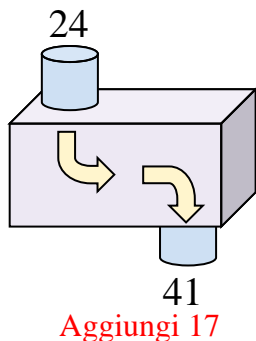
8)



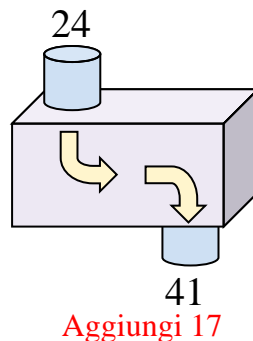
9)



10)



11)



**Risposte**

Es. **Aggiungi 28**

1. **Aggiungi 19**

2. **Sottrai 14**

3. **Aggiungi 5**

4. **Aggiungi 19**

5. **Sottrai 18**

6. **Sottrai 32**

7. **Sottrai 14**

8. **Sottrai 9**

9. **Aggiungi 19**

10. **Aggiungi 17**

11. **Aggiungi 17**