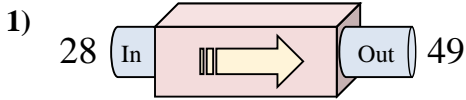
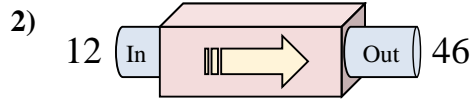




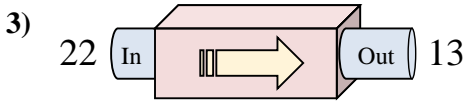
Determina quale regola viene usata nelle seguenti funzioni.



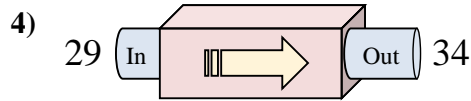
- A. Sottrai 26
- B. Aggiungi 23
- C. Sottrai 24
- D. Aggiungi 21



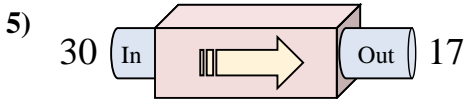
- A. Aggiungi 37
- B. Aggiungi 34
- C. Aggiungi 39
- D. Aggiungi 29



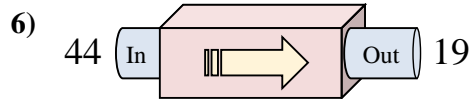
- A. Aggiungi 4
- B. Aggiungi 10
- C. Sottrai 9
- D. Sottrai 14



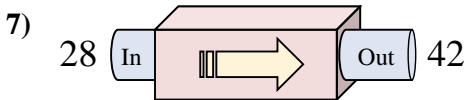
- A. Aggiungi 2
- B. Aggiungi 8
- C. Aggiungi 5
- D. Aggiungi 1



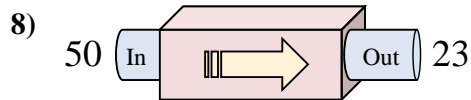
- A. Sottrai 9
- B. Sottrai 14
- C. Sottrai 13
- D. Aggiungi 9



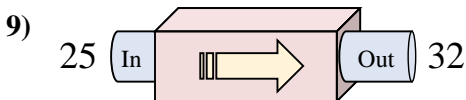
- A. Sottrai 25
- B. Sottrai 24
- C. Aggiungi 24
- D. Sottrai 26



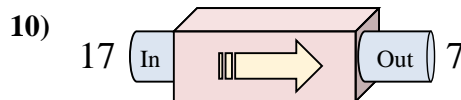
- A. Aggiungi 18
- B. Aggiungi 17
- C. Aggiungi 14
- D. Sottrai 9



- A. Sottrai 28
- B. Sottrai 22
- C. Sottrai 27
- D. Aggiungi 22



- A. Aggiungi 12
- B. Sottrai 11
- C. Aggiungi 7
- D. Aggiungi 2



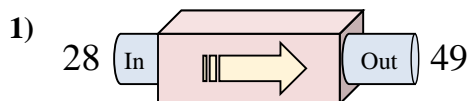
- A. Sottrai 11
- B. Sottrai 6
- C. Sottrai 10
- D. Sottrai 5

**Risposte**

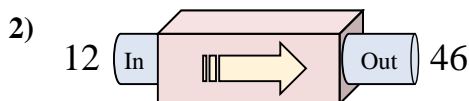
1. \_\_\_\_\_
2. \_\_\_\_\_
3. \_\_\_\_\_
4. \_\_\_\_\_
5. \_\_\_\_\_
6. \_\_\_\_\_
7. \_\_\_\_\_
8. \_\_\_\_\_
9. \_\_\_\_\_
10. \_\_\_\_\_



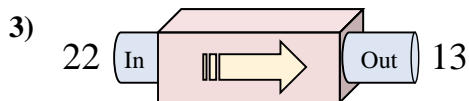
Determina quale regola viene usata nelle seguenti funzioni.



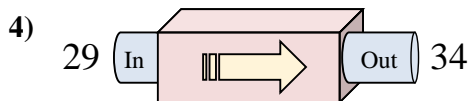
- A. Sottrai 26
- B. Aggiungi 23
- C. Sottrai 24
- D. Aggiungi 21



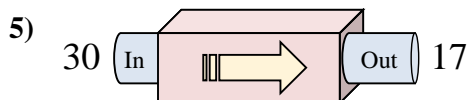
- A. Aggiungi 37
- B. Aggiungi 34
- C. Aggiungi 39
- D. Aggiungi 29



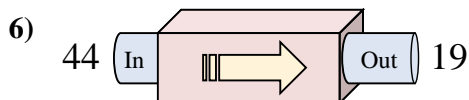
- A. Aggiungi 4
- B. Aggiungi 10
- C. Sottrai 9
- D. Sottrai 14



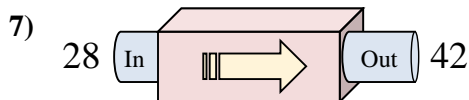
- A. Aggiungi 2
- B. Aggiungi 8
- C. Aggiungi 5
- D. Aggiungi 1



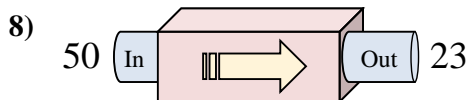
- A. Sottrai 9
- B. Sottrai 14
- C. Sottrai 13
- D. Aggiungi 9



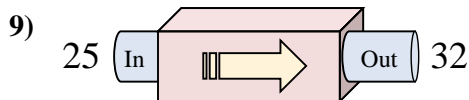
- A. Sottrai 25
- B. Sottrai 24
- C. Aggiungi 24
- D. Sottrai 26



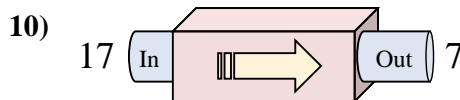
- A. Aggiungi 18
- B. Aggiungi 17
- C. Aggiungi 14
- D. Sottrai 9



- A. Sottrai 28
- B. Sottrai 22
- C. Sottrai 27
- D. Aggiungi 22



- A. Aggiungi 12
- B. Sottrai 11
- C. Aggiungi 7
- D. Aggiungi 2



- A. Sottrai 11
- B. Sottrai 6
- C. Sottrai 10
- D. Sottrai 5

**Risposte**

1. **D**

2. **B**

3. **C**

4. **C**

5. **C**

6. **A**

7. **C**

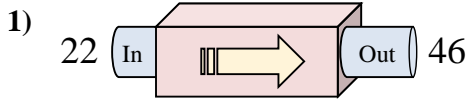
8. **C**

9. **C**

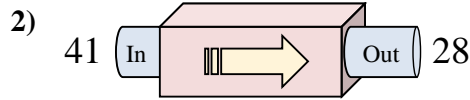
10. **C**



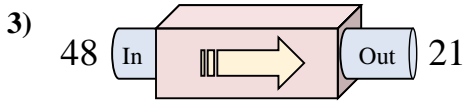
Determina quale regola viene usata nelle seguenti funzioni.



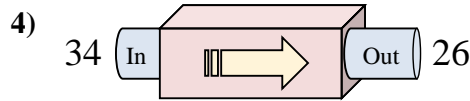
- A. Aggiungi 21
- B. Aggiungi 27
- C. Aggiungi 24
- D. Sottrai 24



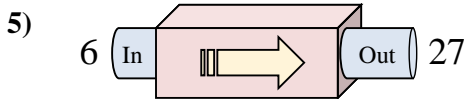
- A. Sottrai 11
- B. Aggiungi 11
- C. Sottrai 13
- D. Sottrai 16



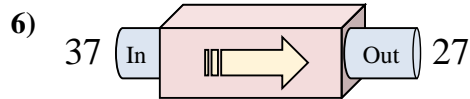
- A. Sottrai 27
- B. Aggiungi 23
- C. Sottrai 28
- D. Sottrai 23



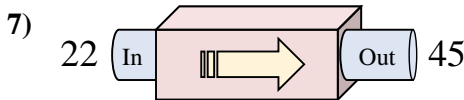
- A. Sottrai 13
- B. Sottrai 8
- C. Sottrai 6
- D. Sottrai 12



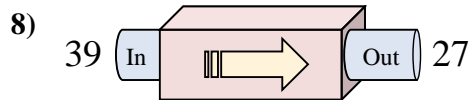
- A. Sottrai 25
- B. Aggiungi 21
- C. Aggiungi 18
- D. Aggiungi 26



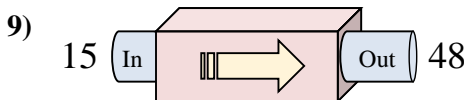
- A. Aggiungi 5
- B. Sottrai 10
- C. Sottrai 15
- D. Aggiungi 11



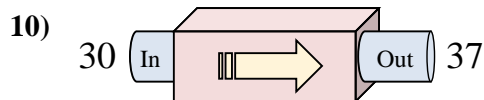
- A. Aggiungi 24
- B. Sottrai 24
- C. Sottrai 26
- D. Aggiungi 23



- A. Sottrai 11
- B. Aggiungi 8
- C. Sottrai 16
- D. Sottrai 12



- A. Aggiungi 33
- B. Sottrai 29
- C. Aggiungi 34
- D. Aggiungi 35



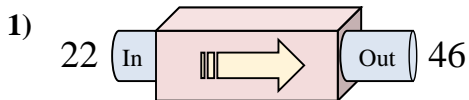
- A. Aggiungi 11
- B. Aggiungi 7
- C. Aggiungi 6
- D. Aggiungi 12

**Risposte**

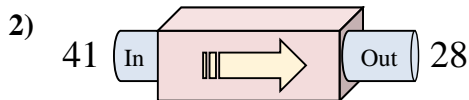
1. \_\_\_\_\_
2. \_\_\_\_\_
3. \_\_\_\_\_
4. \_\_\_\_\_
5. \_\_\_\_\_
6. \_\_\_\_\_
7. \_\_\_\_\_
8. \_\_\_\_\_
9. \_\_\_\_\_
10. \_\_\_\_\_



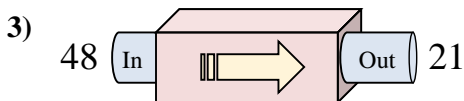
Determina quale regola viene usata nelle seguenti funzioni.



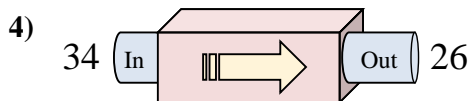
- A. Aggiungi 21
- B. Aggiungi 27
- C. Aggiungi 24
- D. Sottrai 24



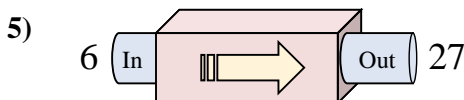
- A. Sottrai 11
- B. Aggiungi 11
- C. Sottrai 13
- D. Sottrai 16



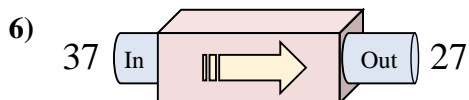
- A. Sottrai 27
- B. Aggiungi 23
- C. Sottrai 28
- D. Sottrai 23



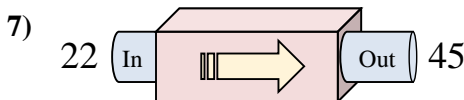
- A. Sottrai 13
- B. Sottrai 8
- C. Sottrai 6
- D. Sottrai 12



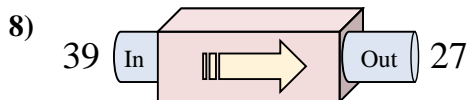
- A. Sottrai 25
- B. Aggiungi 21
- C. Aggiungi 18
- D. Aggiungi 26



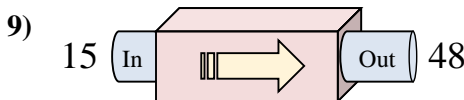
- A. Aggiungi 5
- B. Sottrai 10
- C. Sottrai 15
- D. Aggiungi 11



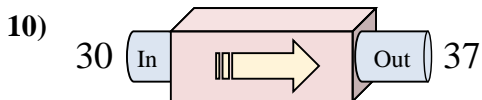
- A. Aggiungi 24
- B. Sottrai 24
- C. Sottrai 26
- D. Aggiungi 23



- A. Sottrai 11
- B. Aggiungi 8
- C. Sottrai 16
- D. Sottrai 12



- A. Aggiungi 33
- B. Sottrai 29
- C. Aggiungi 34
- D. Aggiungi 35



- A. Aggiungi 11
- B. Aggiungi 7
- C. Aggiungi 6
- D. Aggiungi 12

**Risposte**

1. **C**

2. **C**

3. **A**

4. **B**

5. **B**

6. **B**

7. **D**

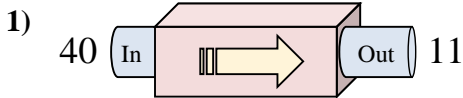
8. **D**

9. **A**

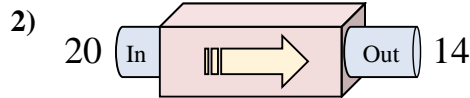
10. **B**



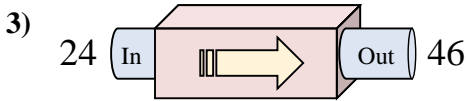
Determina quale regola viene usata nelle seguenti funzioni.



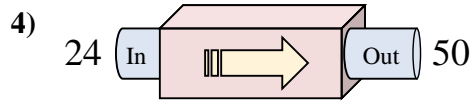
- A. Sottrai 27
- B. Sottrai 30
- C. Sottrai 28
- D. Sottrai 29



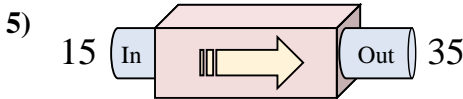
- A. Sottrai 6
- B. Sottrai 9
- C. Aggiungi 6
- D. Sottrai 10



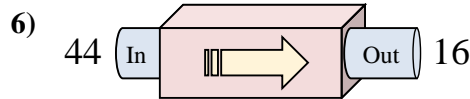
- A. Aggiungi 22
- B. Aggiungi 20
- C. Sottrai 21
- D. Aggiungi 24



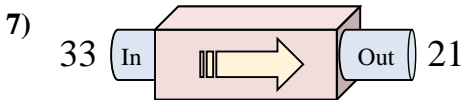
- A. Aggiungi 23
- B. Aggiungi 21
- C. Aggiungi 26
- D. Aggiungi 27



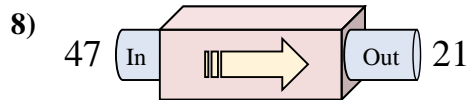
- A. Aggiungi 17
- B. Aggiungi 20
- C. Aggiungi 22
- D. Aggiungi 24



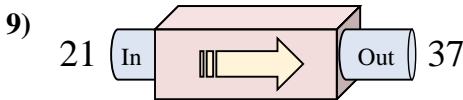
- A. Sottrai 33
- B. Sottrai 28
- C. Sottrai 30
- D. Sottrai 32



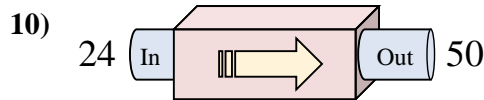
- A. Sottrai 14
- B. Sottrai 12
- C. Sottrai 9
- D. Sottrai 17



- A. Sottrai 28
- B. Sottrai 26
- C. Sottrai 23
- D. Sottrai 24



- A. Sottrai 18
- B. Aggiungi 19
- C. Aggiungi 14
- D. Aggiungi 16



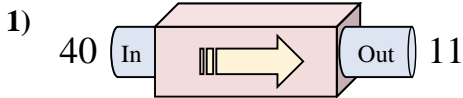
- A. Aggiungi 27
- B. Aggiungi 26
- C. Aggiungi 21
- D. Sottrai 21

**Risposte**

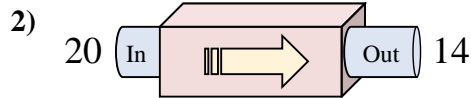
1. \_\_\_\_\_
2. \_\_\_\_\_
3. \_\_\_\_\_
4. \_\_\_\_\_
5. \_\_\_\_\_
6. \_\_\_\_\_
7. \_\_\_\_\_
8. \_\_\_\_\_
9. \_\_\_\_\_
10. \_\_\_\_\_



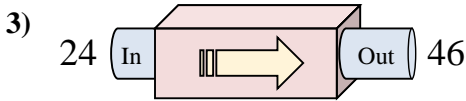
Determina quale regola viene usata nelle seguenti funzioni.



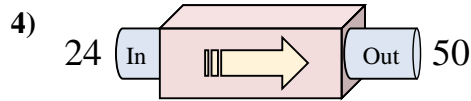
- A. Sottrai 27
- B. Sottrai 30
- C. Sottrai 28
- D. Sottrai 29



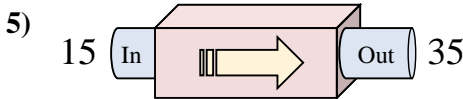
- A. Sottrai 6
- B. Sottrai 9
- C. Aggiungi 6
- D. Sottrai 10



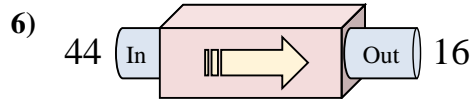
- A. Aggiungi 22
- B. Aggiungi 20
- C. Sottrai 21
- D. Aggiungi 24



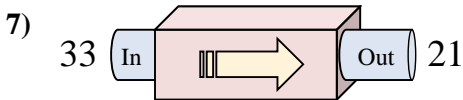
- A. Aggiungi 23
- B. Aggiungi 21
- C. Aggiungi 26
- D. Aggiungi 27



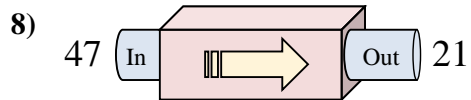
- A. Aggiungi 17
- B. Aggiungi 20
- C. Aggiungi 22
- D. Aggiungi 24



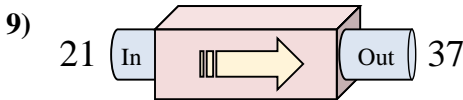
- A. Sottrai 33
- B. Sottrai 28
- C. Sottrai 30
- D. Sottrai 32



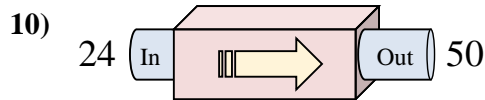
- A. Sottrai 14
- B. Sottrai 12
- C. Sottrai 9
- D. Sottrai 17



- A. Sottrai 28
- B. Sottrai 26
- C. Sottrai 23
- D. Sottrai 24



- A. Sottrai 18
- B. Aggiungi 19
- C. Aggiungi 14
- D. Aggiungi 16



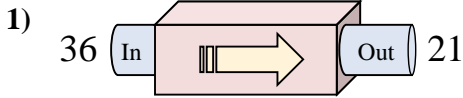
- A. Aggiungi 27
- B. Aggiungi 26
- C. Aggiungi 21
- D. Sottrai 21

**Risposte**

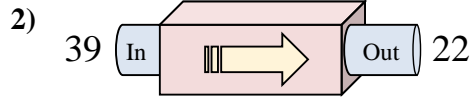
- 1. **D**
- 2. **A**
- 3. **A**
- 4. **C**
- 5. **B**
- 6. **B**
- 7. **B**
- 8. **B**
- 9. **D**
- 10. **B**



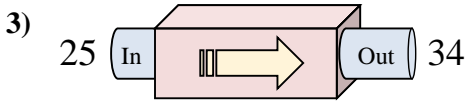
Determina quale regola viene usata nelle seguenti funzioni.



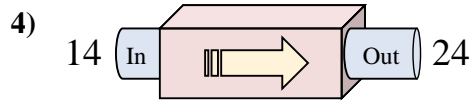
- A. Aggiungi 20
- B. Sottrai 15
- C. Sottrai 18
- D. Aggiungi 11



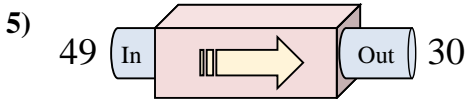
- A. Sottrai 17
- B. Sottrai 14
- C. Aggiungi 15
- D. Sottrai 13



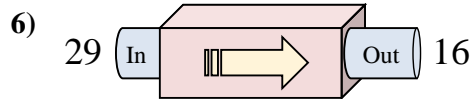
- A. Aggiungi 8
- B. Aggiungi 6
- C. Aggiungi 9
- D. Aggiungi 12



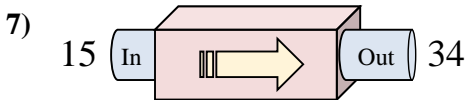
- A. Aggiungi 14
- B. Sottrai 9
- C. Sottrai 8
- D. Aggiungi 10



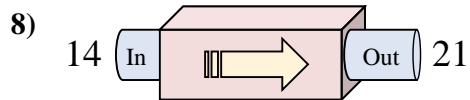
- A. Sottrai 14
- B. Aggiungi 16
- C. Sottrai 24
- D. Sottrai 19



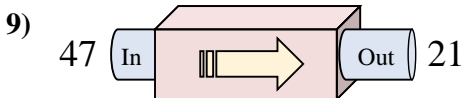
- A. Sottrai 15
- B. Sottrai 16
- C. Sottrai 13
- D. Aggiungi 12



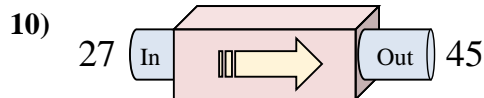
- A. Aggiungi 19
- B. Sottrai 22
- C. Sottrai 17
- D. Aggiungi 14



- A. Aggiungi 4
- B. Aggiungi 7
- C. Sottrai 12
- D. Aggiungi 9



- A. Aggiungi 28
- B. Aggiungi 27
- C. Sottrai 26
- D. Sottrai 29



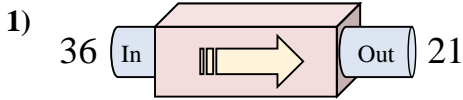
- A. Sottrai 23
- B. Aggiungi 19
- C. Aggiungi 18
- D. Aggiungi 21

**Risposte**

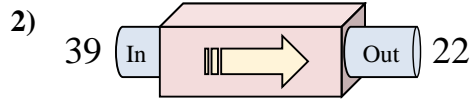
1. \_\_\_\_\_
2. \_\_\_\_\_
3. \_\_\_\_\_
4. \_\_\_\_\_
5. \_\_\_\_\_
6. \_\_\_\_\_
7. \_\_\_\_\_
8. \_\_\_\_\_
9. \_\_\_\_\_
10. \_\_\_\_\_



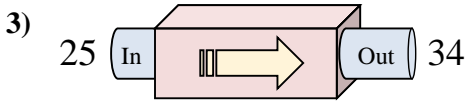
Determina quale regola viene usata nelle seguenti funzioni.



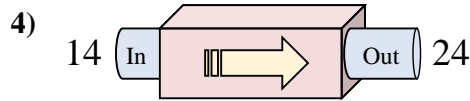
- A. Aggiungi 20
- B. Sottrai 15
- C. Sottrai 18
- D. Aggiungi 11



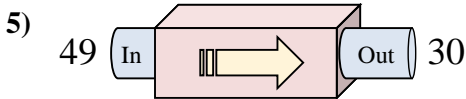
- A. Sottrai 17
- B. Sottrai 14
- C. Aggiungi 15
- D. Sottrai 13



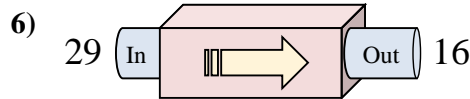
- A. Aggiungi 8
- B. Aggiungi 6
- C. Aggiungi 9
- D. Aggiungi 12



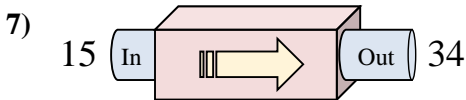
- A. Aggiungi 14
- B. Sottrai 9
- C. Sottrai 8
- D. Aggiungi 10



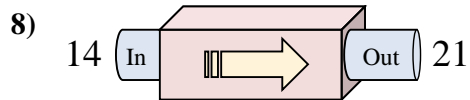
- A. Sottrai 14
- B. Aggiungi 16
- C. Sottrai 24
- D. Sottrai 19



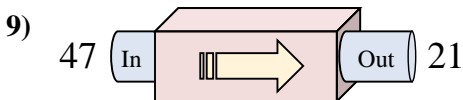
- A. Sottrai 15
- B. Sottrai 16
- C. Sottrai 13
- D. Aggiungi 12



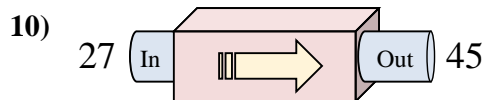
- A. Aggiungi 19
- B. Sottrai 22
- C. Sottrai 17
- D. Aggiungi 14



- A. Aggiungi 4
- B. Aggiungi 7
- C. Sottrai 12
- D. Aggiungi 9



- A. Aggiungi 28
- B. Aggiungi 27
- C. Sottrai 26
- D. Sottrai 29



- A. Sottrai 23
- B. Aggiungi 19
- C. Aggiungi 18
- D. Aggiungi 21

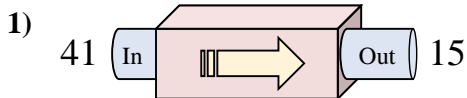
Risposte

- 1. **B**
- 2. **A**
- 3. **C**
- 4. **D**
- 5. **D**
- 6. **C**
- 7. **A**
- 8. **B**
- 9. **C**
- 10. **C**

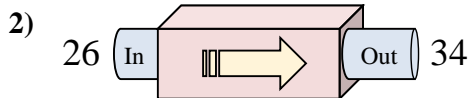




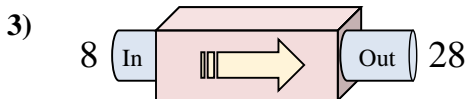
Determina quale regola viene usata nelle seguenti funzioni.



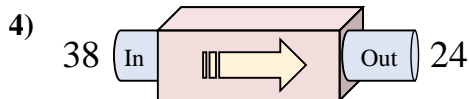
- A. Sottrai 26
- B. Aggiungi 31
- C. Aggiungi 22
- D. Sottrai 21



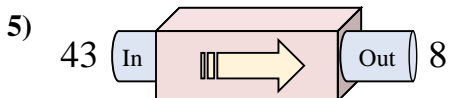
- A. Aggiungi 13
- B. Aggiungi 8
- C. Aggiungi 10
- D. Sottrai 8



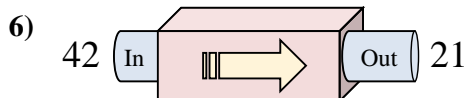
- A. Aggiungi 22
- B. Aggiungi 17
- C. Aggiungi 20
- D. Sottrai 25



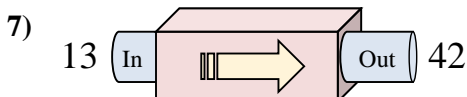
- A. Sottrai 15
- B. Sottrai 13
- C. Sottrai 14
- D. Sottrai 17



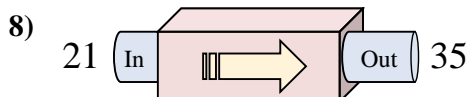
- A. Sottrai 30
- B. Aggiungi 38
- C. Sottrai 35
- D. Sottrai 37



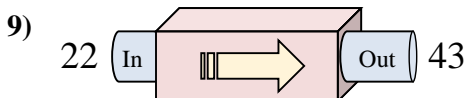
- A. Sottrai 22
- B. Aggiungi 25
- C. Sottrai 16
- D. Sottrai 21



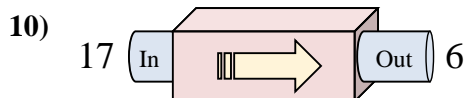
- A. Sottrai 26
- B. Aggiungi 32
- C. Aggiungi 24
- D. Aggiungi 29



- A. Aggiungi 14
- B. Sottrai 12
- C. Aggiungi 10
- D. Sottrai 17



- A. Aggiungi 20
- B. Aggiungi 26
- C. Aggiungi 24
- D. Aggiungi 21



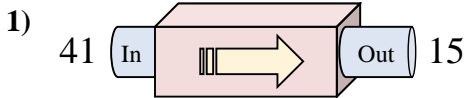
- A. Sottrai 11
- B. Sottrai 16
- C. Aggiungi 10
- D. Aggiungi 9

**Risposte**

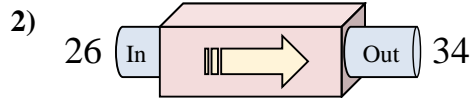
1. \_\_\_\_\_
2. \_\_\_\_\_
3. \_\_\_\_\_
4. \_\_\_\_\_
5. \_\_\_\_\_
6. \_\_\_\_\_
7. \_\_\_\_\_
8. \_\_\_\_\_
9. \_\_\_\_\_
10. \_\_\_\_\_



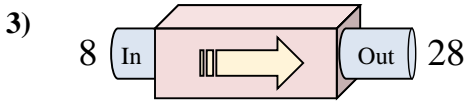
Determina quale regola viene usata nelle seguenti funzioni.



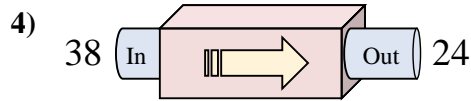
- A. Sottrai 26
- B. Aggiungi 31
- C. Aggiungi 22
- D. Sottrai 21



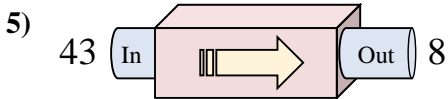
- A. Aggiungi 13
- B. Aggiungi 8
- C. Aggiungi 10
- D. Sottrai 8



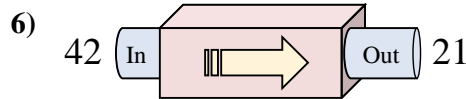
- A. Aggiungi 22
- B. Aggiungi 17
- C. Aggiungi 20
- D. Sottrai 25



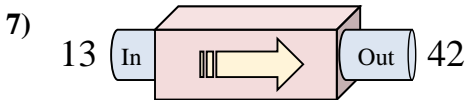
- A. Sottrai 15
- B. Sottrai 13
- C. Sottrai 14
- D. Sottrai 17



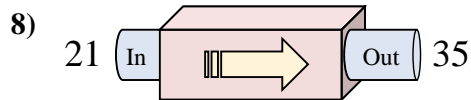
- A. Sottrai 30
- B. Aggiungi 38
- C. Sottrai 35
- D. Sottrai 37



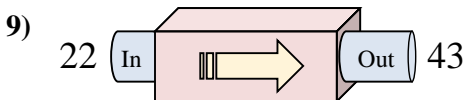
- A. Sottrai 22
- B. Aggiungi 25
- C. Sottrai 16
- D. Sottrai 21



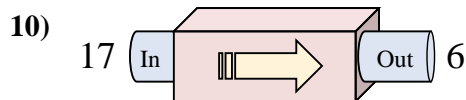
- A. Sottrai 26
- B. Aggiungi 32
- C. Aggiungi 24
- D. Aggiungi 29



- A. Aggiungi 14
- B. Sottrai 12
- C. Aggiungi 10
- D. Sottrai 17



- A. Aggiungi 20
- B. Aggiungi 26
- C. Aggiungi 24
- D. Aggiungi 21



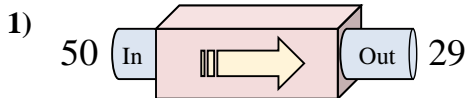
- A. Sottrai 11
- B. Sottrai 16
- C. Aggiungi 10
- D. Aggiungi 9

**Risposte**

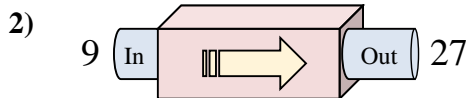
- 1.     **A**
- 2.     **B**
- 3.     **C**
- 4.     **C**
- 5.     **C**
- 6.     **D**
- 7.     **D**
- 8.     **A**
- 9.     **D**
- 10.     **A**



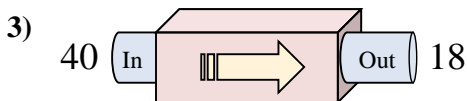
Determina quale regola viene usata nelle seguenti funzioni.



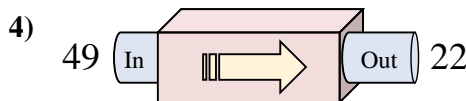
- A. Sottrai 22
- B. Sottrai 21
- C. Sottrai 18
- D. Aggiungi 22



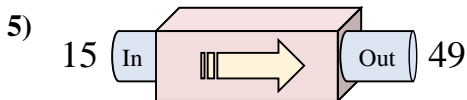
- A. Aggiungi 18
- B. Aggiungi 13
- C. Aggiungi 19
- D. Sottrai 21



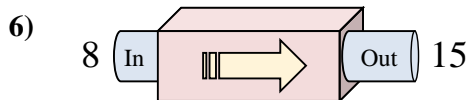
- A. Sottrai 26
- B. Sottrai 22
- C. Aggiungi 27
- D. Sottrai 18



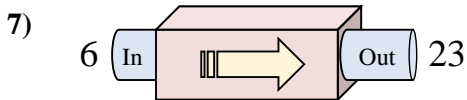
- A. Aggiungi 31
- B. Sottrai 24
- C. Aggiungi 22
- D. Sottrai 27



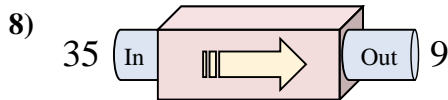
- A. Sottrai 35
- B. Aggiungi 39
- C. Aggiungi 34
- D. Aggiungi 38



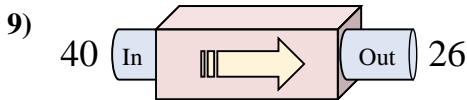
- A. Sottrai 6
- B. Aggiungi 7
- C. Aggiungi 5
- D. Aggiungi 8



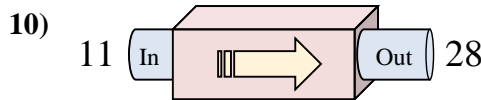
- A. Aggiungi 13
- B. Aggiungi 21
- C. Aggiungi 19
- D. Aggiungi 17



- A. Sottrai 29
- B. Sottrai 26
- C. Aggiungi 25
- D. Sottrai 28



- A. Sottrai 10
- B. Aggiungi 13
- C. Sottrai 18
- D. Sottrai 14



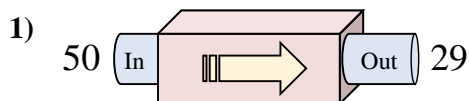
- A. Aggiungi 17
- B. Aggiungi 19
- C. Sottrai 20
- D. Aggiungi 20

**Risposte**

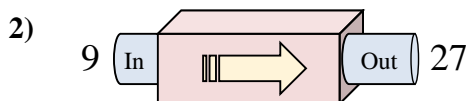
1. \_\_\_\_\_
2. \_\_\_\_\_
3. \_\_\_\_\_
4. \_\_\_\_\_
5. \_\_\_\_\_
6. \_\_\_\_\_
7. \_\_\_\_\_
8. \_\_\_\_\_
9. \_\_\_\_\_
10. \_\_\_\_\_



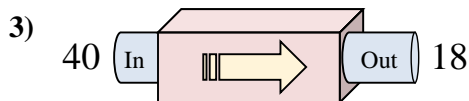
Determina quale regola viene usata nelle seguenti funzioni.



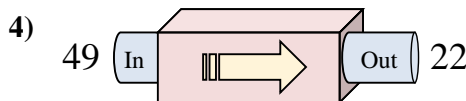
- A. Sottrai 22
- B. Sottrai 21
- C. Sottrai 18
- D. Aggiungi 22



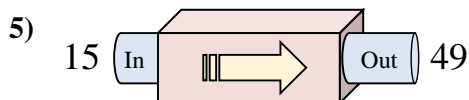
- A. Aggiungi 18
- B. Aggiungi 13
- C. Aggiungi 19
- D. Sottrai 21



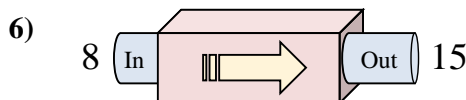
- A. Sottrai 26
- B. Sottrai 22
- C. Aggiungi 27
- D. Sottrai 18



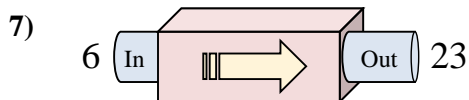
- A. Aggiungi 31
- B. Sottrai 24
- C. Aggiungi 22
- D. Sottrai 27



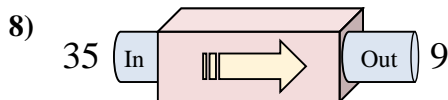
- A. Sottrai 35
- B. Aggiungi 39
- C. Aggiungi 34
- D. Aggiungi 38



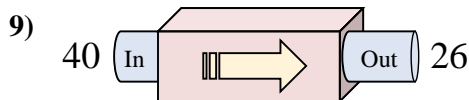
- A. Sottrai 6
- B. Aggiungi 7
- C. Aggiungi 5
- D. Aggiungi 8



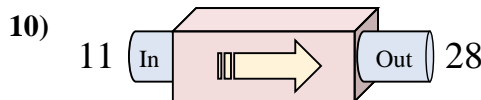
- A. Aggiungi 13
- B. Aggiungi 21
- C. Aggiungi 19
- D. Aggiungi 17



- A. Sottrai 29
- B. Sottrai 26
- C. Aggiungi 25
- D. Sottrai 28



- A. Sottrai 10
- B. Aggiungi 13
- C. Sottrai 18
- D. Sottrai 14



- A. Aggiungi 17
- B. Aggiungi 19
- C. Sottrai 20
- D. Aggiungi 20

Risposte

1.     **B**    

2.     **A**    

3.     **B**    

4.     **D**    

5.     **C**    

6.     **B**    

7.     **D**    

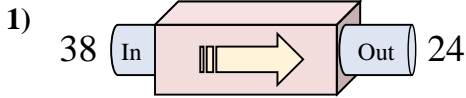
8.     **B**    

9.     **D**    

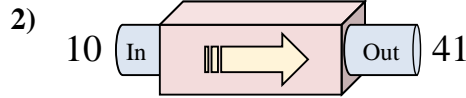
10.     **A**



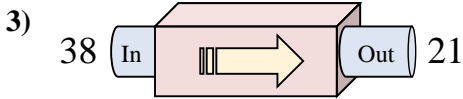
Determina quale regola viene usata nelle seguenti funzioni.



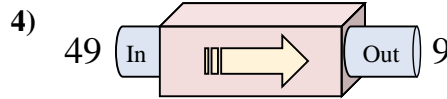
- A. Aggiungi 10
- B. Sottrai 17
- C. Aggiungi 13
- D. Sottrai 14



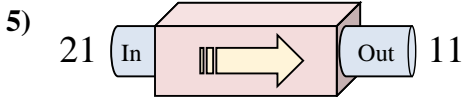
- A. Aggiungi 31
- B. Aggiungi 33
- C. Sottrai 36
- D. Sottrai 34



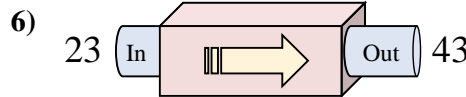
- A. Aggiungi 19
- B. Sottrai 21
- C. Sottrai 17
- D. Sottrai 18



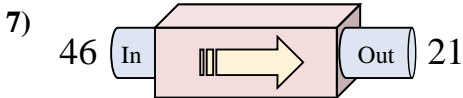
- A. Sottrai 45
- B. Sottrai 42
- C. Sottrai 43
- D. Sottrai 40



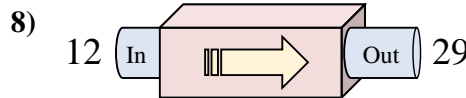
- A. Aggiungi 11
- B. Aggiungi 12
- C. Sottrai 10
- D. Sottrai 8



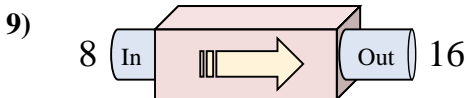
- A. Aggiungi 20
- B. Aggiungi 16
- C. Aggiungi 23
- D. Sottrai 18



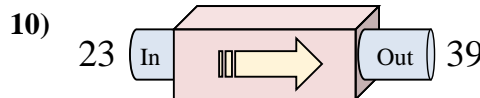
- A. Aggiungi 20
- B. Sottrai 21
- C. Sottrai 25
- D. Aggiungi 28



- A. Sottrai 22
- B. Aggiungi 16
- C. Aggiungi 13
- D. Aggiungi 17



- A. Aggiungi 8
- B. Aggiungi 6
- C. Aggiungi 13
- D. Aggiungi 10



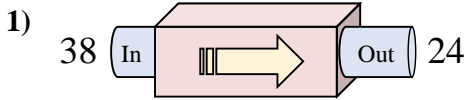
- A. Aggiungi 12
- B. Aggiungi 19
- C. Aggiungi 16
- D. Sottrai 17

**Risposte**

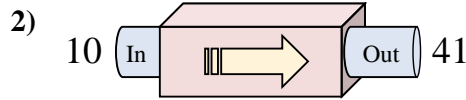
1. \_\_\_\_\_
2. \_\_\_\_\_
3. \_\_\_\_\_
4. \_\_\_\_\_
5. \_\_\_\_\_
6. \_\_\_\_\_
7. \_\_\_\_\_
8. \_\_\_\_\_
9. \_\_\_\_\_
10. \_\_\_\_\_



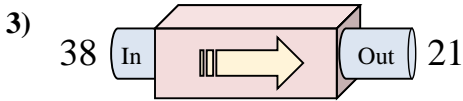
Determina quale regola viene usata nelle seguenti funzioni.



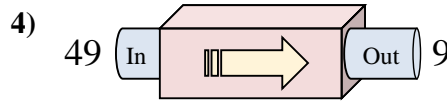
- A. Aggiungi 10
- B. Sottrai 17
- C. Aggiungi 13
- D. Sottrai 14



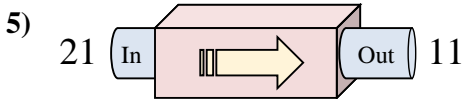
- A. Aggiungi 31
- B. Aggiungi 33
- C. Sottrai 36
- D. Sottrai 34



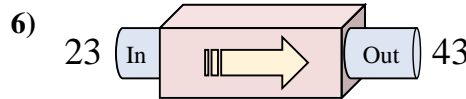
- A. Aggiungi 19
- B. Sottrai 21
- C. Sottrai 17
- D. Sottrai 18



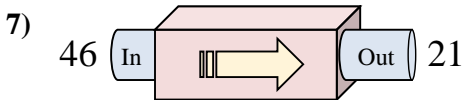
- A. Sottrai 45
- B. Sottrai 42
- C. Sottrai 43
- D. Sottrai 40



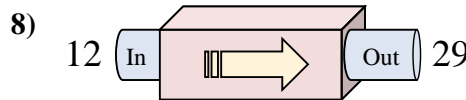
- A. Aggiungi 11
- B. Aggiungi 12
- C. Sottrai 10
- D. Sottrai 8



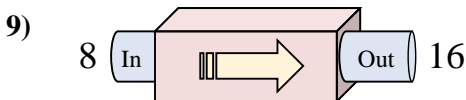
- A. Aggiungi 20
- B. Aggiungi 16
- C. Aggiungi 23
- D. Sottrai 18



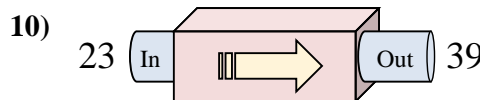
- A. Aggiungi 20
- B. Sottrai 21
- C. Sottrai 25
- D. Aggiungi 28



- A. Sottrai 22
- B. Aggiungi 16
- C. Aggiungi 13
- D. Aggiungi 17



- A. Aggiungi 8
- B. Aggiungi 6
- C. Aggiungi 13
- D. Aggiungi 10



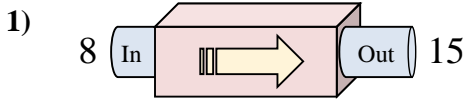
- A. Aggiungi 12
- B. Aggiungi 19
- C. Aggiungi 16
- D. Sottrai 17

**Risposte**

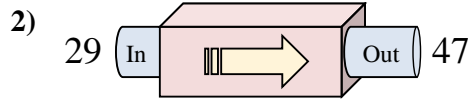
- 1. **D**
- 2. **A**
- 3. **C**
- 4. **D**
- 5. **C**
- 6. **A**
- 7. **C**
- 8. **D**
- 9. **A**
- 10. **C**



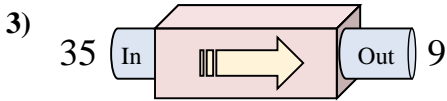
Determina quale regola viene usata nelle seguenti funzioni.



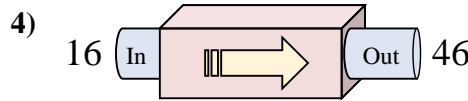
- A. Aggiungi 7
- B. Aggiungi 9
- C. Sottrai 3
- D. Sottrai 2



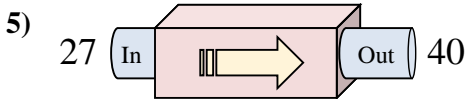
- A. Aggiungi 18
- B. Sottrai 22
- C. Aggiungi 15
- D. Sottrai 18



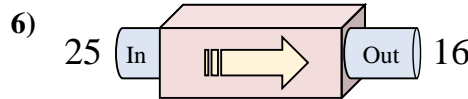
- A. Aggiungi 23
- B. Aggiungi 28
- C. Sottrai 25
- D. Sottrai 26



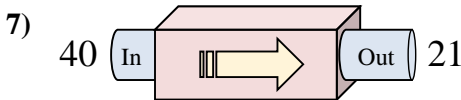
- A. Aggiungi 34
- B. Sottrai 27
- C. Aggiungi 35
- D. Aggiungi 30



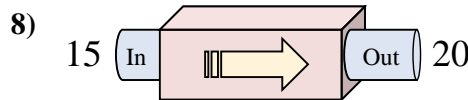
- A. Aggiungi 13
- B. Sottrai 10
- C. Aggiungi 17
- D. Sottrai 14



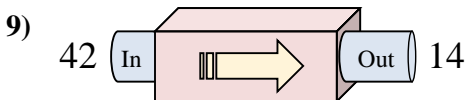
- A. Sottrai 7
- B. Aggiungi 11
- C. Sottrai 9
- D. Aggiungi 4



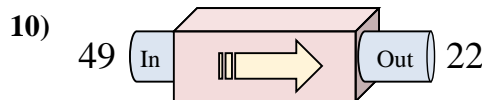
- A. Aggiungi 19
- B. Sottrai 21
- C. Sottrai 19
- D. Aggiungi 21



- A. Aggiungi 2
- B. Aggiungi 8
- C. Aggiungi 5
- D. Aggiungi 6



- A. Aggiungi 33
- B. Aggiungi 32
- C. Sottrai 31
- D. Sottrai 28



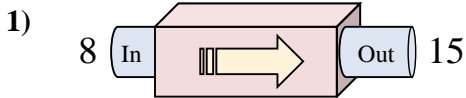
- A. Sottrai 29
- B. Aggiungi 23
- C. Sottrai 27
- D. Sottrai 28

**Risposte**

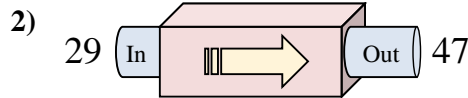
1. \_\_\_\_\_
2. \_\_\_\_\_
3. \_\_\_\_\_
4. \_\_\_\_\_
5. \_\_\_\_\_
6. \_\_\_\_\_
7. \_\_\_\_\_
8. \_\_\_\_\_
9. \_\_\_\_\_
10. \_\_\_\_\_



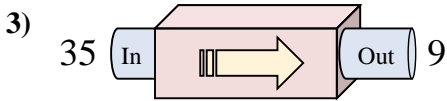
Determina quale regola viene usata nelle seguenti funzioni.



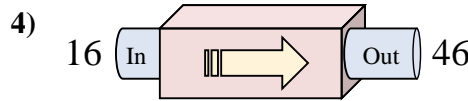
- A. Aggiungi 7
- B. Aggiungi 9
- C. Sottrai 3
- D. Sottrai 2



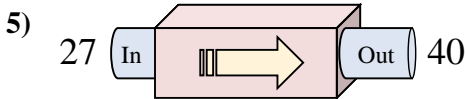
- A. Aggiungi 18
- B. Sottrai 22
- C. Aggiungi 15
- D. Sottrai 18



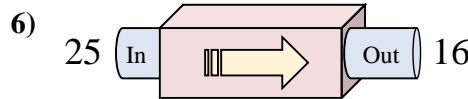
- A. Aggiungi 23
- B. Aggiungi 28
- C. Sottrai 25
- D. Sottrai 26



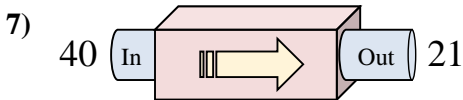
- A. Aggiungi 34
- B. Sottrai 27
- C. Aggiungi 35
- D. Aggiungi 30



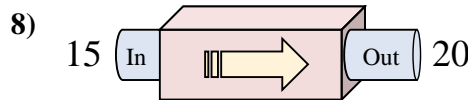
- A. Aggiungi 13
- B. Sottrai 10
- C. Aggiungi 17
- D. Sottrai 14



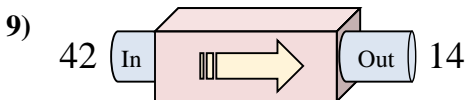
- A. Sottrai 7
- B. Aggiungi 11
- C. Sottrai 9
- D. Aggiungi 4



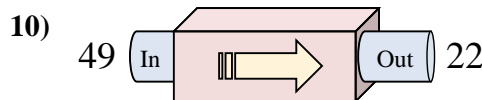
- A. Aggiungi 19
- B. Sottrai 21
- C. Sottrai 19
- D. Aggiungi 21



- A. Aggiungi 2
- B. Aggiungi 8
- C. Aggiungi 5
- D. Aggiungi 6



- A. Aggiungi 33
- B. Aggiungi 32
- C. Sottrai 31
- D. Sottrai 28



- A. Sottrai 29
- B. Aggiungi 23
- C. Sottrai 27
- D. Sottrai 28

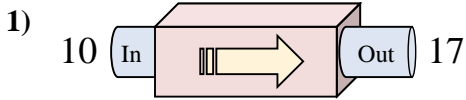
**Risposte**

- 1.     **A**
- 2.     **A**
- 3.     **D**
- 4.     **D**
- 5.     **A**
- 6.     **C**
- 7.     **C**
- 8.     **C**
- 9.     **D**
- 10.     **C**

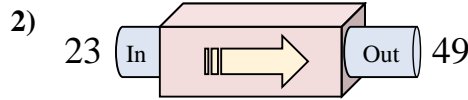




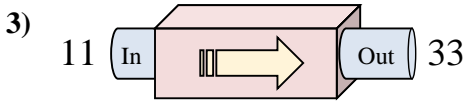
Determina quale regola viene usata nelle seguenti funzioni.



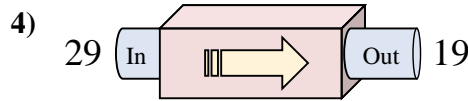
- A. Aggiungi 7
- B. Sottrai 4
- C. Sottrai 11
- D. Aggiungi 10



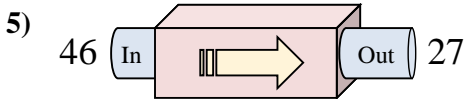
- A. Aggiungi 25
- B. Aggiungi 26
- C. Aggiungi 27
- D. Sottrai 29



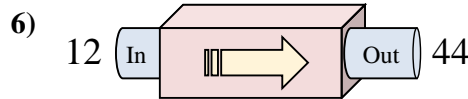
- A. Aggiungi 18
- B. Sottrai 23
- C. Aggiungi 22
- D. Aggiungi 23



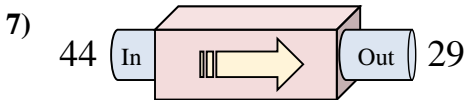
- A. Sottrai 12
- B. Sottrai 10
- C. Sottrai 5
- D. Aggiungi 6



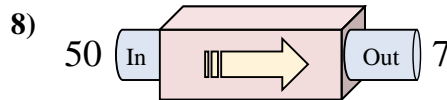
- A. Sottrai 21
- B. Sottrai 19
- C. Aggiungi 14
- D. Sottrai 23



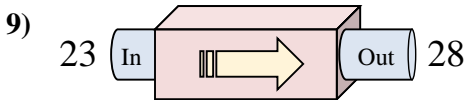
- A. Aggiungi 32
- B. Sottrai 29
- C. Aggiungi 28
- D. Aggiungi 33



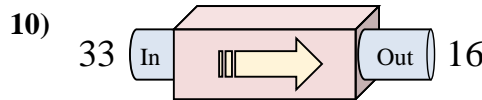
- A. Aggiungi 15
- B. Sottrai 10
- C. Sottrai 16
- D. Sottrai 15



- A. Sottrai 43
- B. Sottrai 44
- C. Aggiungi 46
- D. Sottrai 47



- A. Aggiungi 5
- B. Aggiungi 9
- C. Sottrai 10
- D. Aggiungi 6



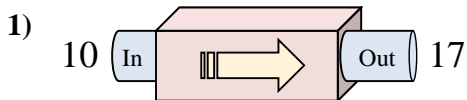
- A. Sottrai 12
- B. Aggiungi 15
- C. Sottrai 15
- D. Sottrai 17

**Risposte**

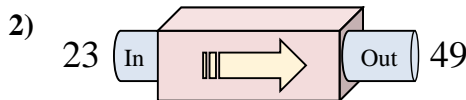
1. \_\_\_\_\_
2. \_\_\_\_\_
3. \_\_\_\_\_
4. \_\_\_\_\_
5. \_\_\_\_\_
6. \_\_\_\_\_
7. \_\_\_\_\_
8. \_\_\_\_\_
9. \_\_\_\_\_
10. \_\_\_\_\_



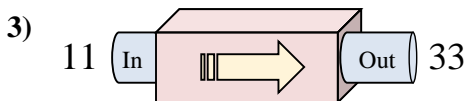
Determina quale regola viene usata nelle seguenti funzioni.



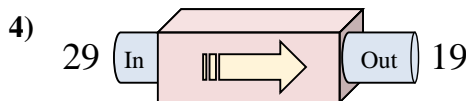
- A. Aggiungi 7
- B. Sottrai 4
- C. Sottrai 11
- D. Aggiungi 10



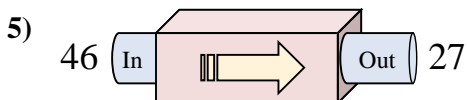
- A. Aggiungi 25
- B. Aggiungi 26
- C. Aggiungi 27
- D. Sottrai 29



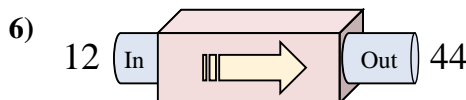
- A. Aggiungi 18
- B. Sottrai 23
- C. Aggiungi 22
- D. Aggiungi 23



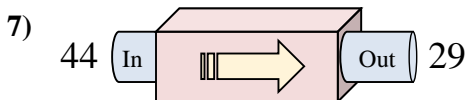
- A. Sottrai 12
- B. Sottrai 10
- C. Sottrai 5
- D. Aggiungi 6



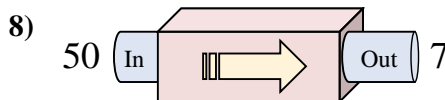
- A. Sottrai 21
- B. Sottrai 19
- C. Aggiungi 14
- D. Sottrai 23



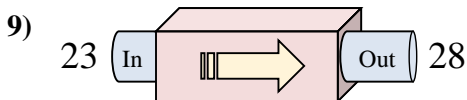
- A. Aggiungi 32
- B. Sottrai 29
- C. Aggiungi 28
- D. Aggiungi 33



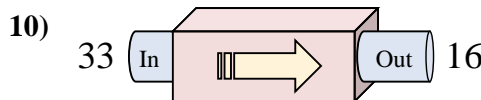
- A. Aggiungi 15
- B. Sottrai 10
- C. Sottrai 16
- D. Sottrai 15



- A. Sottrai 43
- B. Sottrai 44
- C. Aggiungi 46
- D. Sottrai 47



- A. Aggiungi 5
- B. Aggiungi 9
- C. Sottrai 10
- D. Aggiungi 6



- A. Sottrai 12
- B. Aggiungi 15
- C. Sottrai 15
- D. Sottrai 17

Risposte

1. **A**

2. **B**

3. **C**

4. **B**

5. **B**

6. **A**

7. **D**

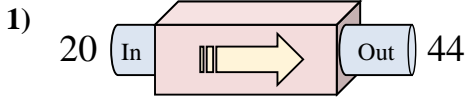
8. **A**

9. **A**

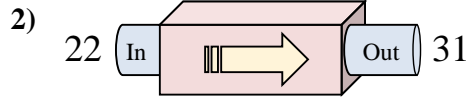
10. **D**



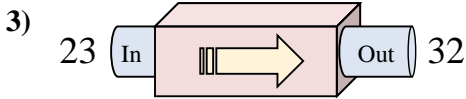
Determina quale regola viene usata nelle seguenti funzioni.



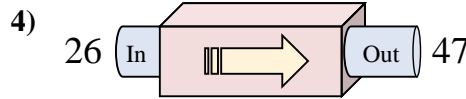
- A. Sottrai 28
- B. Aggiungi 24
- C. Sottrai 24
- D. Aggiungi 20



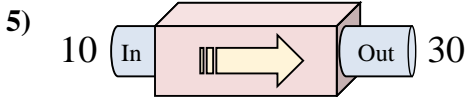
- A. Aggiungi 7
- B. Aggiungi 9
- C. Aggiungi 13
- D. Aggiungi 12



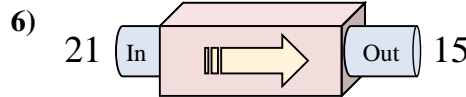
- A. Aggiungi 11
- B. Sottrai 10
- C. Aggiungi 9
- D. Aggiungi 6



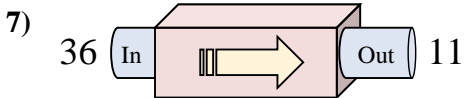
- A. Aggiungi 21
- B. Aggiungi 16
- C. Aggiungi 24
- D. Sottrai 24



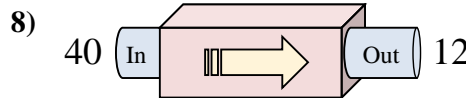
- A. Aggiungi 24
- B. Sottrai 24
- C. Sottrai 16
- D. Aggiungi 20



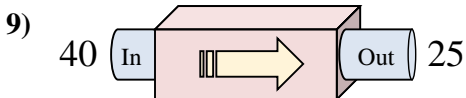
- A. Aggiungi 1
- B. Sottrai 6
- C. Sottrai 5
- D. Aggiungi 6



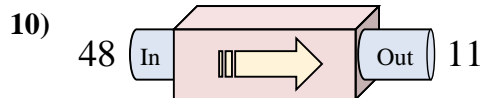
- A. Sottrai 29
- B. Sottrai 27
- C. Sottrai 25
- D. Sottrai 28



- A. Sottrai 32
- B. Sottrai 25
- C. Aggiungi 23
- D. Sottrai 28



- A. Sottrai 15
- B. Sottrai 14
- C. Sottrai 17
- D. Aggiungi 10



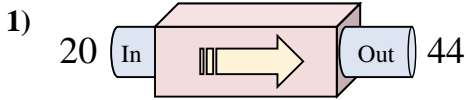
- A. Aggiungi 39
- B. Sottrai 42
- C. Aggiungi 41
- D. Sottrai 37

**Risposte**

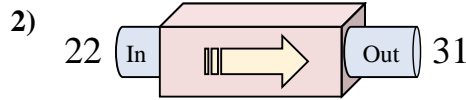
1. \_\_\_\_\_
2. \_\_\_\_\_
3. \_\_\_\_\_
4. \_\_\_\_\_
5. \_\_\_\_\_
6. \_\_\_\_\_
7. \_\_\_\_\_
8. \_\_\_\_\_
9. \_\_\_\_\_
10. \_\_\_\_\_



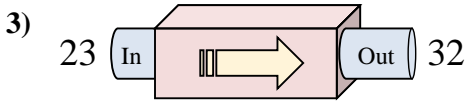
Determina quale regola viene usata nelle seguenti funzioni.



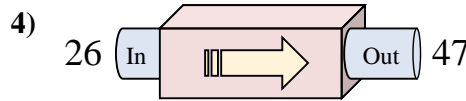
- A. Sottrai 28
- B. Aggiungi 24
- C. Sottrai 24
- D. Aggiungi 20



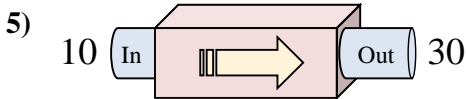
- A. Aggiungi 7
- B. Aggiungi 9
- C. Aggiungi 13
- D. Aggiungi 12



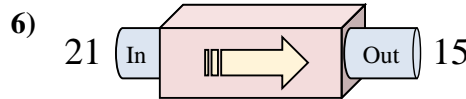
- A. Aggiungi 11
- B. Sottrai 10
- C. Aggiungi 9
- D. Aggiungi 6



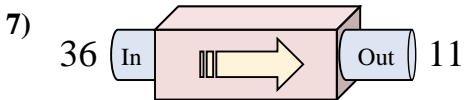
- A. Aggiungi 21
- B. Aggiungi 16
- C. Aggiungi 24
- D. Sottrai 24



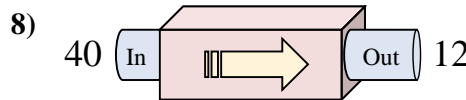
- A. Aggiungi 24
- B. Sottrai 24
- C. Sottrai 16
- D. Aggiungi 20



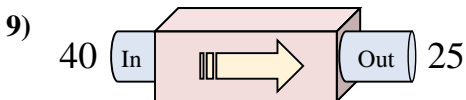
- A. Aggiungi 1
- B. Sottrai 6
- C. Sottrai 5
- D. Aggiungi 6



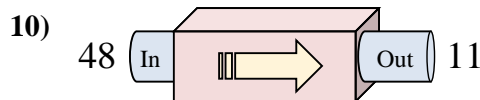
- A. Sottrai 29
- B. Sottrai 27
- C. Sottrai 25
- D. Sottrai 28



- A. Sottrai 32
- B. Sottrai 25
- C. Aggiungi 23
- D. Sottrai 28



- A. Sottrai 15
- B. Sottrai 14
- C. Sottrai 17
- D. Aggiungi 10



- A. Aggiungi 39
- B. Sottrai 42
- C. Aggiungi 41
- D. Sottrai 37

Risposte

- 1. **B**
- 2. **B**
- 3. **C**
- 4. **A**
- 5. **D**
- 6. **B**
- 7. **C**
- 8. **D**
- 9. **A**
- 10. **D**