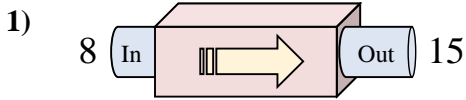
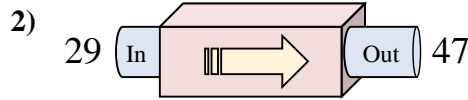




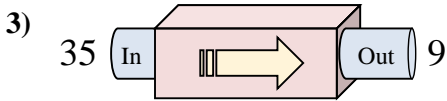
Determina quale regola viene usata nelle seguenti funzioni.



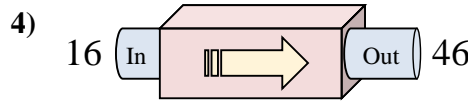
- A. Aggiungi 7
- B. Aggiungi 9
- C. Sottrai 3
- D. Sottrai 2



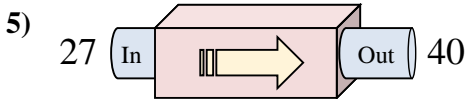
- A. Aggiungi 18
- B. Sottrai 22
- C. Aggiungi 15
- D. Sottrai 18



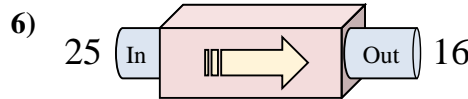
- A. Aggiungi 23
- B. Aggiungi 28
- C. Sottrai 25
- D. Sottrai 26



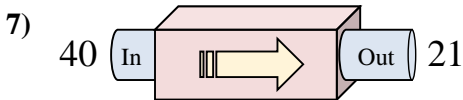
- A. Aggiungi 34
- B. Sottrai 27
- C. Aggiungi 35
- D. Aggiungi 30



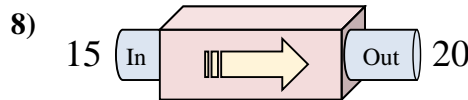
- A. Aggiungi 13
- B. Sottrai 10
- C. Aggiungi 17
- D. Sottrai 14



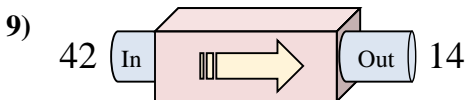
- A. Sottrai 7
- B. Aggiungi 11
- C. Sottrai 9
- D. Aggiungi 4



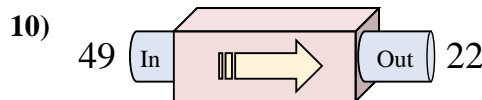
- A. Aggiungi 19
- B. Sottrai 21
- C. Sottrai 19
- D. Aggiungi 21



- A. Aggiungi 2
- B. Aggiungi 8
- C. Aggiungi 5
- D. Aggiungi 6



- A. Aggiungi 33
- B. Aggiungi 32
- C. Sottrai 31
- D. Sottrai 28



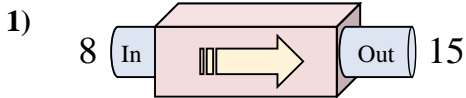
- A. Sottrai 29
- B. Aggiungi 23
- C. Sottrai 27
- D. Sottrai 28

Risposte

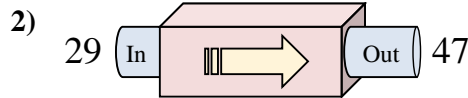
- 1. _____
- 2. _____
- 3. _____
- 4. _____
- 5. _____
- 6. _____
- 7. _____
- 8. _____
- 9. _____
- 10. _____



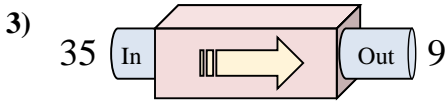
Determina quale regola viene usata nelle seguenti funzioni.



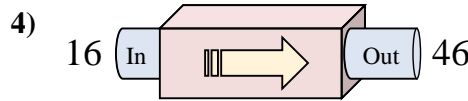
- A. Aggiungi 7
- B. Aggiungi 9
- C. Sottrai 3
- D. Sottrai 2



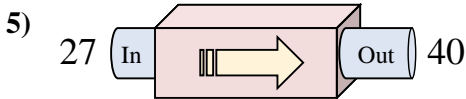
- A. Aggiungi 18
- B. Sottrai 22
- C. Aggiungi 15
- D. Sottrai 18



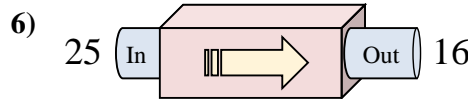
- A. Aggiungi 23
- B. Aggiungi 28
- C. Sottrai 25
- D. Sottrai 26



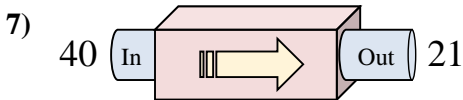
- A. Aggiungi 34
- B. Sottrai 27
- C. Aggiungi 35
- D. Aggiungi 30



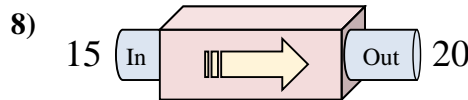
- A. Aggiungi 13
- B. Sottrai 10
- C. Aggiungi 17
- D. Sottrai 14



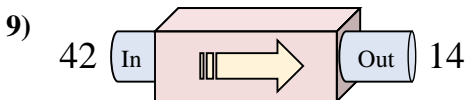
- A. Sottrai 7
- B. Aggiungi 11
- C. Sottrai 9
- D. Aggiungi 4



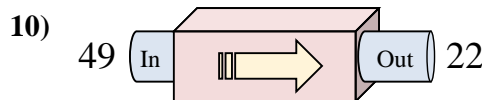
- A. Aggiungi 19
- B. Sottrai 21
- C. Sottrai 19
- D. Aggiungi 21



- A. Aggiungi 2
- B. Aggiungi 8
- C. Aggiungi 5
- D. Aggiungi 6



- A. Aggiungi 33
- B. Aggiungi 32
- C. Sottrai 31
- D. Sottrai 28



- A. Sottrai 29
- B. Aggiungi 23
- C. Sottrai 27
- D. Sottrai 28

Risposte

- 1. **A**
- 2. **A**
- 3. **D**
- 4. **D**
- 5. **A**
- 6. **C**
- 7. **C**
- 8. **C**
- 9. **D**
- 10. **C**