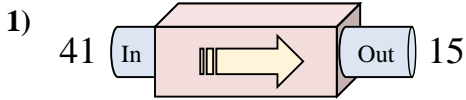
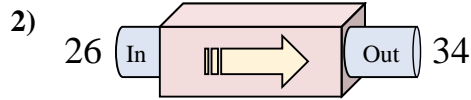




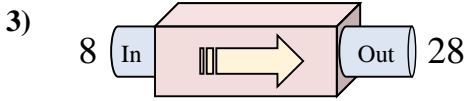
Determina quale regola viene usata nelle seguenti funzioni.



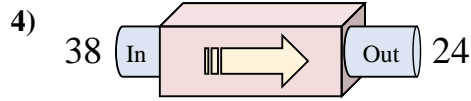
- A. Sottrai 26
- B. Aggiungi 31
- C. Aggiungi 22
- D. Sottrai 21



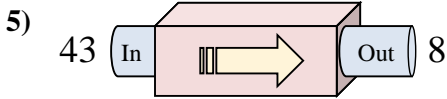
- A. Aggiungi 13
- B. Aggiungi 8
- C. Aggiungi 10
- D. Sottrai 8



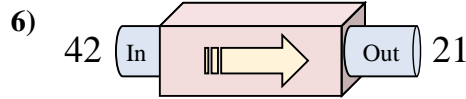
- A. Aggiungi 22
- B. Aggiungi 17
- C. Aggiungi 20
- D. Sottrai 25



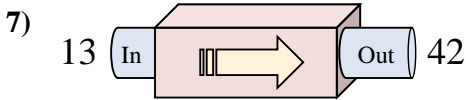
- A. Sottrai 15
- B. Sottrai 13
- C. Sottrai 14
- D. Sottrai 17



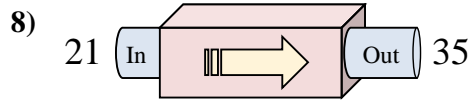
- A. Sottrai 30
- B. Aggiungi 38
- C. Sottrai 35
- D. Sottrai 37



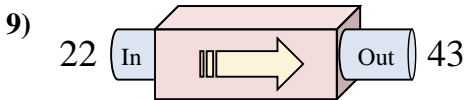
- A. Sottrai 22
- B. Aggiungi 25
- C. Sottrai 16
- D. Sottrai 21



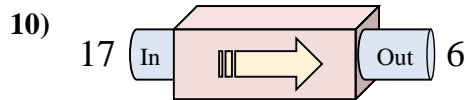
- A. Sottrai 26
- B. Aggiungi 32
- C. Aggiungi 24
- D. Aggiungi 29



- A. Aggiungi 14
- B. Sottrai 12
- C. Aggiungi 10
- D. Sottrai 17



- A. Aggiungi 20
- B. Aggiungi 26
- C. Aggiungi 24
- D. Aggiungi 21



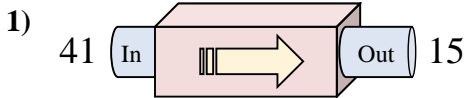
- A. Sottrai 11
- B. Sottrai 16
- C. Aggiungi 10
- D. Aggiungi 9

Risposte

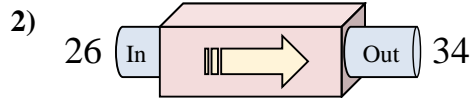
1. _____
2. _____
3. _____
4. _____
5. _____
6. _____
7. _____
8. _____
9. _____
10. _____



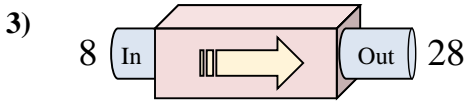
Determina quale regola viene usata nelle seguenti funzioni.



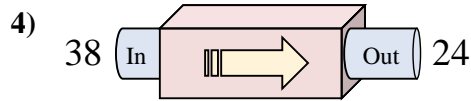
- A. Sottrai 26
- B. Aggiungi 31
- C. Aggiungi 22
- D. Sottrai 21



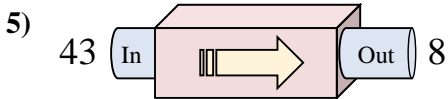
- A. Aggiungi 13
- B. Aggiungi 8
- C. Aggiungi 10
- D. Sottrai 8



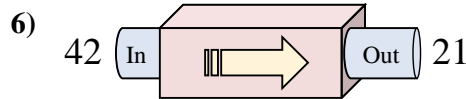
- A. Aggiungi 22
- B. Aggiungi 17
- C. Aggiungi 20
- D. Sottrai 25



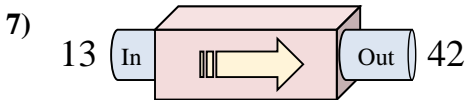
- A. Sottrai 15
- B. Sottrai 13
- C. Sottrai 14
- D. Sottrai 17



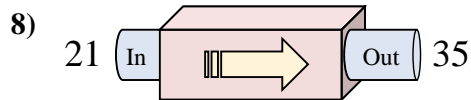
- A. Sottrai 30
- B. Aggiungi 38
- C. Sottrai 35
- D. Sottrai 37



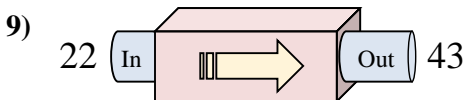
- A. Sottrai 22
- B. Aggiungi 25
- C. Sottrai 16
- D. Sottrai 21



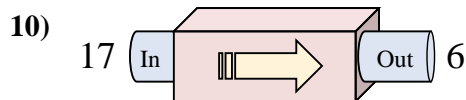
- A. Sottrai 26
- B. Aggiungi 32
- C. Aggiungi 24
- D. Aggiungi 29



- A. Aggiungi 14
- B. Sottrai 12
- C. Aggiungi 10
- D. Sottrai 17



- A. Aggiungi 20
- B. Aggiungi 26
- C. Aggiungi 24
- D. Aggiungi 21



- A. Sottrai 11
- B. Sottrai 16
- C. Aggiungi 10
- D. Aggiungi 9

Risposte

- 1. **A**
- 2. **B**
- 3. **C**
- 4. **C**
- 5. **C**
- 6. **D**
- 7. **D**
- 8. **A**
- 9. **D**
- 10. **A**