



**Risolvi ogni problema.****Risposte**

1) Quale lettera indica correttamente -46?



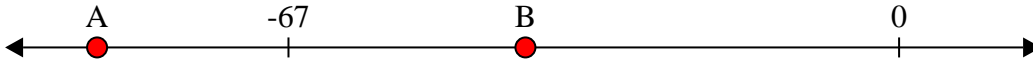
1. \_\_\_\_\_

2) Quale lettera indica correttamente -88?




2. \_\_\_\_\_

3) Quale lettera indica correttamente -41?




3. \_\_\_\_\_

4) Quale lettera indica correttamente -83?




4. \_\_\_\_\_

5) Quale lettera indica correttamente -24?




5. \_\_\_\_\_

6) Quale lettera indica correttamente -10?




6. \_\_\_\_\_

7) Quale lettera indica correttamente -103?




7. \_\_\_\_\_

8) Quale lettera indica correttamente -43?




8. \_\_\_\_\_

9) Quale lettera indica correttamente -33?



9. \_\_\_\_\_

10) Quale lettera indica correttamente -10?



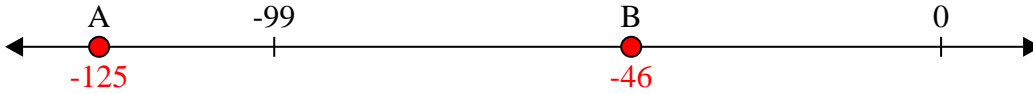
10. \_\_\_\_\_



Risolvi ogni problema.

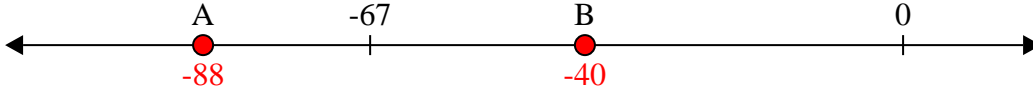
**Risposte**

1) Quale lettera indica correttamente -46?



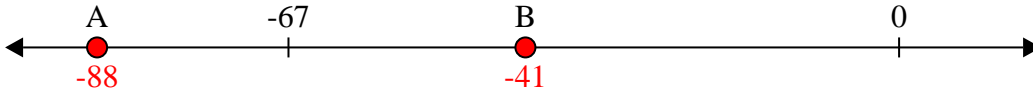
1.     **B**    

2) Quale lettera indica correttamente -88?



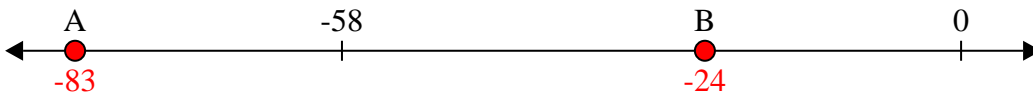
2.     **A**    

3) Quale lettera indica correttamente -41?



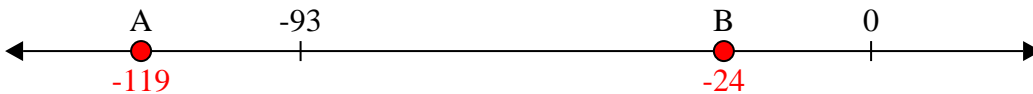
3.     **B**    

4) Quale lettera indica correttamente -83?



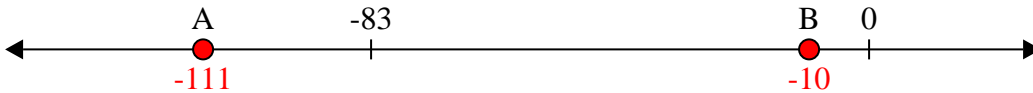
4.     **A**    

5) Quale lettera indica correttamente -24?




5.     **B**    

6) Quale lettera indica correttamente -10?



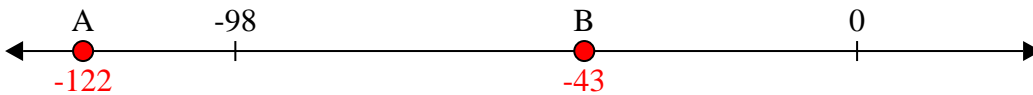
6.     **B**    

7) Quale lettera indica correttamente -103?



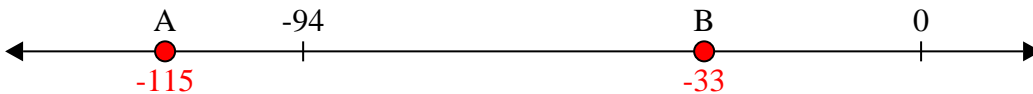
7.     **A**    

8) Quale lettera indica correttamente -43?




8.     **B**    

9) Quale lettera indica correttamente -33?



9.     **B**    

10) Quale lettera indica correttamente -10?



10.     **B**